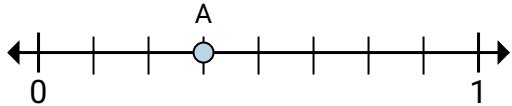




Solve each problem.

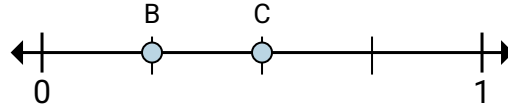
Ex)



A. This numberline is divided into how many pieces?

B. What is the location of A (written as a fraction)?

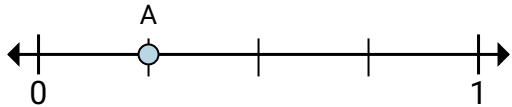
1)



A. On this numberline what is the value of 1 written as a fraction?

B. On this numberline from B to C is how far (written as a fraction)?

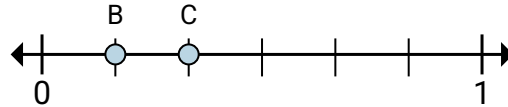
2)



A. This numberline is divided into how many pieces?

B. What is the location of A (written as a fraction)?

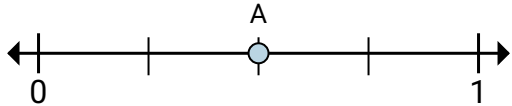
3)



A. On this numberline what is the value of 0 written as a fraction?

B. On this numberline from B to C is how far (written as a fraction)?

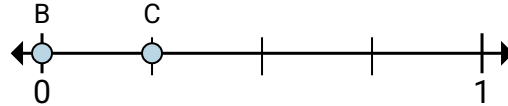
4)



A. This numberline is divided into how many pieces?

B. What is the location of A (written as a fraction)?

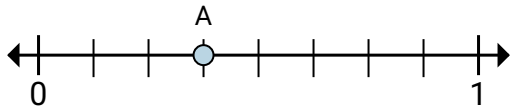
5)



A. On this numberline what is the value of 1 written as a fraction?

B. On this numberline from B to C is how far (written as a fraction)?

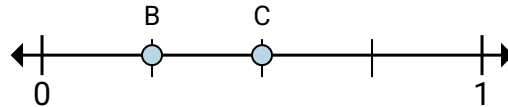
6)



A. This numberline is divided into how many pieces?

B. What is the location of A (written as a fraction)?

7)



A. On this numberline what is the value of 1 written as a fraction?

B. On this numberline from B to C is how far (written as a fraction)?

AnswersEx. 8 $\frac{3}{8}$

1. _____

2. _____

3. _____

4. _____

5. _____

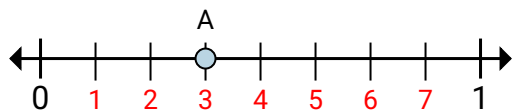
6. _____

7. _____



Solve each problem.

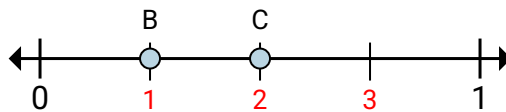
Ex)



A. This numberline is divided into how many pieces?

B. What is the location of A (written as a fraction)?

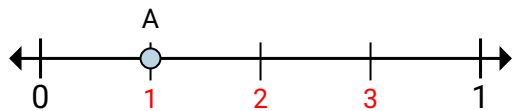
1)



A. On this numberline what is the value of 1 written as a fraction?

B. On this numberline from B to C is how far (written as a fraction)?

2)



A. This numberline is divided into how many pieces?

B. What is the location of A (written as a fraction)?

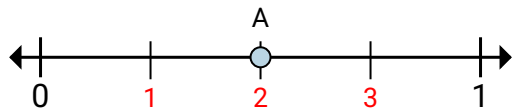
3)



A. On this numberline what is the value of 0 written as a fraction?

B. On this numberline from B to C is how far (written as a fraction)?

4)



A. This numberline is divided into how many pieces?

B. What is the location of A (written as a fraction)?

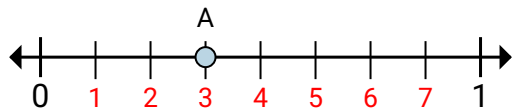
5)



A. On this numberline what is the value of 1 written as a fraction?

B. On this numberline from B to C is how far (written as a fraction)?

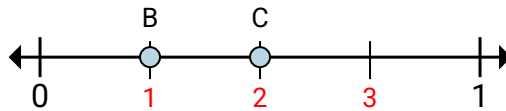
6)



A. This numberline is divided into how many pieces?

B. What is the location of A (written as a fraction)?

7)



A. On this numberline what is the value of 1 written as a fraction?

B. On this numberline from B to C is how far (written as a fraction)?

Answers

Ex.	8	$\frac{3}{8}$
1.	$\frac{4}{4}$	$\frac{1}{4}$
2.	4	$\frac{1}{4}$
3.	$\frac{0}{6}$	$\frac{1}{6}$
4.	4	$\frac{2}{4}$
5.	$\frac{4}{4}$	$\frac{1}{4}$
6.	8	$\frac{3}{8}$
7.	$\frac{4}{4}$	$\frac{1}{4}$