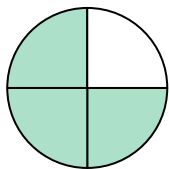


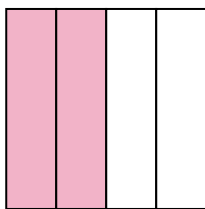
**Determine which letter best describes the shaded portion.****Answers**

1)



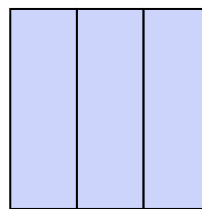
- A. one-quarter
B. three-fourths
C. one-half

2)



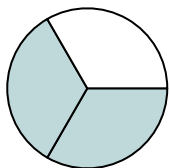
- A. one-half
B. four-fourths
C. two-quarters

3)




- A. one-half
B. three-thirds
C. two-quarters

4)



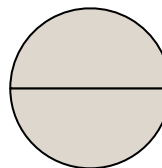
- A. two-thirds
B. two-halves
C. one-half

5)



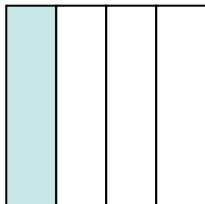
- A. four-quarters
B. two-fourths
C. one-half

6)




- A. two-fourths
B. one-quarter
C. two-halves

7)




- A. one-fourth
B. one-half
C. four-quarters

8)



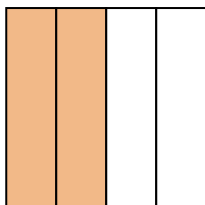
- A. four-quarters
B. three-quarters
C. one-fourth

9)



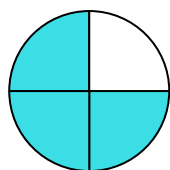
- A. one-fourth
B. two-halves
C. two-fourths

10)




- A. two-halves
B. four-quarters
C. two-fourths

11)



- A. two-quarters
B. three-quarters
C. two-halves

12)



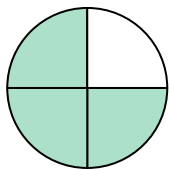
- A. two-halves
B. one-fourth
C. one-third

1. _____
2. _____
3. _____
4. _____
5. _____
6. _____
7. _____
8. _____
9. _____
10. _____
11. _____
12. _____



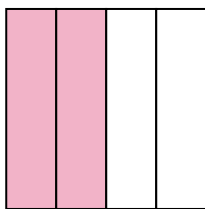
Determine which letter best describes the shaded portion.

1)



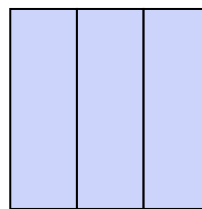
- A. one-quarter
B. three-fourths
C. one-half

2)



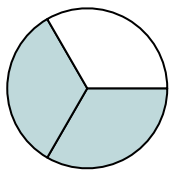
- A. one-half
B. four-fourths
C. two-quarters

3)




- A. one-half
B. three-thirds
C. two-quarters

4)



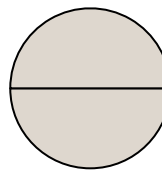
- A. two-thirds
B. two-halves
C. one-half

5)



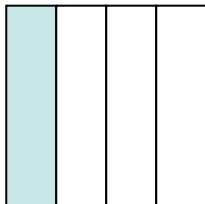
- A. four-quarters
B. two-fourths
C. one-half

6)




- A. two-fourths
B. one-quarter
C. two-halves

7)




- A. one-fourth
B. one-half
C. four-quarters

8)



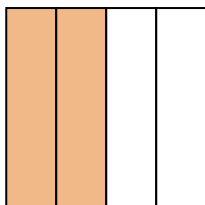
- A. four-quarters
B. three-quarters
C. one-fourth

9)



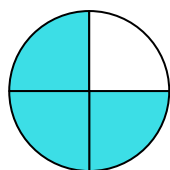
- A. one-fourth
B. two-halves
C. two-fourths

10)




- A. two-halves
B. four-quarters
C. two-fourths

11)



- A. two-quarters
B. three-quarters
C. two-halves

12)



- A. two-halves
B. one-fourth
C. one-third

Answers

1. **B**
2. **C**
3. **B**
4. **A**
5. **C**
6. **C**
7. **A**
8. **A**
9. **B**
10. **C**
11. **B**
12. **C**