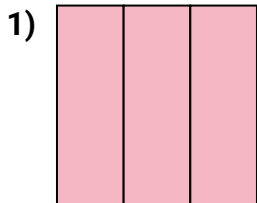
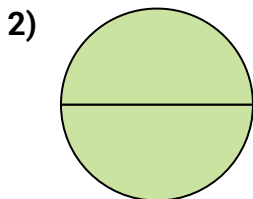




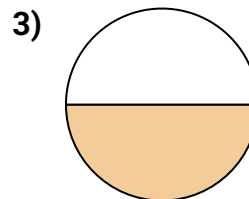
Determine which letter best describes the shaded portion.

**Answers**

- A. four-fourths  
B. three-thirds  
C. two-halves



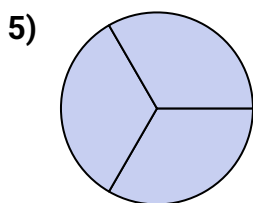
- A. two-halves  
B. two-fourths  
C. three-quarters



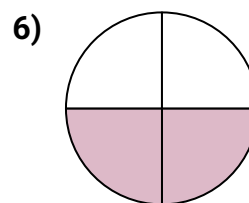
- A. three-quarters  
B. two-halves  
C. one-half



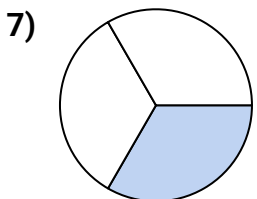
- A. one-half  
B. two-halves  
C. two-quarters



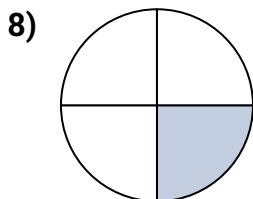
- A. four-quarters  
B. two-halves  
C. three-thirds



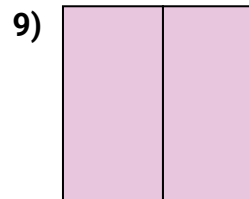
- A. one-fourth  
B. two-quarters  
C. three-fourths



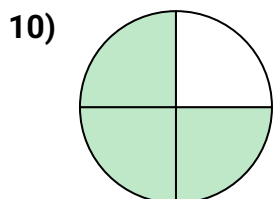
- A. three-fourths  
B. one-quarter  
C. one-third



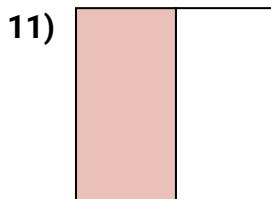
- A. four-quarters  
B. one-fourth  
C. two-halves



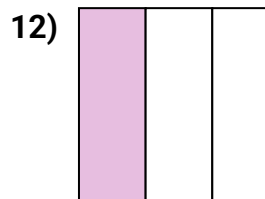
- A. four-quarters  
B. two-halves  
C. one-quarter



- A. two-quarters  
B. one-half  
C. three-quarters



- A. one-half  
B. four-quarters  
C. one-fourth



- A. one-fourth  
B. one-third  
C. four-fourths

1. \_\_\_\_\_

2. \_\_\_\_\_

3. \_\_\_\_\_

4. \_\_\_\_\_

5. \_\_\_\_\_

6. \_\_\_\_\_

7. \_\_\_\_\_

8. \_\_\_\_\_

9. \_\_\_\_\_

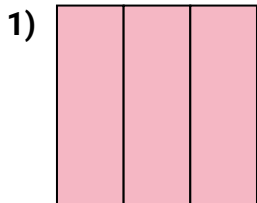
10. \_\_\_\_\_

11. \_\_\_\_\_

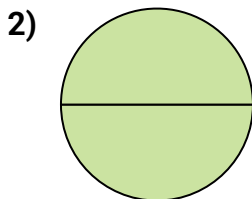
12. \_\_\_\_\_



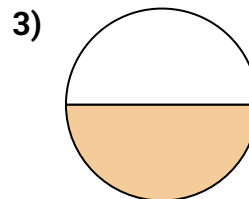
Determine which letter best describes the shaded portion.

**Answers**

- A. four-fourths  
B. three-thirds  
C. two-halves



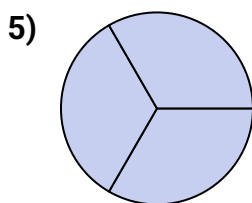
- A. two-halves  
B. two-fourths  
C. three-quarters



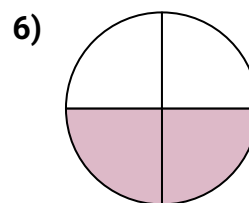
- A. three-quarters  
B. two-halves  
C. one-half



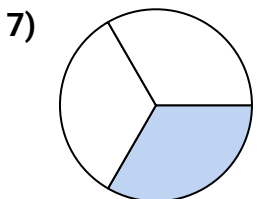
- A. one-half  
B. two-halves  
C. two-quarters



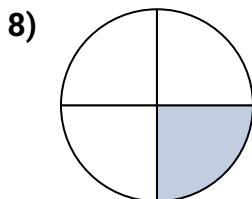
- A. four-quarters  
B. two-halves  
C. three-thirds



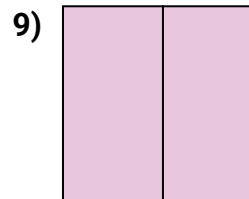
- A. one-fourth  
B. two-quarters  
C. three-fourths



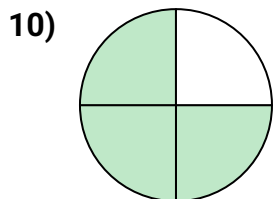
- A. three-fourths  
B. one-quarter  
C. one-third



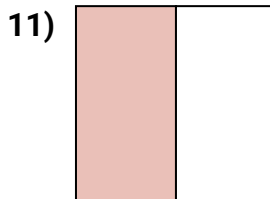
- A. four-quarters  
B. one-fourth  
C. two-halves



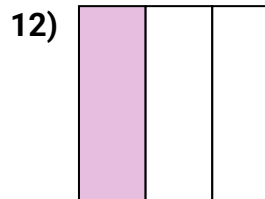
- A. four-quarters  
B. two-halves  
C. one-quarter



- A. two-quarters  
B. one-half  
C. three-quarters



- A. one-half  
B. four-quarters  
C. one-fourth



- A. one-fourth  
B. one-third  
C. four-fourths

1. **B**2. **A**3. **C**4. **C**5. **C**6. **B**7. **C**8. **B**9. **B**10. **C**11. **A**12. **B**