
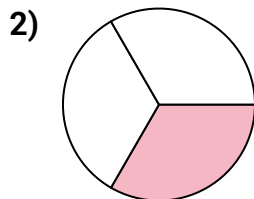




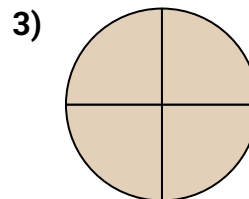
Determine which letter best describes the shaded portion.

Answers

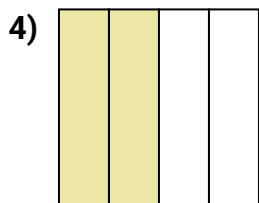
- A. one-quarter
B. four-quarters
C. two-halves



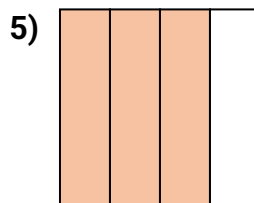
- A. one-third
B. one-fourth
C. three-quarters



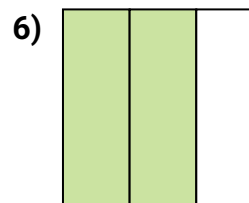
- A. one-fourth
B. two-halves
C. four-quarters



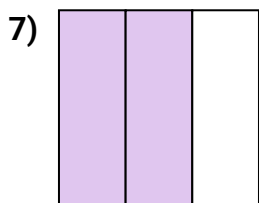
- A. two-halves
B. one-fourth
C. two-fourths



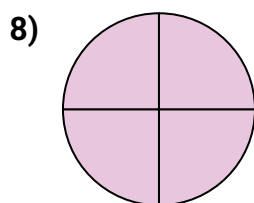
- A. four-fourths
B. three-quarters
C. one-half



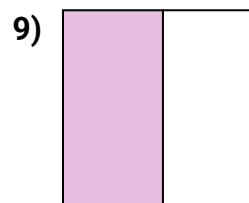
- A. two-thirds
B. three-quarters
C. one-half



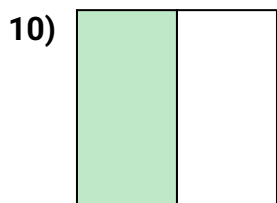
- A. four-fourths
B. two-thirds
C. one-half



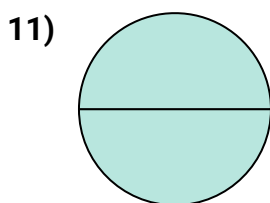
- A. two-quarters
B. four-fourths
C. three-quarters



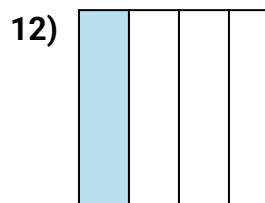
- A. one-half
B. three-quarters
C. one-fourth



- A. one-quarter
B. one-half
C. three-quarters



- A. four-fourths
B. two-halves
C. two-fourths



- A. two-halves
B. one-fourth
C. four-quarters

1. _____

2. _____

3. _____

4. _____

5. _____

6. _____

7. _____

8. _____

9. _____


10. _____

11. _____

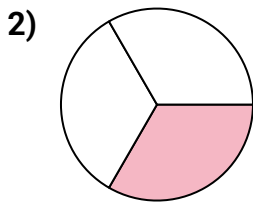
12. _____



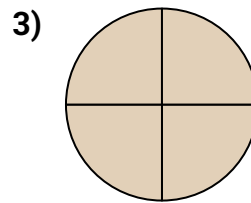
Determine which letter best describes the shaded portion.

Answers

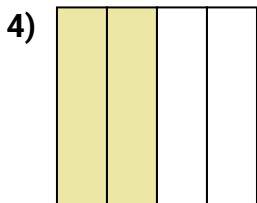
- A. one-quarter
B. four-quarters
C. two-halves



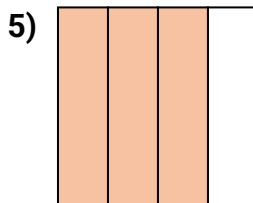
- A. one-third
B. one-fourth
C. three-quarters



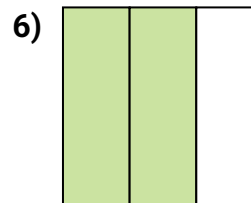
- A. one-fourth
B. two-halves
C. four-quarters



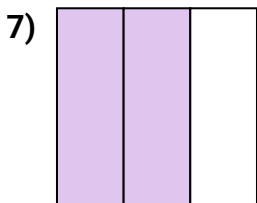
- A. two-halves
B. one-fourth
C. two-fourths



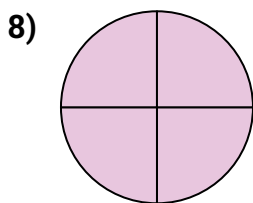
- A. four-fourths
B. three-quarters
C. one-half



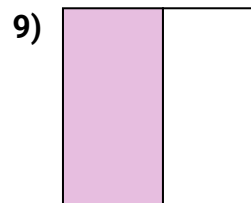
- A. two-thirds
B. three-quarters
C. one-half



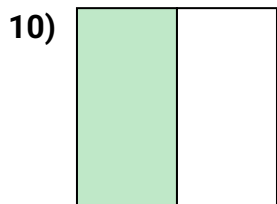
- A. four-fourths
B. two-thirds
C. one-half



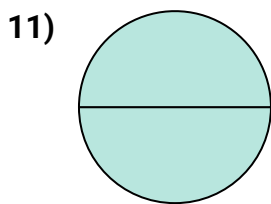
- A. two-quarters
B. four-fourths
C. three-quarters



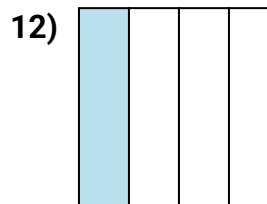
- A. one-half
B. three-quarters
C. one-fourth



- A. one-quarter
B. one-half
C. three-quarters



- A. four-fourths
B. two-halves
C. two-fourths



- A. two-halves
B. one-fourth
C. four-quarters

1. **C**2. **A**3. **C**4. **C**5. **B**6. **A**7. **B**8. **B**9. **A**10. **B**11. **B**12. **B**