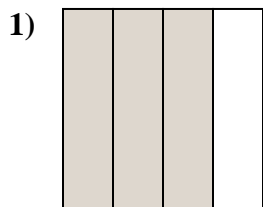
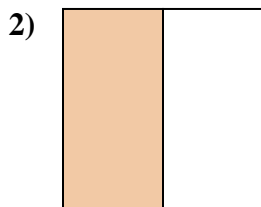
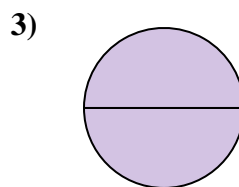


**Determine which letter best describes the shaded portion.****Answers**


- A. three-fourths  
B. one-quarter  
C. four-quarters



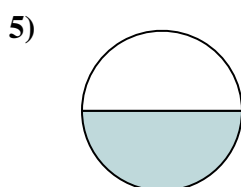
- A. one-half  
B. one-quarter  
C. two-halves



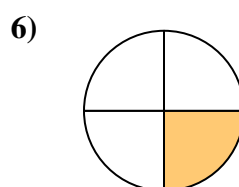
- A. two-halves  
B. four-fourths  
C. one-fourth



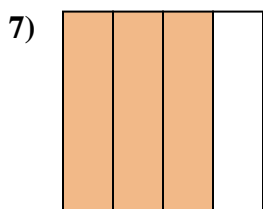
- A. two-halves  
B. two-fourths  
C. four-quarters



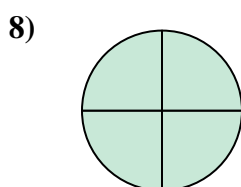
- A. one-quarter  
B. two-halves  
C. one-half



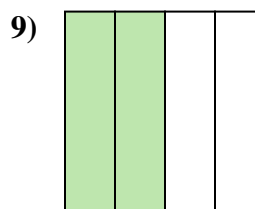
- A. one-quarter  
B. two-halves  
C. two-quarters



- A. four-fourths  
B. one-fourth  
C. three-fourths



- A. two-halves  
B. one-half  
C. four-quarters



- A. two-quarters  
B. one-quarter  
C. four-quarters

1. \_\_\_\_\_

2. \_\_\_\_\_

3. \_\_\_\_\_

4. \_\_\_\_\_

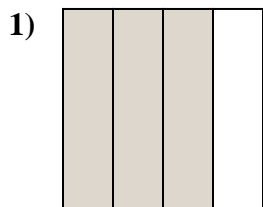
5. \_\_\_\_\_

6. \_\_\_\_\_

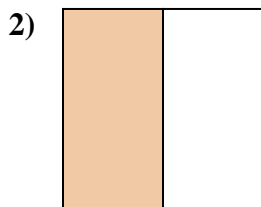
7. \_\_\_\_\_

8. \_\_\_\_\_

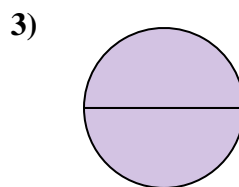
9. \_\_\_\_\_

**Determine which letter best describes the shaded portion.****Answers**


- A. three-fourths  
B. one-quarter  
C. four-quarters



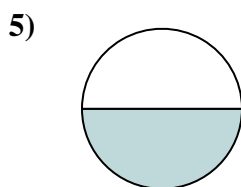
- A. one-half  
B. one-quarter  
C. two-halves



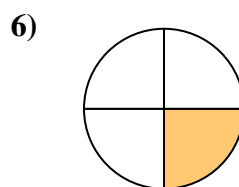
- A. two-halves  
B. four-fourths  
C. one-fourth



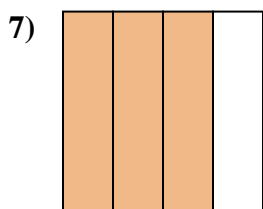
- A. two-halves  
B. two-fourths  
C. four-quarters



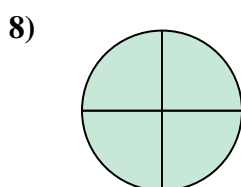
- A. one-quarter  
B. two-halves  
C. one-half



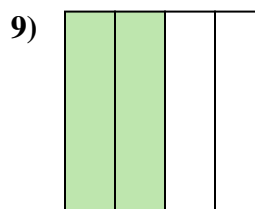
- A. one-quarter  
B. two-halves  
C. two-quarters



- A. four-fourths  
B. one-fourth  
C. three-fourths



- A. two-halves  
B. one-half  
C. four-quarters



- A. two-quarters  
B. one-quarter  
C. four-quarters

1. **A**2. **A**3. **A**4. **A**5. **C**6. **A**7. **C**8. **C**9. **A**