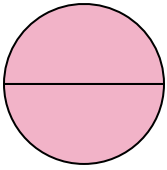




Determine which letter best describes the shaded portion.


**Answers**

1)



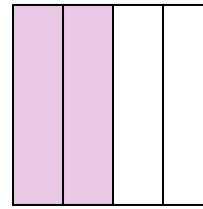
- A. two-halves
- B. one-quarter
- C. two-quarters

2)



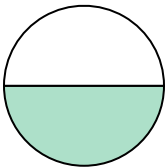
- A. one-half
- B. three-fourths
- C. two-halves

3)



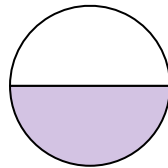
- A. two-fourths
- B. one-fourth
- C. three-fourths

4)



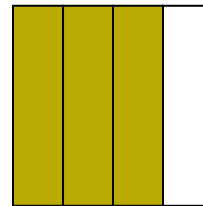
- A. two-fourths
- B. four-fourths
- C. one-half

5)



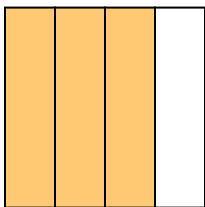
- A. four-fourths
- B. one-half
- C. two-quarters

6)



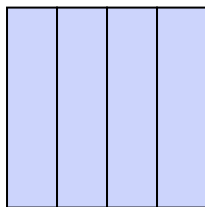
- A. one-fourth
- B. two-fourths
- C. three-fourths

7)



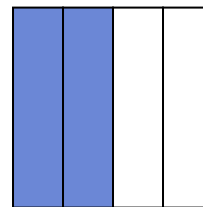
- A. two-fourths
- B. four-quarters
- C. three-quarters

8)



- A. two-quarters
- B. one-half
- C. four-quarters

9)

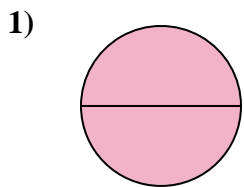


- A. two-halves
- B. two-fourths
- C. one-fourth


1. \_\_\_\_\_
2. \_\_\_\_\_
3. \_\_\_\_\_
4. \_\_\_\_\_
5. \_\_\_\_\_
6. \_\_\_\_\_
7. \_\_\_\_\_
8. \_\_\_\_\_
9. \_\_\_\_\_



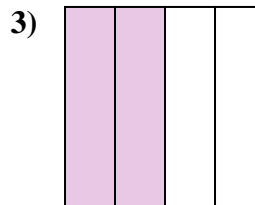
Determine which letter best describes the shaded portion.



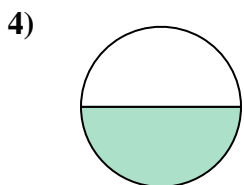
- A. two-halves
- B. one-quarter
- C. two-quarters



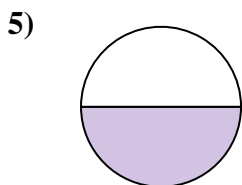
- A. one-half
- B. three-fourths
- C. two-halves



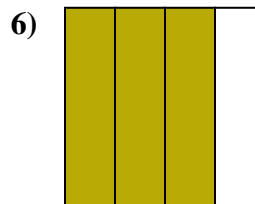
- A. two-fourths
- B. one-fourth
- C. three-fourths



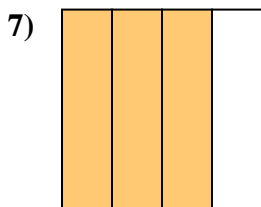
- A. two-fourths
- B. four-fourths
- C. one-half



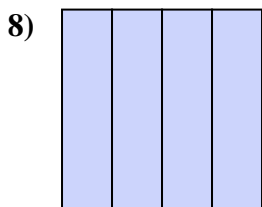
- A. four-fourths
- B. one-half
- C. two-quarters



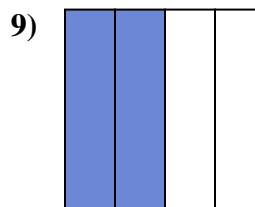
- A. one-fourth
- B. two-fourths
- C. three-fourths



- A. two-fourths
- B. four-quarters
- C. three-quarters



- A. two-quarters
- B. one-half
- C. four-quarters



- A. two-halves
- B. two-fourths
- C. one-fourth

**Answers**

1.   **A**  

2.   **C**  

3.   **A**  

4.   **C**  

5.   **B**  

6.   **C**  

7.   **C**  

8.   **C**  

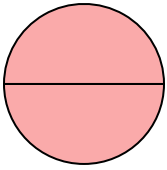
9.   **B**



Determine which letter best describes the shaded portion.


**Answers**

1)



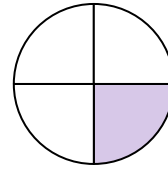
- A. one-half
- B. two-quarters
- C. two-halves

2)



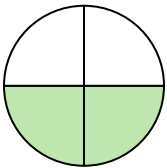
- A. two-quarters
- B. four-fourths
- C. one-half

3)




- A. two-quarters
- B. one-quarter
- C. one-half

4)



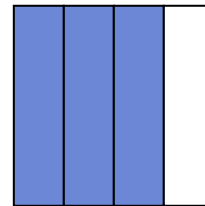
- A. four-fourths
- B. two-fourths
- C. one-half

5)



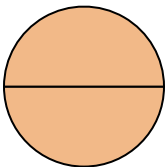
- A. one-half
- B. three-quarters
- C. one-fourth

6)



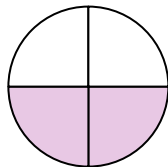
- A. one-half
- B. three-fourths
- C. four-quarters

7)



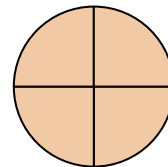
- A. two-quarters
- B. two-halves
- C. one-half

8)



- A. two-fourths
- B. one-half
- C. four-fourths

9)

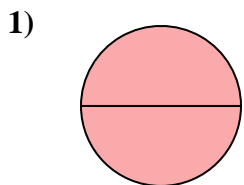


- A. three-quarters
- B. two-halves
- C. four-fourths

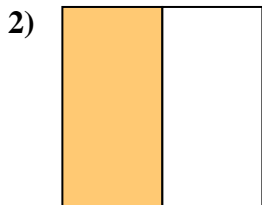
- 1. \_\_\_\_\_
- 2. \_\_\_\_\_
- 3. \_\_\_\_\_
- 4. \_\_\_\_\_
- 5. \_\_\_\_\_
- 6. \_\_\_\_\_
- 7. \_\_\_\_\_
- 8. \_\_\_\_\_
- 9. \_\_\_\_\_



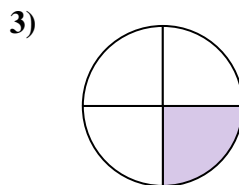
Determine which letter best describes the shaded portion.



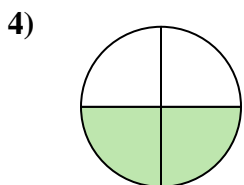
- A. one-half
- B. two-quarters
- C. two-halves



- A. two-quarters
- B. four-fourths
- C. one-half



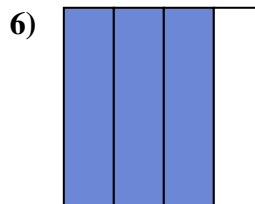
- A. two-quarters
- B. one-quarter
- C. one-half



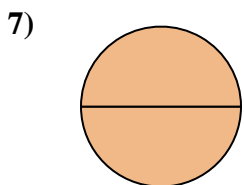
- A. four-fourths
- B. two-fourths
- C. one-half



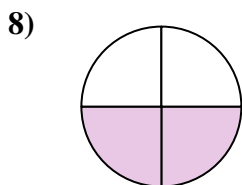
- A. one-half
- B. three-quarters
- C. one-fourth



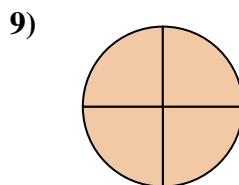
- A. one-half
- B. three-fourths
- C. four-quarters



- A. two-quarters
- B. two-halves
- C. one-half



- A. two-fourths
- B. one-half
- C. four-fourths



- A. three-quarters
- B. two-halves
- C. four-fourths

**Answers**

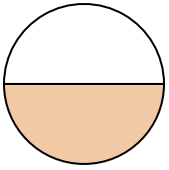
- 1.     **C**
- 2.     **C**
- 3.     **B**
- 4.     **B**
- 5.     **A**
- 6.     **B**
- 7.     **B**
- 8.     **A**
- 9.     **C**



Determine which letter best describes the shaded portion.

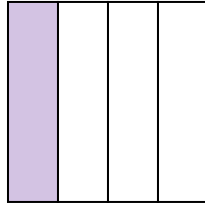
**Answers**

1)



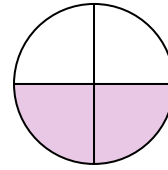
- A. three-fourths
- B. one-half
- C. two-fourths

2)



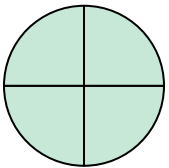
- A. one-quarter
- B. three-quarters
- C. two-halves

3)



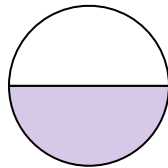
- A. one-fourth
- B. one-half
- C. two-quarters

4)




- A. two-halves
- B. four-fourths
- C. three-fourths

5)




- A. one-half
- B. two-quarters
- C. four-fourths

6)



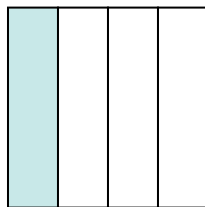
- A. two-halves
- B. one-fourth
- C. two-quarters

7)



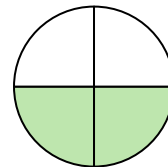
- A. one-half
- B. two-halves
- C. one-fourth

8)



- A. one-quarter
- B. three-quarters
- C. two-halves

9)



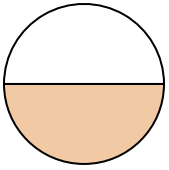
- A. two-fourths
- B. one-quarter
- C. one-half

- 1. \_\_\_\_\_
- 2. \_\_\_\_\_
- 3. \_\_\_\_\_
- 4. \_\_\_\_\_
- 5. \_\_\_\_\_
- 6. \_\_\_\_\_
- 7. \_\_\_\_\_
- 8. \_\_\_\_\_
- 9. \_\_\_\_\_



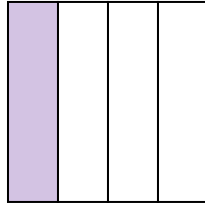
Determine which letter best describes the shaded portion.

1)



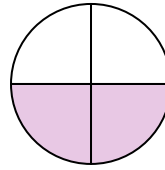
- A. three-fourths
- B. one-half
- C. two-fourths

2)



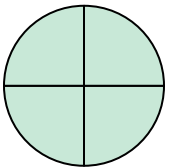
- A. one-quarter
- B. three-quarters
- C. two-halves

3)



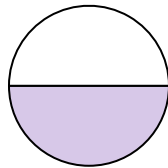
- A. one-fourth
- B. one-half
- C. two-quarters

4)




- A. two-halves
- B. four-fourths
- C. three-fourths

5)




- A. one-half
- B. two-quarters
- C. four-fourths

6)



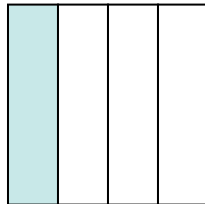
- A. two-halves
- B. one-fourth
- C. two-quarters

7)



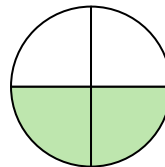
- A. one-half
- B. two-halves
- C. one-fourth

8)



- A. one-quarter
- B. three-quarters
- C. two-halves

9)



- A. two-fourths
- B. one-quarter
- C. one-half

**Answers**

1. **B**

2. **A**

3. **C**

4. **B**

5. **A**

6. **A**

7. **B**

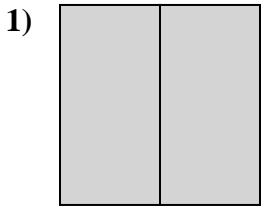
8. **A**

9. **A**

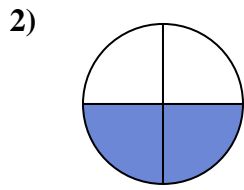


Determine which letter best describes the shaded portion.

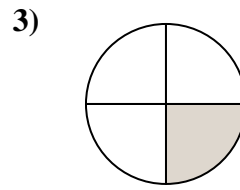
**Answers**



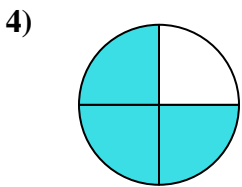
- A. two-quarters
- B. two-halves
- C. three-fourths



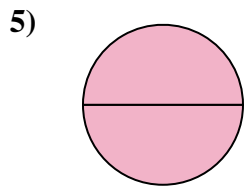
- A. four-fourths
- B. three-fourths
- C. two-fourths



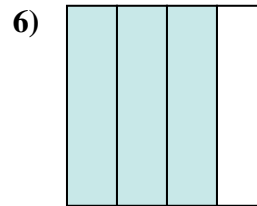
- A. two-quarters
- B. one-fourth
- C. two-halves



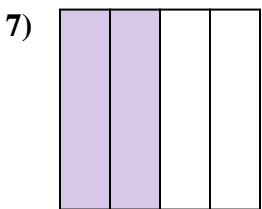
- A. two-fourths
- B. three-fourths
- C. two-halves



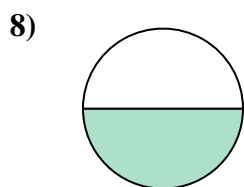
- A. one-fourth
- B. three-fourths
- C. two-halves



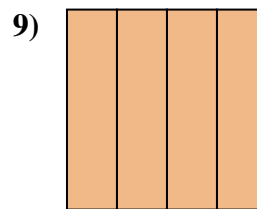
- A. one-fourth
- B. three-fourths
- C. two-halves



- A. one-quarter
- B. three-fourths
- C. two-quarters



- A. two-halves
- B. one-half
- C. two-fourths




- A. four-quarters
- B. three-quarters
- C. one-half

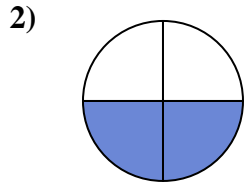
- 1. \_\_\_\_\_
- 2. \_\_\_\_\_
- 3. \_\_\_\_\_
- 4. \_\_\_\_\_
- 5. \_\_\_\_\_
- 6. \_\_\_\_\_
- 7. \_\_\_\_\_
- 8. \_\_\_\_\_
- 9. \_\_\_\_\_



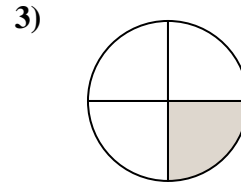
Determine which letter best describes the shaded portion.



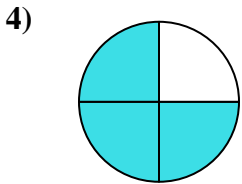
- A. two-quarters
- B. two-halves
- C. three-fourths



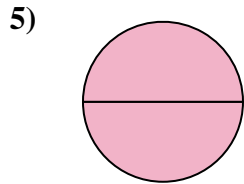
- A. four-fourths
- B. three-fourths
- C. two-fourths



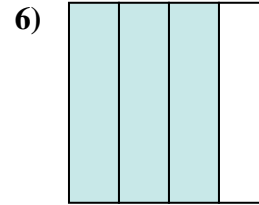
- A. two-quarters
- B. one-fourth
- C. two-halves



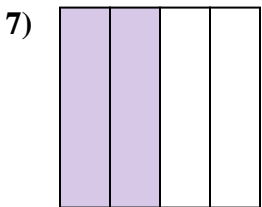
- A. two-fourths
- B. three-fourths
- C. two-halves



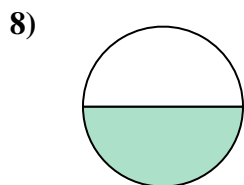
- A. one-fourth
- B. three-fourths
- C. two-halves



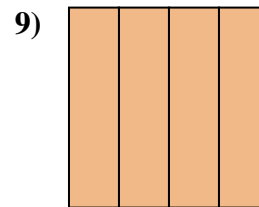
- A. one-fourth
- B. three-fourths
- C. two-halves



- A. one-quarter
- B. three-fourths
- C. two-quarters



- A. two-halves
- B. one-half
- C. two-fourths



- A. four-quarters
- B. three-quarters
- C. one-half

**Answers**

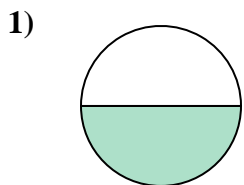
- 1.     **B**
- 2.     **C**
- 3.     **B**
- 4.     **B**
- 5.     **C**
- 6.     **B**
- 7.     **C**
- 8.     **B**
- 9.     **A**






Determine which letter best describes the shaded portion.

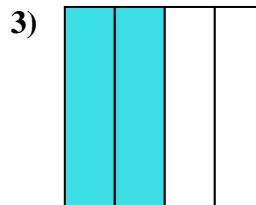
**Answers**



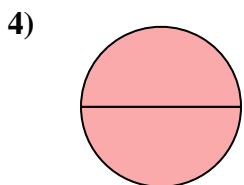
- A. one-half
- B. two-halves
- C. four-quarters



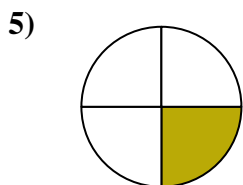
- A. two-halves
- B. one-half
- C. one-fourth



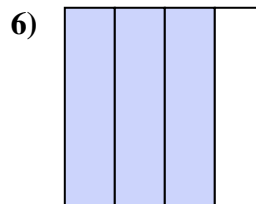
- A. three-quarters
- B. one-quarter
- C. two-quarters



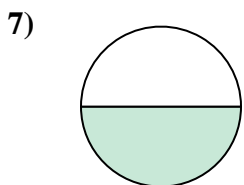
- A. two-halves
- B. three-fourths
- C. one-quarter



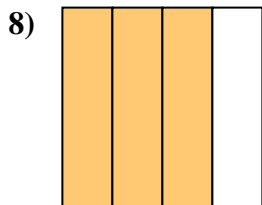
- A. four-fourths
- B. one-fourth
- C. two-quarters



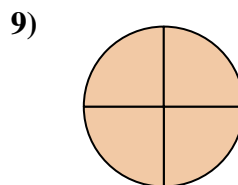
- A. three-fourths
- B. four-fourths
- C. one-half



- A. two-quarters
- B. two-halves
- C. one-half



- A. three-fourths
- B. one-quarter
- C. two-halves

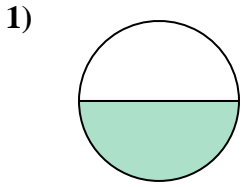


- A. two-halves
- B. three-fourths
- C. four-fourths

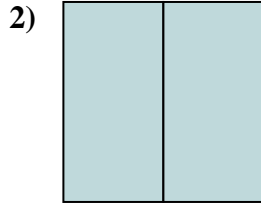
- 1. \_\_\_\_\_
- 2. \_\_\_\_\_
- 3. \_\_\_\_\_
- 4. \_\_\_\_\_
- 5. \_\_\_\_\_
- 6. \_\_\_\_\_
- 7. \_\_\_\_\_
- 8. \_\_\_\_\_
- 9. \_\_\_\_\_



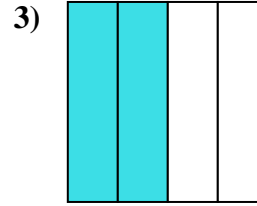
Determine which letter best describes the shaded portion.



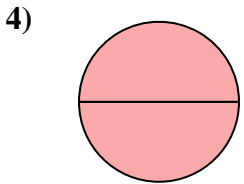
- A. one-half
- B. two-halves
- C. four-quarters



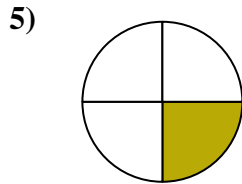
- A. two-halves
- B. one-half
- C. one-fourth



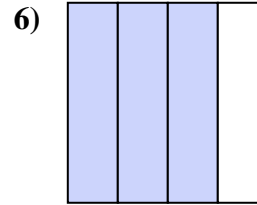
- A. three-quarters
- B. one-quarter
- C. two-quarters



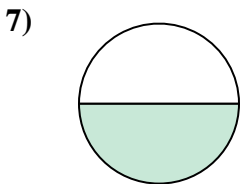
- A. two-halves
- B. three-fourths
- C. one-quarter



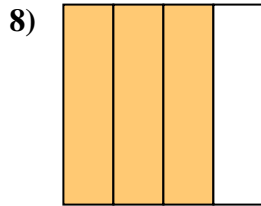
- A. four-fourths
- B. one-fourth
- C. two-quarters



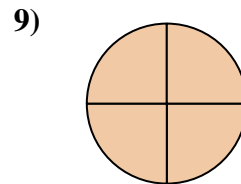
- A. three-fourths
- B. four-fourths
- C. one-half



- A. two-quarters
- B. two-halves
- C. one-half



- A. three-fourths
- B. one-quarter
- C. two-halves



- A. two-halves
- B. three-fourths
- C. four-fourths

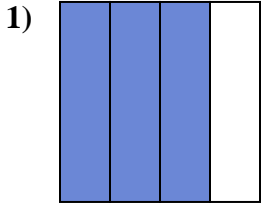
**Answers**

- 1.   **A**
- 2.   **A**
- 3.   **C**
- 4.   **A**
- 5.   **B**
- 6.   **A**
- 7.   **C**
- 8.   **A**
- 9.   **C**

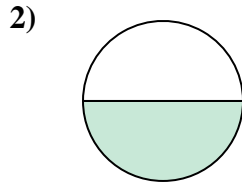


Determine which letter best describes the shaded portion.

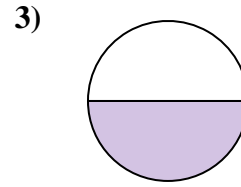
**Answers**



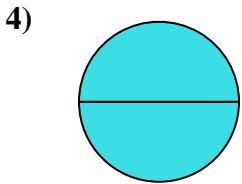
- A. four-fourths
- B. three-quarters
- C. one-quarter



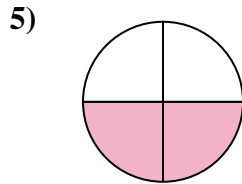
- A. one-half
- B. two-fourths
- C. one-fourth



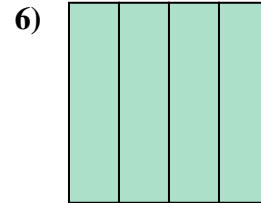
- A. four-fourths
- B. one-half
- C. two-halves



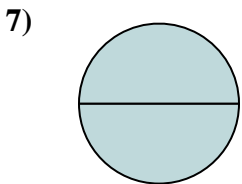
- A. one-quarter
- B. four-quarters
- C. two-halves



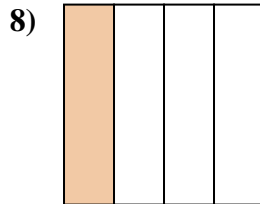
- A. two-quarters
- B. one-half
- C. four-quarters



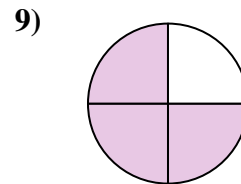
- A. four-quarters
- B. one-quarter
- C. one-half



- A. two-halves
- B. one-half
- C. three-quarters



- A. two-halves
- B. one-fourth
- C. two-quarters

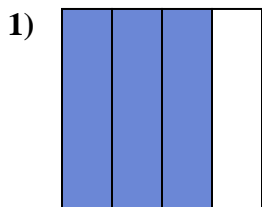


- A. four-fourths
- B. three-quarters
- C. two-halves

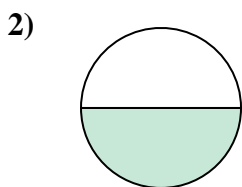
- 1. \_\_\_\_\_
- 2. \_\_\_\_\_
- 3. \_\_\_\_\_
- 4. \_\_\_\_\_
- 5. \_\_\_\_\_
- 6. \_\_\_\_\_
- 7. \_\_\_\_\_
- 8. \_\_\_\_\_
- 9. \_\_\_\_\_



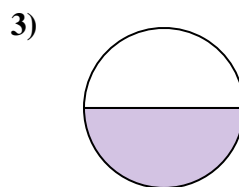
Determine which letter best describes the shaded portion.



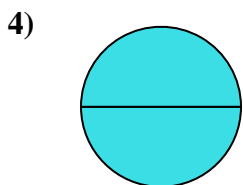
- A. four-fourths
- B. three-quarters
- C. one-quarter



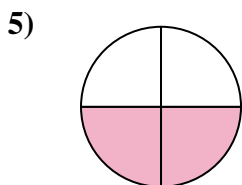
- A. one-half
- B. two-fourths
- C. one-fourth



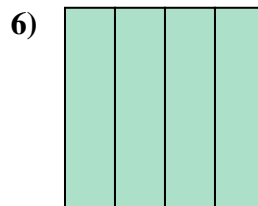
- A. four-fourths
- B. one-half
- C. two-halves



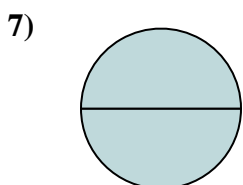
- A. one-quarter
- B. four-quarters
- C. two-halves



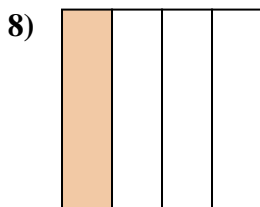
- A. two-quarters
- B. one-half
- C. four-quarters



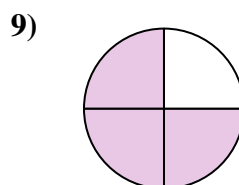
- A. four-quarters
- B. one-quarter
- C. one-half



- A. two-halves
- B. one-half
- C. three-quarters



- A. two-halves
- B. one-fourth
- C. two-quarters



- A. four-fourths
- B. three-quarters
- C. two-halves

**Answers**

1. **B**

2. **A**

3. **B**

4. **C**

5. **A**

6. **A**

7. **A**

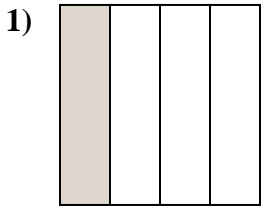
8. **B**

9. **B**

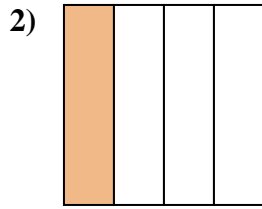


Determine which letter best describes the shaded portion.

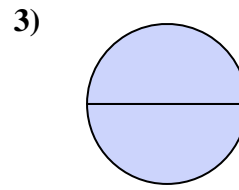
**Answers**



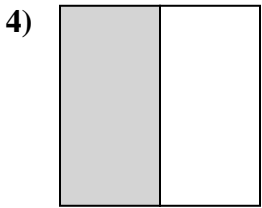
- A. one-fourth
- B. three-fourths
- C. one-half



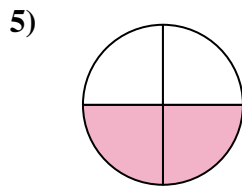
- A. one-half
- B. one-fourth
- C. two-halves



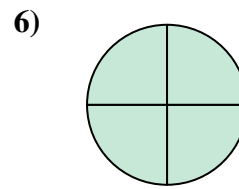
- A. one-half
- B. one-fourth
- C. two-halves



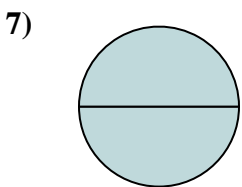
- A. two-halves
- B. four-fourths
- C. one-half



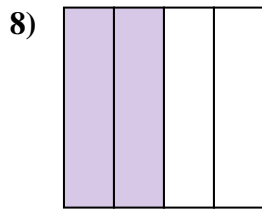
- A. two-quarters
- B. three-fourths
- C. two-halves



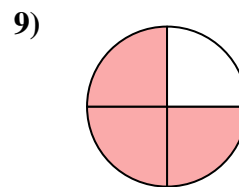
- A. two-quarters
- B. four-fourths
- C. one-half



- A. one-quarter
- B. two-halves
- C. three-fourths



- A. four-quarters
- B. two-quarters
- C. two-halves

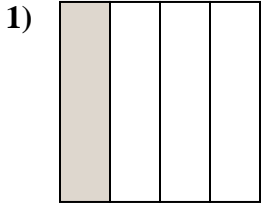


- A. two-halves
- B. three-fourths
- C. two-fourths

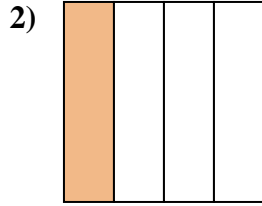
- 1. \_\_\_\_\_
- 2. \_\_\_\_\_
- 3. \_\_\_\_\_
- 4. \_\_\_\_\_
- 5. \_\_\_\_\_
- 6. \_\_\_\_\_
- 7. \_\_\_\_\_
- 8. \_\_\_\_\_
- 9. \_\_\_\_\_



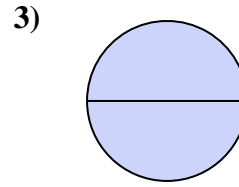
Determine which letter best describes the shaded portion.



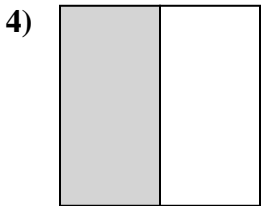
- A. one-fourth
- B. three-fourths
- C. one-half



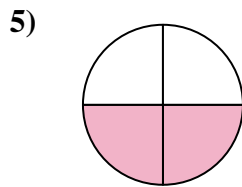
- A. one-half
- B. one-fourth
- C. two-halves



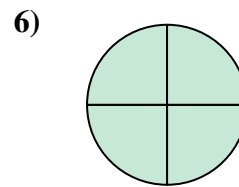
- A. one-half
- B. one-fourth
- C. two-halves



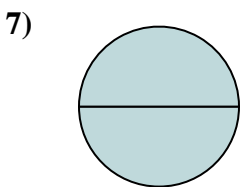
- A. two-halves
- B. four-fourths
- C. one-half



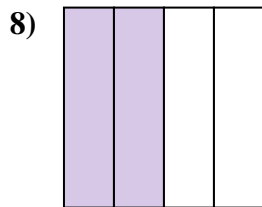
- A. two-quarters
- B. three-fourths
- C. two-halves



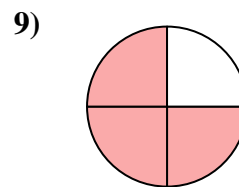
- A. two-quarters
- B. four-fourths
- C. one-half



- A. one-quarter
- B. two-halves
- C. three-fourths



- A. four-quarters
- B. two-quarters
- C. two-halves



- A. two-halves
- B. three-fourths
- C. two-fourths

**Answers**

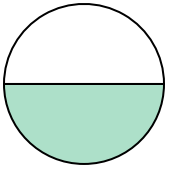
- 1.   **A**
- 2.   **B**
- 3.   **C**
- 4.   **C**
- 5.   **A**
- 6.   **B**
- 7.   **B**
- 8.   **B**
- 9.   **B**



Determine which letter best describes the shaded portion.

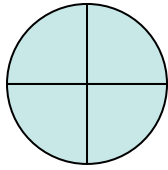
**Answers**

1)



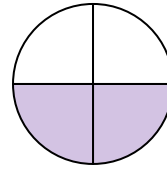
- A. two-fourths
- B. one-half
- C. one-fourth

2)



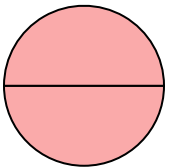
- A. two-halves
- B. four-fourths
- C. one-half

3)



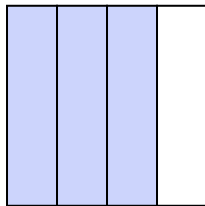
- A. two-fourths
- B. three-fourths
- C. one-quarter

4)




- A. four-quarters
- B. two-quarters
- C. two-halves

5)




- A. three-fourths
- B. two-fourths
- C. four-fourths

6)



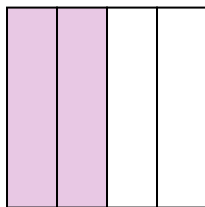
- A. one-fourth
- B. two-halves
- C. one-half

7)



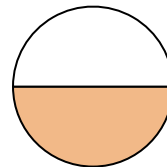
- A. two-fourths
- B. four-quarters
- C. three-quarters

8)



- A. one-half
- B. two-fourths
- C. three-quarters

9)



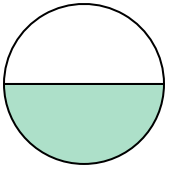
- A. two-halves
- B. two-fourths
- C. one-half

- 1. \_\_\_\_\_
- 2. \_\_\_\_\_
- 3. \_\_\_\_\_
- 4. \_\_\_\_\_
- 5. \_\_\_\_\_
- 6. \_\_\_\_\_
- 7. \_\_\_\_\_
- 8. \_\_\_\_\_
- 9. \_\_\_\_\_



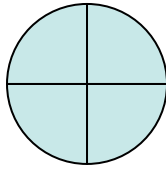
Determine which letter best describes the shaded portion.

1)



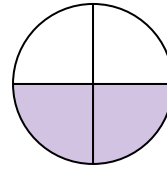
- A. two-fourths
- B. one-half
- C. one-fourth

2)



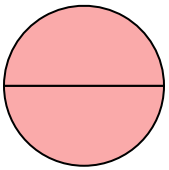
- A. two-halves
- B. four-fourths
- C. one-half

3)



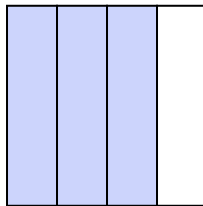
- A. two-fourths
- B. three-fourths
- C. one-quarter

4)




- A. four-quarters
- B. two-quarters
- C. two-halves

5)




- A. three-fourths
- B. two-fourths
- C. four-fourths

6)



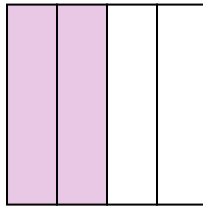
- A. one-fourth
- B. two-halves
- C. one-half

7)



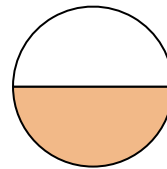
- A. two-fourths
- B. four-quarters
- C. three-quarters

8)



- A. one-half
- B. two-fourths
- C. three-quarters

9)



- A. two-halves
- B. two-fourths
- C. one-half

**Answers**

1. **B**

2. **B**

3. **A**

4. **C**

5. **A**

6. **B**

7. **B**

8. **B**


9. **C**



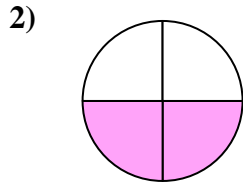


Determine which letter best describes the shaded portion.

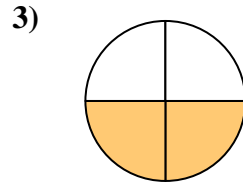
**Answers**



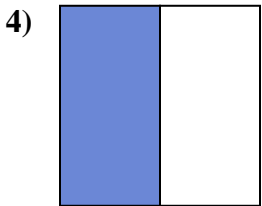
- A. two-halves
- B. one-fourth
- C. one-half



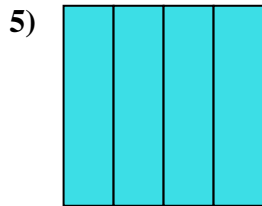
- A. two-fourths
- B. two-halves
- C. one-half



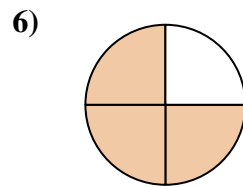
- A. two-quarters
- B. two-halves
- C. one-quarter



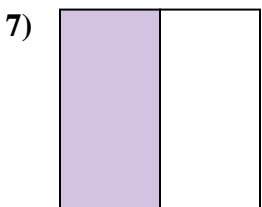
- A. three-quarters
- B. one-half
- C. four-fourths



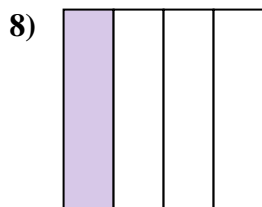
- A. two-quarters
- B. four-quarters
- C. two-halves



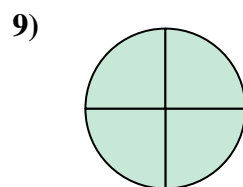
- A. three-quarters
- B. four-quarters
- C. one-quarter



- A. three-quarters
- B. four-fourths
- C. one-half



- A. two-fourths
- B. three-quarters
- C. one-fourth




- A. three-fourths
- B. two-halves
- C. four-fourths

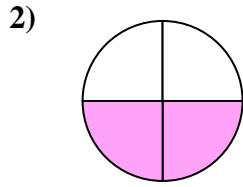
- 1. \_\_\_\_\_
- 2. \_\_\_\_\_
- 3. \_\_\_\_\_
- 4. \_\_\_\_\_
- 5. \_\_\_\_\_
- 6. \_\_\_\_\_
- 7. \_\_\_\_\_
- 8. \_\_\_\_\_
- 9. \_\_\_\_\_



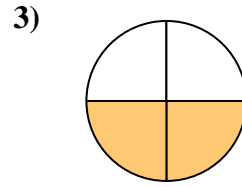
Determine which letter best describes the shaded portion.



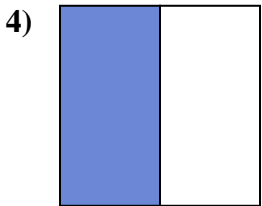
- A. two-halves
- B. one-fourth
- C. one-half



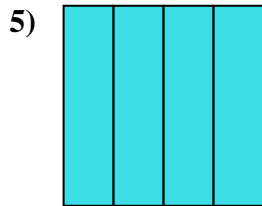
- A. two-fourths
- B. two-halves
- C. one-half



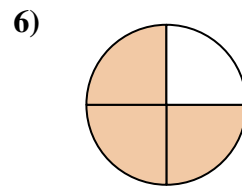
- A. two-quarters
- B. two-halves
- C. one-quarter



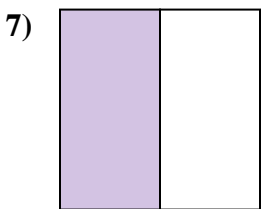
- A. three-quarters
- B. one-half
- C. four-fourths



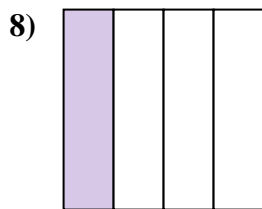
- A. two-quarters
- B. four-quarters
- C. two-halves



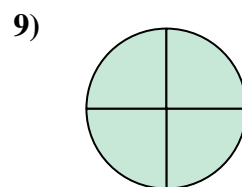
- A. three-quarters
- B. four-quarters
- C. one-quarter



- A. three-quarters
- B. four-fourths
- C. one-half



- A. two-fourths
- B. three-quarters
- C. one-fourth



- A. three-fourths
- B. two-halves
- C. four-fourths

**Answers**

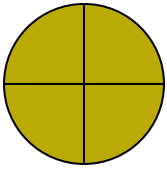
- 1.   **A**
- 2.   **A**
- 3.   **A**
- 4.   **B**
- 5.   **B**
- 6.   **A**
- 7.   **C**
- 8.   **C**
- 9.   **C**



Determine which letter best describes the shaded portion.

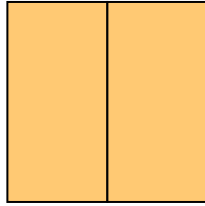
**Answers**

1)



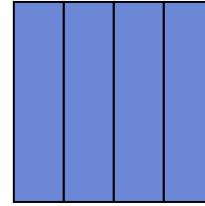
- A. two-halves
- B. four-fourths
- C. one-half

2)



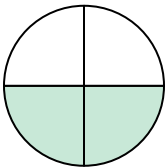
- A. one-quarter
- B. two-fourths
- C. two-halves

3)



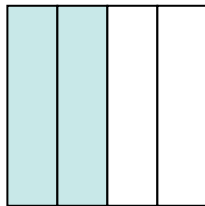
- A. two-halves
- B. two-quarters
- C. four-fourths

4)



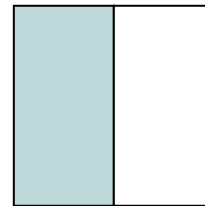
- A. two-fourths
- B. one-fourth
- C. one-half

5)




- A. four-quarters
- B. three-quarters
- C. two-fourths

6)



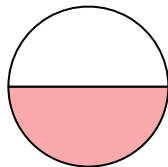
- A. one-half
- B. two-halves
- C. four-fourths

7)



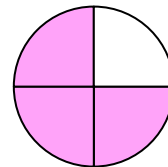
- A. one-half
- B. one-quarter
- C. two-halves

8)



- A. one-half
- B. one-quarter
- C. two-fourths

9)

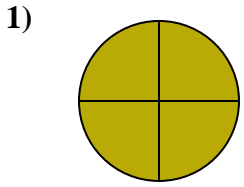


- A. three-quarters
- B. one-quarter
- C. four-quarters

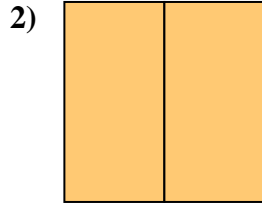
- 1. \_\_\_\_\_
- 2. \_\_\_\_\_
- 3. \_\_\_\_\_
- 4. \_\_\_\_\_
- 5. \_\_\_\_\_
- 6. \_\_\_\_\_
- 7. \_\_\_\_\_
- 8. \_\_\_\_\_
- 9. \_\_\_\_\_



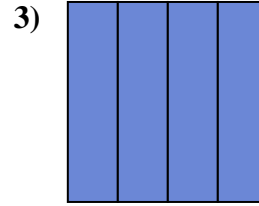
Determine which letter best describes the shaded portion.



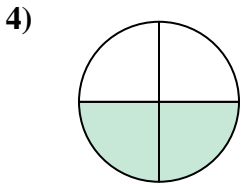
- A. two-halves
- B. four-fourths
- C. one-half



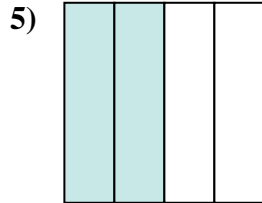
- A. one-quarter
- B. two-fourths
- C. two-halves



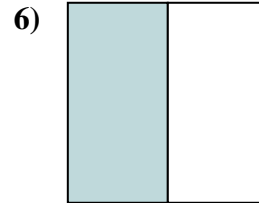
- A. two-halves
- B. two-quarters
- C. four-fourths



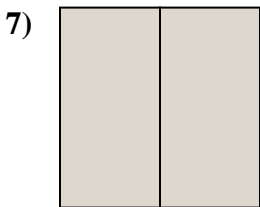
- A. two-fourths
- B. one-fourth
- C. one-half



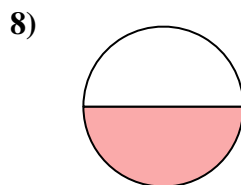
- A. four-quarters
- B. three-quarters
- C. two-fourths



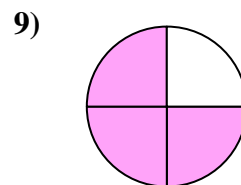
- A. one-half
- B. two-halves
- C. four-fourths



- A. one-half
- B. one-quarter
- C. two-halves



- A. one-half
- B. one-quarter
- C. two-fourths



- A. three-quarters
- B. one-quarter
- C. four-quarters

**Answers**

- 1.   **B**
- 2.   **C**
- 3.   **C**
- 4.   **A**
- 5.   **C**
- 6.   **A**
- 7.   **C**
- 8.   **A**
- 9.   **A**