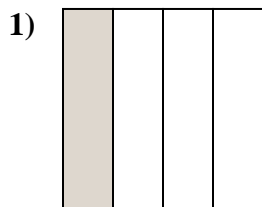
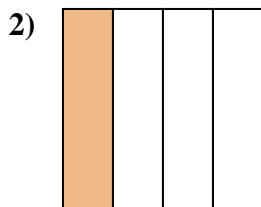
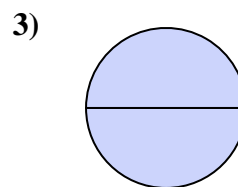


**Determine which letter best describes the shaded portion.****Answers**

- A. one-fourth
B. three-fourths
C. one-half



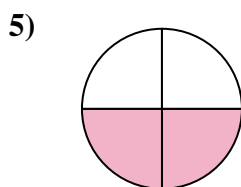
- A. one-half
B. one-fourth
C. two-halves



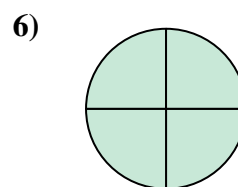
- A. one-half
B. one-fourth
C. two-halves



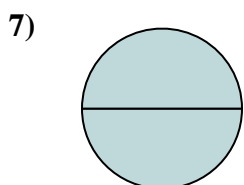
- A. two-halves
B. four-fourths
C. one-half



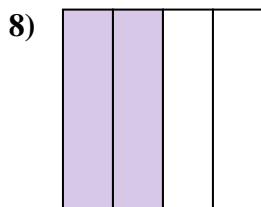
- A. two-quarters
B. three-fourths
C. two-halves



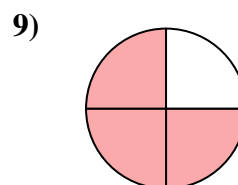
- A. two-quarters
B. four-fourths
C. one-half



- A. one-quarter
B. two-halves
C. three-fourths



- A. four-quarters
B. two-quarters
C. two-halves



- A. two-halves
B. three-fourths
C. two-fourths

1. _____

2. _____

3. _____

4. _____

5. _____

6. _____

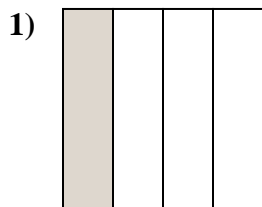
7. _____

8. _____

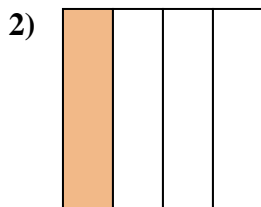
9. _____



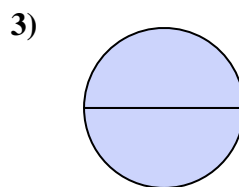
Determine which letter best describes the shaded portion.



- A. one-fourth
B. three-fourths
C. one-half



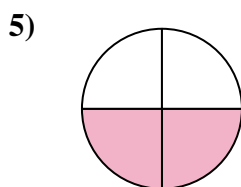
- A. one-half
B. one-fourth
C. two-halves



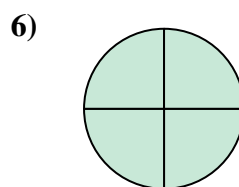
- A. one-half
B. one-fourth
C. two-halves



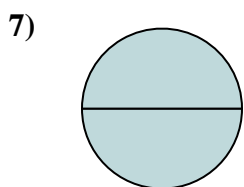
- A. two-halves
B. four-fourths
C. one-half



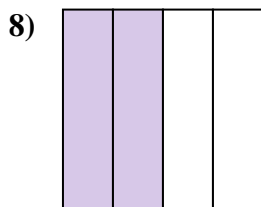
- A. two-quarters
B. three-fourths
C. two-halves



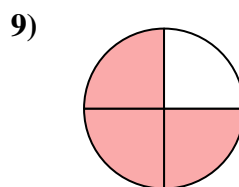
- A. two-quarters
B. four-fourths
C. one-half



- A. one-quarter
B. two-halves
C. three-fourths



- A. four-quarters
B. two-quarters
C. two-halves



- A. two-halves
B. three-fourths
C. two-fourths

Answers1. **A**2. **B**3. **C**4. **C**5. **A**6. **B**7. **B**8. **B**9. **B**