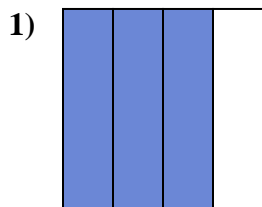
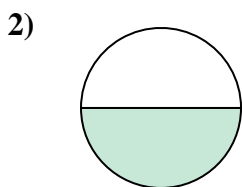
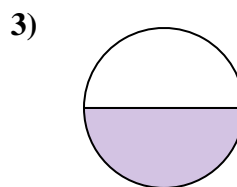


**Determine which letter best describes the shaded portion.****Answers**

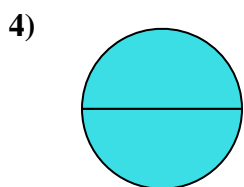
- A. four-fourths
B. three-quarters
C. one-quarter



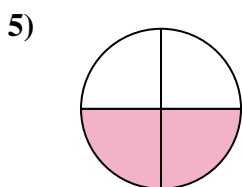
- A. one-half
B. two-fourths
C. one-fourth



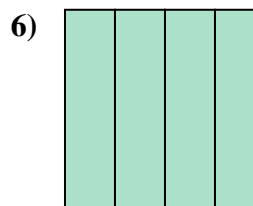
- A. four-fourths
B. one-half
C. two-halves



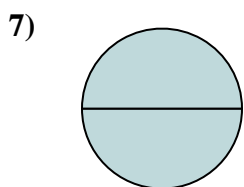
- A. one-quarter
B. four-quarters
C. two-halves



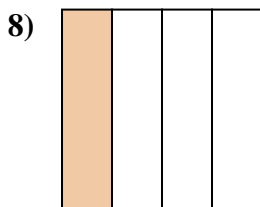
- A. two-quarters
B. one-half
C. four-quarters



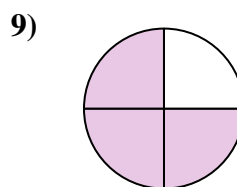
- A. four-quarters
B. one-quarter
C. one-half



- A. two-halves
B. one-half
C. three-quarters



- A. two-halves
B. one-fourth
C. two-quarters

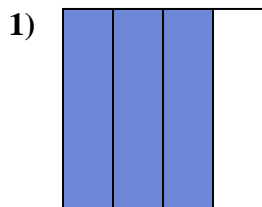


- A. four-fourths
B. three-quarters
C. two-halves

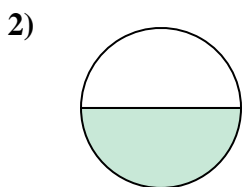
1. _____
2. _____
3. _____
4. _____
5. _____
6. _____
7. _____
8. _____
9. _____



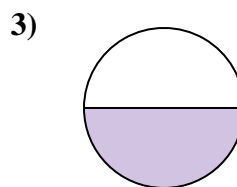
Determine which letter best describes the shaded portion.



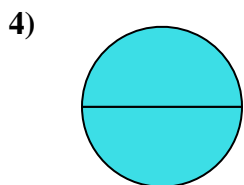
- A. four-fourths
B. three-quarters
C. one-quarter



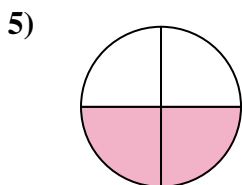
- A. one-half
B. two-fourths
C. one-fourth



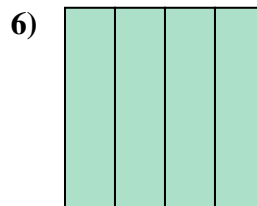
- A. four-fourths
B. one-half
C. two-halves



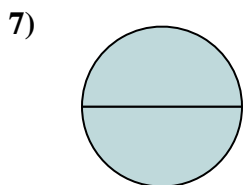
- A. one-quarter
B. four-quarters
C. two-halves



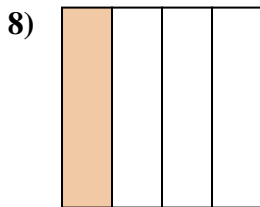
- A. two-quarters
B. one-half
C. four-quarters



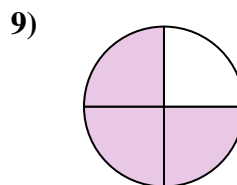
- A. four-quarters
B. one-quarter
C. one-half



- A. two-halves
B. one-half
C. three-quarters



- A. two-halves
B. one-fourth
C. two-quarters



- A. four-fourths
B. three-quarters
C. two-halves

Answers1. **B**2. **A**3. **B**4. **C**5. **A**6. **A**7. **A**8. **B**9. **B**