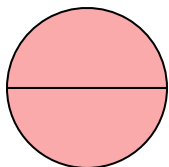


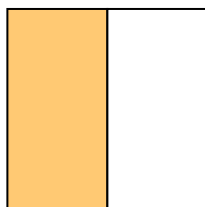
**Determine which letter best describes the shaded portion.****Answers**

1)



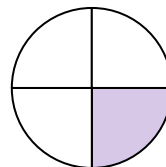
- A. one-half
B. two-quarters
C. two-halves

2)



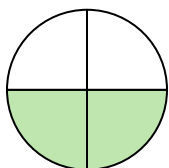
- A. two-quarters
B. four-fourths
C. one-half

3)




- A. two-quarters
B. one-quarter
C. one-half

4)



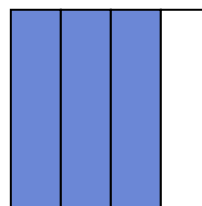
- A. four-fourths
B. two-fourths
C. one-half

5)



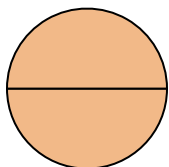
- A. one-half
B. three-quarters
C. one-fourth

6)



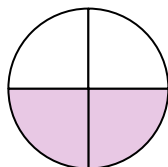
- A. one-half
B. three-fourths
C. four-quarters

7)



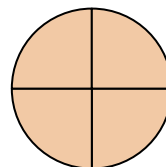
- A. two-quarters
B. two-halves
C. one-half

8)



- A. two-fourths
B. one-half
C. four-fourths

9)



- A. three-quarters
B. two-halves
C. four-fourths

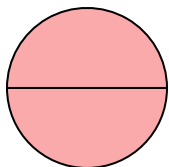
1. _____
2. _____
3. _____
4. _____
5. _____
6. _____
7. _____
8. _____
9. _____



Determine which letter best describes the shaded portion.

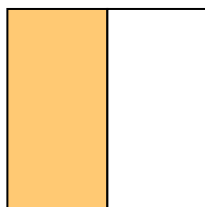
Answers

1)



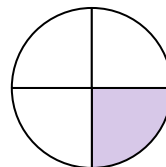
- A. one-half
B. two-quarters
C. two-halves

2)



- A. two-quarters
B. four-fourths
C. one-half

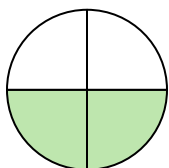
3)



- A. two-quarters
B. one-quarter
C. one-half


1. **C**2. **C**3. **B**4. **B**5. **A**6. **B**7. **B**8. **A**9. **C**

4)



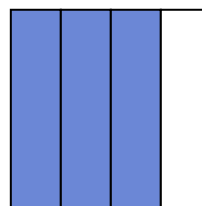
- A. four-fourths
B. two-fourths
C. one-half

5)



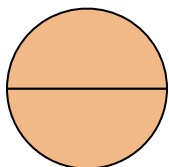
- A. one-half
B. three-quarters
C. one-fourth

6)



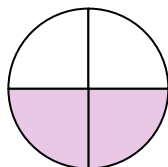
- A. one-half
B. three-fourths
C. four-quarters

7)



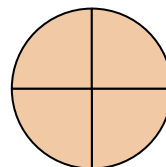
- A. two-quarters
B. two-halves
C. one-half

8)



- A. two-fourths
B. one-half
C. four-fourths

9)



- A. three-quarters
B. two-halves
C. four-fourths