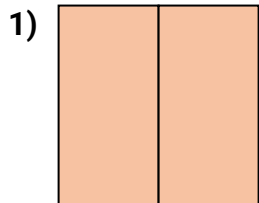

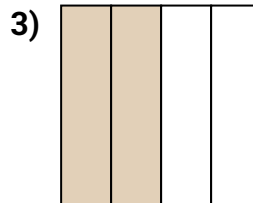


**Determine which letter best describes the shaded portion.****Answers**


- A. two-halves
B. two-quarters
C. four-fourths



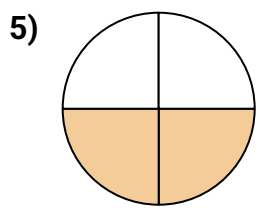
- A. four-fourths
B. two-quarters
C. two-halves



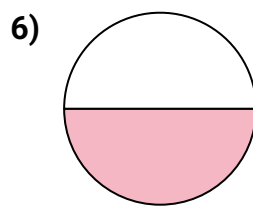
- A. three-fourths
B. two-fourths
C. one-half



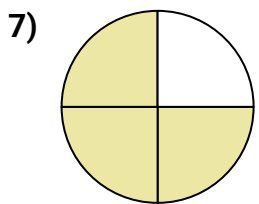
- A. two-quarters
B. one-fourth
C. two-halves



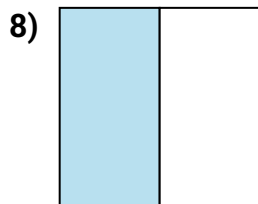
- A. three-fourths
B. one-quarter
C. two-quarters



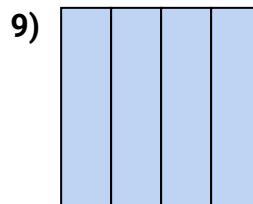
- A. one-quarter
B. three-fourths
C. one-half



- A. three-fourths
B. two-fourths
C. two-halves



- A. four-fourths
B. three-quarters
C. one-half



- A. four-fourths
B. three-quarters
C. one-quarter

1. _____

2. _____

3. _____

4. _____

5. _____

6. _____

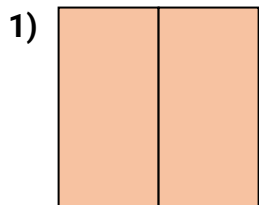
7. _____

8. _____

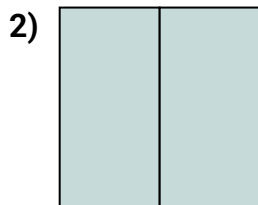
9. _____



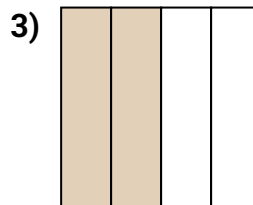
Determine which letter best describes the shaded portion.

Answers


- A. two-halves
B. two-quarters
C. four-fourths



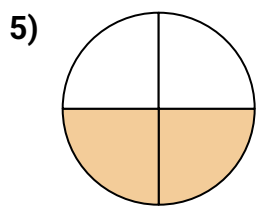
- A. four-fourths
B. two-quarters
C. two-halves



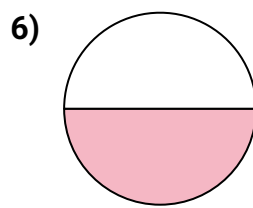
- A. three-fourths
B. two-fourths
C. one-half



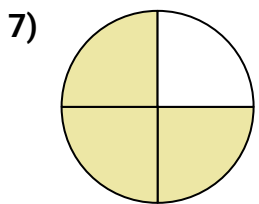
- A. two-quarters
B. one-fourth
C. two-halves



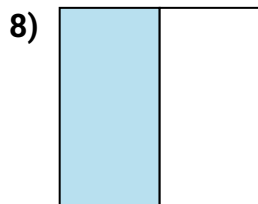
- A. three-fourths
B. one-quarter
C. two-quarters



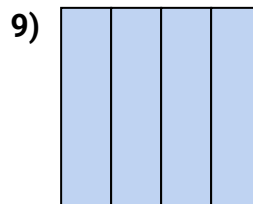
- A. one-quarter
B. three-fourths
C. one-half



- A. three-fourths
B. two-fourths
C. two-halves



- A. four-fourths
B. three-quarters
C. one-half



- A. four-fourths
B. three-quarters
C. one-quarter

1. **A**2. **C**3. **B**4. **B**5. **C**6. **C**7. **A**8. **C**9. **A**