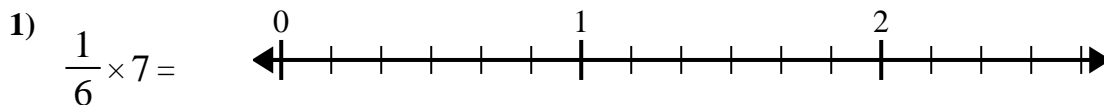
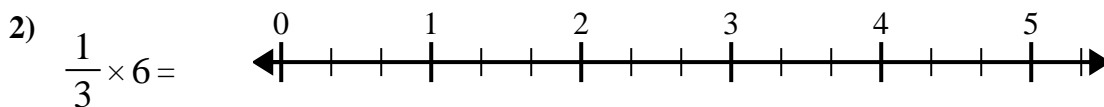




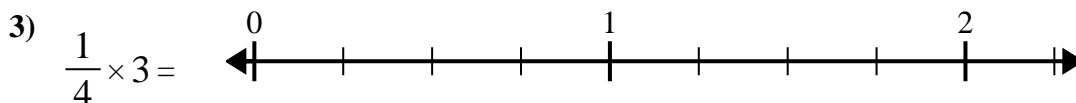
Use the numberline to solve.

Answers

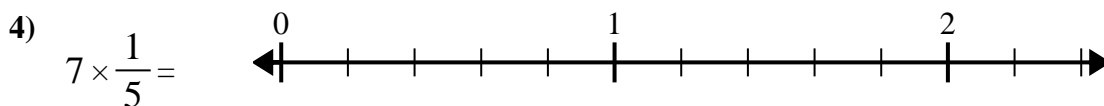
1. _____



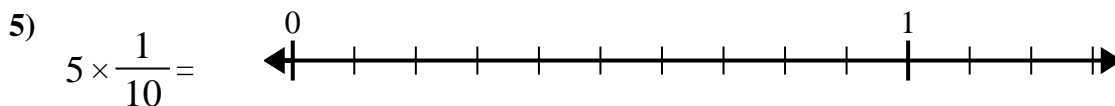
2. _____



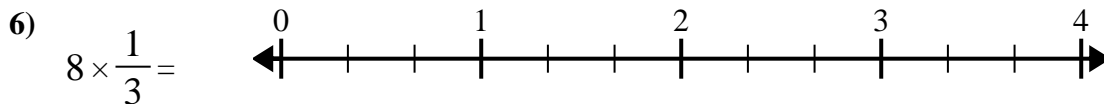
3. _____



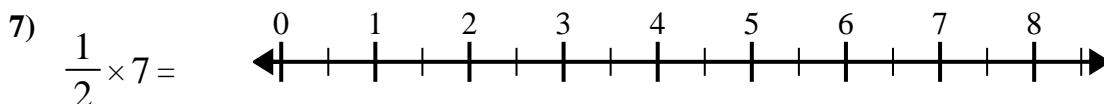
4. _____



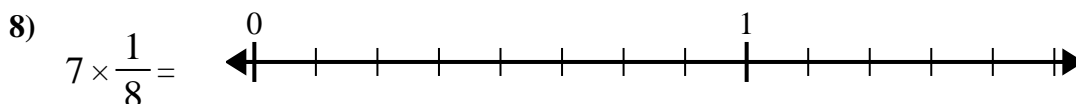
5. _____



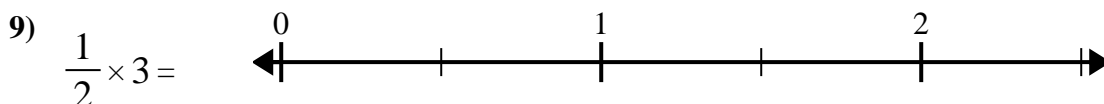
6. _____




7. _____



8. _____



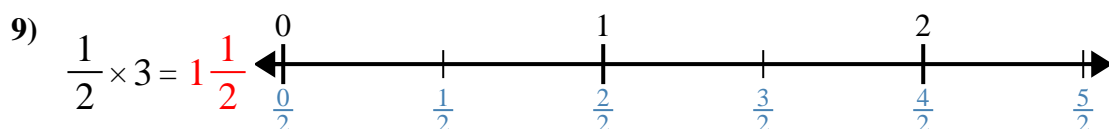
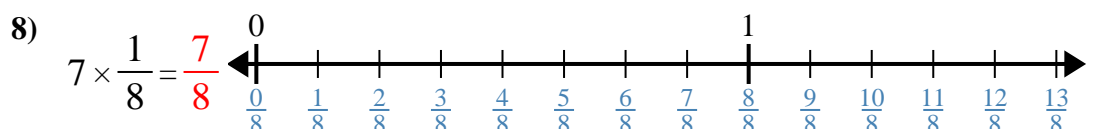
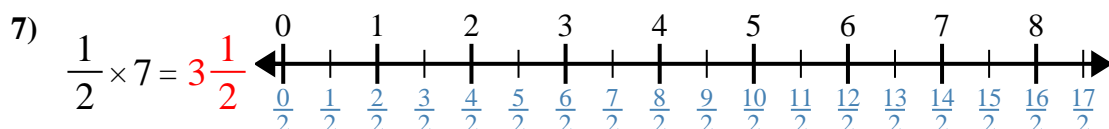
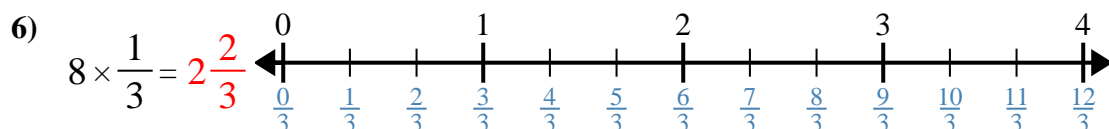
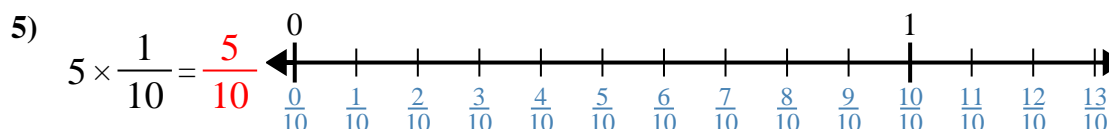
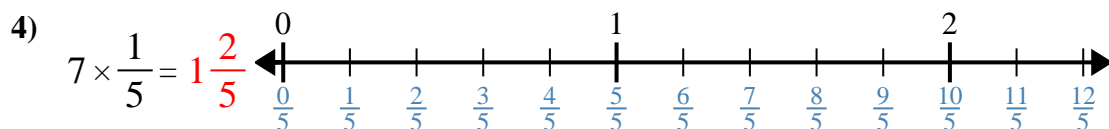
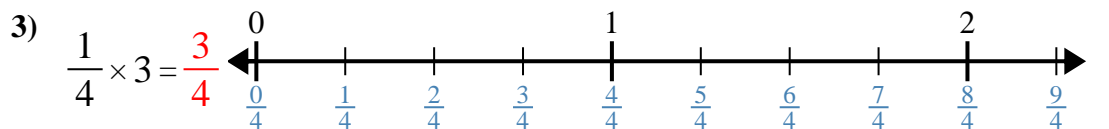
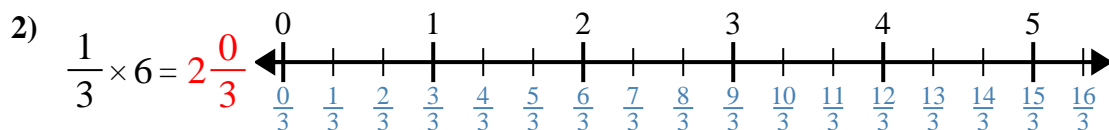
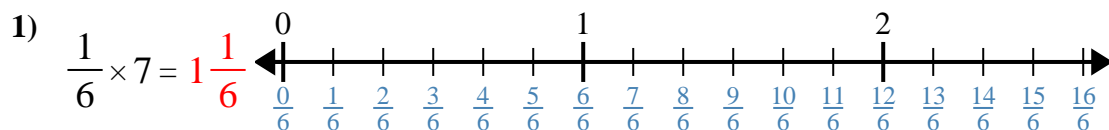
9. _____



10. _____



Use the numberline to solve.

**Answers**

1. $1\frac{1}{6}$

2. $2\frac{0}{3}$

3. $\frac{3}{4}$

4. $1\frac{2}{5}$

5. $\frac{5}{10}$

6. $2\frac{2}{3}$

7. $3\frac{1}{2}$

8. $\frac{7}{8}$

9. $1\frac{1}{2}$

10. $1\frac{0}{3}$



Use the numberline to solve.

Answers

$\frac{5}{10}$

$1\frac{1}{6}$

$1\frac{2}{5}$

$2\frac{0}{3}$

$1\frac{0}{3}$

$1\frac{1}{2}$

$3\frac{1}{2}$

$\frac{3}{4}$

$\frac{7}{8}$

$2\frac{2}{3}$

1) $\frac{1}{6} \times 7 =$

2) $\frac{1}{3} \times 6 =$

3) $\frac{1}{4} \times 3 =$

4) $7 \times \frac{1}{5} =$

5) $5 \times \frac{1}{10} =$

6) $8 \times \frac{1}{3} =$

7) $\frac{1}{2} \times 7 =$

8) $7 \times \frac{1}{8} =$

9) $\frac{1}{2} \times 3 =$

10) $3 \times \frac{1}{3} =$

1. _____
2. _____
3. _____
4. _____
5. _____
6. _____
7. _____
8. _____
9. _____
10. _____