



Use the box provided to show a visual example of how to multiply two fractions.

Ex) $\frac{3}{4} \times \frac{1}{7} =$

1) $\frac{3}{5} \times \frac{3}{4} =$

2) $\frac{3}{4} \times \frac{1}{2} =$

3) $\frac{1}{2} \times \frac{6}{8} =$

4) $\frac{3}{4} \times \frac{3}{4} =$

5) $\frac{8}{9} \times \frac{3}{6} =$

6) $\frac{4}{9} \times \frac{1}{6} =$

7) $\frac{4}{6} \times \frac{1}{4} =$

8) $\frac{1}{2} \times \frac{2}{3} =$

9) $\frac{7}{9} \times \frac{3}{8} =$

10) $\frac{3}{5} \times \frac{4}{7} =$

11) $\frac{2}{4} \times \frac{3}{5} =$

Answers

Ex. $\frac{3}{28}$

1. _____

2. _____

3. _____

4. _____

5. _____

6. _____

7. _____

8. _____

9. _____

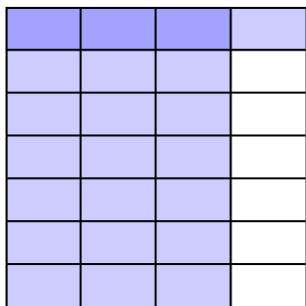
10. _____

11. _____

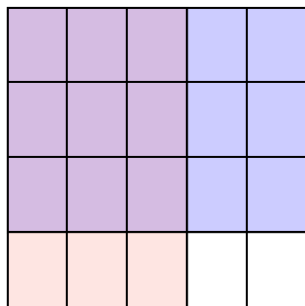


Use the box provided to show a visual example of how to multiply two fractions.

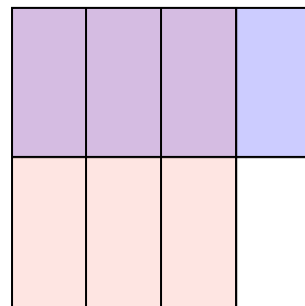
Ex) $\frac{3}{4} \times \frac{1}{7} =$




1) $\frac{3}{5} \times \frac{3}{4} =$



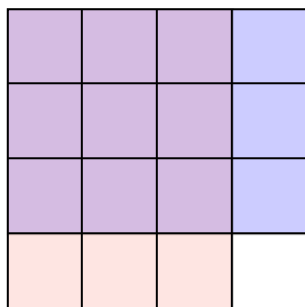
2) $\frac{3}{4} \times \frac{1}{2} =$



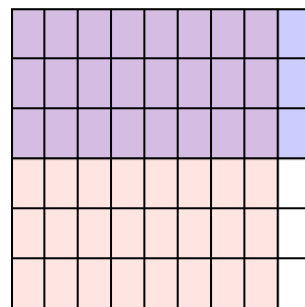
3) $\frac{1}{2} \times \frac{6}{8} =$



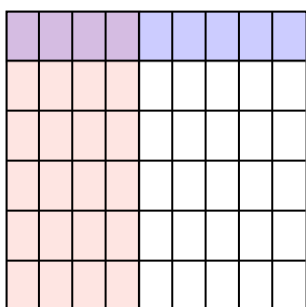
4) $\frac{3}{4} \times \frac{3}{4} =$



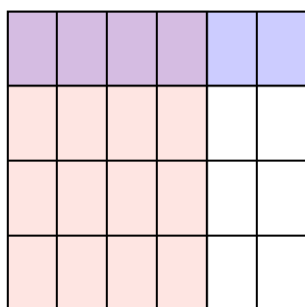
5) $\frac{8}{9} \times \frac{3}{6} =$



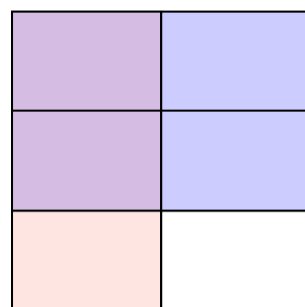
6) $\frac{4}{9} \times \frac{1}{6} =$



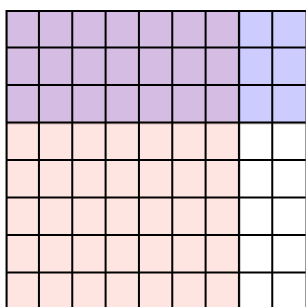
7) $\frac{4}{6} \times \frac{1}{4} =$



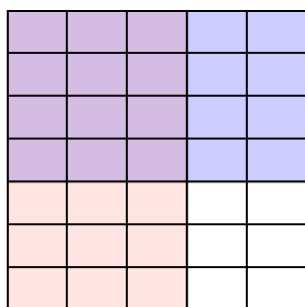
8) $\frac{1}{2} \times \frac{2}{3} =$



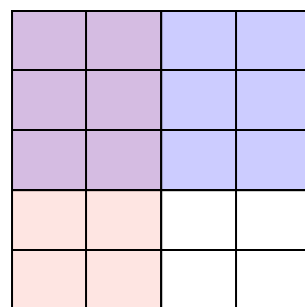
9) $\frac{7}{9} \times \frac{3}{8} =$



10) $\frac{3}{5} \times \frac{4}{7} =$



11) $\frac{2}{4} \times \frac{3}{5} =$



Answers

Ex. $\frac{3}{28}$

1. $\frac{9}{20}$

2. $\frac{3}{8}$

3. $\frac{6}{16}$

4. $\frac{9}{16}$

5. $\frac{24}{54}$

6. $\frac{4}{54}$

7. $\frac{4}{24}$

8. $\frac{2}{6}$

9. $\frac{21}{72}$

10. $\frac{12}{35}$

11. $\frac{6}{20}$