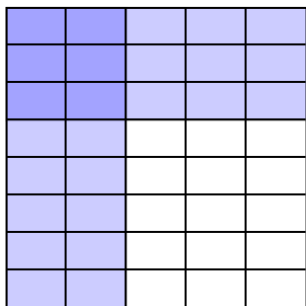




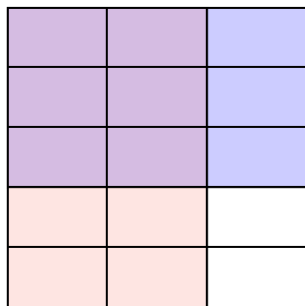


Use the box provided to show a visual example of how to multiply two fractions.

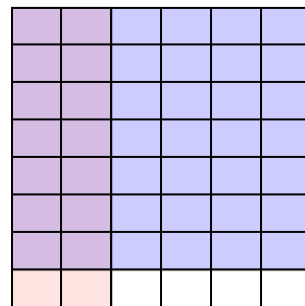
Ex)  $\frac{2}{5} \times \frac{3}{8} =$



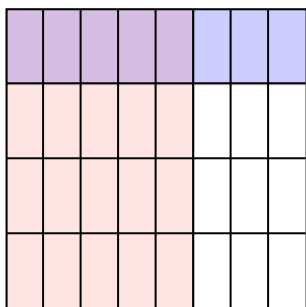
1)  $\frac{2}{3} \times \frac{3}{5} =$



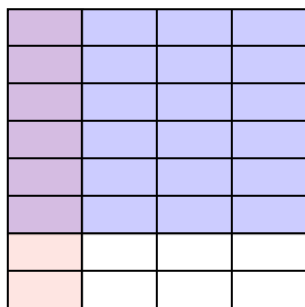
2)  $\frac{2}{6} \times \frac{7}{8} =$



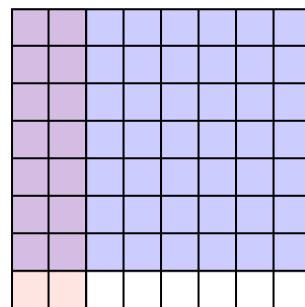
3)  $\frac{5}{8} \times \frac{1}{4} =$



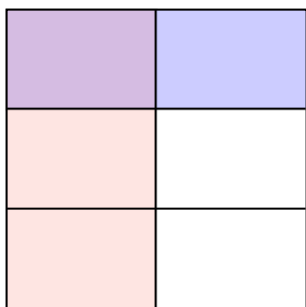
4)  $\frac{1}{4} \times \frac{6}{8} =$



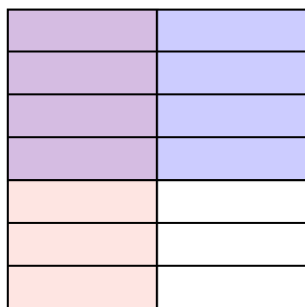
5)  $\frac{2}{8} \times \frac{7}{8} =$



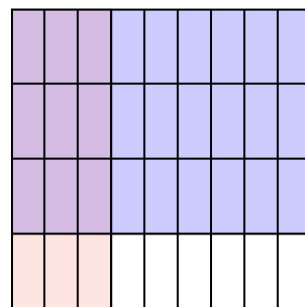
6)  $\frac{1}{2} \times \frac{1}{3} =$



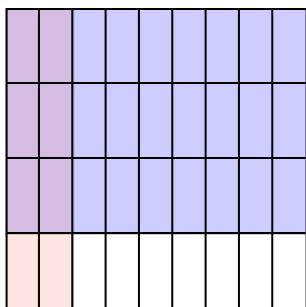
7)  $\frac{1}{2} \times \frac{4}{7} =$



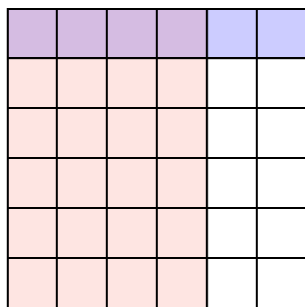
8)  $\frac{3}{9} \times \frac{3}{4} =$



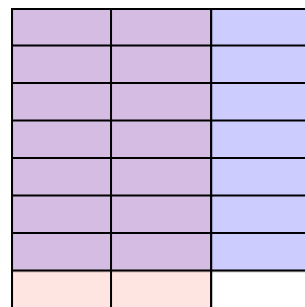
9)  $\frac{2}{9} \times \frac{3}{4} =$



10)  $\frac{4}{6} \times \frac{1}{6} =$



11)  $\frac{2}{3} \times \frac{7}{8} =$



**Answers**

Ex.  $\frac{6}{40}$

1.  $\frac{6}{15}$

2.  $\frac{14}{48}$

3.  $\frac{5}{32}$

4.  $\frac{6}{32}$

5.  $\frac{14}{64}$

6.  $\frac{1}{6}$

7.  $\frac{4}{14}$

8.  $\frac{9}{36}$

9.  $\frac{6}{36}$

10.  $\frac{4}{36}$

11.  $\frac{14}{24}$