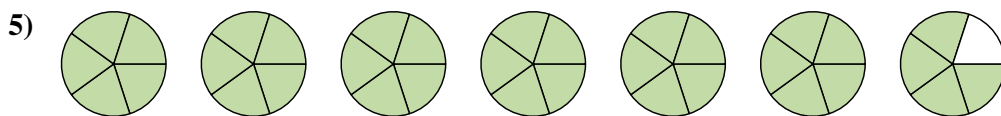
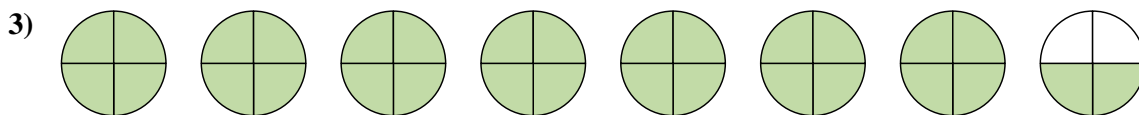
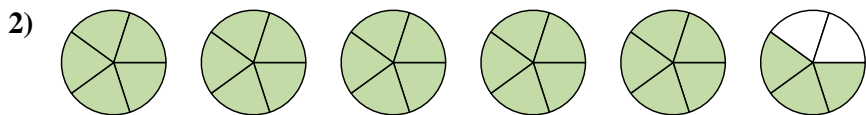
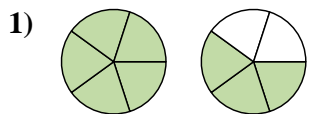
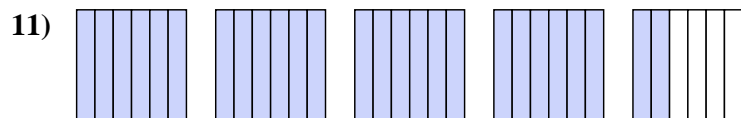
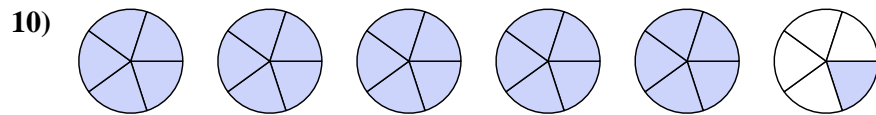
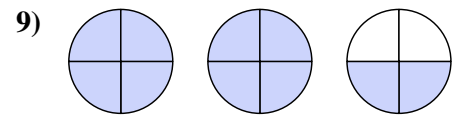
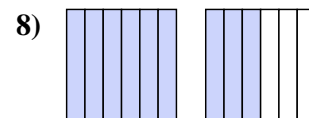
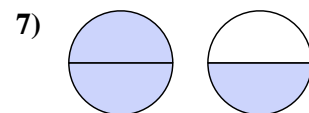
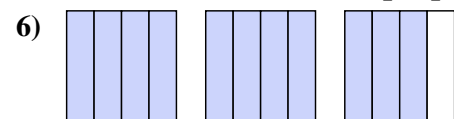




Write each amount as a mixed number.



Write each amount as an improper fraction.



Answers

1. $1\frac{3}{5}$

2. $5\frac{3}{5}$

3. $7\frac{2}{4}$

4. $1\frac{1}{3}$

5. $6\frac{4}{5}$

6. $\frac{11}{4}$

7. $\frac{3}{2}$

8. $\frac{9}{6}$

9. $\frac{10}{4}$

10. $\frac{26}{5}$

11. $\frac{26}{6}$