


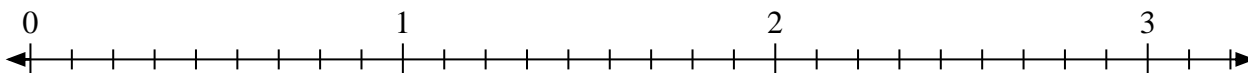


Solve each problem.

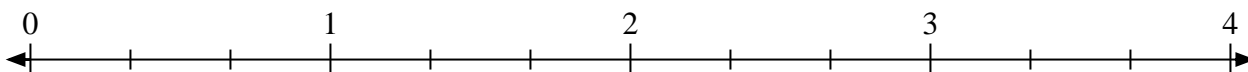
1) Mark the location of $\frac{3}{2}$



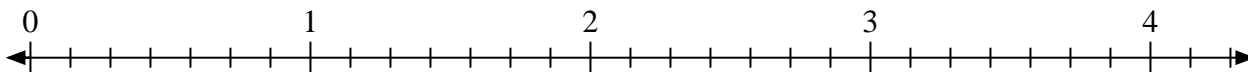
2) Mark the location of $\frac{26}{9}$




3) Mark the location of $\frac{6}{3}$



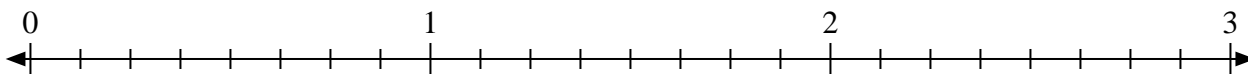
4) Mark the location of $\frac{14}{7}$




5) Mark the location of $\frac{5}{2}$



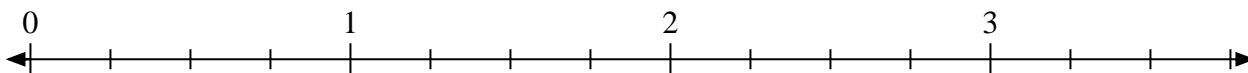
6) Mark the location of $\frac{22}{8}$



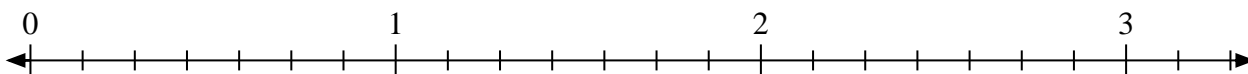
7) Mark the location of $\frac{12}{9}$



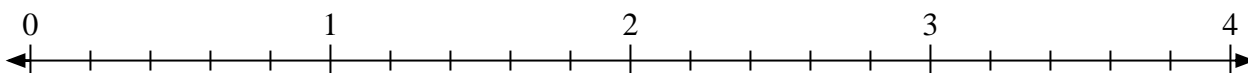
8) Mark the location of $\frac{11}{4}$



9) Mark the location of $\frac{8}{7}$




10) Mark the location of $\frac{11}{5}$



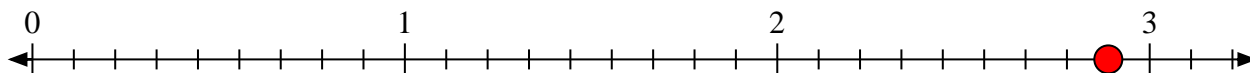


Solve each problem.

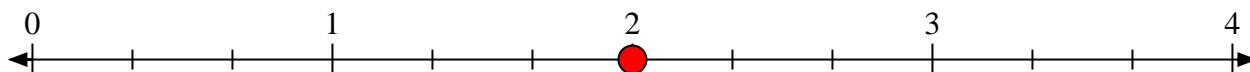
- 1) Mark the location of
- $\frac{3}{2}$



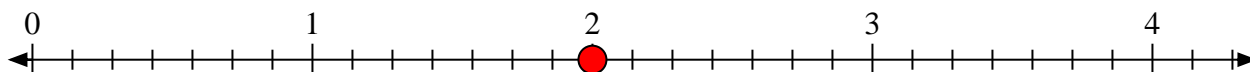
- 2) Mark the location of
- $\frac{26}{9}$




- 3) Mark the location of
- $\frac{6}{3}$



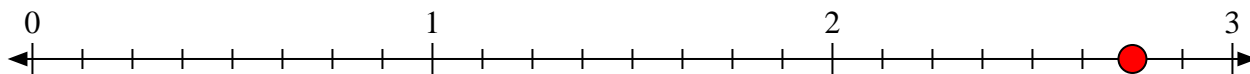
- 4) Mark the location of
- $\frac{14}{7}$




- 5) Mark the location of
- $\frac{5}{2}$



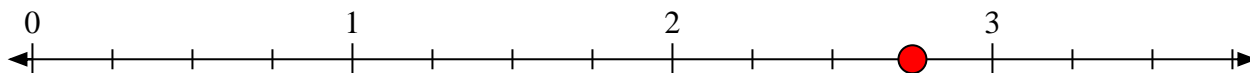
- 6) Mark the location of
- $\frac{22}{8}$



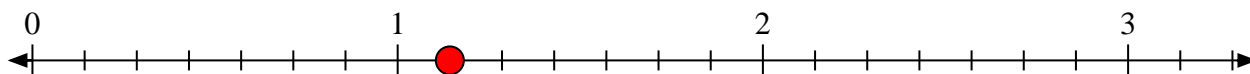
- 7) Mark the location of
- $\frac{12}{9}$



- 8) Mark the location of
- $\frac{11}{4}$



- 9) Mark the location of
- $\frac{8}{7}$



- 10) Mark the location of
- $\frac{11}{5}$

