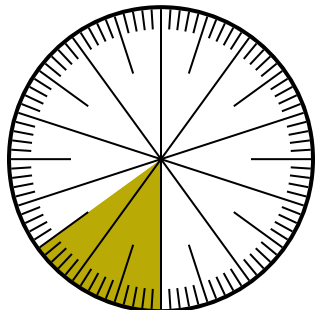




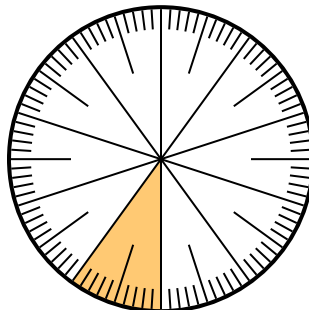
Solve each problem.

- 1) Which choice represents the un-shaded portion of the number wheel?



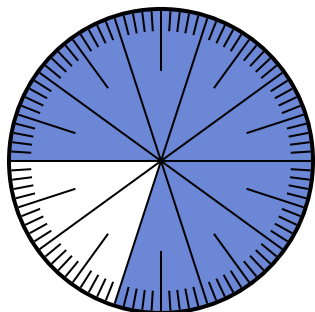
- A.  $\frac{85}{100}$       B.  $\frac{8.5}{100}$   
 C.  $\frac{0.85}{100}$       D.  $\frac{85}{15}$

- 2) Which choice represents the un-shaded portion of the number wheel?



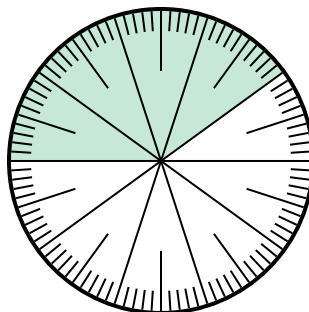
- A. 0.9      B. 90  
 C.  $\frac{1}{100}$       D. 9

- 3) Which choice represents the un-shaded portion of the number wheel?



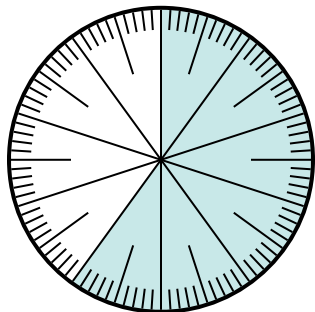
- A. 20      B.  $\frac{20}{80}$   
 C. 0.2      D.  $\frac{20}{10}$

- 4) Which choice represents the un-shaded portion of the number wheel?



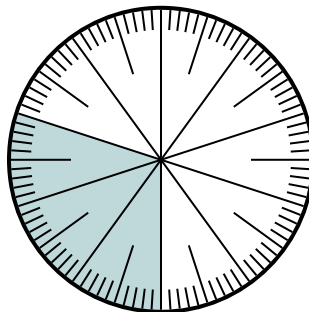
- A. 0.0060      B. 0.6  
 C. 60      D.  $\frac{40}{60}$

- 5) Which choice represents the un-shaded portion of the number wheel?



- A.  $\frac{60}{40}$       B.  $\frac{40}{100}$   
 C.  $\frac{0.4}{100}$       D. 40

- 6) Which choice represents the un-shaded portion of the number wheel?



- A.  $\frac{70}{100}$       B.  $\frac{70}{30}$   
 C. 7      D.  $\frac{30}{70}$

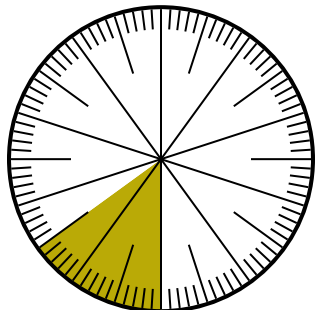
**Answers**

1. \_\_\_\_\_  
 2. \_\_\_\_\_  
 3. \_\_\_\_\_  
 4. \_\_\_\_\_  
 5. \_\_\_\_\_  
 6. \_\_\_\_\_



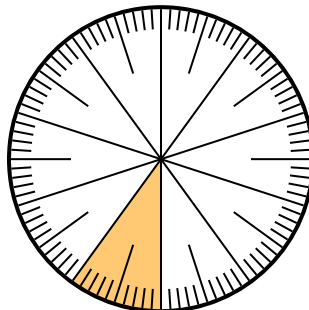
Solve each problem.

- 1) Which choice represents the un-shaded portion of the number wheel?



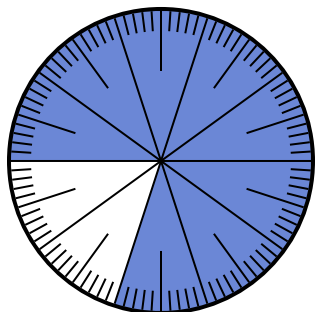
- A.  $\frac{85}{100}$       B.  $\frac{8.5}{100}$   
 C.  $\frac{0.85}{100}$       D.  $\frac{85}{15}$

- 2) Which choice represents the un-shaded portion of the number wheel?



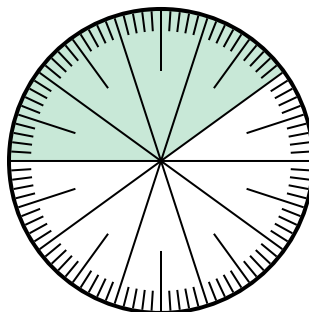
- A. 0.9      B. 90  
 C.  $\frac{1}{100}$       D. 9

- 3) Which choice represents the un-shaded portion of the number wheel?



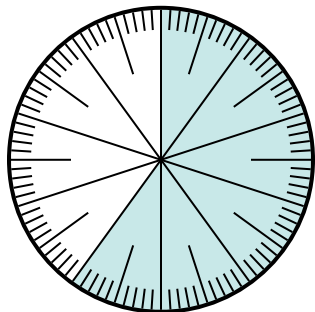
- A. 20      B.  $\frac{20}{80}$   
 C. 0.2      D.  $\frac{20}{10}$

- 4) Which choice represents the un-shaded portion of the number wheel?



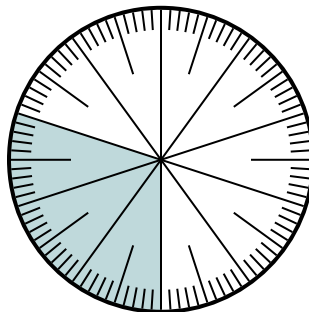
- A. 0.0060      B. 0.6  
 C. 60      D.  $\frac{40}{60}$

- 5) Which choice represents the un-shaded portion of the number wheel?



- A.  $\frac{60}{40}$       B.  $\frac{40}{100}$   
 C.  $\frac{0.4}{100}$       D. 40

- 6) Which choice represents the un-shaded portion of the number wheel?



- A.  $\frac{70}{100}$       B.  $\frac{70}{30}$   
 C. 7      D.  $\frac{30}{70}$

**Answers**

1.   **A**    
 2.   **A**    
 3.   **C**    
 4.   **B**    
 5.   **B**    
 6.   **A**