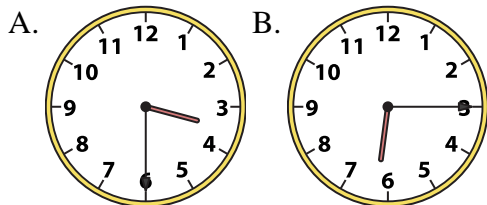




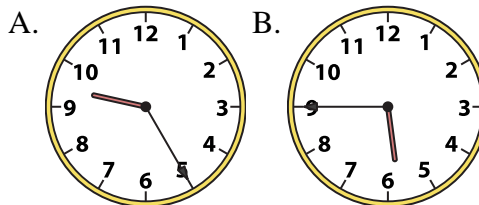
Determine which clock accurately shows the time.

**Answers**

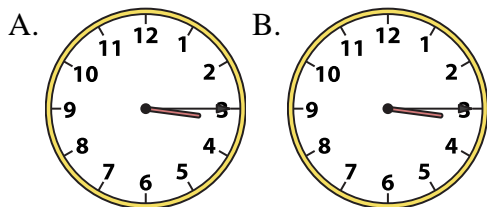
1) 3:30



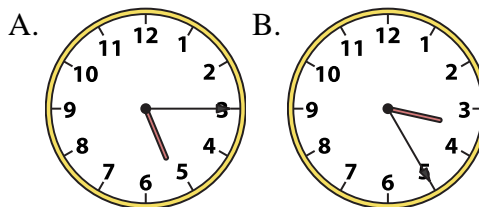
2) 5:45



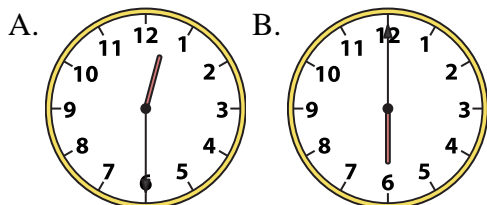
3) 3:15



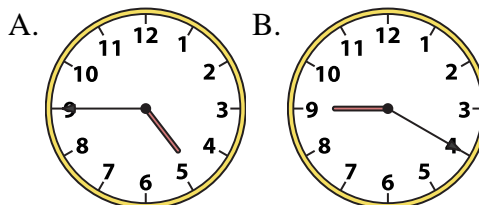
4) 5:15



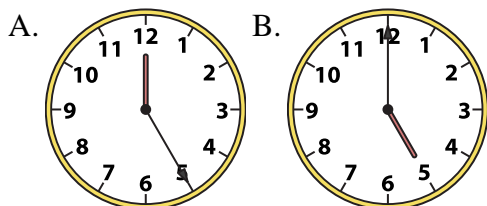
5) 12:30



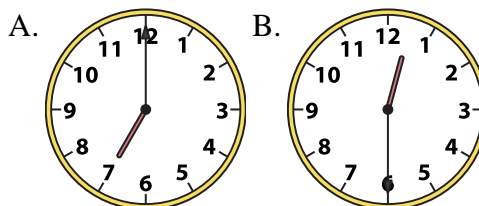
6) 4:45



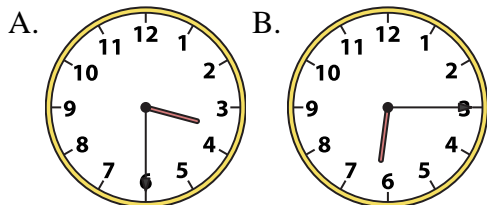
7) 5:00



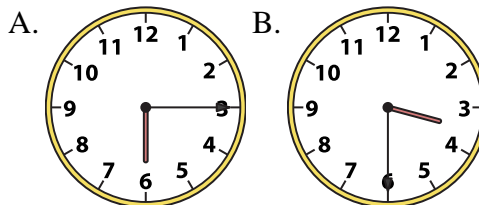
8) 12:30



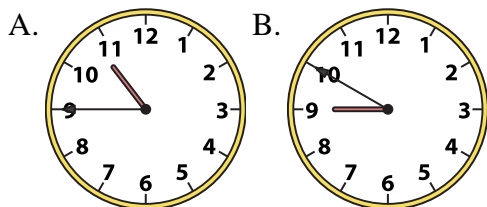
9) 6:15



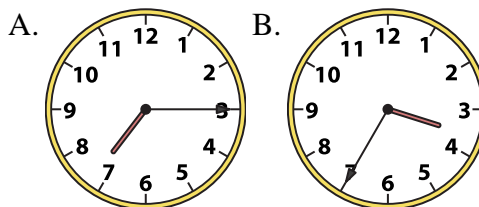
10) 3:30



11) 10:45



12) 7:15



1. \_\_\_\_\_
2. \_\_\_\_\_
3. \_\_\_\_\_
4. \_\_\_\_\_
5. \_\_\_\_\_
6. \_\_\_\_\_
7. \_\_\_\_\_
8. \_\_\_\_\_
9. \_\_\_\_\_
10. \_\_\_\_\_
11. \_\_\_\_\_
12. \_\_\_\_\_

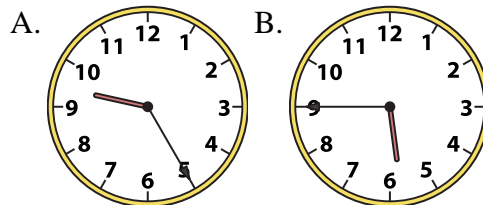
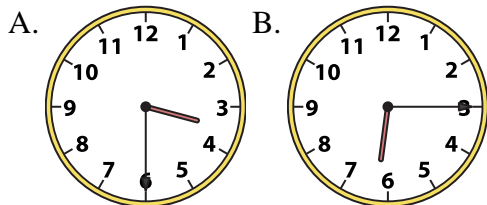


Determine which clock accurately shows the time.

**Answers**

1) 3:30

2) 5:45

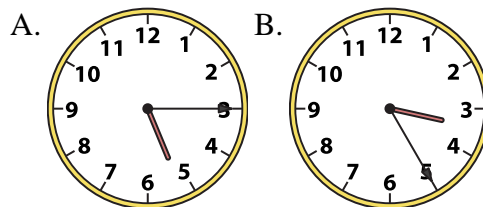
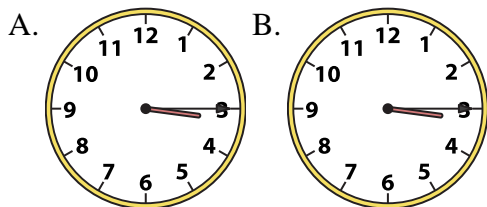


1.     **A**    

2.     **B**    

3) 3:15

4) 5:15

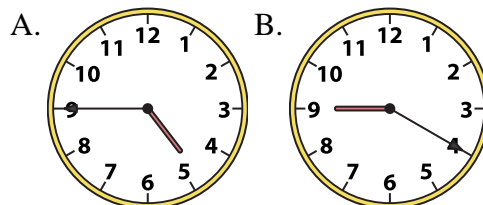
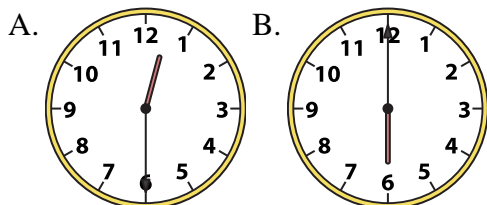


3.     **B**    

4.     **A**    

5) 12:30

6) 4:45

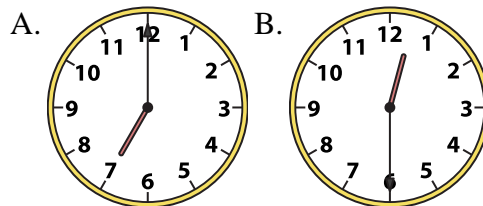
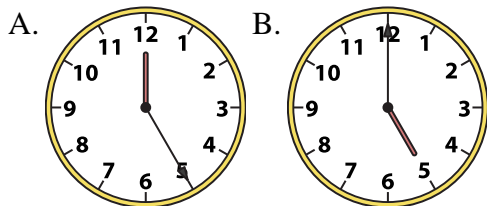


5.     **A**    

6.     **A**    

7) 5:00

8) 12:30

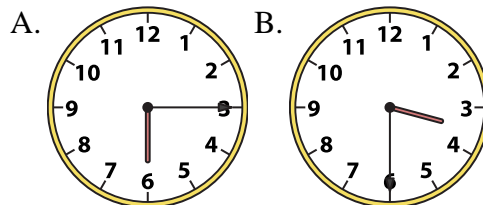
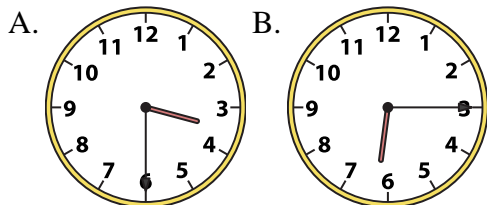


7.     **B**    

8.     **B**    

9) 6:15

10) 3:30

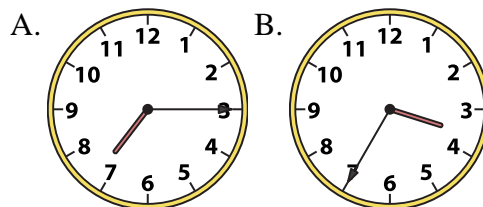
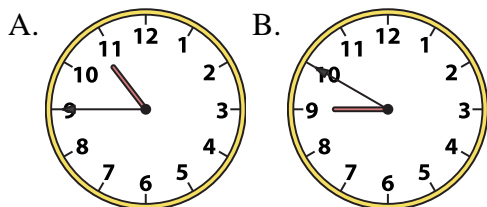


9.     **B**    

10.     **B**    

11) 10:45

12) 7:15



11.     **A**    

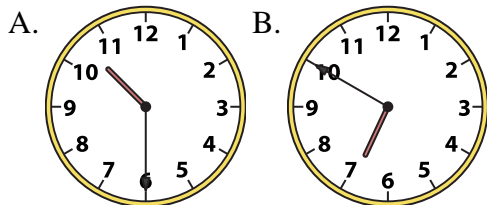
12.     **A**



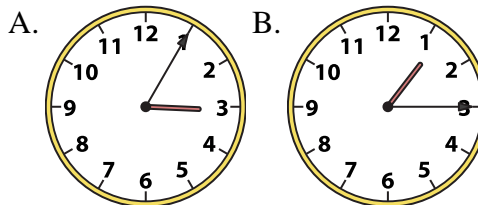
Determine which clock accurately shows the time.

**Answers**

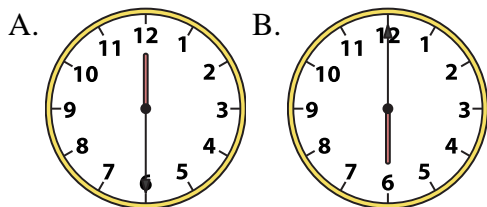
1) 10:30



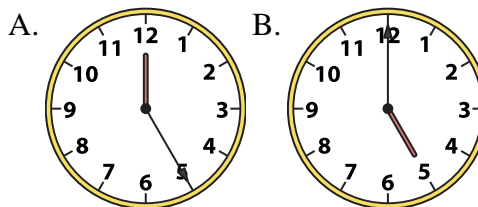
2) 1:15



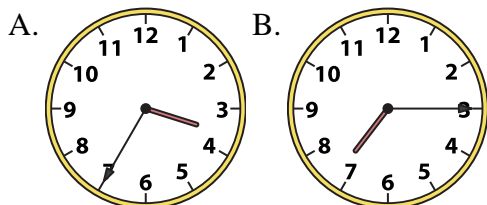
3) 6:00



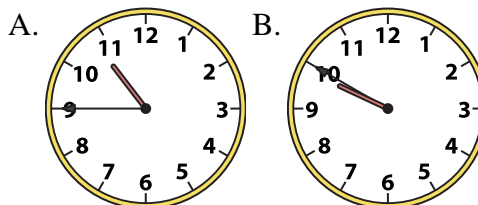
4) 5:00



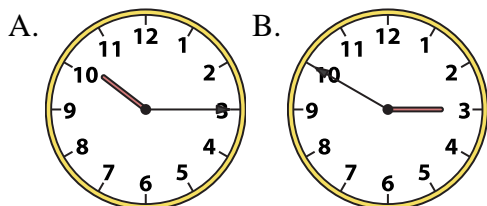
5) 7:15



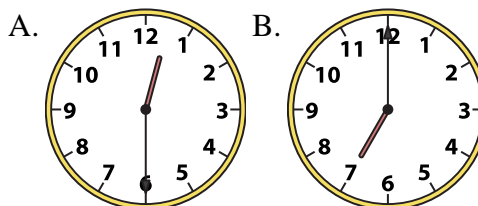
6) 10:45



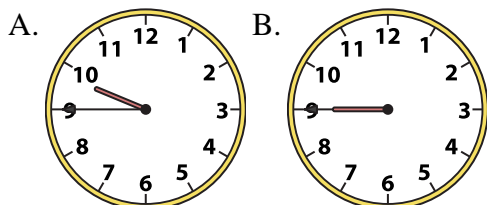
7) 10:15



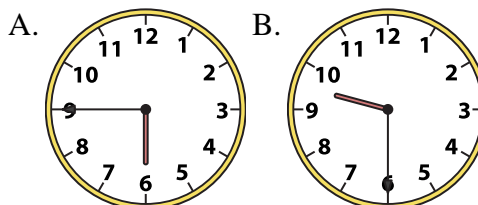
8) 12:30



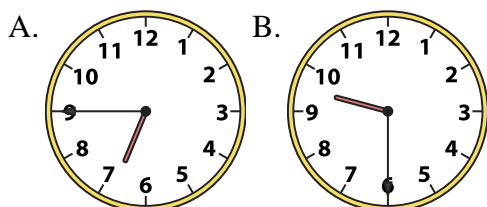
9) 9:45



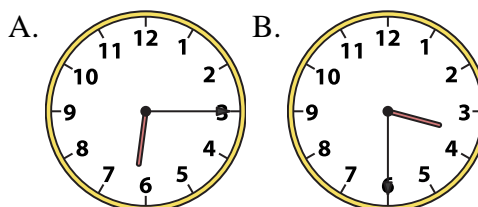
10) 9:30



11) 9:30



12) 3:30



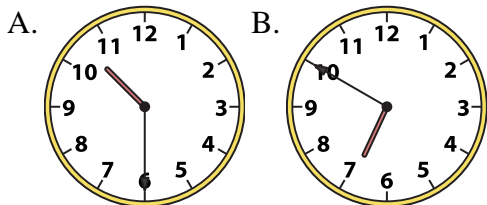
1. \_\_\_\_\_
2. \_\_\_\_\_
3. \_\_\_\_\_
4. \_\_\_\_\_
5. \_\_\_\_\_
6. \_\_\_\_\_
7. \_\_\_\_\_
8. \_\_\_\_\_
9. \_\_\_\_\_
10. \_\_\_\_\_
11. \_\_\_\_\_
12. \_\_\_\_\_



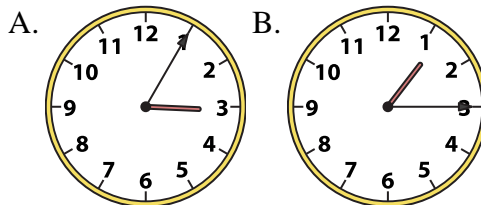
Determine which clock accurately shows the time.

**Answers**

1) 10:30

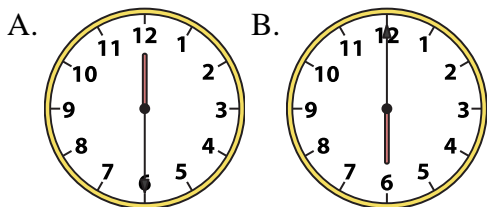


2) 1:15

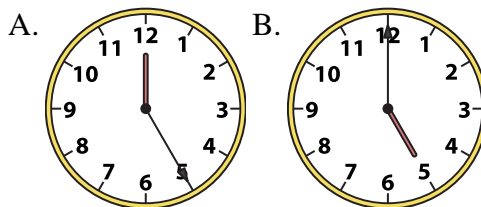


1. **A**

3) 6:00



4) 5:00



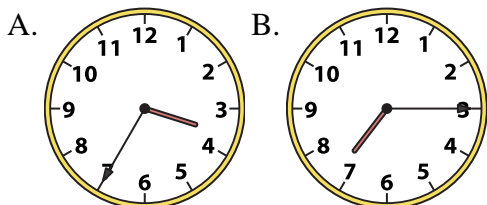
2. **B**

3. **B**

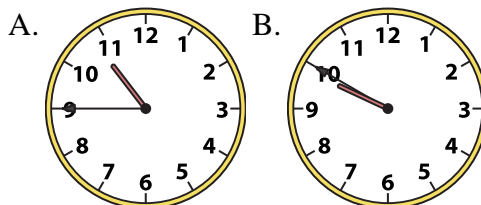
4. **B**

5. **B**

5) 7:15



6) 10:45



6. **A**

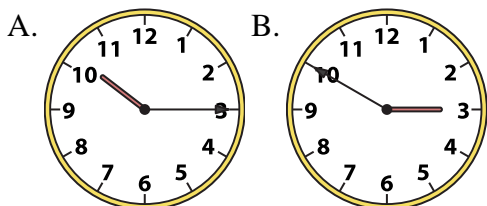
7. **A**

8. **A**

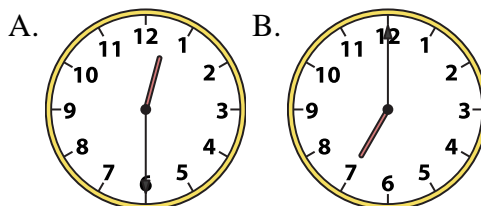
9. **A**

10. **B**

7) 10:15



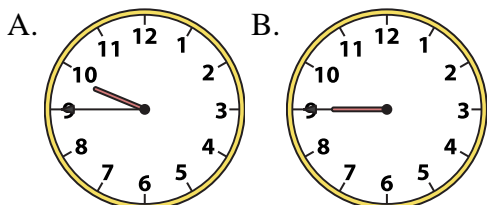
8) 12:30



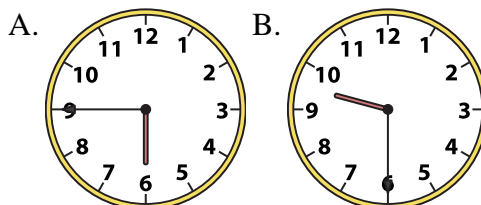
11. **B**

12. **B**

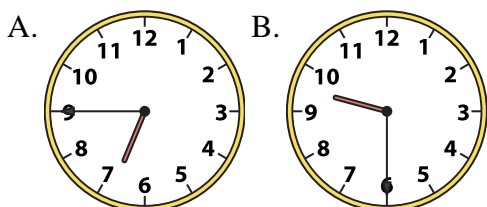
9) 9:45



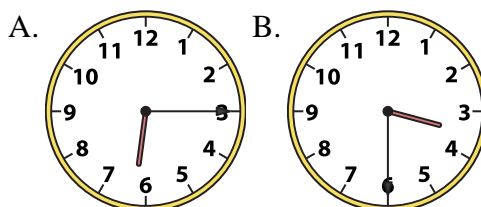
10) 9:30



11) 9:30



12) 3:30

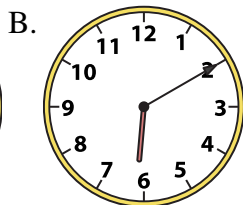
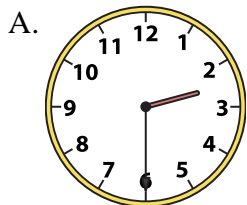




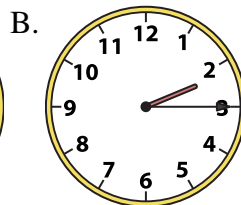
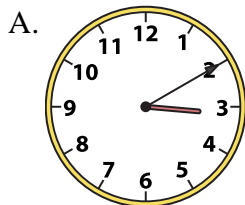
Determine which clock accurately shows the time.

**Answers**

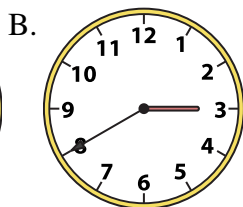
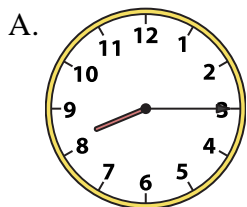
1) 2:30



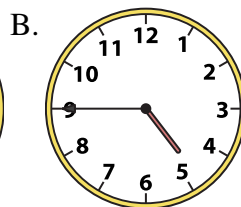
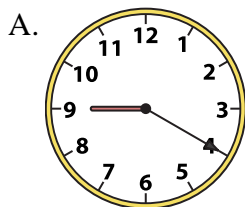
2) 2:15




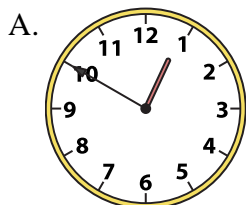
3) 8:15




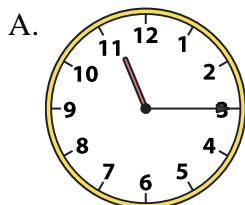
4) 4:45




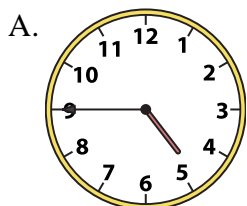
5) 10:00




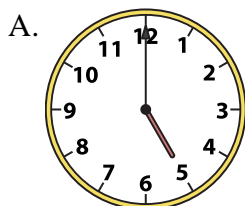
6) 11:15




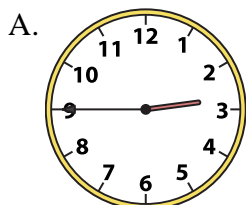
7) 4:45





8) 5:00





9) 2:45



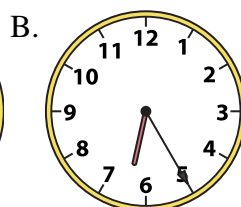

10) 5:00



11) 8:00



12) 5:30



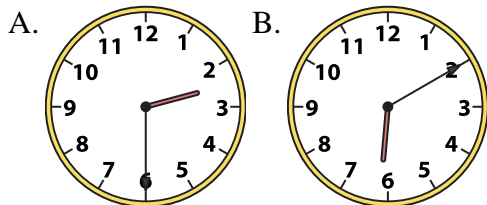
1. \_\_\_\_\_
2. \_\_\_\_\_
3. \_\_\_\_\_
4. \_\_\_\_\_
5. \_\_\_\_\_
6. \_\_\_\_\_
7. \_\_\_\_\_
8. \_\_\_\_\_
9. \_\_\_\_\_
10. \_\_\_\_\_
11. \_\_\_\_\_
12. \_\_\_\_\_



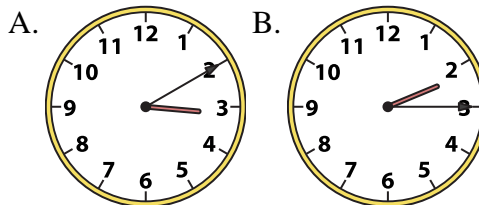
Determine which clock accurately shows the time.

**Answers**

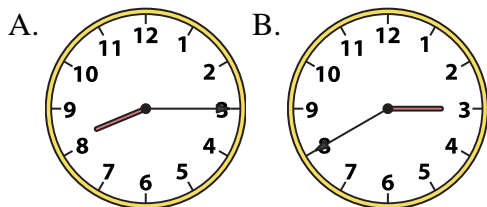
1) 2:30



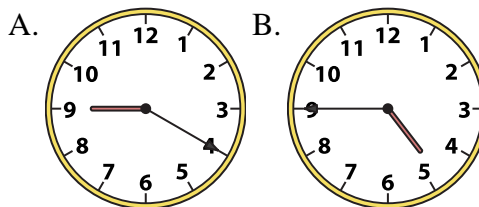
2) 2:15



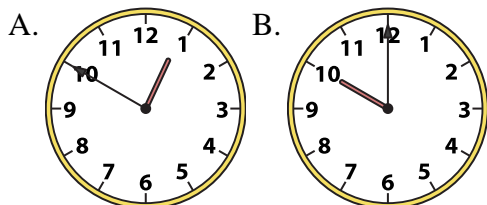
3) 8:15



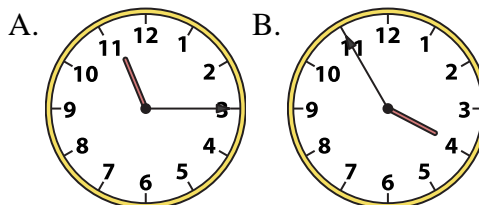
4) 4:45



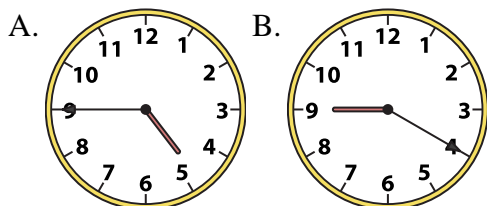
5) 10:00



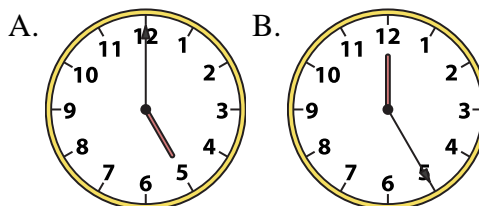
6) 11:15



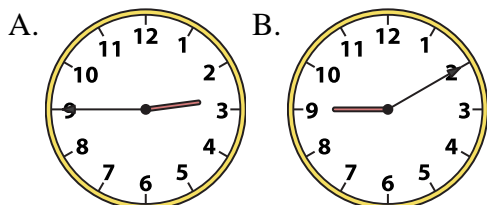
7) 4:45



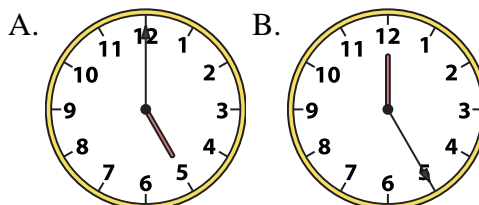
8) 5:00



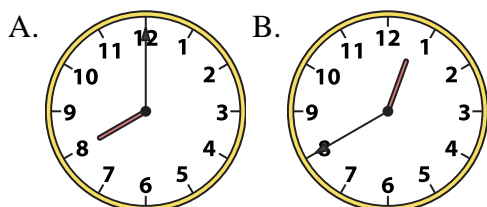
9) 2:45



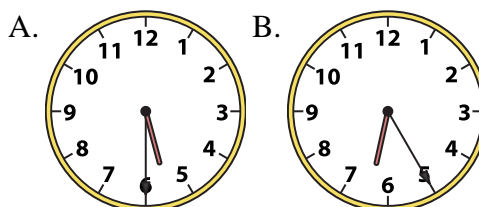
10) 5:00



11) 8:00



12) 5:30



1. **A**

2. **B**

3. **A**

4. **B**

5. **B**

6. **A**

7. **A**

8. **A**

9. **A**

10. **A**

11. **A**

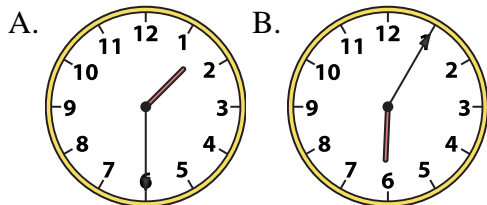
12. **A**



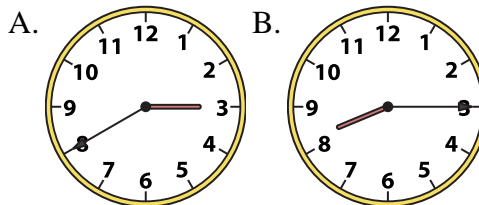
Determine which clock accurately shows the time.

**Answers**

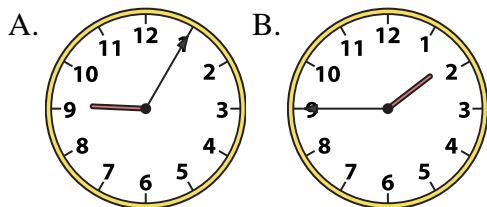
1) 1:30



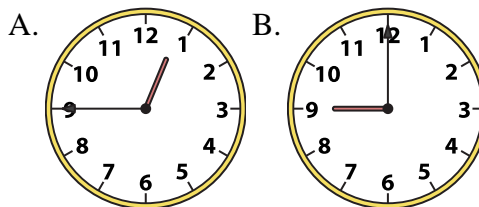
2) 8:15



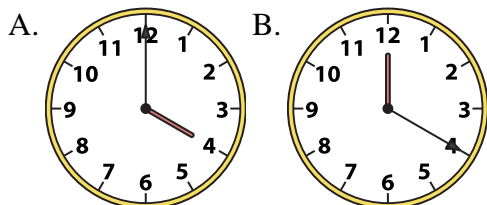
3) 1:45



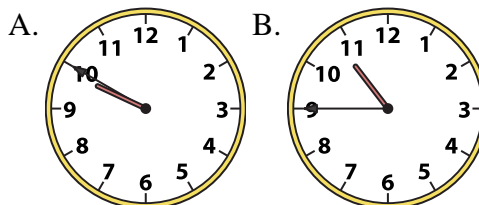
4) 12:45



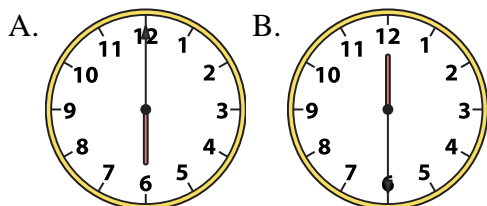
5) 4:00



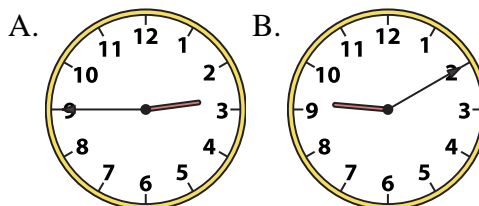
6) 10:45



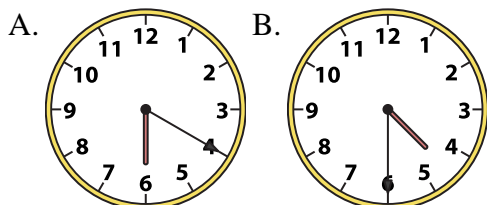
7) 6:00



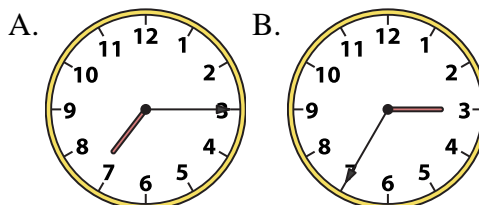
8) 2:45



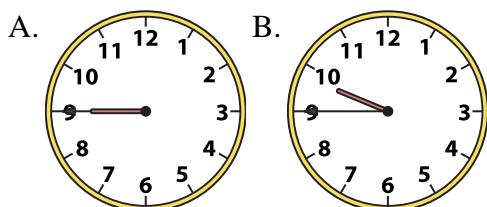
9) 4:30



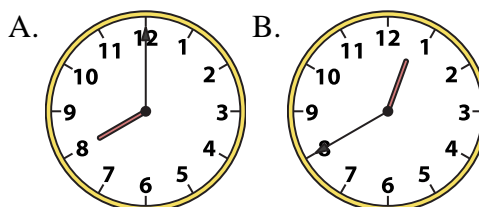
10) 7:15



11) 9:45



12) 8:00



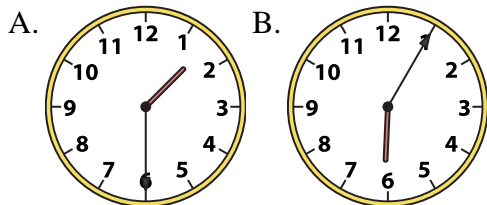
1. \_\_\_\_\_
2. \_\_\_\_\_
3. \_\_\_\_\_
4. \_\_\_\_\_
5. \_\_\_\_\_
6. \_\_\_\_\_
7. \_\_\_\_\_
8. \_\_\_\_\_
9. \_\_\_\_\_
10. \_\_\_\_\_
11. \_\_\_\_\_
12. \_\_\_\_\_



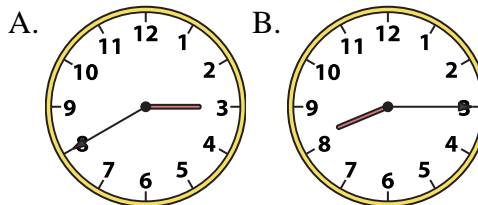
Determine which clock accurately shows the time.

**Answers**

1) 1:30

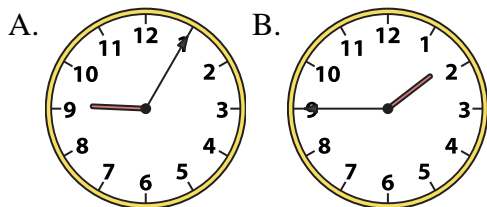


2) 8:15

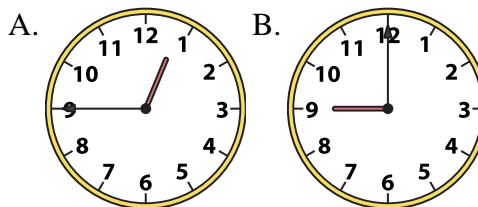


1. **A**

3) 1:45



4) 12:45



2. **B**

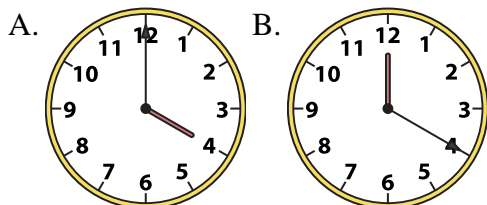
3. **B**

4. **A**

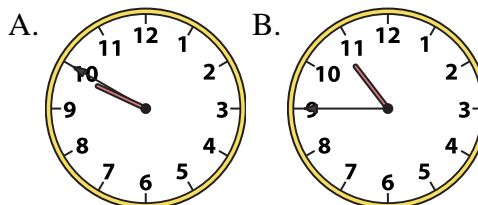
5. **A**

6. **B**

5) 4:00



6) 10:45



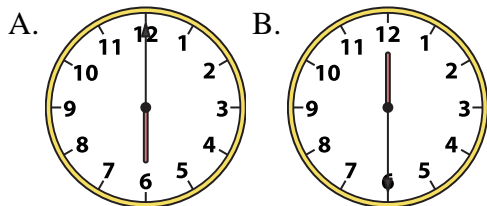
7. **A**

8. **A**

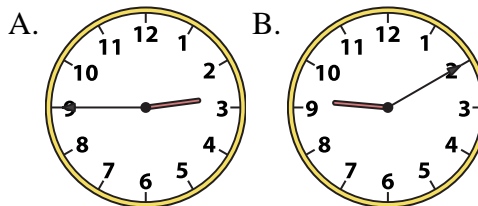
9. **B**

10. **A**

7) 6:00



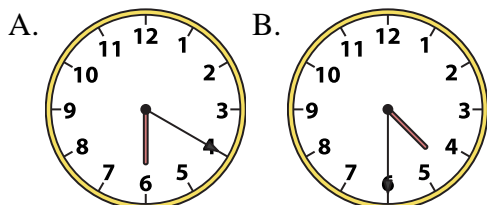
8) 2:45



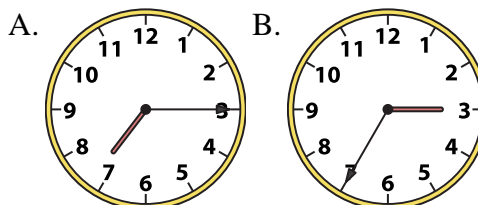
11. **B**

12. **A**

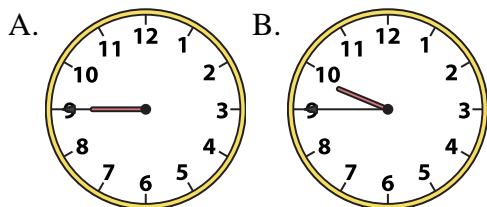
9) 4:30



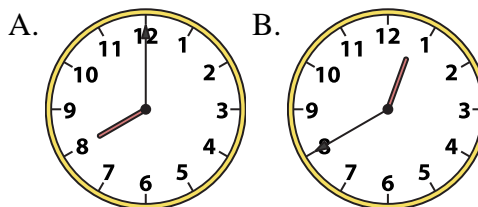
10) 7:15



11) 9:45



12) 8:00



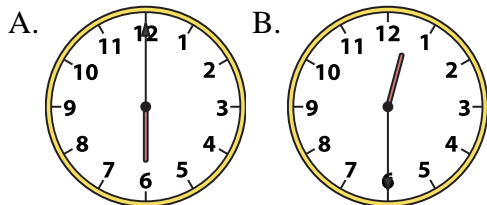




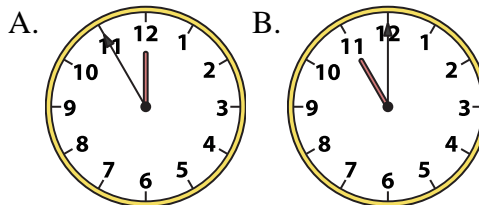
Determine which clock accurately shows the time.

**Answers**

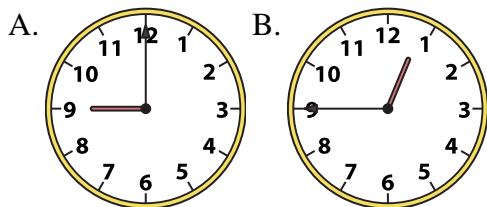
1) 6:00



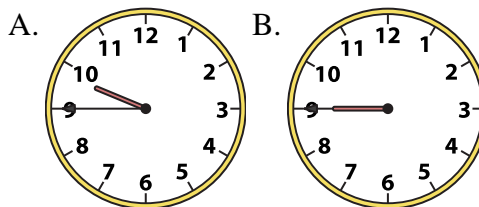
2) 11:00



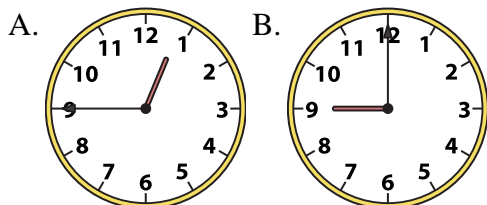
3) 12:45



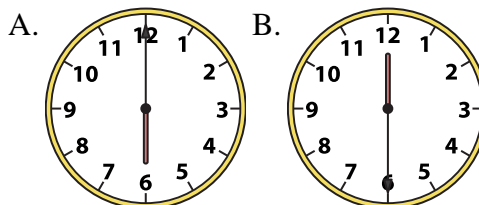
4) 9:45



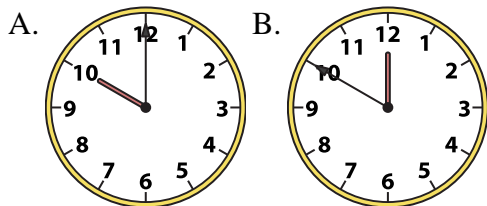
5) 12:45



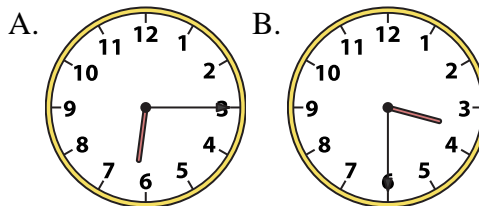
6) 6:00



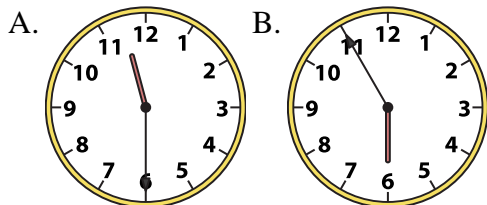
7) 10:00



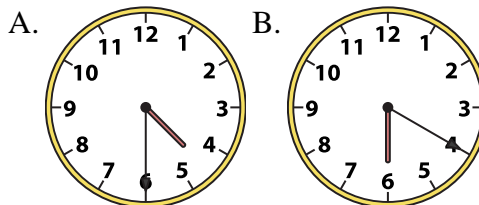
8) 3:30



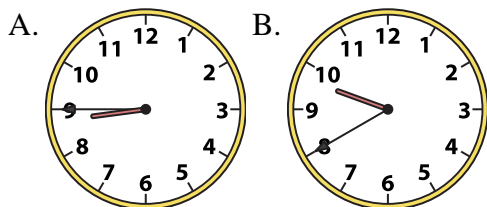
9) 11:30



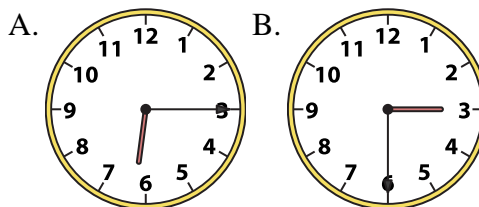
10) 4:30



11) 8:45



12) 6:15



1. \_\_\_\_\_
2. \_\_\_\_\_
3. \_\_\_\_\_
4. \_\_\_\_\_
5. \_\_\_\_\_
6. \_\_\_\_\_
7. \_\_\_\_\_
8. \_\_\_\_\_
9. \_\_\_\_\_
10. \_\_\_\_\_
11. \_\_\_\_\_
12. \_\_\_\_\_

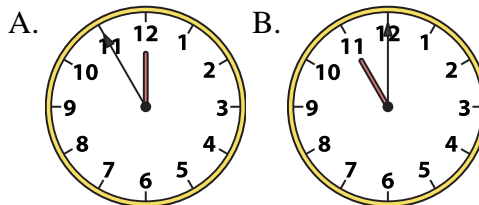
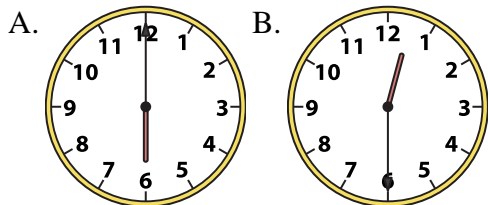


Determine which clock accurately shows the time.

**Answers**

1) 6:00

2) 11:00

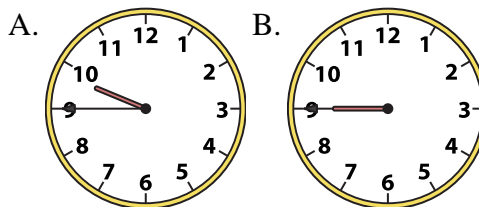
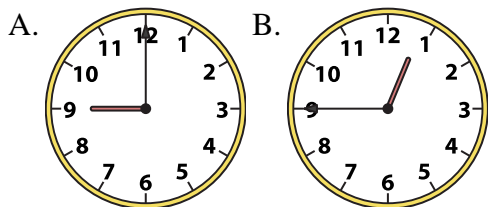


1. **A**

2. **B**

3) 12:45

4) 9:45



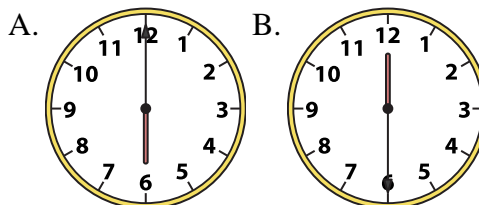
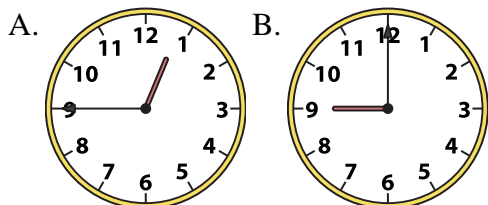
3. **B**

4. **A**

5. **A**

5) 12:45

6) 6:00



6. **A**

7. **A**

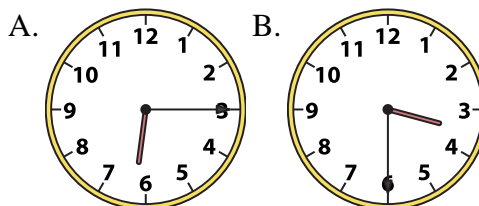
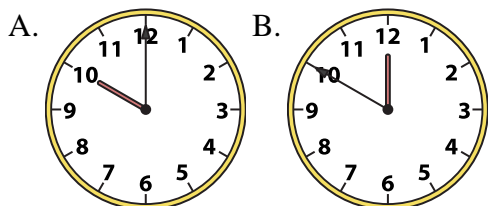
8. **B**

9. **A**

10. **A**

7) 10:00

8) 3:30

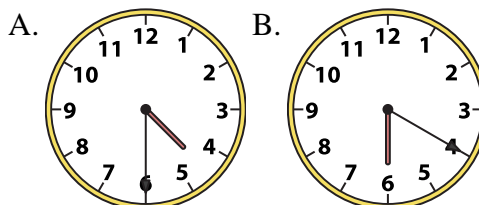
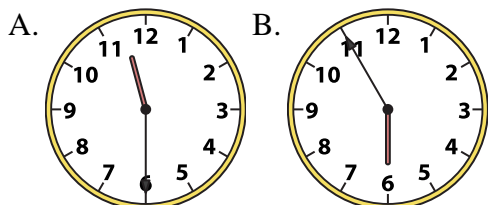


11. **A**

12. **A**

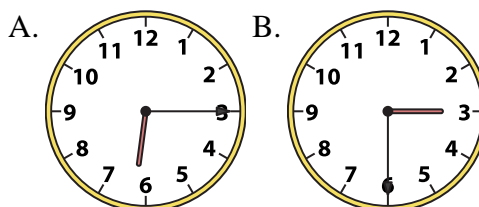
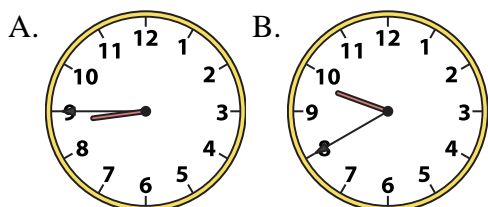
9) 11:30

10) 4:30



11) 8:45

12) 6:15

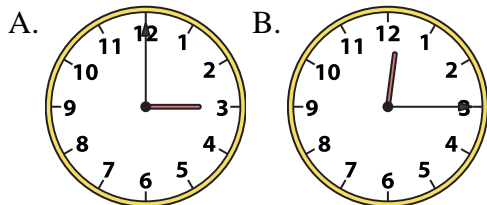




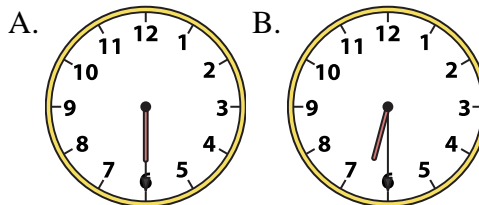
Determine which clock accurately shows the time.

**Answers**

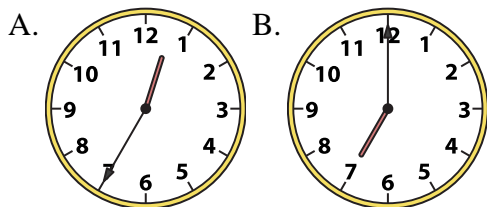
1) 12:15



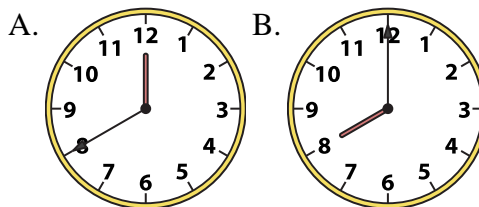
2) 6:30



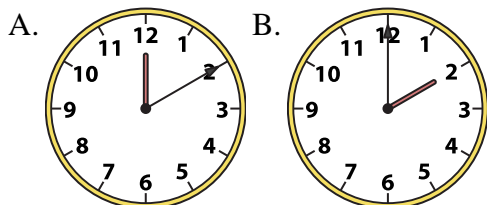
3) 7:00



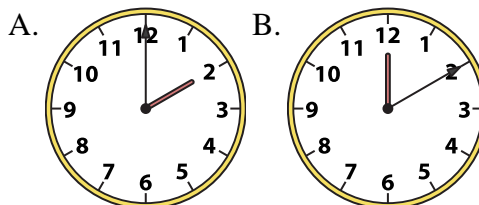
4) 8:00



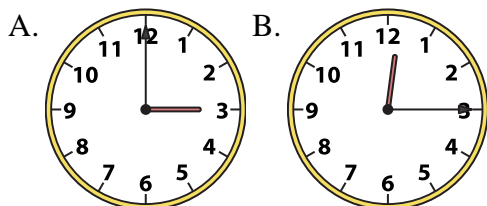
5) 2:00



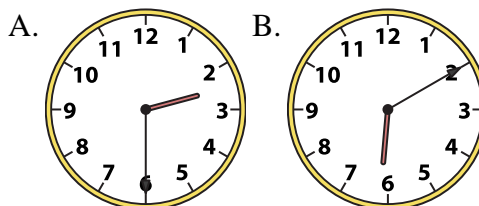
6) 2:00



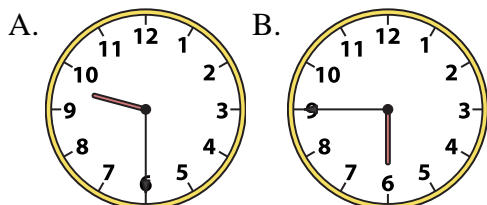
7) 12:15



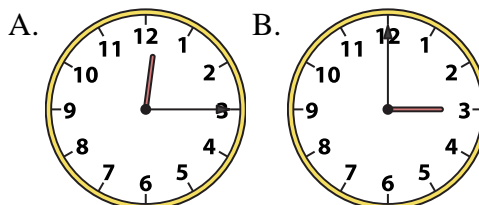
8) 2:30



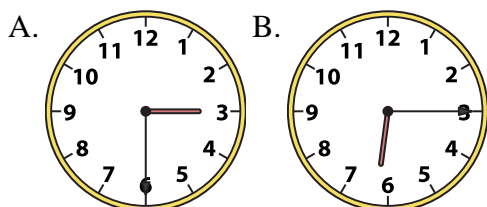
9) 9:30



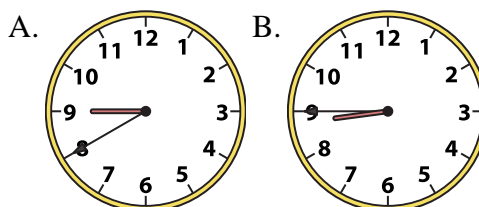
10) 3:00



11) 6:15



12) 8:45



1. \_\_\_\_\_
2. \_\_\_\_\_
3. \_\_\_\_\_
4. \_\_\_\_\_
5. \_\_\_\_\_
6. \_\_\_\_\_
7. \_\_\_\_\_
8. \_\_\_\_\_
9. \_\_\_\_\_
10. \_\_\_\_\_
11. \_\_\_\_\_
12. \_\_\_\_\_

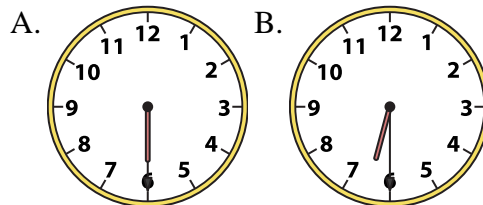
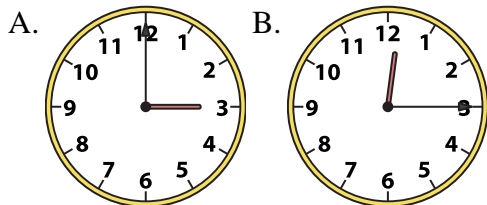


Determine which clock accurately shows the time.

**Answers**

1) 12:15

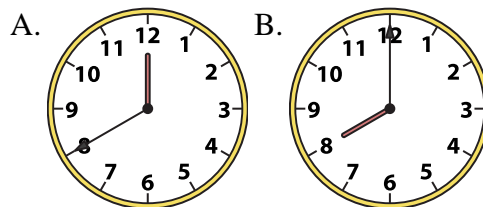
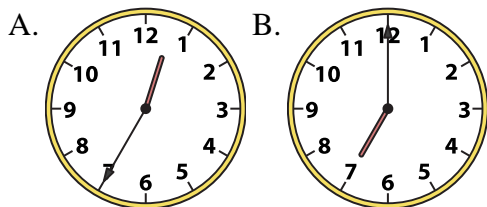
2) 6:30



- 1.     **B**
- 2.     **B**
- 3.     **B**

3) 7:00

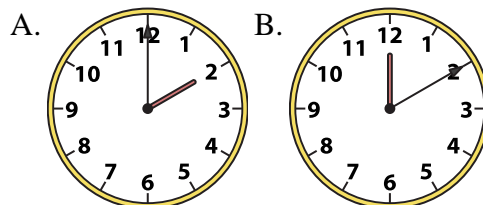
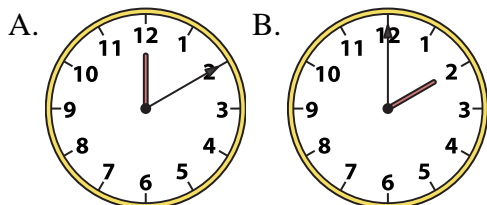
4) 8:00



- 4.     **B**
- 5.     **B**
- 6.     **A**

5) 2:00

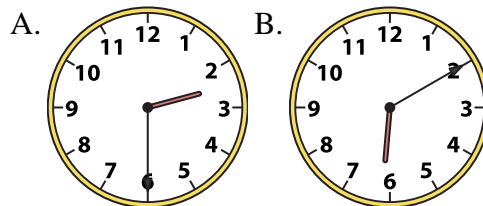
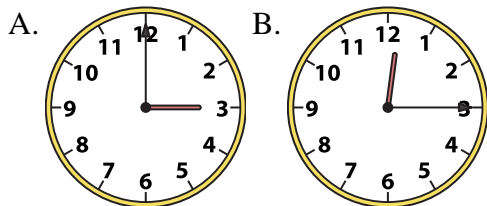
6) 2:00



- 7.     **B**
- 8.     **A**
- 9.     **A**

7) 12:15

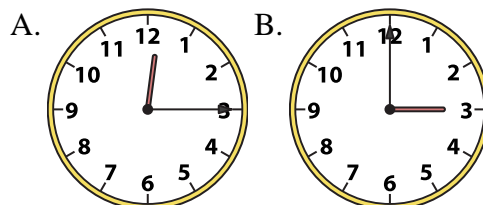
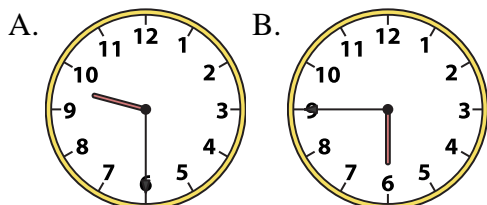
8) 2:30



- 10.     **B**
- 11.     **B**
- 12.     **B**

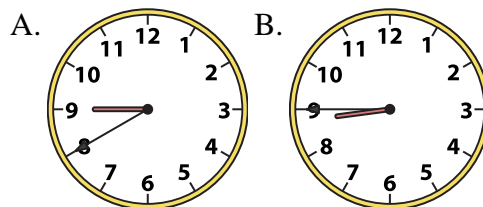
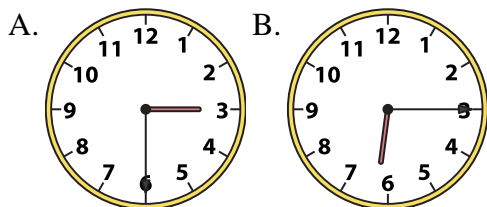
9) 9:30

10) 3:00



11) 6:15

12) 8:45

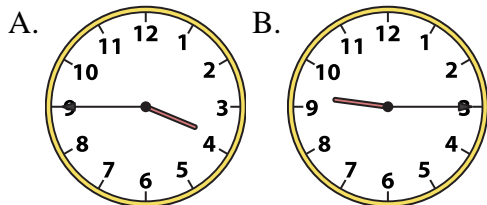




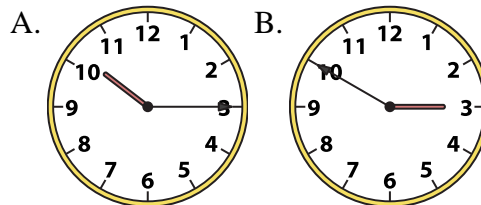
Determine which clock accurately shows the time.

**Answers**

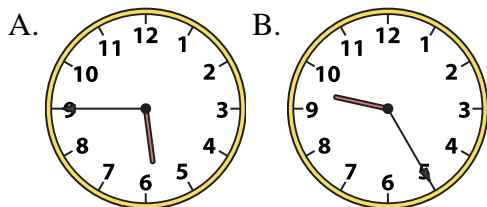
1) 3:45



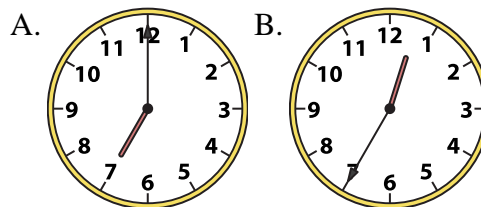
2) 10:15



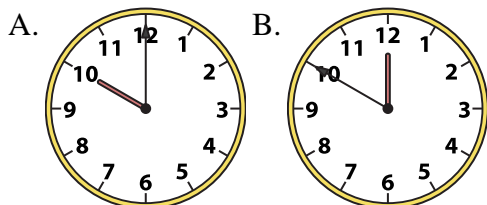
3) 5:45



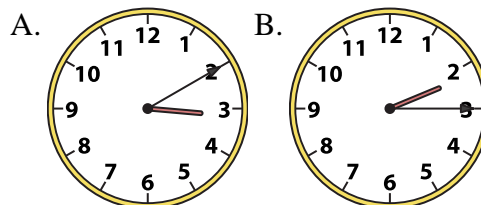
4) 7:00



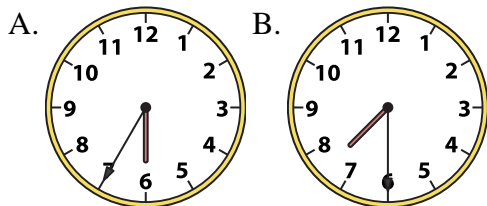
5) 10:00



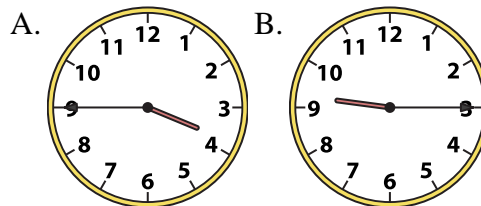
6) 2:15



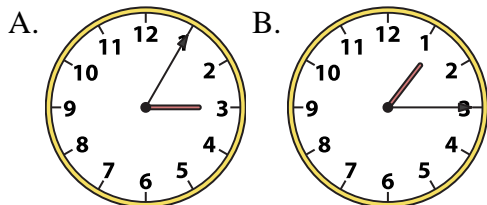
7) 7:30



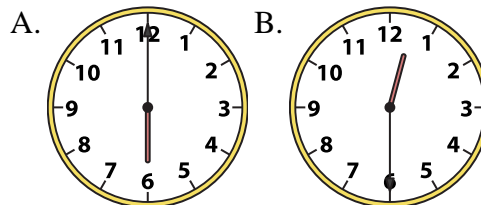
8) 9:15



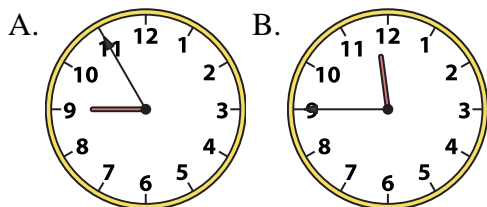
9) 1:15



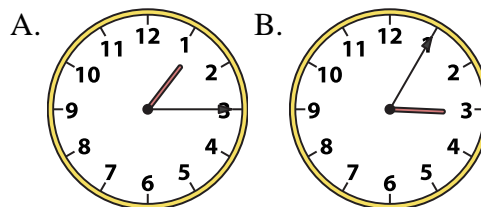
10) 12:30



11) 11:45



12) 1:15



1. \_\_\_\_\_
2. \_\_\_\_\_
3. \_\_\_\_\_
4. \_\_\_\_\_
5. \_\_\_\_\_
6. \_\_\_\_\_
7. \_\_\_\_\_
8. \_\_\_\_\_
9. \_\_\_\_\_
10. \_\_\_\_\_
11. \_\_\_\_\_
12. \_\_\_\_\_

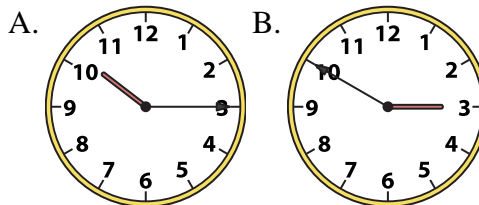
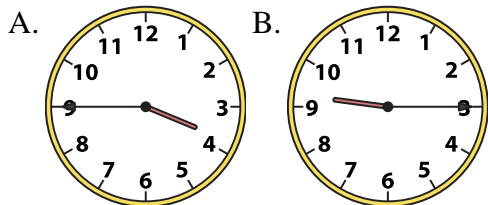


Determine which clock accurately shows the time.

**Answers**

1) 3:45

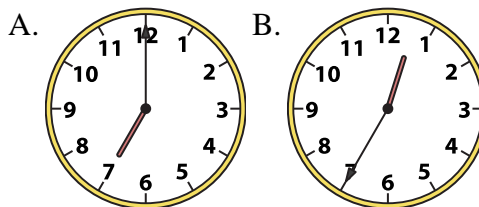
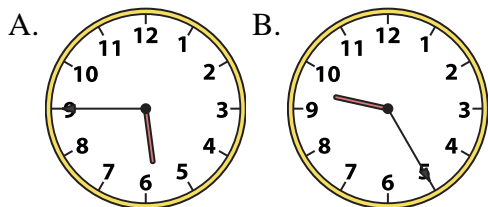
2) 10:15



1.   **A**  

3) 5:45

4) 7:00



2.   **A**  

3.   **A**  

4.   **A**  

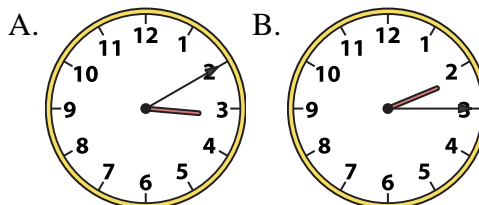
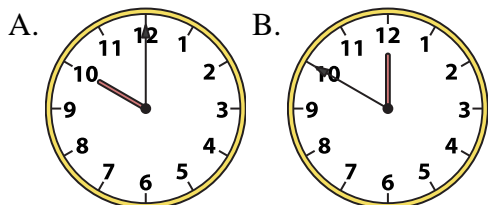
5.   **A**  

6.   **B**  

7.   **B**  

5) 10:00

6) 2:15



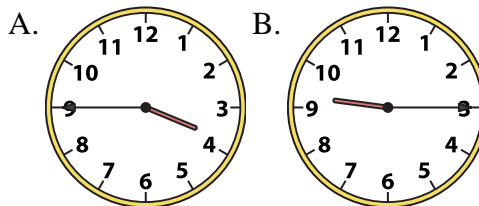
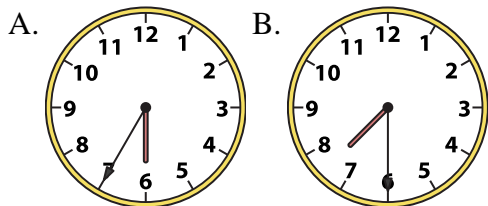
8.   **B**  

9.   **B**  

10.   **B**  

7) 7:30

8) 9:15

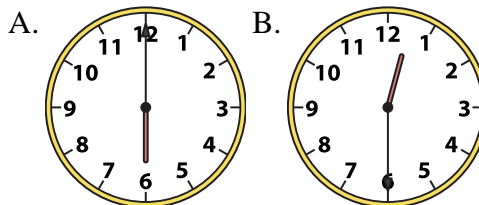
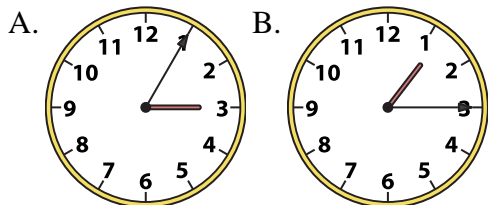


11.   **B**  

12.   **A**  

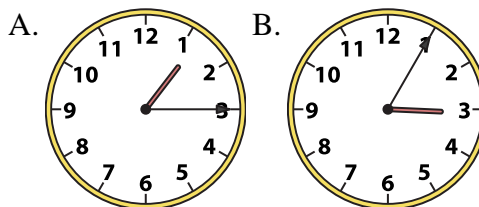
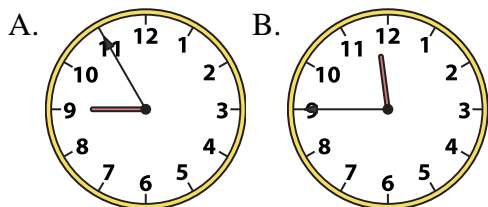
9) 1:15

10) 12:30



11) 11:45

12) 1:15

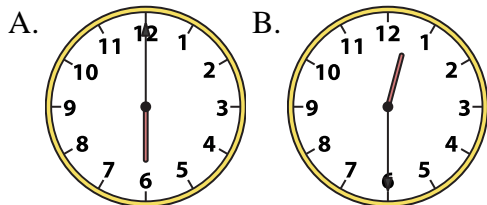




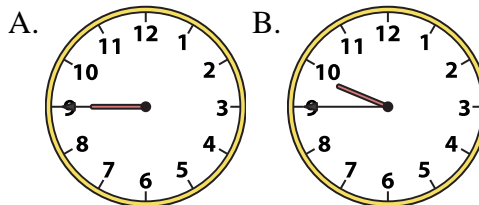
Determine which clock accurately shows the time.

**Answers**

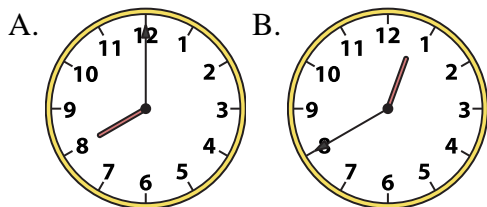
1) 12:30



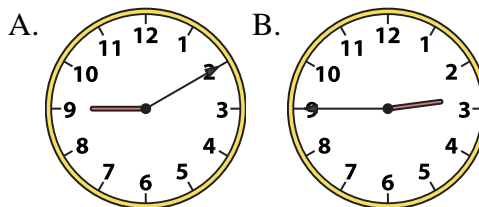
2) 9:45



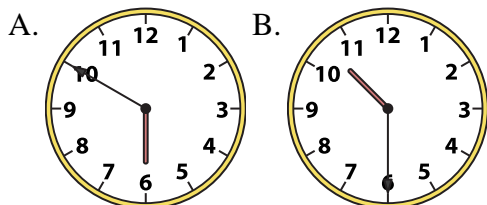
3) 8:00



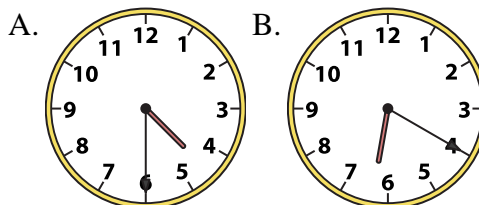
4) 2:45



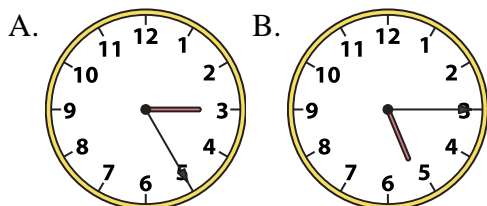
5) 10:30



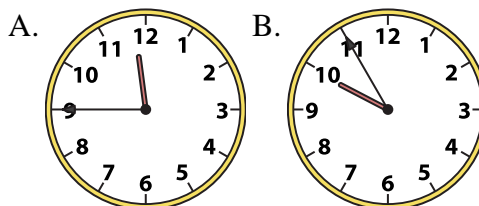
6) 4:30



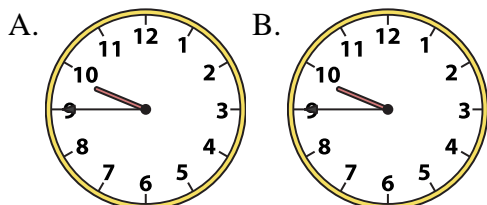
7) 5:15



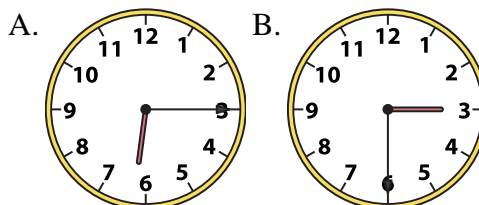
8) 11:45



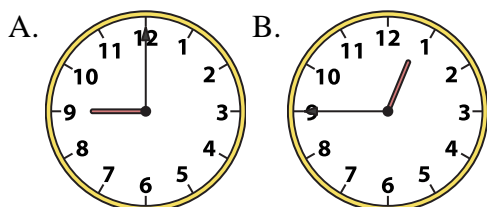
9) 9:45



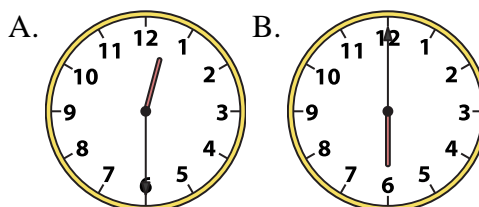
10) 6:15



11) 12:45



12) 6:00



1. \_\_\_\_\_
2. \_\_\_\_\_
3. \_\_\_\_\_
4. \_\_\_\_\_
5. \_\_\_\_\_
6. \_\_\_\_\_
7. \_\_\_\_\_
8. \_\_\_\_\_
9. \_\_\_\_\_
10. \_\_\_\_\_
11. \_\_\_\_\_
12. \_\_\_\_\_

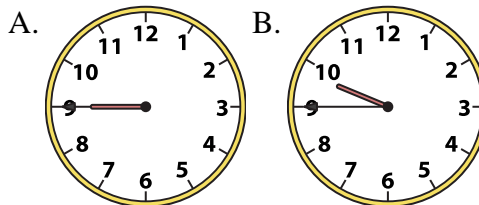
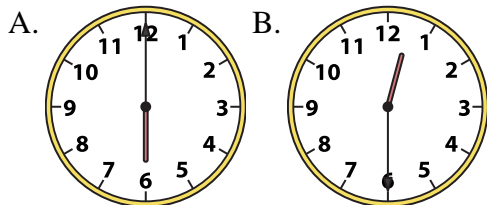


Determine which clock accurately shows the time.

**Answers**

1) 12:30

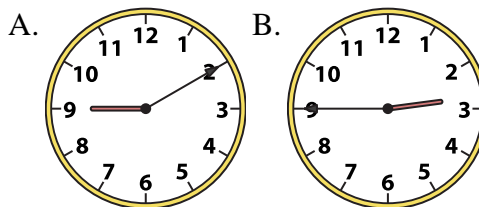
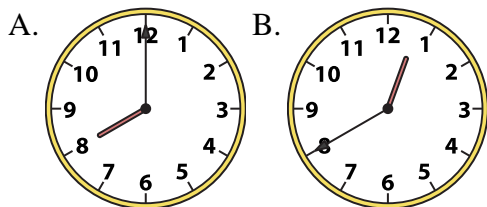
2) 9:45



1. **B**

3) 8:00

4) 2:45



2. **B**

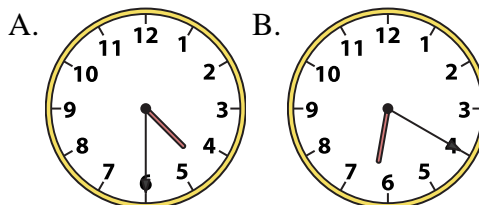
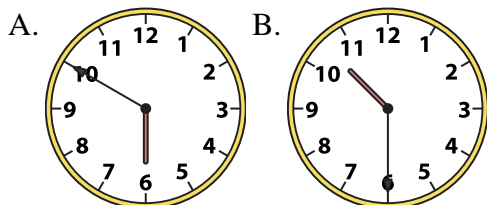
3. **A**

4. **B**

5. **B**

5) 10:30

6) 4:30



6. **A**

7. **B**

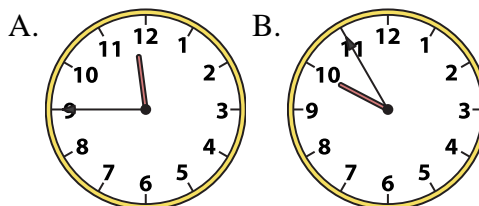
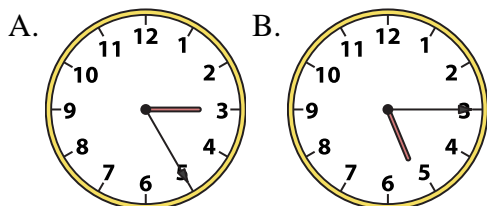
8. **A**

9. **B**

10. **A**

7) 5:15

8) 11:45

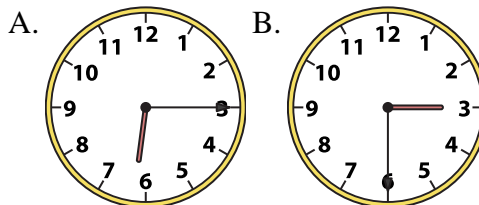
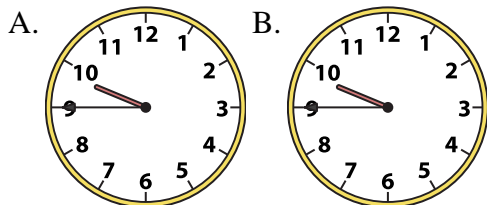


11. **B**

12. **B**

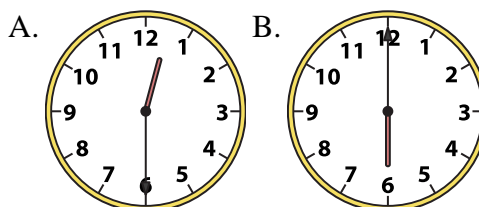
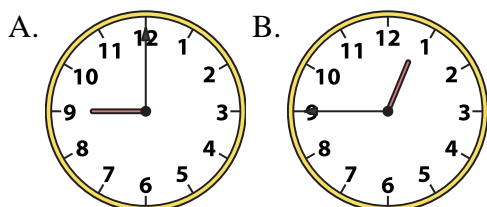
9) 9:45

10) 6:15



11) 12:45

12) 6:00



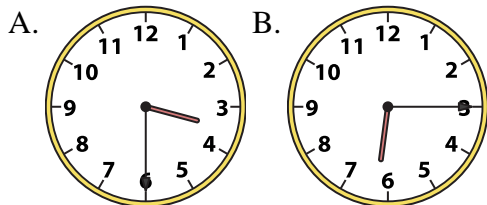




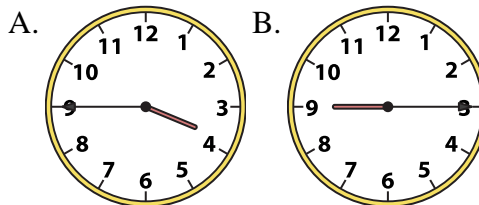
Determine which clock accurately shows the time.

**Answers**

1) 3:30



2) 3:45

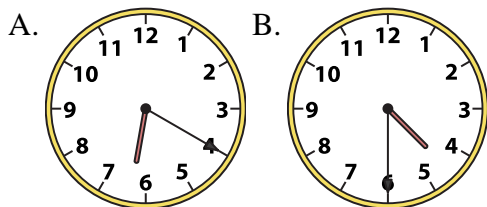


1. \_\_\_\_\_

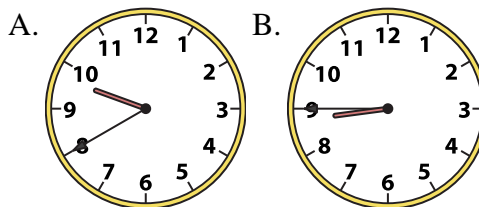
2. \_\_\_\_\_

3. \_\_\_\_\_

3) 4:30



4) 8:45

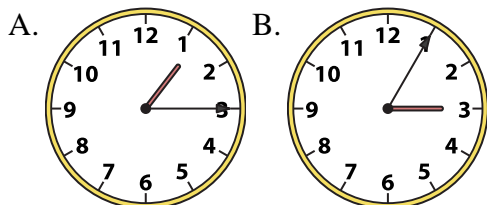


4. \_\_\_\_\_

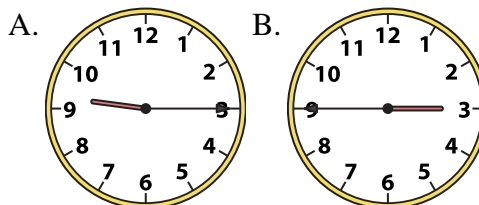
5. \_\_\_\_\_

6. \_\_\_\_\_

5) 1:15



6) 9:15



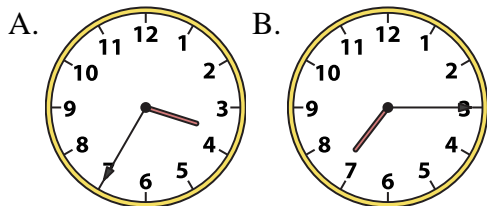
7. \_\_\_\_\_

8. \_\_\_\_\_

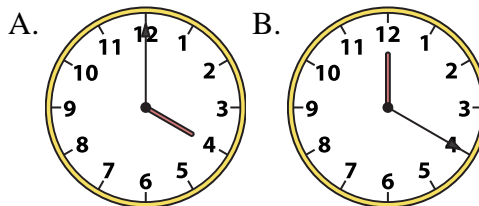
9. \_\_\_\_\_

10. \_\_\_\_\_

7) 7:15



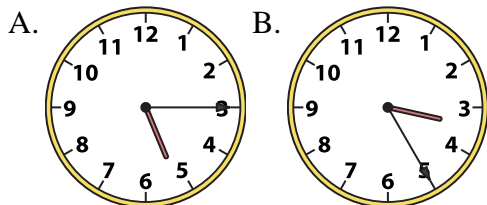
8) 4:00



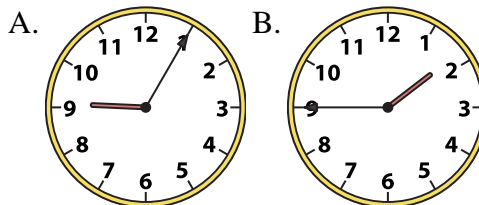
11. \_\_\_\_\_

12. \_\_\_\_\_

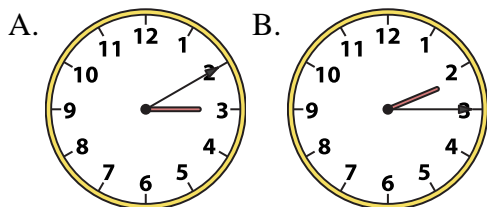
9) 5:15



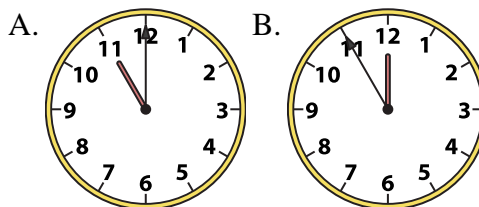
10) 1:45



11) 2:15



12) 11:00



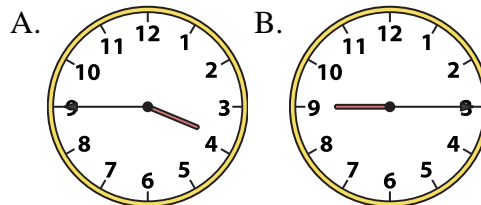
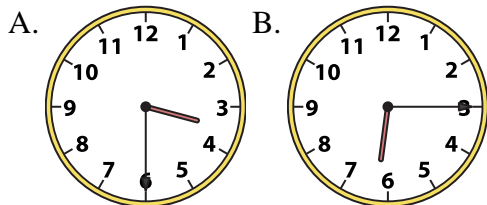


Determine which clock accurately shows the time.

**Answers**

1) 3:30

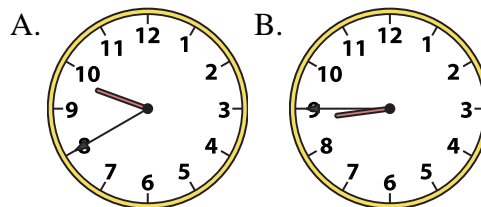
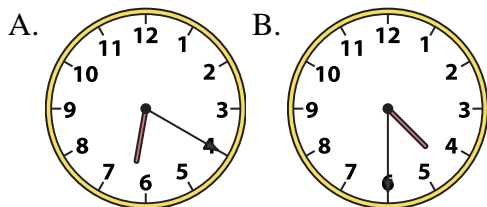
2) 3:45



1. **A**

3) 4:30

4) 8:45



2. **A**

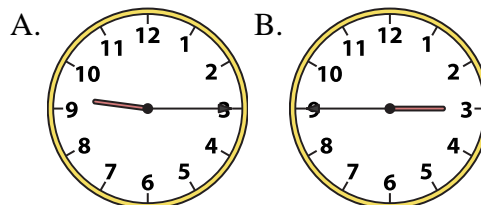
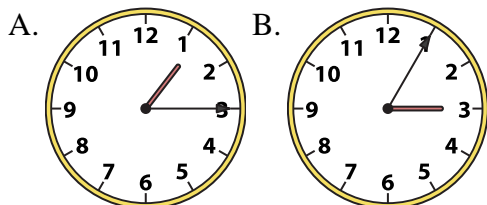
3. **B**

4. **B**

5. **A**

5) 1:15

6) 9:15



6. **A**

7. **B**

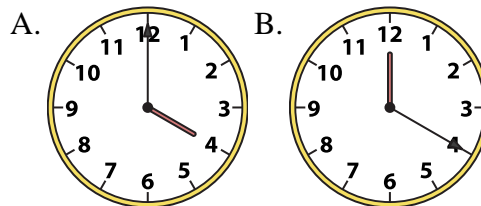
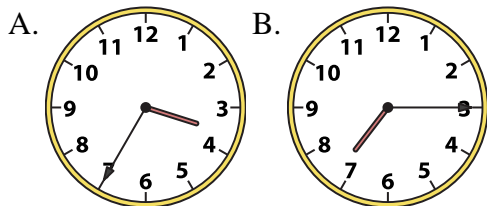
8. **A**

9. **A**

10. **B**

7) 7:15

8) 4:00

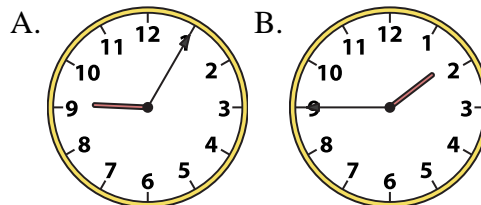
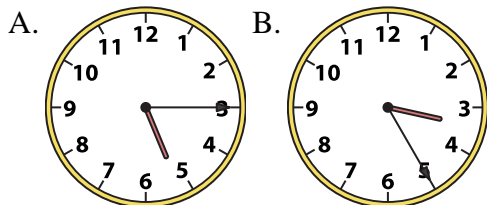


11. **B**

12. **A**

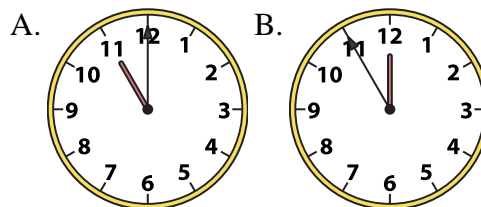
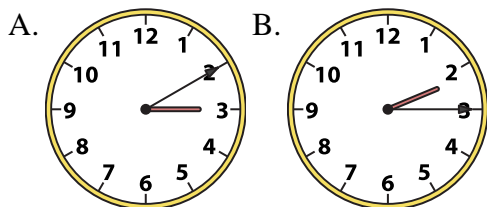
9) 5:15

10) 1:45



11) 2:15

12) 11:00

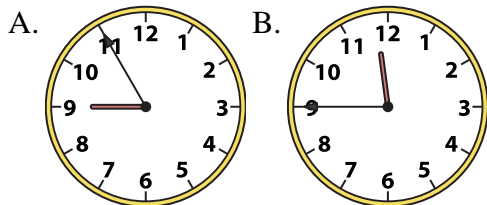




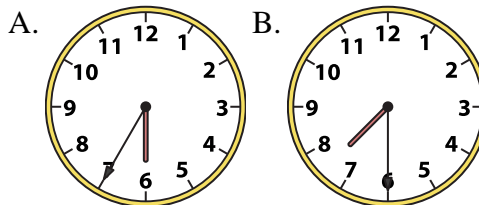
Determine which clock accurately shows the time.

**Answers**

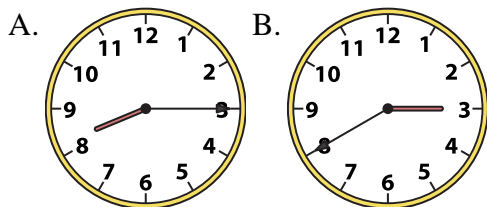
1) 11:45



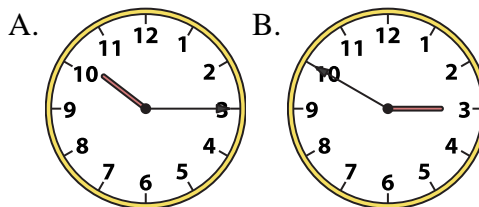
2) 7:30



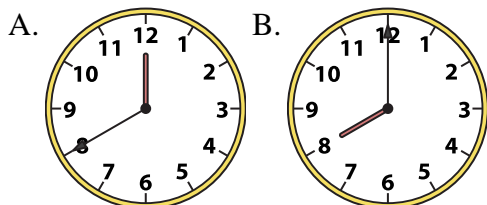
3) 8:15



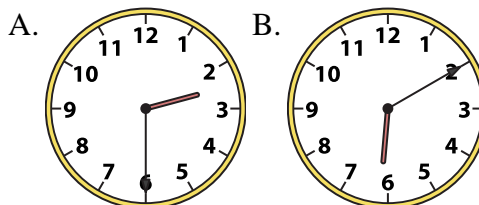
4) 10:15



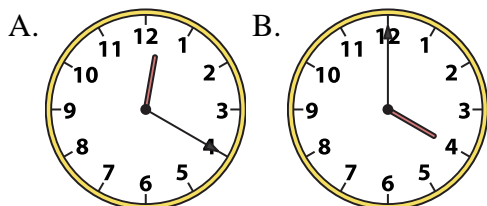
5) 8:00



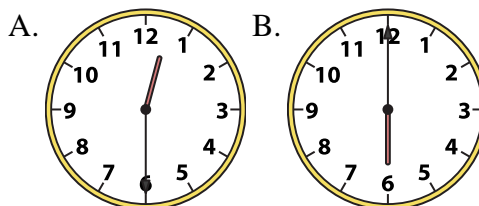
6) 2:30



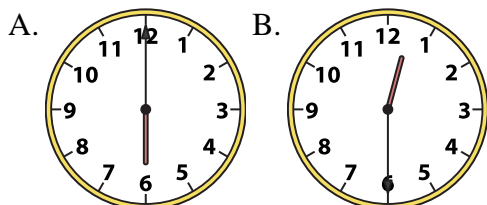
7) 4:00



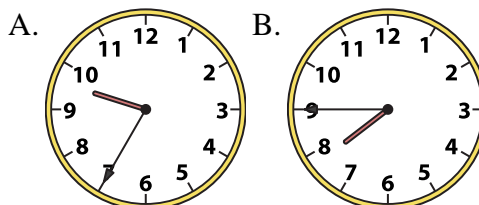
8) 12:30



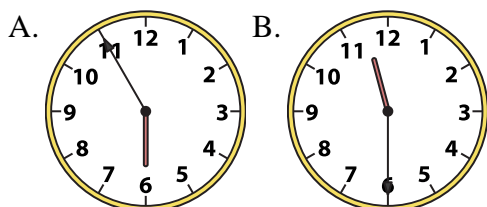
9) 12:30



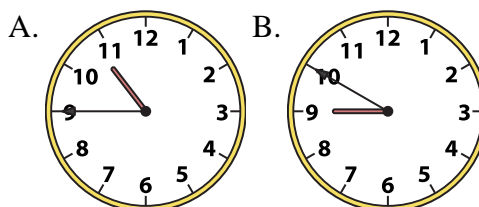
10) 7:45



11) 11:30



12) 10:45



1. \_\_\_\_\_
2. \_\_\_\_\_
3. \_\_\_\_\_
4. \_\_\_\_\_
5. \_\_\_\_\_
6. \_\_\_\_\_
7. \_\_\_\_\_
8. \_\_\_\_\_
9. \_\_\_\_\_
10. \_\_\_\_\_
11. \_\_\_\_\_
12. \_\_\_\_\_

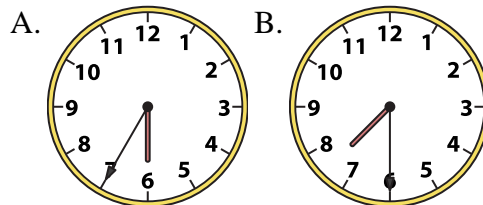
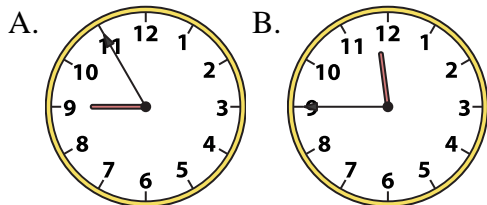


Determine which clock accurately shows the time.

**Answers**

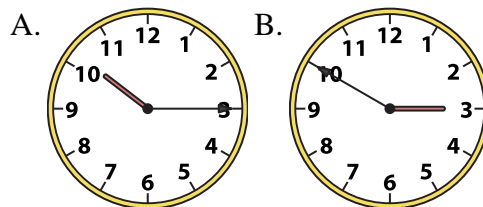
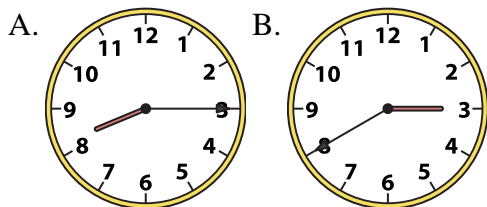
1) 11:45

2) 7:30



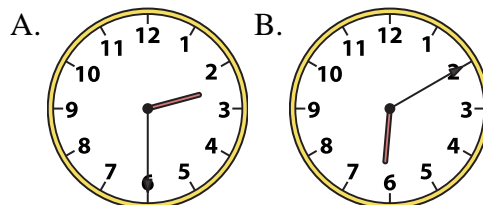
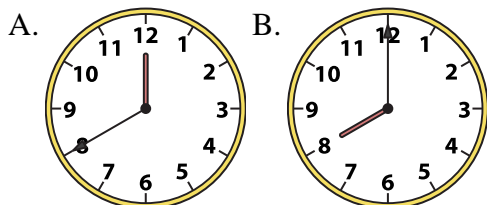
3) 8:15

4) 10:15



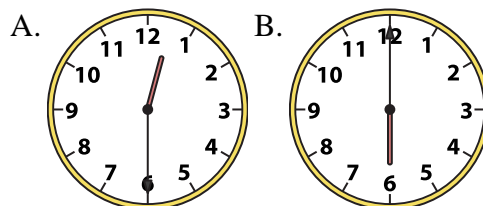
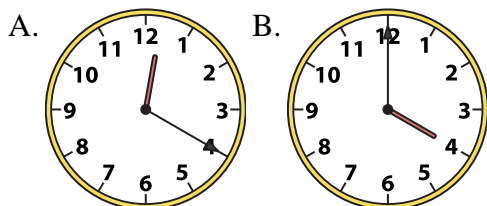
5) 8:00

6) 2:30



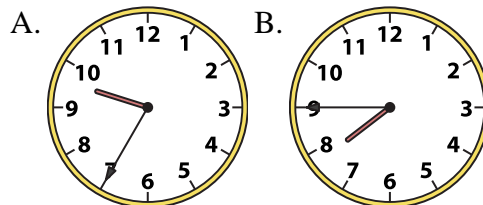
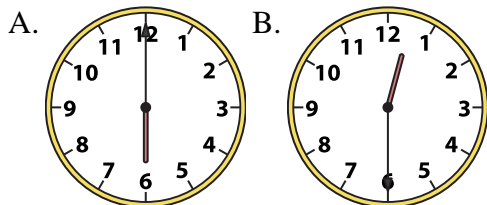
7) 4:00

8) 12:30



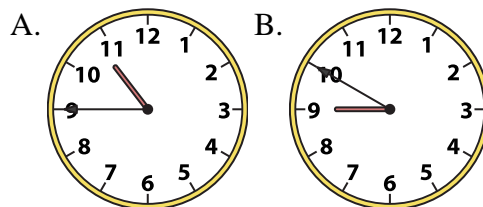
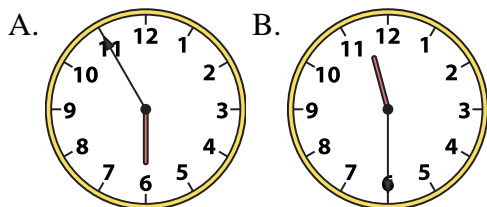
9) 12:30

10) 7:45



11) 11:30

12) 10:45



1. **B**

2. **B**

3. **A**

4. **A**

5. **B**

6. **A**

7. **B**

8. **A**

9. **B**

10. **B**

11. **B**

12. **A**