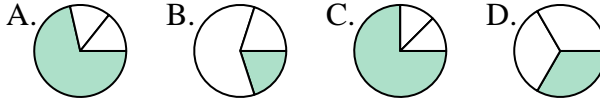




Determine which letter best represents each fraction.

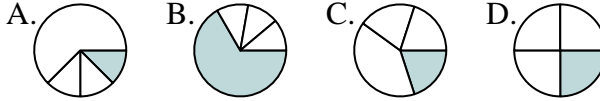
**Answers**

1) Which choice best represents  $\frac{1}{3}$ ?



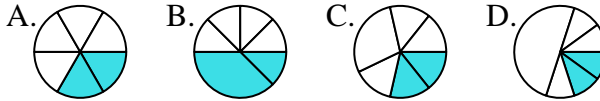
1. \_\_\_\_\_

2) Which choice best represents  $\frac{1}{4}$ ?



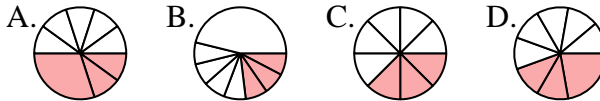
2. \_\_\_\_\_

3) Which choice best represents  $\frac{2}{6}$ ?



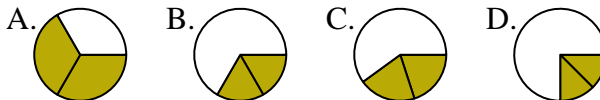
3. \_\_\_\_\_

4) Which choice best represents  $\frac{3}{8}$ ?



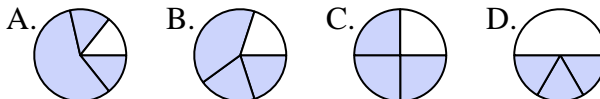
4. \_\_\_\_\_

5) Which choice best represents  $\frac{2}{3}$ ?



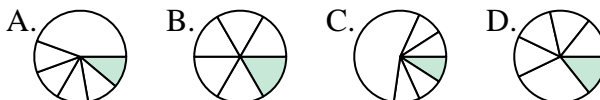
5. \_\_\_\_\_

6) Which choice best represents  $\frac{3}{4}$ ?



6. \_\_\_\_\_

7) Which choice best represents  $\frac{1}{6}$ ?



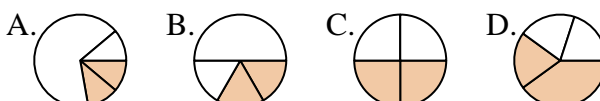
7. \_\_\_\_\_

8) Which choice best represents  $\frac{1}{8}$ ?



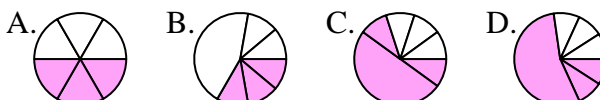
8. \_\_\_\_\_

9) Which choice best represents  $\frac{2}{4}$ ?



9. \_\_\_\_\_

10) Which choice best represents  $\frac{3}{6}$ ?



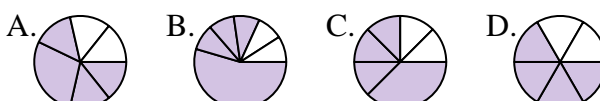
10. \_\_\_\_\_

11) Which choice best represents  $\frac{5}{8}$ ?



11. \_\_\_\_\_

12) Which choice best represents  $\frac{4}{6}$ ?



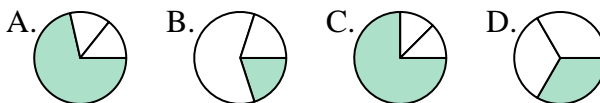
12. \_\_\_\_\_



Determine which letter best represents each fraction.

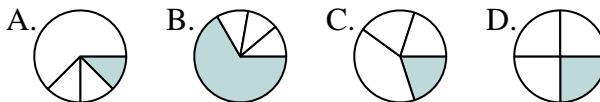
**Answers**

1) Which choice best represents  $\frac{1}{3}$ ?



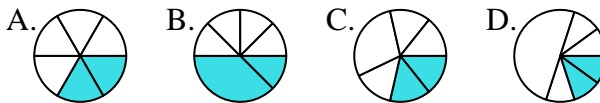
1.   **D**  

2) Which choice best represents  $\frac{1}{4}$ ?



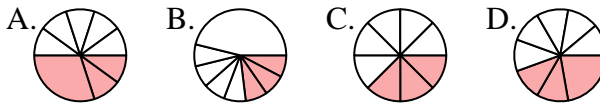
2.   **D**  

3) Which choice best represents  $\frac{2}{6}$ ?



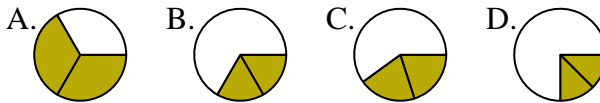
3.   **A**  

4) Which choice best represents  $\frac{3}{8}$ ?



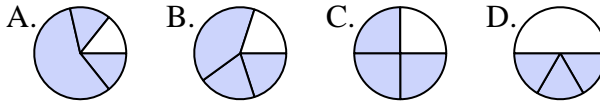
4.   **C**  

5) Which choice best represents  $\frac{2}{3}$ ?



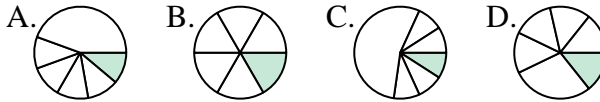
5.   **A**  

6) Which choice best represents  $\frac{3}{4}$ ?



6.   **C**  

7) Which choice best represents  $\frac{1}{6}$ ?



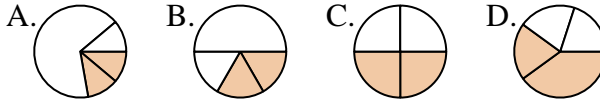
7.   **B**  

8) Which choice best represents  $\frac{1}{8}$ ?



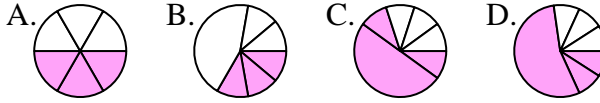
8.   **A**  

9) Which choice best represents  $\frac{2}{4}$ ?



9.   **C**  

10) Which choice best represents  $\frac{3}{6}$ ?



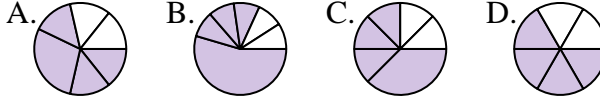
10.   **A**  

11) Which choice best represents  $\frac{5}{8}$ ?



11.   **C**  

12) Which choice best represents  $\frac{4}{6}$ ?



12.   **D**