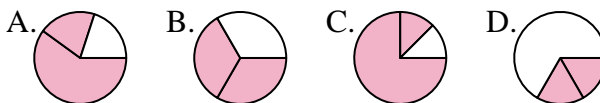




Determine which letter best represents each fraction.

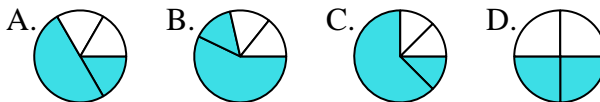
**Answers**

1) Which choice best represents  $\frac{2}{3}$ ?



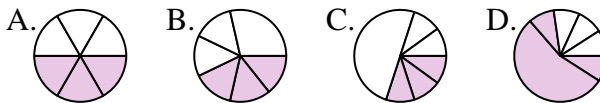
1. \_\_\_\_\_

2) Which choice best represents  $\frac{2}{4}$ ?



2. \_\_\_\_\_

3) Which choice best represents  $\frac{3}{6}$ ?



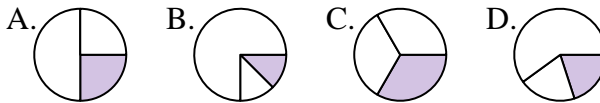
3. \_\_\_\_\_

4) Which choice best represents  $\frac{6}{8}$ ?



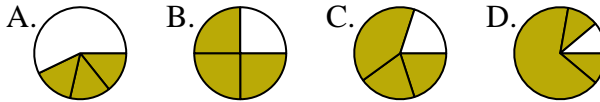
4. \_\_\_\_\_

5) Which choice best represents  $\frac{1}{3}$ ?



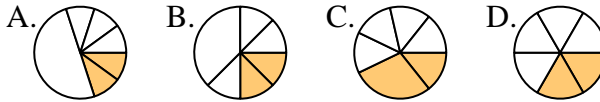
5. \_\_\_\_\_

6) Which choice best represents  $\frac{3}{4}$ ?



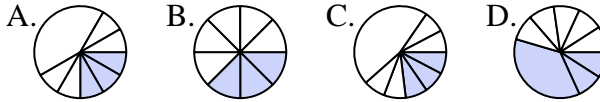
6. \_\_\_\_\_

7) Which choice best represents  $\frac{2}{6}$ ?



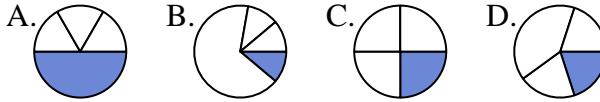
7. \_\_\_\_\_

8) Which choice best represents  $\frac{3}{8}$ ?



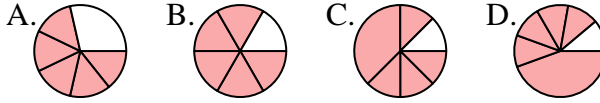
8. \_\_\_\_\_

9) Which choice best represents  $\frac{1}{4}$ ?



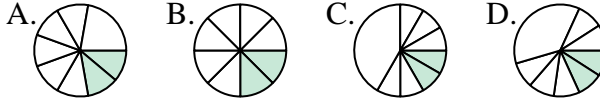
9. \_\_\_\_\_

10) Which choice best represents  $\frac{5}{6}$ ?



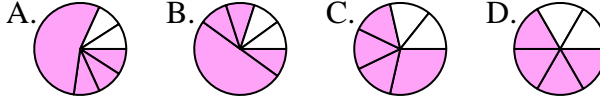
10. \_\_\_\_\_

11) Which choice best represents  $\frac{2}{8}$ ?



11. \_\_\_\_\_

12) Which choice best represents  $\frac{4}{6}$ ?



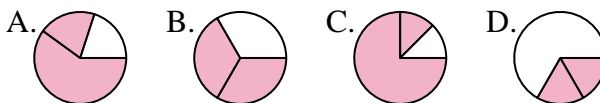
12. \_\_\_\_\_



Determine which letter best represents each fraction.

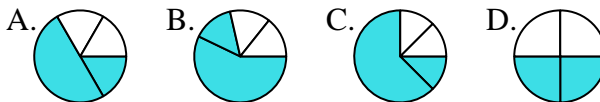
**Answers**

1) Which choice best represents  $\frac{2}{3}$ ?



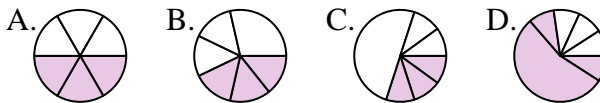
1. **B**

2) Which choice best represents  $\frac{2}{4}$ ?



2. **D**

3) Which choice best represents  $\frac{3}{6}$ ?



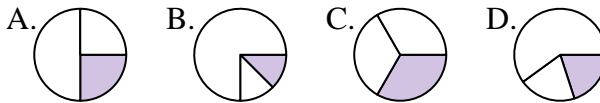
3. **A**

4) Which choice best represents  $\frac{6}{8}$ ?



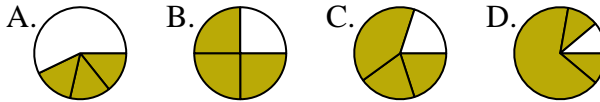
4. **A**

5) Which choice best represents  $\frac{1}{3}$ ?



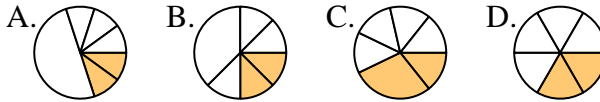
5. **C**

6) Which choice best represents  $\frac{3}{4}$ ?



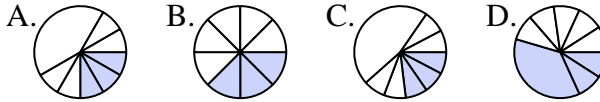
6. **B**

7) Which choice best represents  $\frac{2}{6}$ ?



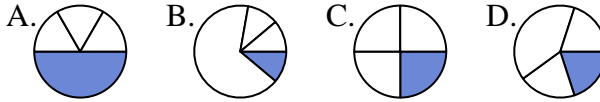
7. **D**

8) Which choice best represents  $\frac{3}{8}$ ?



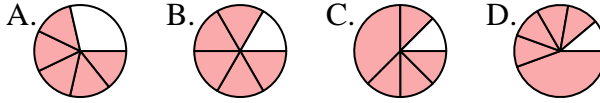
8. **B**

9) Which choice best represents  $\frac{1}{4}$ ?



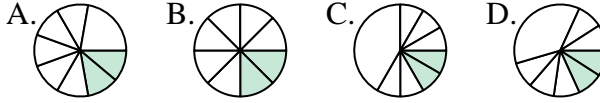
9. **C**

10) Which choice best represents  $\frac{5}{6}$ ?



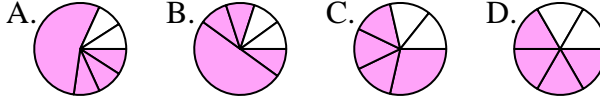
10. **B**

11) Which choice best represents  $\frac{2}{8}$ ?



11. **B**

12) Which choice best represents  $\frac{4}{6}$ ?



12. **D**