



Identifying Fractions

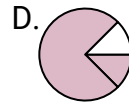
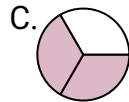
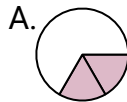
Name: _____

Determine which letter best represents each fraction.

Answers

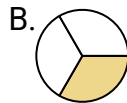
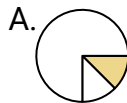
1)

Which choice best represents $\frac{2}{3}$?



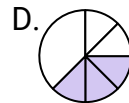
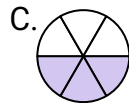
2)

Which choice best represents $\frac{1}{3}$?



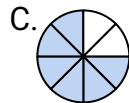
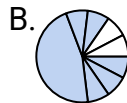
3)

Which choice best represents $\frac{3}{6}$?



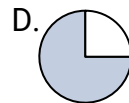
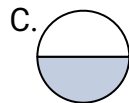
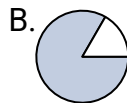
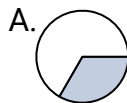
4)

Which choice best represents $\frac{6}{8}$?



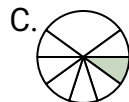
5)

Which choice best represents $\frac{1}{2}$?



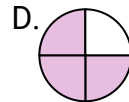
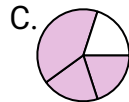
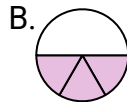
6)

Which choice best represents $\frac{1}{8}$?



7)

Which choice best represents $\frac{3}{4}$?



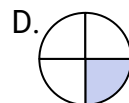
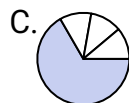
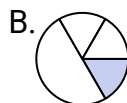
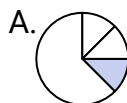
8)

Which choice best represents $\frac{4}{8}$?



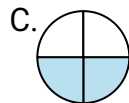
9)

Which choice best represents $\frac{1}{4}$?



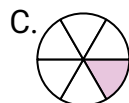
10)

Which choice best represents $\frac{2}{4}$?



11)

Which choice best represents $\frac{1}{6}$?



12)

Which choice best represents $\frac{5}{6}$?



1. _____

2. _____

3. _____

4. _____

5. _____

6. _____

7. _____

8. _____

9. _____

10. _____

11. _____

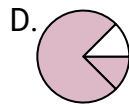
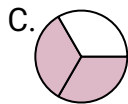
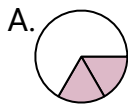
12. _____



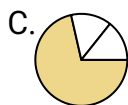
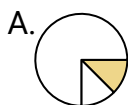
Determine which letter best represents each fraction.

Answers

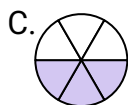
1) Which choice best represents $\frac{2}{3}$?

1. **C**

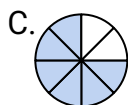
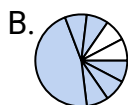
2) Which choice best represents $\frac{1}{3}$?

2. **B**

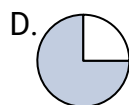
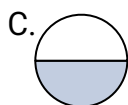
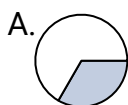
3) Which choice best represents $\frac{3}{6}$?

3. **C**

4) Which choice best represents $\frac{6}{8}$?

4. **C**

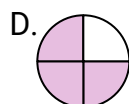
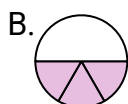
5) Which choice best represents $\frac{1}{2}$?

5. **C**

6) Which choice best represents $\frac{1}{8}$?

6. **D**

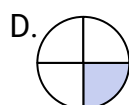
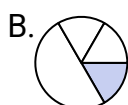
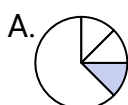
7) Which choice best represents $\frac{3}{4}$?

7. **D**

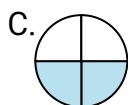
8) Which choice best represents $\frac{4}{8}$?

8. **D**

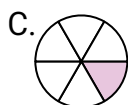
9) Which choice best represents $\frac{1}{4}$?

9. **D**

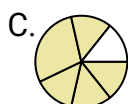
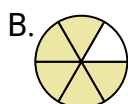
10) Which choice best represents $\frac{2}{4}$?

10. **C**

11) Which choice best represents $\frac{1}{6}$?

11. **C**

12) Which choice best represents $\frac{5}{6}$?

12. **B**