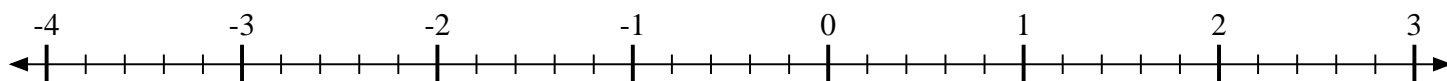


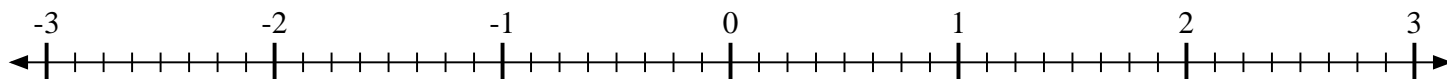


Mark each location described.

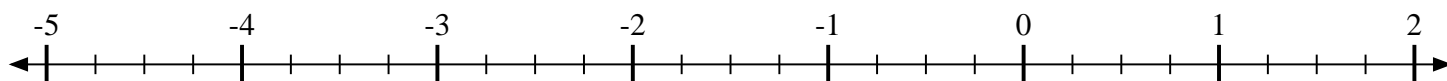
- 1) Mark the location of  $-3\frac{4}{5}$



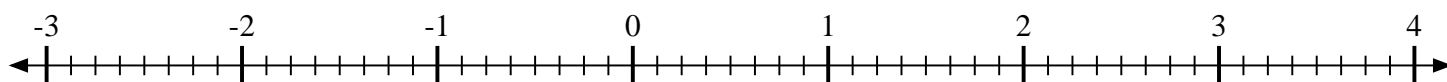
- 2) Mark the location of  $2\frac{6}{8}$



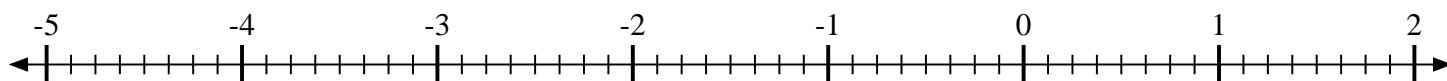
- 3) Mark the location of  $-4\frac{2}{4}$



- 4) Mark the location of  $1\frac{5}{8}$



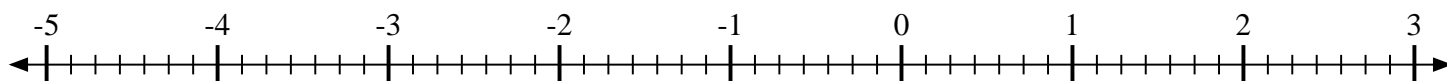
- 5) Mark the location of  $-2\frac{6}{8}$



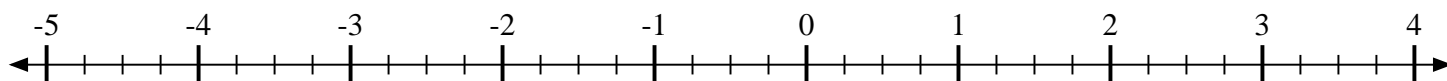
- 6) Mark the location of  $-1\frac{1}{3}$



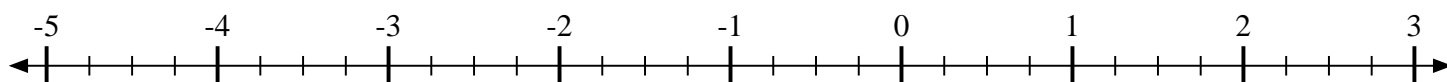
- 7) Mark the location of  $-3\frac{2}{7}$



- 8) Mark the location of  $3\frac{1}{4}$



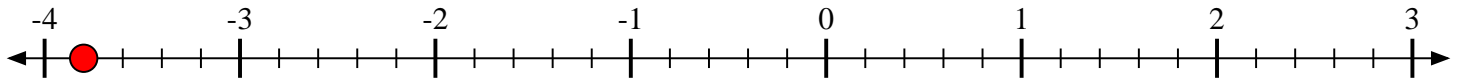
- 9) Mark the location of  $-3\frac{3}{4}$



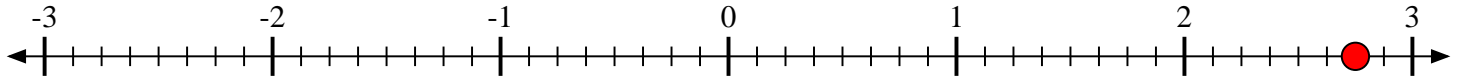


Mark each location described.

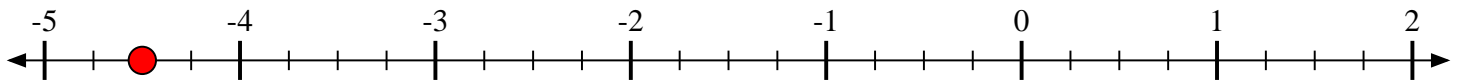
- 1) Mark the location of
- $-3\frac{4}{5}$



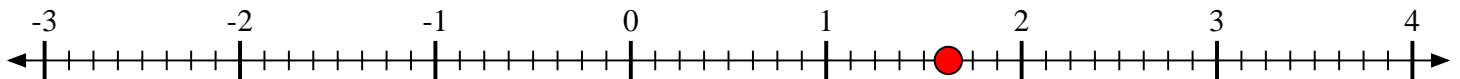
- 2) Mark the location of
- $2\frac{6}{8}$



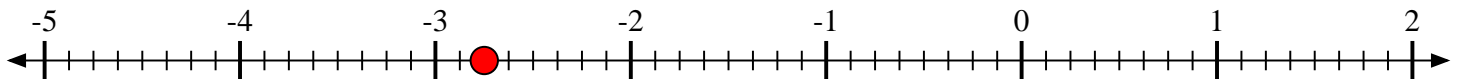
- 3) Mark the location of
- $-4\frac{2}{4}$



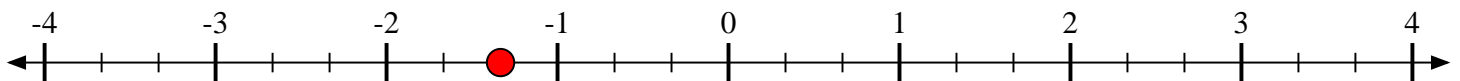
- 4) Mark the location of
- $1\frac{5}{8}$



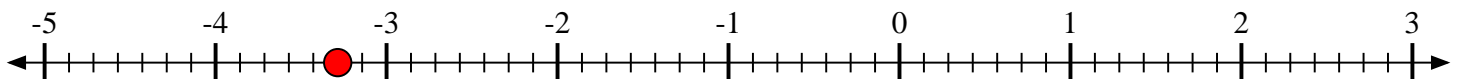
- 5) Mark the location of
- $-2\frac{6}{8}$



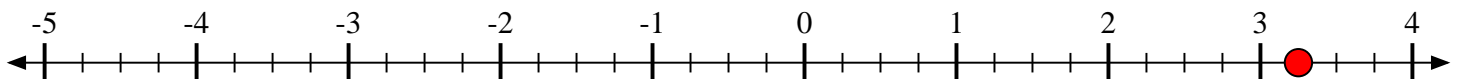
- 6) Mark the location of
- $-1\frac{1}{3}$



- 7) Mark the location of
- $-3\frac{2}{7}$



- 8) Mark the location of
- $3\frac{1}{4}$



- 9) Mark the location of
- $-3\frac{3}{4}$

