

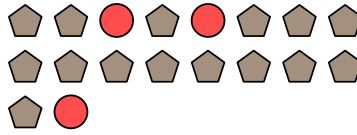


Solve each problem.

Ex) Express the stars as a fraction of the entire set.



1) Express the circles as a fraction of the entire set.




**Answers**

Ex.  $\frac{6}{10}$

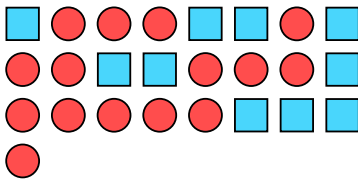
2) Express the circles as a fraction of the entire set.



3) Express the triangles as a fraction of the entire set.



4) Express the circles as a fraction of the entire set.



5) Express the hearts as a fraction of the entire set.



6) Express the circles as a fraction of the entire set.




7) Express the hearts as a fraction of the entire set.




8) Express the pentagons as a fraction of the entire set.




9) Express the stars as a fraction of the entire set.



10) Express the squares as a fraction of the entire set.



11) Express the stars as a fraction of the entire set.



1. \_\_\_\_\_

2. \_\_\_\_\_

3. \_\_\_\_\_

4. \_\_\_\_\_

5. \_\_\_\_\_

6. \_\_\_\_\_

7. \_\_\_\_\_

8. \_\_\_\_\_

9. \_\_\_\_\_

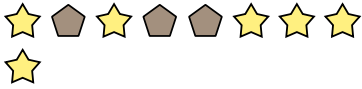
10. \_\_\_\_\_

11. \_\_\_\_\_

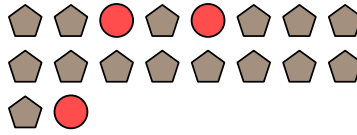


Solve each problem.

Ex) Express the stars as a fraction of the entire set.



1) Express the circles as a fraction of the entire set.




**Answers**

Ex.  $\frac{6}{9}$

2) Express the circles as a fraction of the entire set.



3) Express the triangles as a fraction of the entire set.



1.  $\frac{3}{18}$

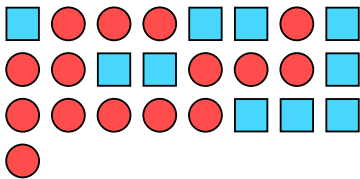
2.  $\frac{4}{9}$

3.  $\frac{4}{17}$

4.  $\frac{15}{25}$

5.  $\frac{2}{15}$

4) Express the circles as a fraction of the entire set.



5) Express the hearts as a fraction of the entire set.



6.  $\frac{3}{7}$

7.  $\frac{5}{11}$

8.  $\frac{5}{9}$

9.  $\frac{5}{20}$

6) Express the circles as a fraction of the entire set.



7) Express the hearts as a fraction of the entire set.




10.  $\frac{8}{23}$

11.  $\frac{13}{19}$


8) Express the pentagons as a fraction of the entire set.



9) Express the stars as a fraction of the entire set.



10) Express the squares as a fraction of the entire set.



11) Express the stars as a fraction of the entire set.

