



Shade in the visual fraction to find the equivalent fraction.

Ex) $\frac{1}{4} = \frac{3}{12}$

1) $\frac{0}{2} =$

2) $\frac{1}{4} =$

3) $\frac{4}{4} =$

4) $\frac{2}{3} =$

5) $\frac{3}{6} =$

6) $\frac{1}{3} =$

7) $\frac{2}{4} =$

8) $\frac{4}{8} =$

9) $\frac{1}{2} =$

Answers

Ex. $\frac{3}{12}$

1. _____

2. _____

3. _____

4. _____

5. _____

6. _____

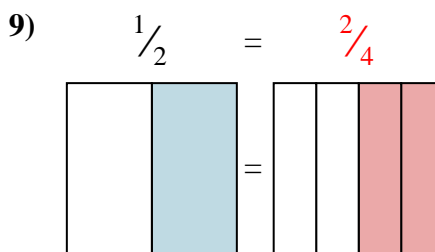
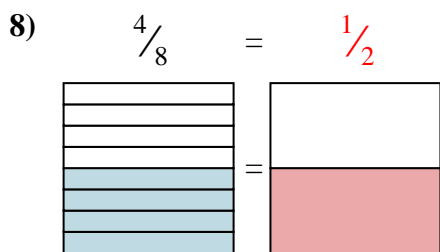
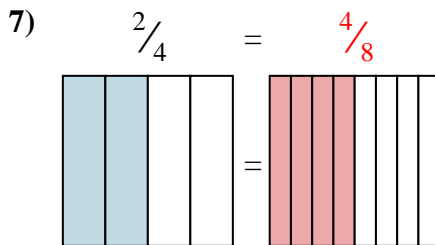
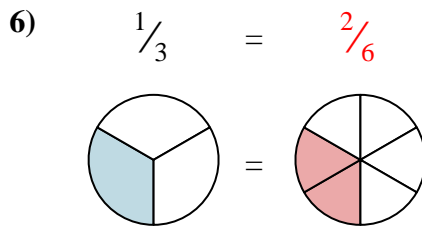
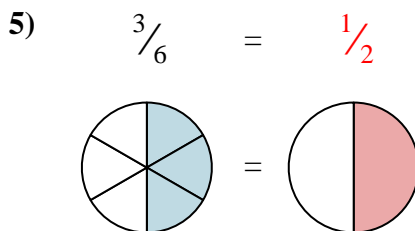
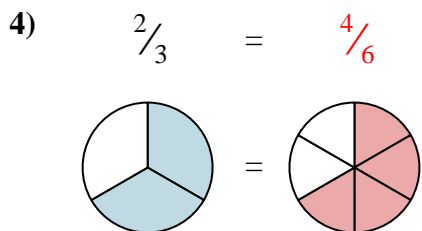
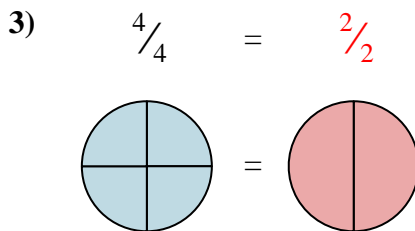
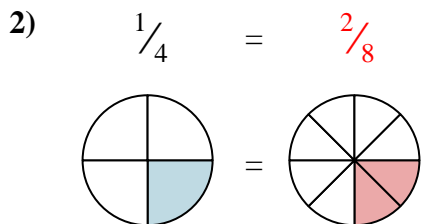
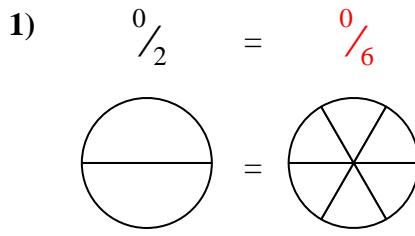
7. _____

8. _____

9. _____



Shade in the visual fraction to find the equivalent fraction.



Answers

- Ex. $\frac{3}{12}$
1. $\frac{0}{6}$
2. $\frac{2}{8}$
3. $\frac{2}{2}$
4. $\frac{4}{6}$
5. $\frac{1}{2}$
6. $\frac{2}{6}$
7. $\frac{4}{8}$
8. $\frac{1}{2}$
9. $\frac{2}{4}$