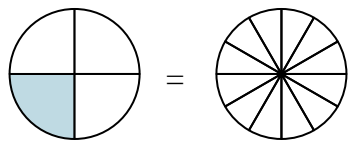


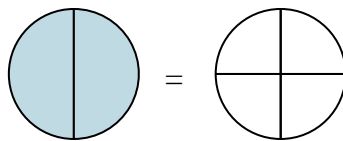


Shade in the visual fraction to find the equivalent fraction.

Ex) $\frac{1}{4} = \frac{3}{12}$



1) $\frac{2}{2} =$



Ex. $\frac{3}{12}$

1. _____

2. _____

3. _____

4. _____

5. _____

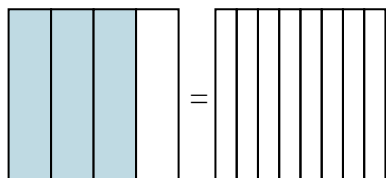
6. _____

7. _____

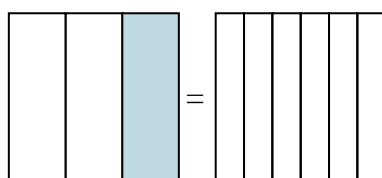
8. _____

9. _____

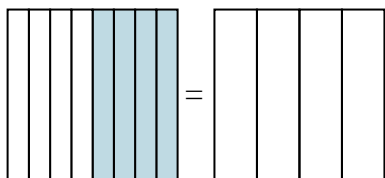
2) $\frac{3}{4} =$



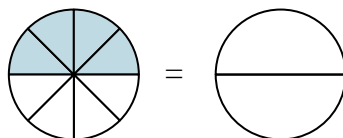
3) $\frac{1}{3} =$



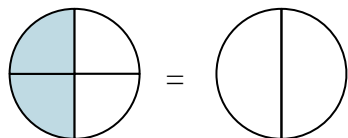
4) $\frac{4}{8} =$



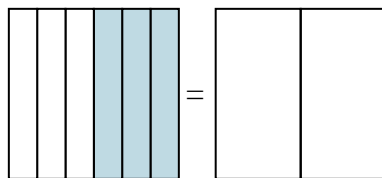
5) $\frac{4}{8} =$



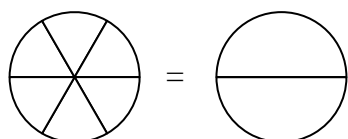
6) $\frac{2}{4} =$



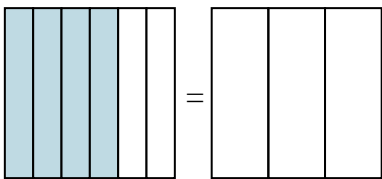
7) $\frac{3}{6} =$



8) $\frac{0}{6} =$

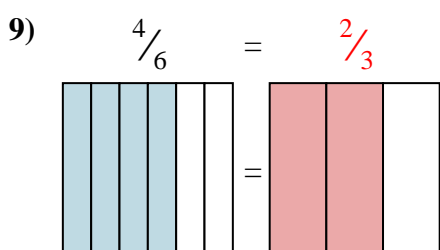
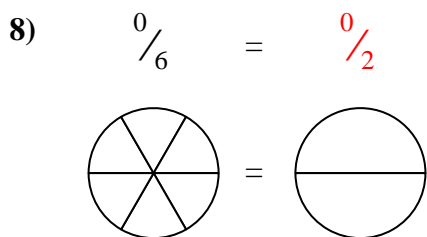
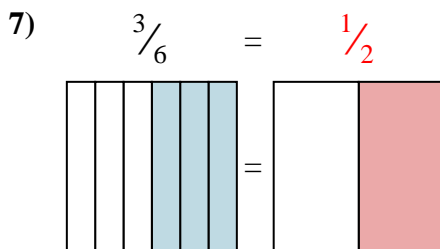
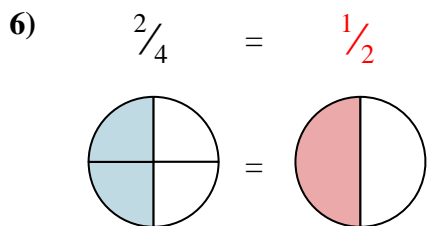
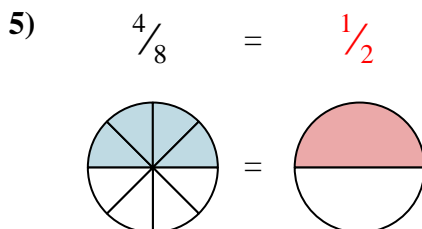
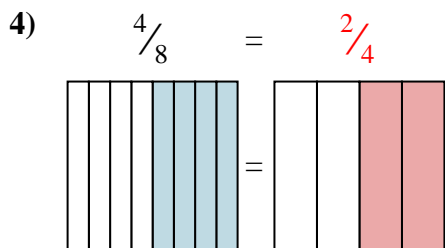
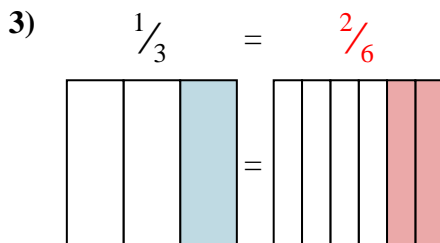
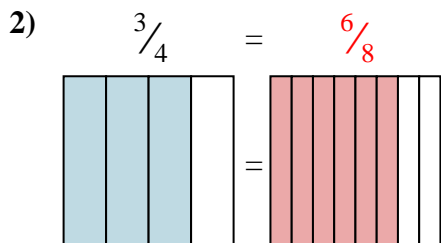
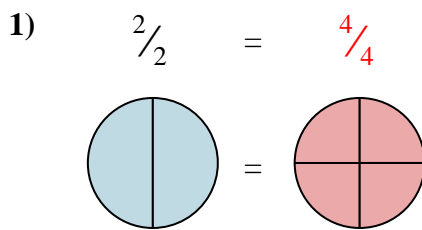
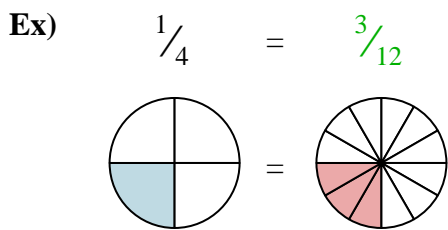


9) $\frac{4}{6} =$





Shade in the visual fraction to find the equivalent fraction.



Answers

Ex. $\frac{3}{12}$

1. $\frac{4}{4}$

2. $\frac{6}{8}$

3. $\frac{2}{6}$

4. $\frac{2}{4}$

5. $\frac{1}{2}$

6. $\frac{1}{2}$

7. $\frac{1}{2}$

8. $\frac{0}{2}$

9. $\frac{2}{3}$