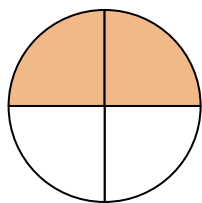


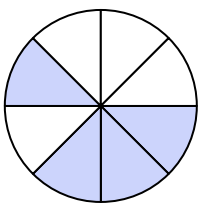


Write the shaded amount in word form.

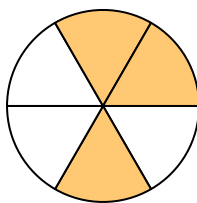
Ex)




1)



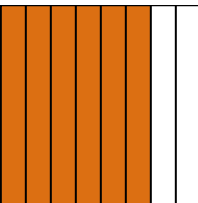
2)



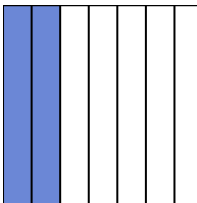
3)




4)



5)



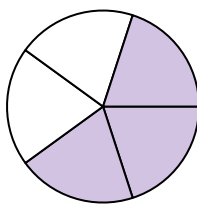
6)



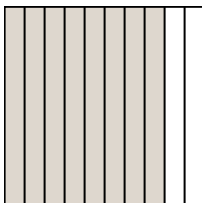
7)



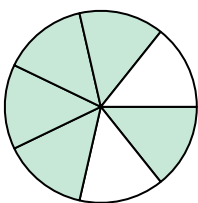
8)



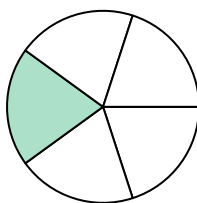
9)



10)




11)



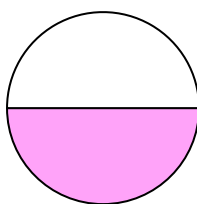
12)



13)



14)

**Answers**Ex. two-fourths

1. \_\_\_\_\_

2. \_\_\_\_\_

3. \_\_\_\_\_

4. \_\_\_\_\_

5. \_\_\_\_\_

6. \_\_\_\_\_

7. \_\_\_\_\_

8. \_\_\_\_\_

9. \_\_\_\_\_

10. \_\_\_\_\_

11. \_\_\_\_\_

12. \_\_\_\_\_

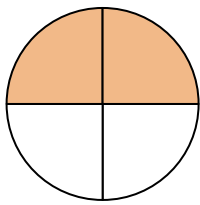
13. \_\_\_\_\_

14. \_\_\_\_\_

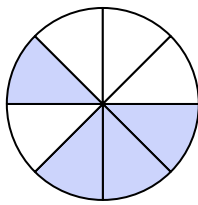


Write the shaded amount in word form.

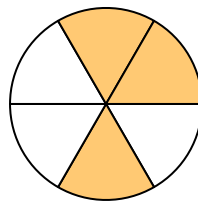
Ex)




1)



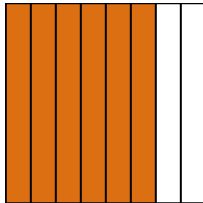
2)




3)




4)




5)



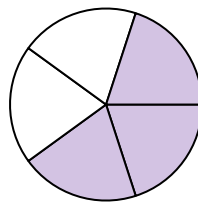
6)



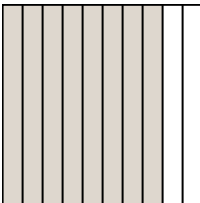
7)



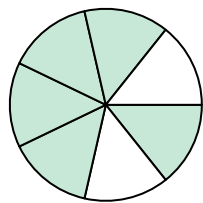
8)



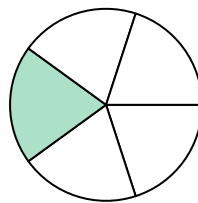
9)




10)




11)



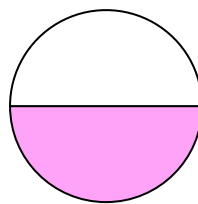
12)



13)



14)

**Answers**Ex. two-fourths1. four-eighths2. three-sixths3. three-tenths4. six-eighths5. two-sevenths6. four-sixths7. four-ninths8. three-fifths9. eight-tenths10. five-sevenths11. one-fifth12. two-fourths13. three-ninths14. one-half