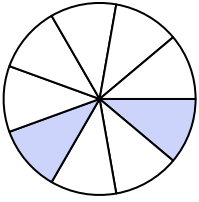





Write the shaded amount in word form.


Ex)



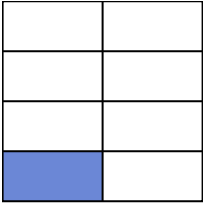
1)




2)



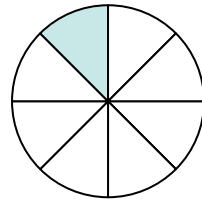
3)



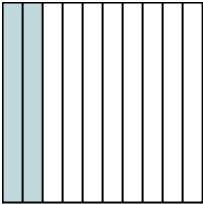
4)




5)



6)



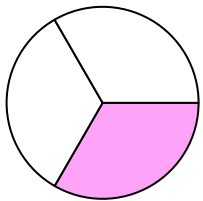
7)



8)



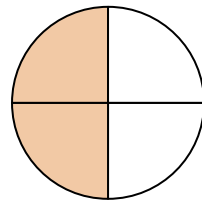
9)



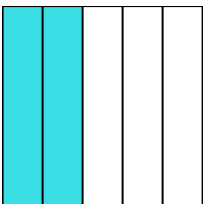
10)



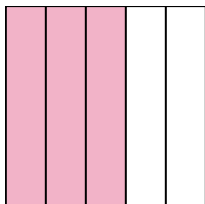
11)



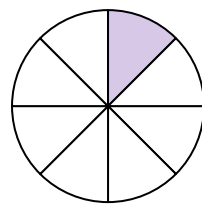
12)



13)



14)

**Answers**Ex. two-ninths

1. _____

2. _____

3. _____

4. _____

5. _____

6. _____

7. _____

8. _____

9. _____

10. _____

11. _____

12. _____

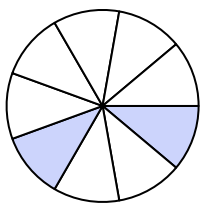
13. _____

14. _____




Write the shaded amount in word form.

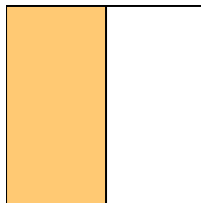
Ex)



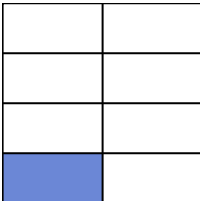
1)




2)



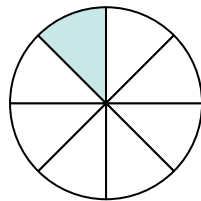
3)




4)




5)




6)



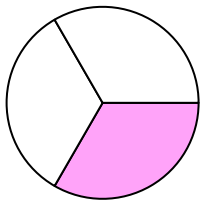
7)



8)



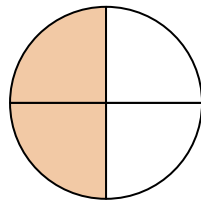
9)



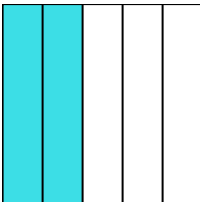
10)



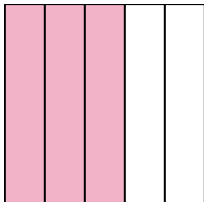
11)



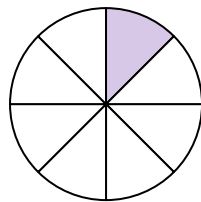
12)



13)



14)

**Answers**

Ex.

two-ninths

1.

nine-tenths

2.

one-half

3.

one-seventh

4.

seven-ninths

5.

one-eighth

6.

two-tenths

7.

four-sixths

8.

three-fourths

9.

one-third

10.

one-seventh

11.

two-fourths

12.

two-fifths

13.

three-fifths

14.

one-eighth