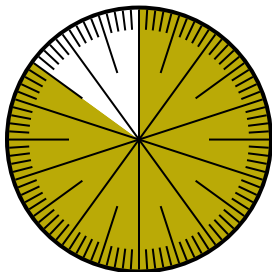


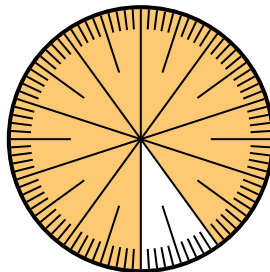


Solve each problem.

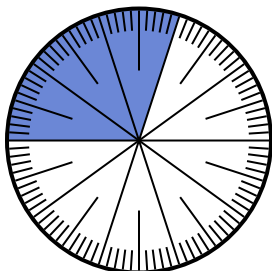
- 1) Express the shaded portion as a fraction of the whole with a 100 as the denominator.



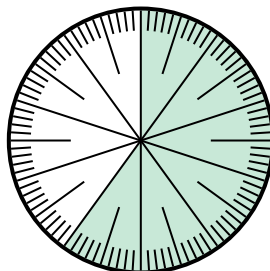
- 2) Express the shaded portion as a decimal of the whole.



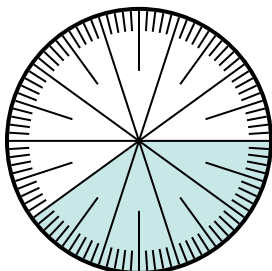
- 3) Express the shaded portion as a decimal of the whole.



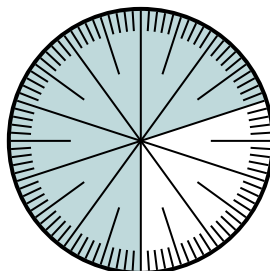
- 4) Express the shaded portion as a fraction of the whole with a 10 as the denominator.



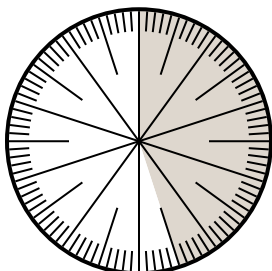
- 5) Express the shaded portion as a decimal of the whole.



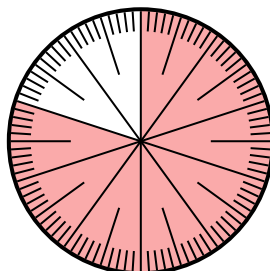
- 6) Express the shaded portion as a fraction of the whole with a 100 as the denominator.



- 7) Express the shaded portion as a decimal of the whole.



- 8) Express the shaded portion as a fraction of the whole with a 100 as the denominator.



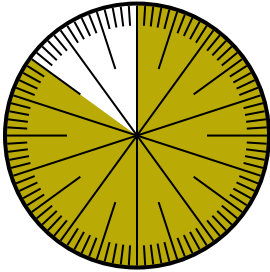
Answers

1. \_\_\_\_\_
2. \_\_\_\_\_
3. \_\_\_\_\_
4. \_\_\_\_\_
5. \_\_\_\_\_
6. \_\_\_\_\_
7. \_\_\_\_\_
8. \_\_\_\_\_

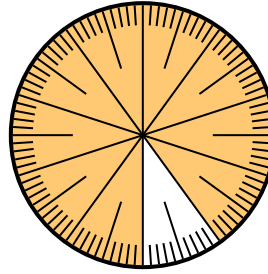


Solve each problem.

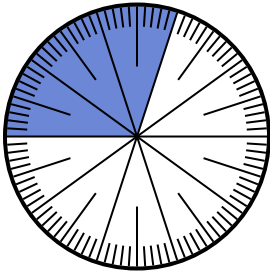
- 1) Express the shaded portion as a fraction of the whole with a 100 as the denominator.



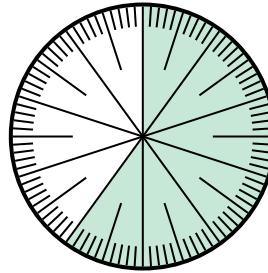
- 2) Express the shaded portion as a decimal of the whole.



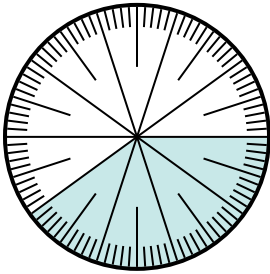
- 3) Express the shaded portion as a decimal of the whole.



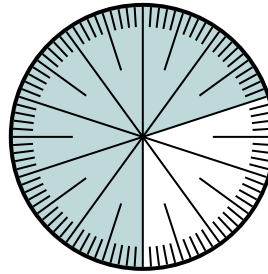
- 4) Express the shaded portion as a fraction of the whole with a 10 as the denominator.




- 5) Express the shaded portion as a decimal of the whole.



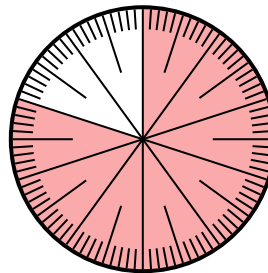
- 6) Express the shaded portion as a fraction of the whole with a 100 as the denominator.



- 7) Express the shaded portion as a decimal of the whole.



- 8) Express the shaded portion as a fraction of the whole with a 100 as the denominator.



Answers

1.  $\frac{85}{100}$

2.  $0.9$

3.  $0.3$

4.  $\frac{6}{10}$

5.  $0.4$

6.  $\frac{70}{100}$

7.  $0.45$

8.  $\frac{80}{100}$