


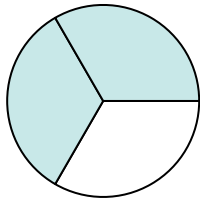


Write the shaded amount as a fraction.

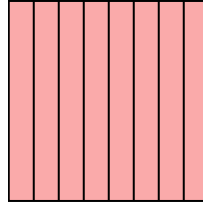
Ex)



1)



2)

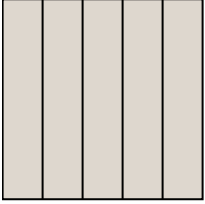


**Answers**


Ex.  $\frac{5}{5}$

- 1. \_\_\_\_\_
- 2. \_\_\_\_\_
- 3. \_\_\_\_\_
- 4. \_\_\_\_\_
- 5. \_\_\_\_\_
- 6. \_\_\_\_\_
- 7. \_\_\_\_\_
- 8. \_\_\_\_\_
- 9. \_\_\_\_\_
- 10. \_\_\_\_\_
- 11. \_\_\_\_\_
- 12. \_\_\_\_\_
- 13. \_\_\_\_\_
- 14. \_\_\_\_\_


3)




4)




5)



6)




7)



8)



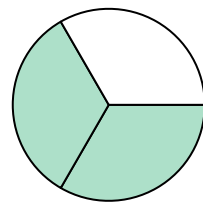
9)



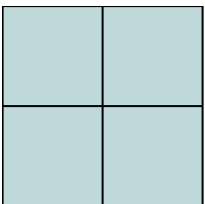
10)



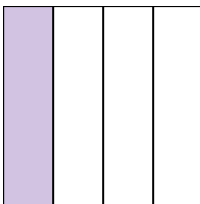
11)



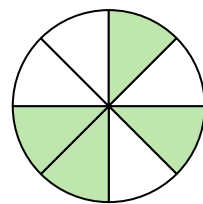
12)



13)

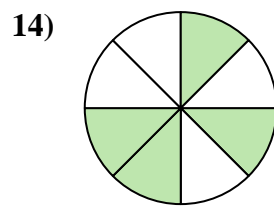
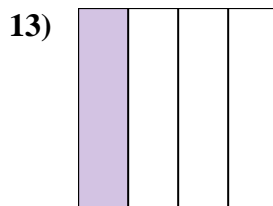
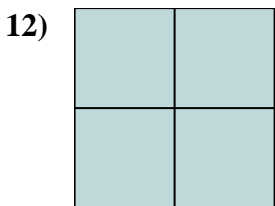
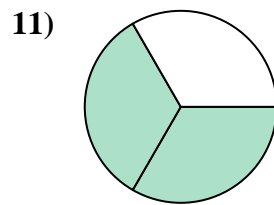
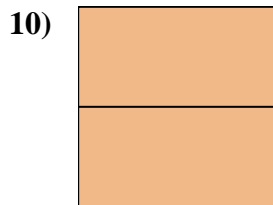

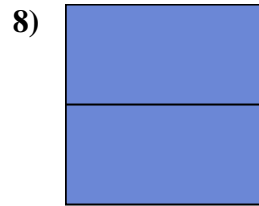
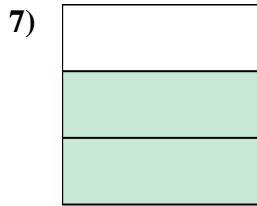
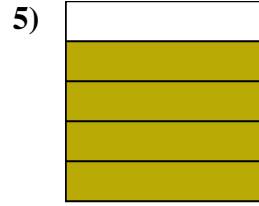
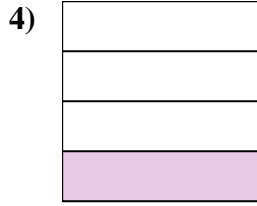
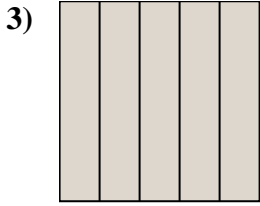
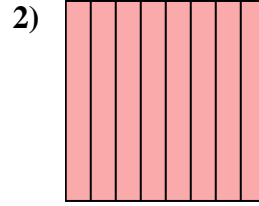
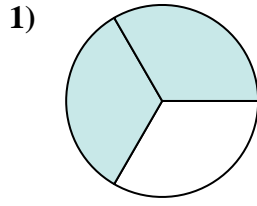



14)





Write the shaded amount as a fraction.



Answers

Ex.  $\frac{5}{5}$

1.  $\frac{2}{3}$

2.  $\frac{8}{8}$

3.  $\frac{5}{5}$

4.  $\frac{1}{4}$

5.  $\frac{4}{5}$

6.  $\frac{3}{8}$

7.  $\frac{2}{3}$

8.  $\frac{2}{2}$

9.  $\frac{1}{2}$

10.  $\frac{2}{2}$

11.  $\frac{2}{3}$

12.  $\frac{4}{4}$

13.  $\frac{1}{4}$

14.  $\frac{4}{8}$