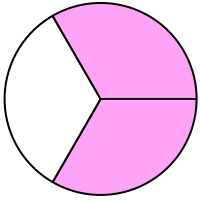


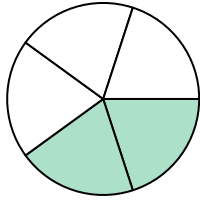


Write the shaded amount as a fraction.

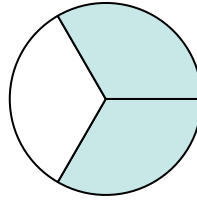
Ex)



1)



2)

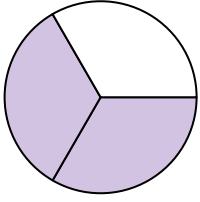


Answers

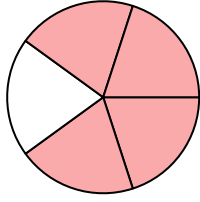
Ex. $\frac{2}{3}$

- 1. _____
- 2. _____
- 3. _____
- 4. _____
- 5. _____
- 6. _____
- 7. _____
- 8. _____
- 9. _____
- 10. _____
- 11. _____
- 12. _____
- 13. _____
- 14. _____


3)




4)



5)




6)



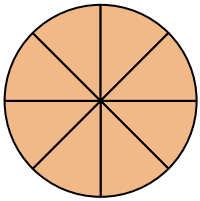
7)



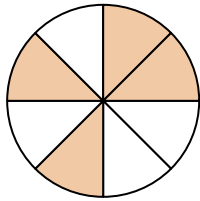
8)




9)



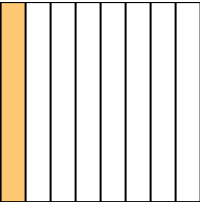
10)



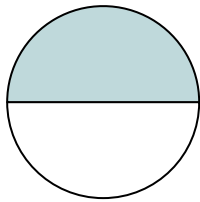
11)



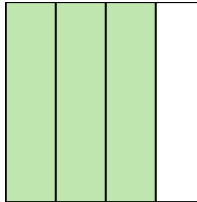
12)



13)



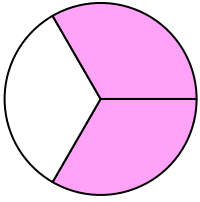
14)



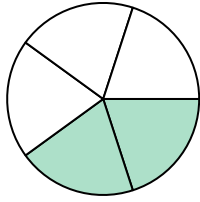


Write the shaded amount as a fraction.

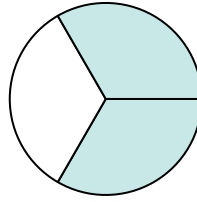
Ex)



1)



2)



Answers

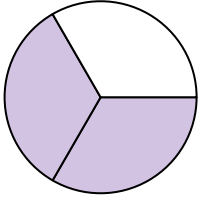
Ex. 2/3

1. 2/5

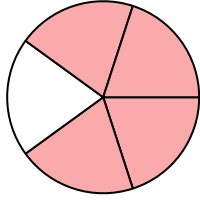
2. 2/3

3. 2/3


3)



4)



5)




4. 4/5

5. 2/2

6. 4/4


6)



7)



8)



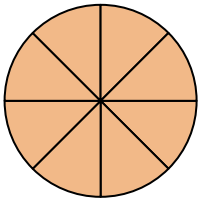
7. 1/4

8. 4/5

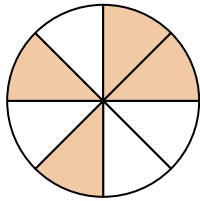
9. 8/8

10. 4/8


9)



10)



11)



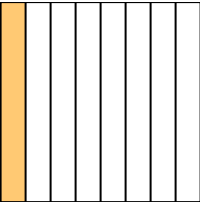
11. 1/2

12. 1/8

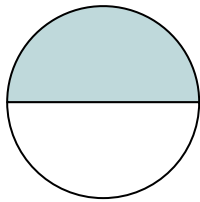
13. 1/2

14. 3/4

12)



13)



14)

