





Write the shaded amount as a fraction.

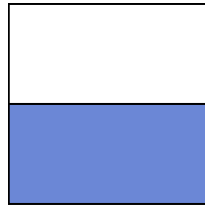
Ex)



1)



2)



Answers

Ex.  $\frac{4}{8}$

1. \_\_\_\_\_

2. \_\_\_\_\_

3. \_\_\_\_\_

4. \_\_\_\_\_

5. \_\_\_\_\_

6. \_\_\_\_\_

7. \_\_\_\_\_

8. \_\_\_\_\_

9. \_\_\_\_\_

10. \_\_\_\_\_


11. \_\_\_\_\_

12. \_\_\_\_\_

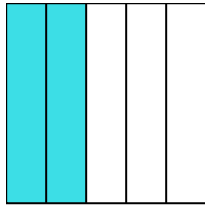
13. \_\_\_\_\_

14. \_\_\_\_\_


3)



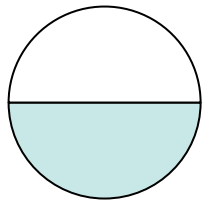
4)




5)




6)




7)



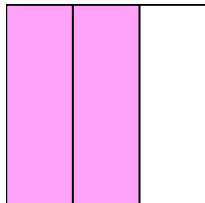
8)



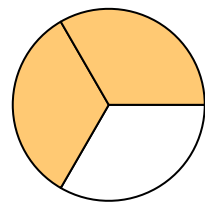
9)




10)



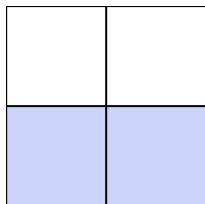
11)



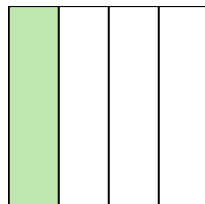
12)



13)

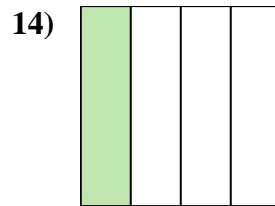
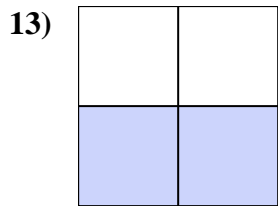
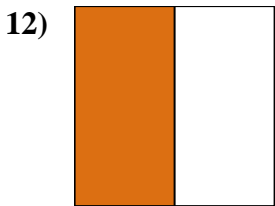
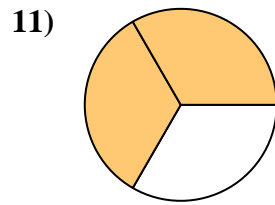
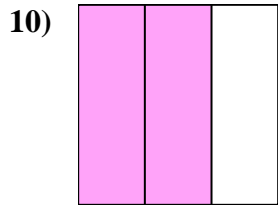
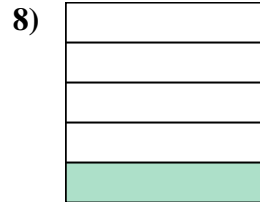

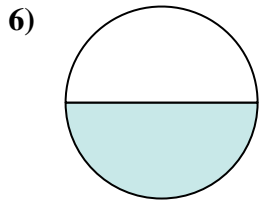
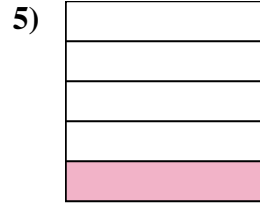
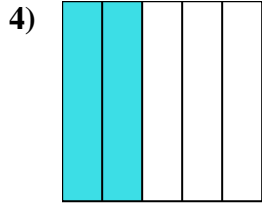
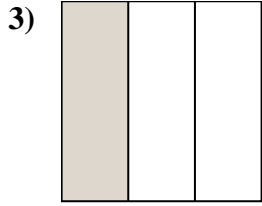
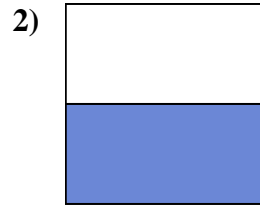


14)





Write the shaded amount as a fraction.



Answers

Ex.  $\frac{4}{8}$

1.  $\frac{2}{8}$

2.  $\frac{1}{2}$

3.  $\frac{1}{3}$

4.  $\frac{2}{5}$

5.  $\frac{1}{5}$

6.  $\frac{1}{2}$

7.  $\frac{1}{8}$

8.  $\frac{1}{5}$

9.  $\frac{4}{4}$

10.  $\frac{2}{3}$

11.  $\frac{2}{3}$

12.  $\frac{1}{2}$

13.  $\frac{2}{4}$

14.  $\frac{1}{4}$