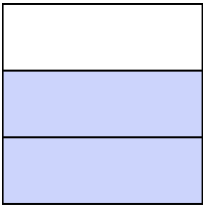





Write the shaded amount as a fraction.

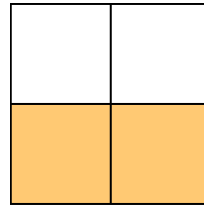
Ex)



1)



2)



**Answers**

Ex.  $\frac{2}{3}$

1. \_\_\_\_\_

2. \_\_\_\_\_

3. \_\_\_\_\_

4. \_\_\_\_\_

5. \_\_\_\_\_

6. \_\_\_\_\_

7. \_\_\_\_\_

8. \_\_\_\_\_

9. \_\_\_\_\_

10. \_\_\_\_\_


11. \_\_\_\_\_

12. \_\_\_\_\_

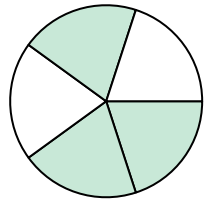
13. \_\_\_\_\_

14. \_\_\_\_\_

3)



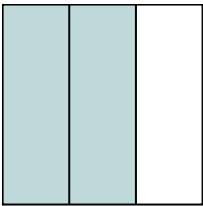
4)



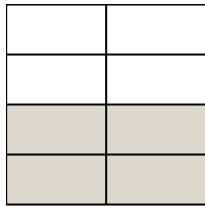
5)



6)



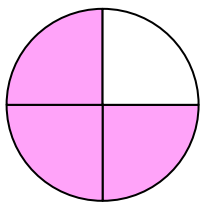
7)



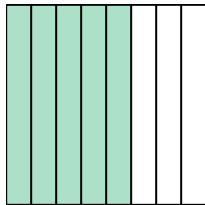
8)



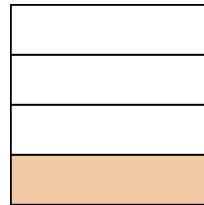
9)




10)



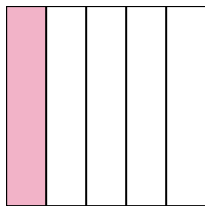
11)




12)



13)

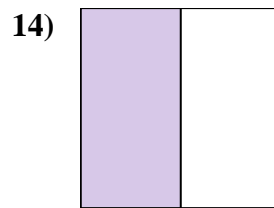
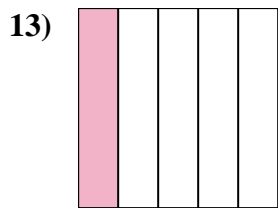
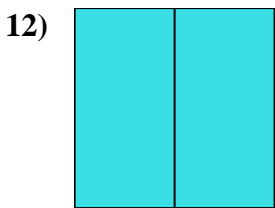
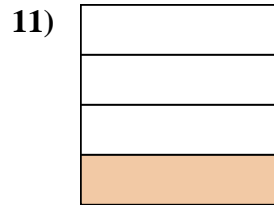
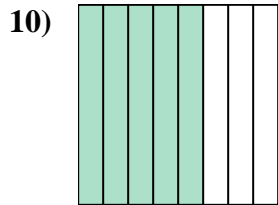
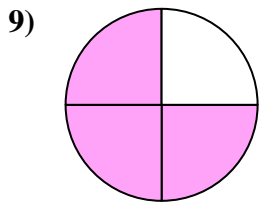
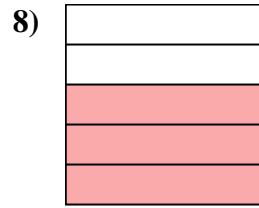
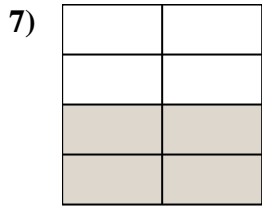
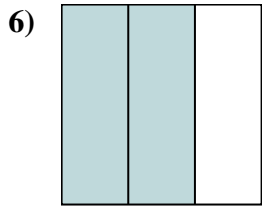
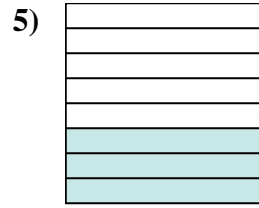
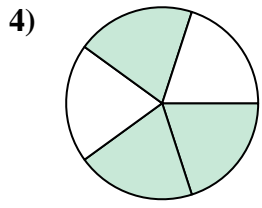
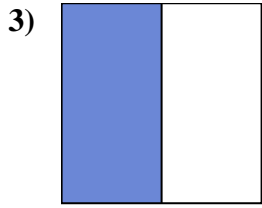
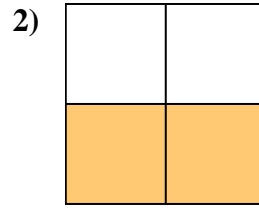
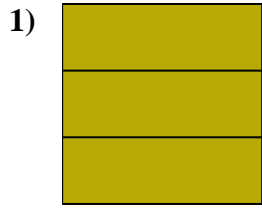
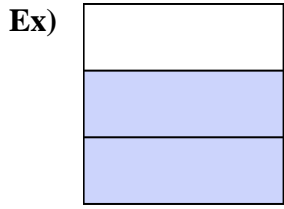


14)





Write the shaded amount as a fraction.



Answers

Ex. 2/3

1. 3/3

2. 2/4

3. 1/2

4. 3/5

5. 3/8

6. 2/3

7. 4/8

8. 3/5

9. 3/4

10. 5/8

11. 1/4

12. 2/2

13. 1/5

14. 1/2