



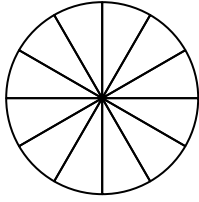
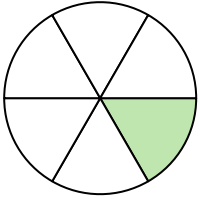
Shade in the equivalent fraction and answer with shaded fraction.

Answers

1)

$\frac{1}{6}$

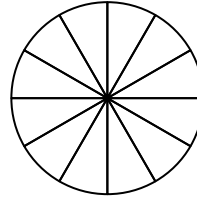
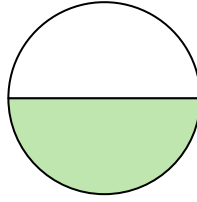
$\frac{1 \times 2}{6 \times 2}$



2)

$\frac{1}{2}$

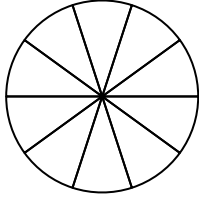
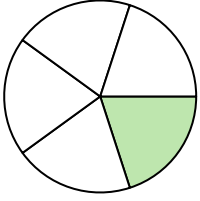
$\frac{1 \times 6}{2 \times 6}$



3)

$\frac{1}{5}$

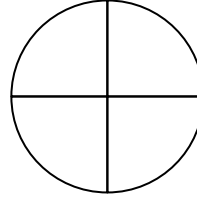
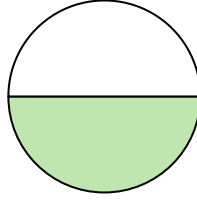
$\frac{1 \times 2}{5 \times 2}$



4)

$\frac{1}{2}$

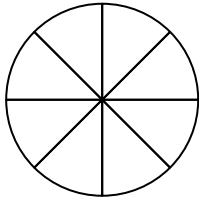
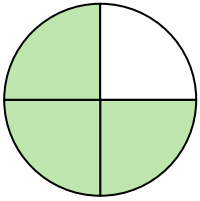
$\frac{1 \times 2}{2 \times 2}$



5)

$\frac{3}{4}$

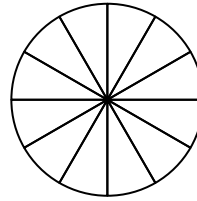
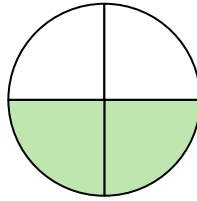
$\frac{3 \times 2}{4 \times 2}$



6)

$\frac{2}{4}$

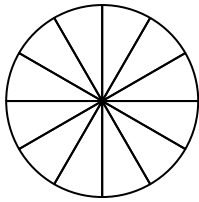
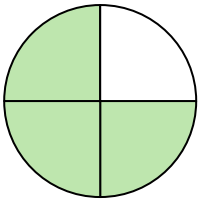
$\frac{2 \times 3}{4 \times 3}$



7)

$\frac{3}{4}$

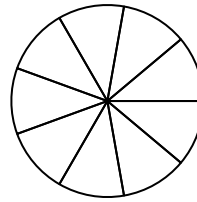
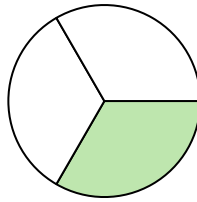
$\frac{3 \times 3}{4 \times 3}$



8)

$\frac{1}{3}$

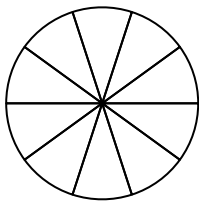
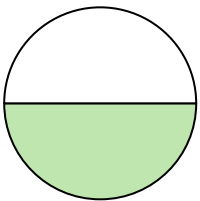
$\frac{1 \times 3}{3 \times 3}$



9)

$\frac{1}{2}$

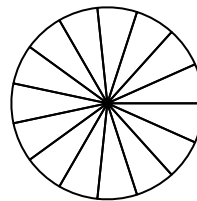
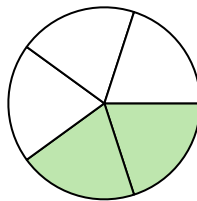
$\frac{1 \times 5}{2 \times 5}$



10)

$\frac{2}{5}$

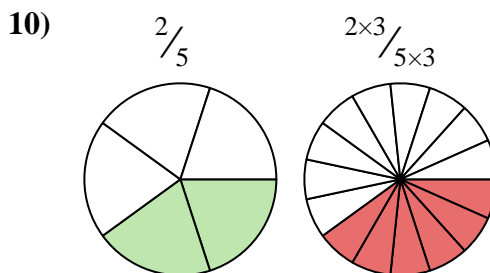
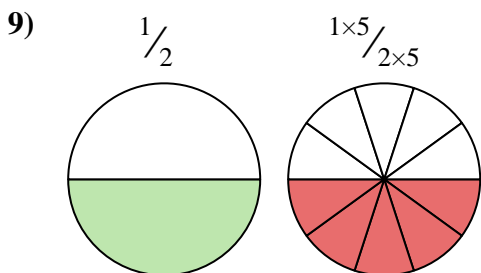
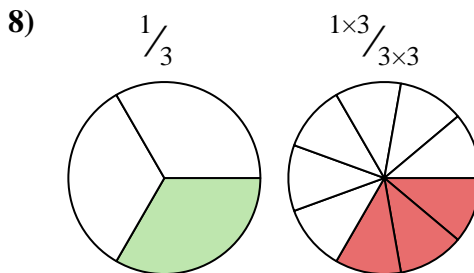
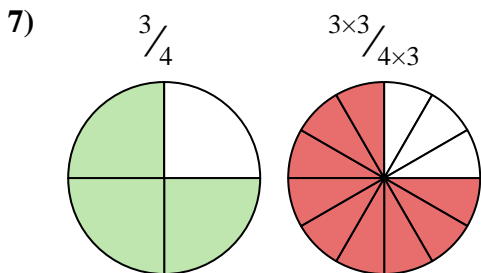
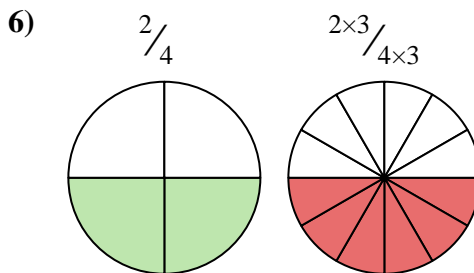
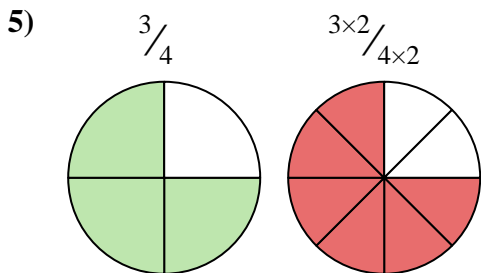
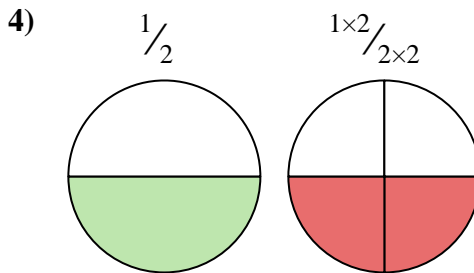
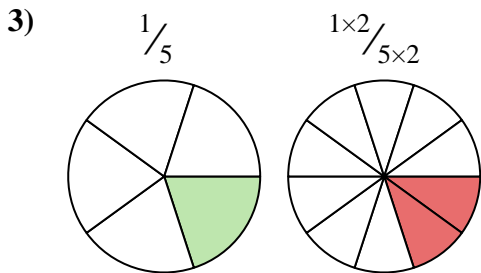
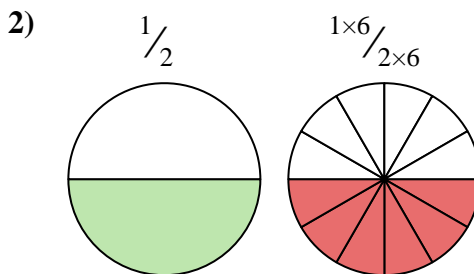
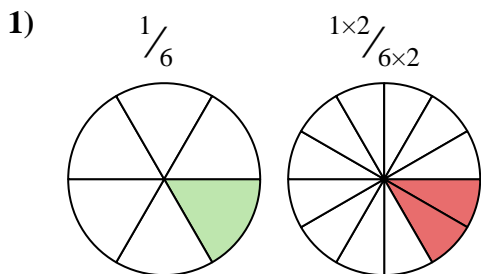
$\frac{2 \times 3}{5 \times 3}$



1. _____
2. _____
3. _____
4. _____
5. _____
6. _____
7. _____
8. _____
9. _____
10. _____



Shade in the equivalent fraction and answer with shaded fraction.



Answers

1. $\frac{2}{12}$

2. $\frac{6}{12}$

3. $\frac{2}{10}$

4. $\frac{2}{4}$

5. $\frac{6}{8}$

6. $\frac{6}{12}$

7. $\frac{9}{12}$

8. $\frac{3}{9}$

9. $\frac{5}{10}$

10. $\frac{6}{15}$