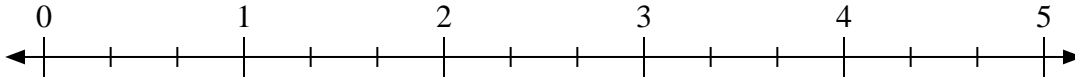





Use the numberline to solve.

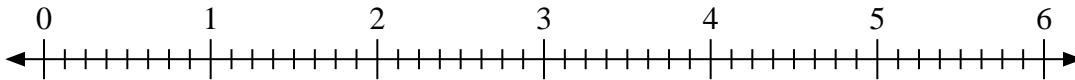
1) $2 \div \frac{2}{3}$



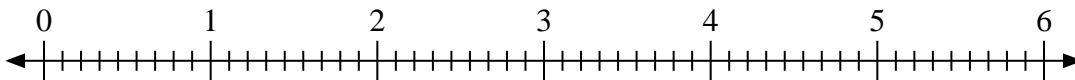
2) $2 \div \frac{1}{3}$



3) $4 \div \frac{3}{8}$



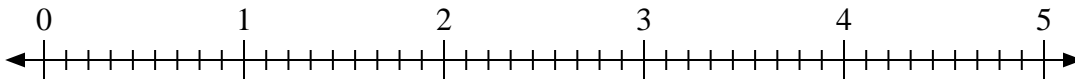
4) $6 \div \frac{8}{9}$



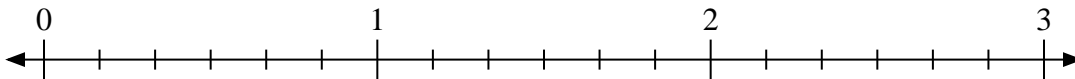
5) $2 \div \frac{1}{2}$



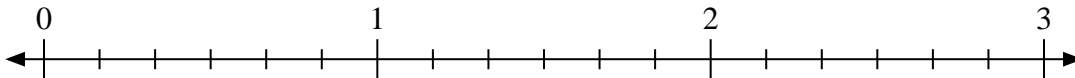
6) $3 \div \frac{8}{9}$



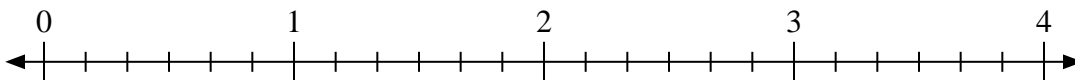
7) $2 \div \frac{3}{6}$



8) $2 \div \frac{4}{6}$



9) $3 \div \frac{5}{6}$



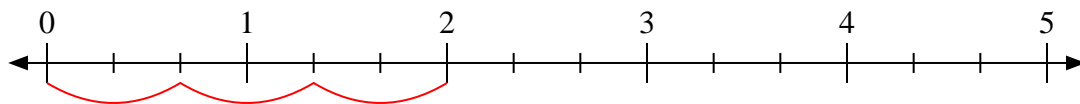
Answers

- 1. _____
- 2. _____
- 3. _____
- 4. _____
- 5. _____
- 6. _____
- 7. _____
- 8. _____
- 9. _____

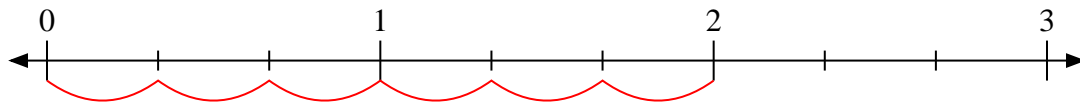


Use the numberline to solve.

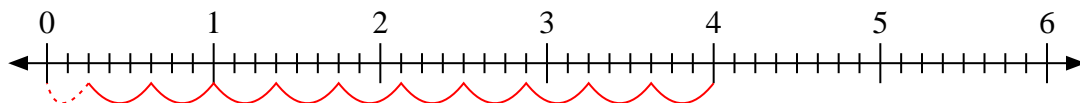
1) $2 \div \frac{2}{3}$



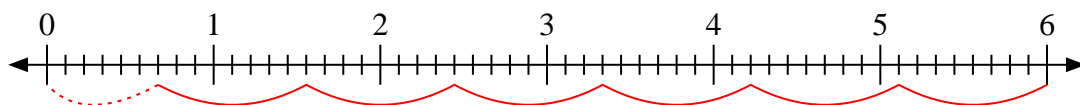
2) $2 \div \frac{1}{3}$



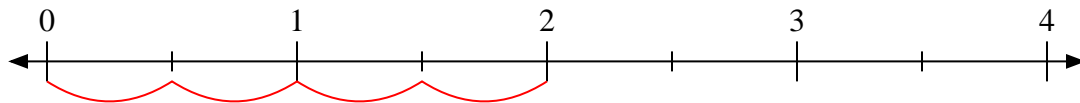
3) $4 \div \frac{3}{8}$



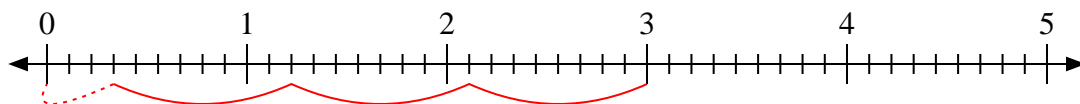
4) $6 \div \frac{8}{9}$



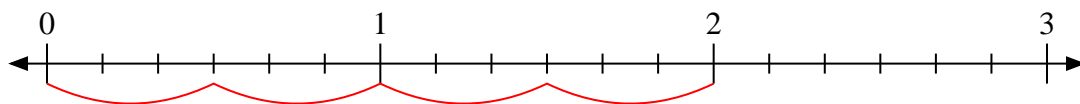
5) $2 \div \frac{1}{2}$



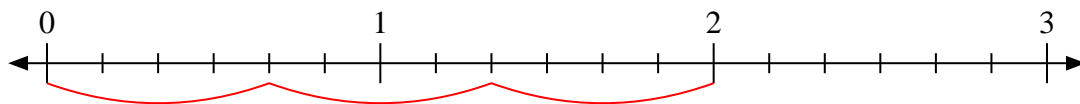
6) $3 \div \frac{8}{9}$



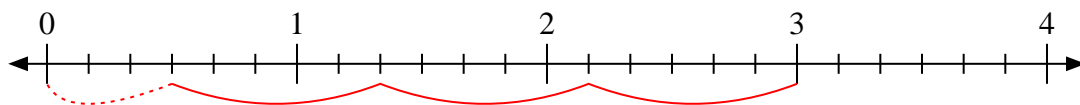
7) $2 \div \frac{3}{6}$



8) $2 \div \frac{4}{6}$



9) $3 \div \frac{5}{6}$



Answers

1. 3

2. 6

3. $10 \frac{2}{3}$

4. $6 \frac{6}{8}$

5. 4

6. $3 \frac{3}{8}$

7. 4

8. 3

9. $3 \frac{3}{5}$