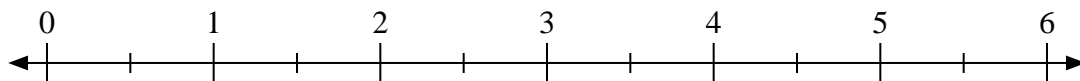


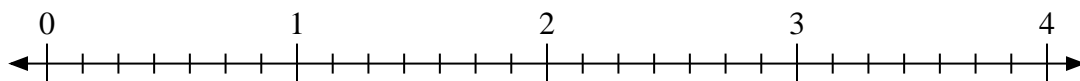


Use the numberline to solve.

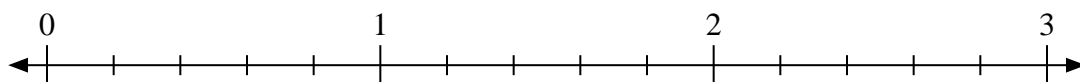
1)  $5 \div \frac{1}{2}$



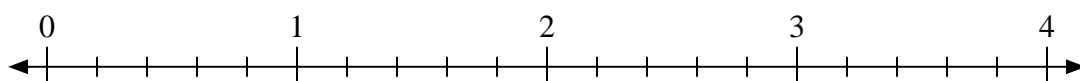
2)  $4 \div \frac{4}{7}$



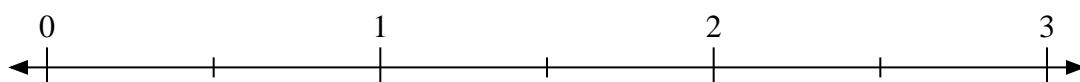
3)  $3 \div \frac{1}{5}$



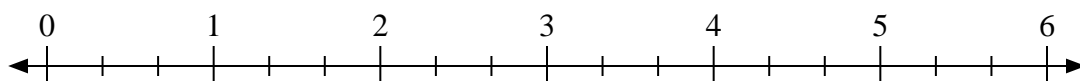
4)  $2 \div \frac{2}{5}$



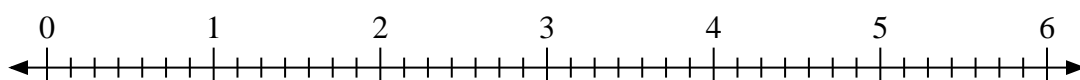
5)  $2 \div \frac{1}{2}$



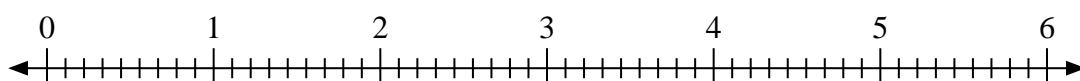
6)  $3 \div \frac{2}{3}$



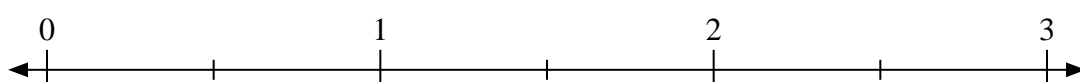
7)  $2 \div \frac{2}{7}$



8)  $2 \div \frac{4}{9}$



9)  $3 \div \frac{1}{2}$



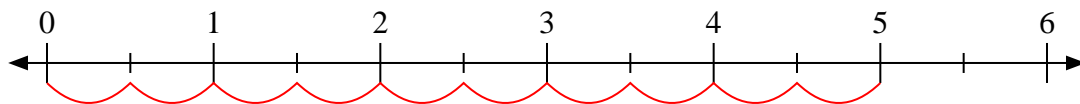
Answers

1. \_\_\_\_\_
2. \_\_\_\_\_
3. \_\_\_\_\_
4. \_\_\_\_\_
5. \_\_\_\_\_
6. \_\_\_\_\_
7. \_\_\_\_\_
8. \_\_\_\_\_
9. \_\_\_\_\_

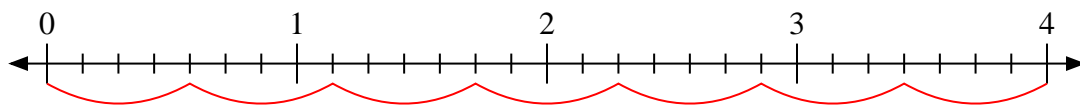


Use the numberline to solve.

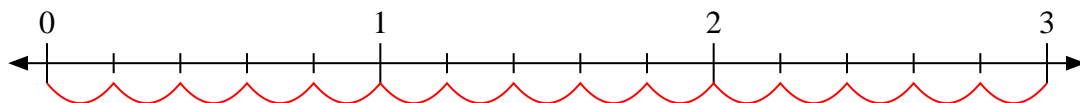
1)  $5 \div \frac{1}{2}$



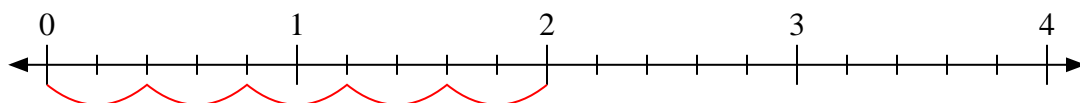
2)  $4 \div \frac{4}{7}$



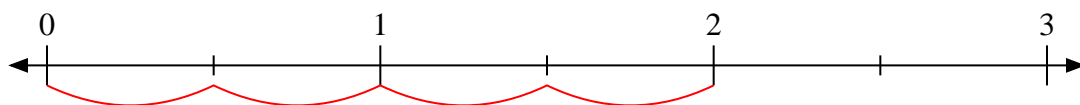
3)  $3 \div \frac{1}{5}$



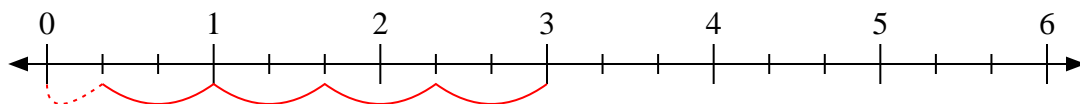
4)  $2 \div \frac{2}{5}$



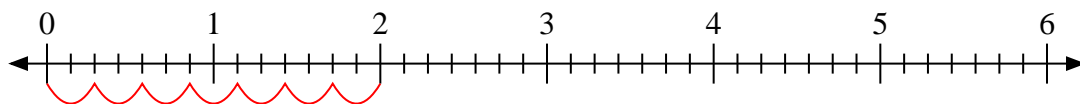
5)  $2 \div \frac{1}{2}$



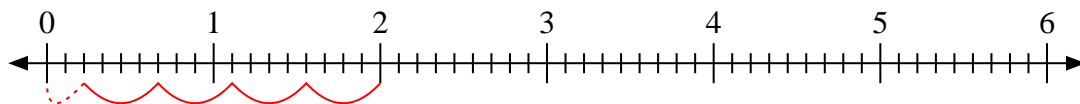
6)  $3 \div \frac{2}{3}$



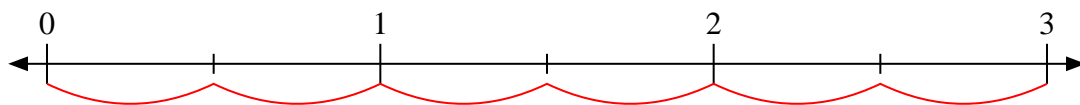
7)  $2 \div \frac{2}{7}$



8)  $2 \div \frac{4}{9}$



9)  $3 \div \frac{1}{2}$



Answers

1. 10

2. 7

3. 15

4. 5

5. 4

6. 4 1/2

7. 7

8. 4 2/4

9. 6