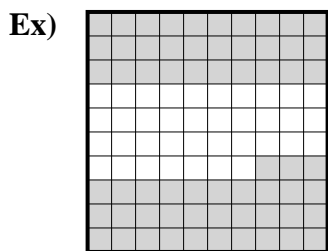






Determine the value written as a fraction , decimal & a percent.



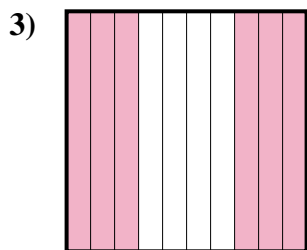
fraction $\frac{63}{100}$
 decimal 0.63
 percent 63



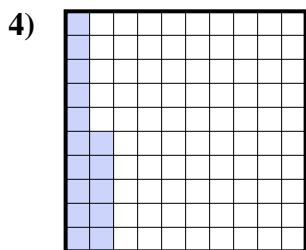
fraction $\frac{8}{10}$
 decimal 0.8
 percent 80



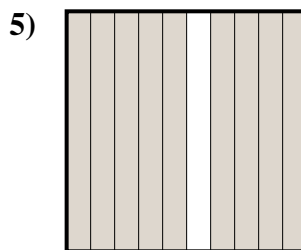
fraction $\frac{3}{10}$
 decimal 0.3
 percent 30




fraction $\frac{6}{10}$
 decimal 0.6
 percent 60



fraction $\frac{15}{100}$
 decimal 0.15
 percent 15



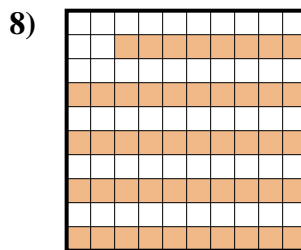
fraction $\frac{9}{10}$
 decimal 0.9
 percent 90



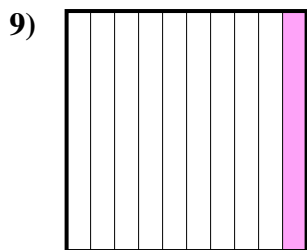
fraction $\frac{7}{10}$
 decimal 0.7
 percent 70



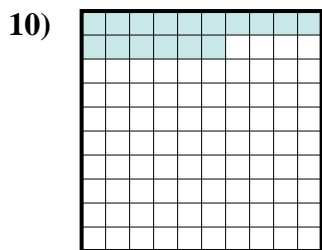
fraction $\frac{5}{10}$
 decimal 0.5
 percent 50



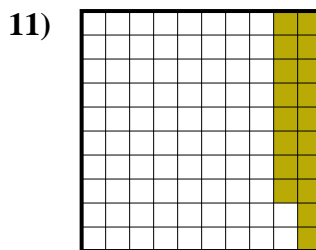
fraction $\frac{48}{100}$
 decimal 0.48
 percent 48



fraction $\frac{1}{10}$
 decimal 0.1
 percent 10



fraction $\frac{16}{100}$
 decimal 0.16
 percent 16



fraction $\frac{18}{100}$
 decimal 0.18
 percent 18

Answers

Ex.	$\frac{63}{100}$	0.63	63%
1.	$\frac{8}{10}$	0.8	80%
2.	$\frac{3}{10}$	0.3	30%
3.	$\frac{6}{10}$	0.6	60%
4.	$\frac{15}{100}$	0.15	15%
5.	$\frac{9}{10}$	0.9	90%
6.	$\frac{7}{10}$	0.7	70%
7.	$\frac{5}{10}$	0.5	50%
8.	$\frac{48}{100}$	0.48	48%
9.	$\frac{1}{10}$	0.1	10%
10.	$\frac{16}{100}$	0.16	16%
11.	$\frac{18}{100}$	0.18	18%