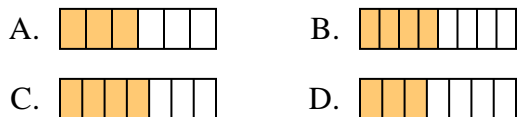




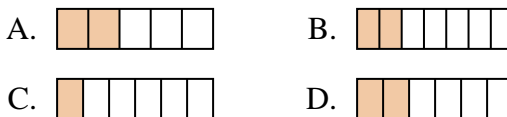
Determine which choice best answers each question.

Answers

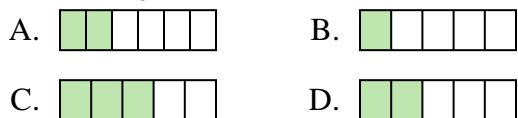
1) Which of the shapes below is shaded to represent $\frac{4}{7}$?



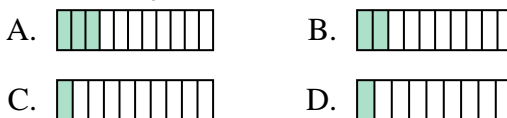
2) Which of the shapes below is shaded to represent $\frac{2}{6}$?



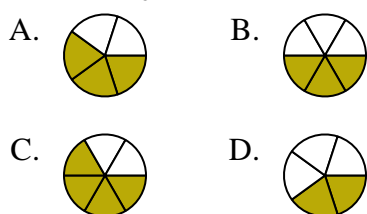
3) Which of the shapes below is shaded to represent $\frac{2}{5}$?



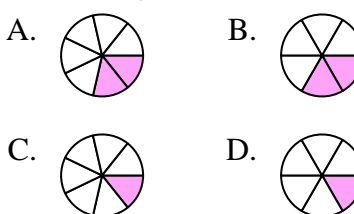
4) Which of the shapes below is shaded to represent $\frac{2}{10}$?



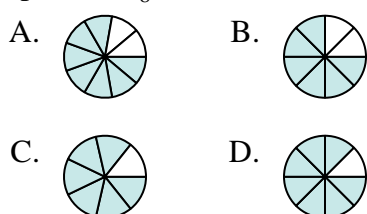
5) Which of the shapes below is shaded to represent $\frac{3}{6}$?



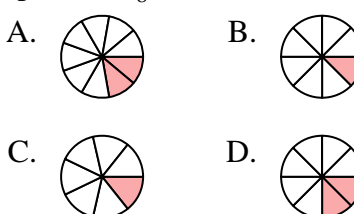
6) Which of the shapes below is shaded to represent $\frac{2}{7}$?



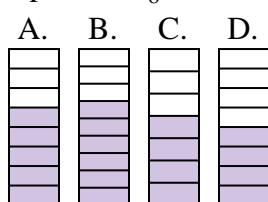
7) Which of the shapes below is shaded to represent $\frac{6}{8}$?



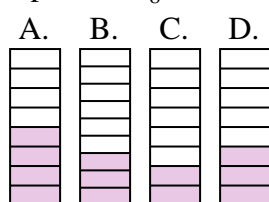
8) Which of the shapes below is shaded to represent $\frac{2}{8}$?



9) Which of the shapes below is shaded to represent $\frac{5}{8}$?



10) Which of the shapes below is shaded to represent $\frac{3}{8}$?



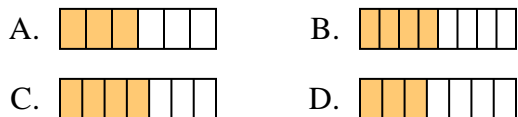
1. _____
2. _____
3. _____
4. _____
5. _____
6. _____
7. _____
8. _____
9. _____
10. _____



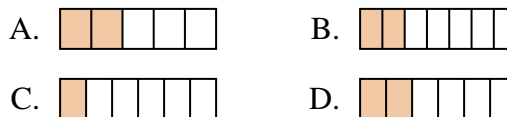
Determine which choice best answers each question.

Answers

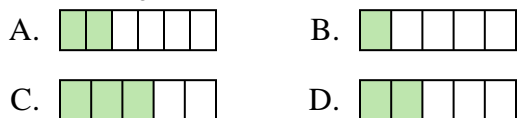
1) Which of the shapes below is shaded to represent $\frac{4}{7}$?



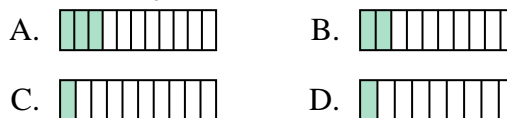
2) Which of the shapes below is shaded to represent $\frac{2}{6}$?



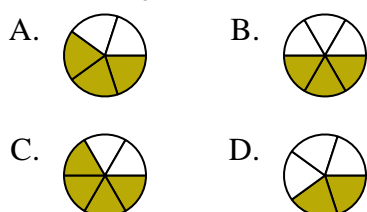
3) Which of the shapes below is shaded to represent $\frac{2}{5}$?



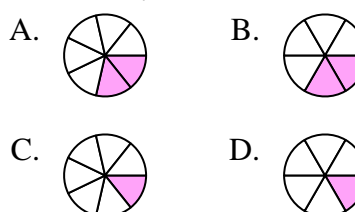
4) Which of the shapes below is shaded to represent $\frac{2}{10}$?



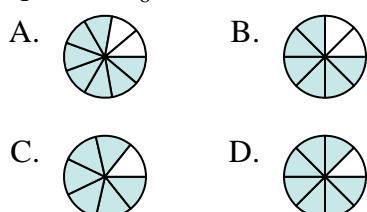
5) Which of the shapes below is shaded to represent $\frac{3}{6}$?



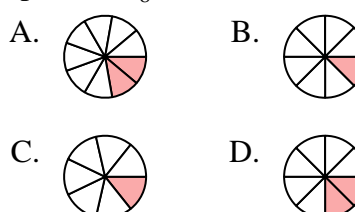
6) Which of the shapes below is shaded to represent $\frac{2}{7}$?



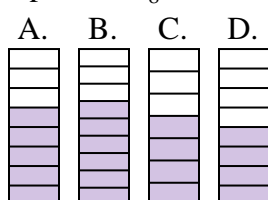
7) Which of the shapes below is shaded to represent $\frac{6}{8}$?



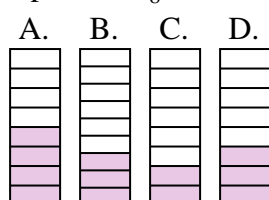
8) Which of the shapes below is shaded to represent $\frac{2}{8}$?



9) Which of the shapes below is shaded to represent $\frac{5}{8}$?



10) Which of the shapes below is shaded to represent $\frac{3}{8}$?



1. **C**
2. **D**
3. **D**
4. **B**
5. **B**
6. **A**
7. **B**
8. **D**
9. **A**
10. **D**