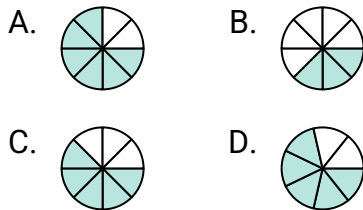




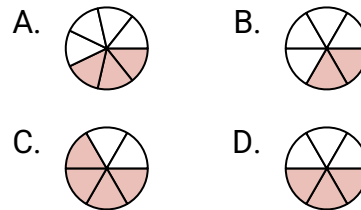
Determine which choice best answers each question.

Answers

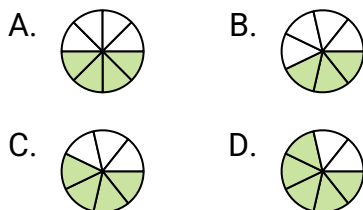
- 1) Which of the shapes below is shaded to represent $\frac{5}{8}$?



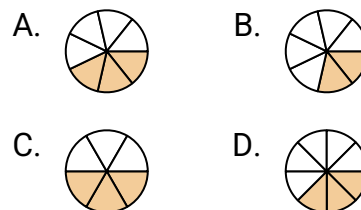
- 2) Which of the shapes below is shaded to represent $\frac{3}{6}$?



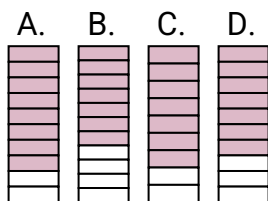
- 3) Which of the shapes below is shaded to represent $\frac{4}{7}$?



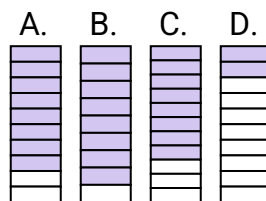
- 4) Which of the shapes below is shaded to represent $\frac{3}{7}$?



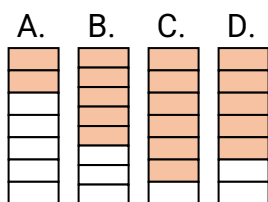
- 5) Which of the shapes below is shaded to represent $\frac{7}{10}$?



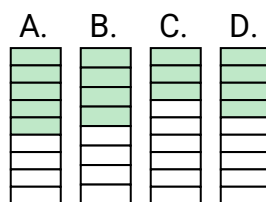
- 6) Which of the shapes below is shaded to represent $\frac{8}{10}$?



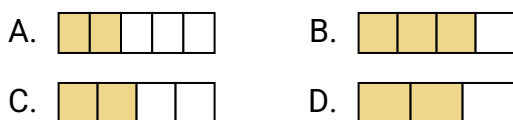
- 7) Which of the shapes below is shaded to represent $\frac{5}{7}$?



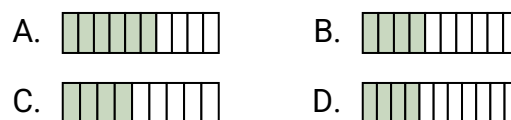
- 8) Which of the shapes below is shaded to represent $\frac{4}{9}$?



- 9) Which of the shapes below is shaded to represent $\frac{2}{4}$?



- 10) Which of the shapes below is shaded to represent $\frac{4}{10}$?



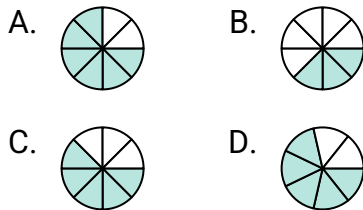
1. _____
2. _____
3. _____
4. _____
5. _____
6. _____
7. _____
8. _____
9. _____
10. _____



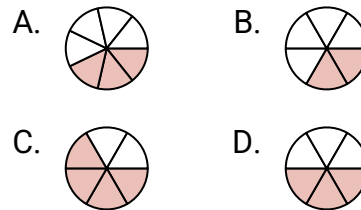
Determine which choice best answers each question.

Answers

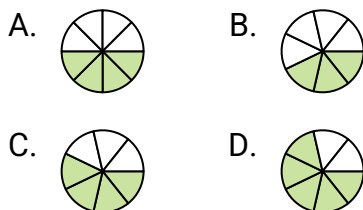
- 1) Which of the shapes below is shaded to represent $\frac{5}{8}$?



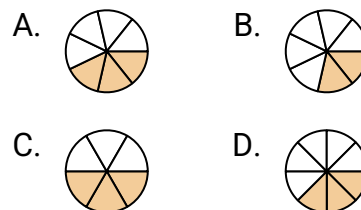
- 2) Which of the shapes below is shaded to represent $\frac{3}{6}$?



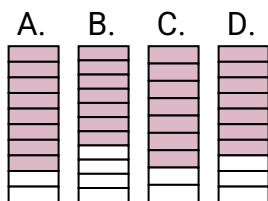
- 3) Which of the shapes below is shaded to represent $\frac{4}{7}$?



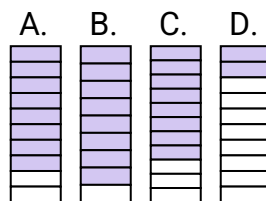
- 4) Which of the shapes below is shaded to represent $\frac{3}{7}$?



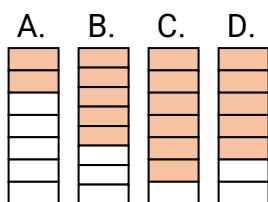
- 5) Which of the shapes below is shaded to represent $\frac{7}{10}$?



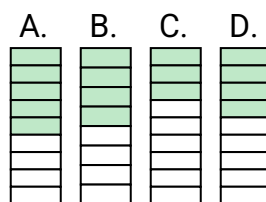
- 6) Which of the shapes below is shaded to represent $\frac{8}{10}$?



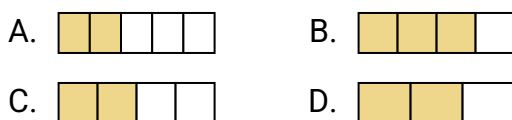
- 7) Which of the shapes below is shaded to represent $\frac{5}{7}$?



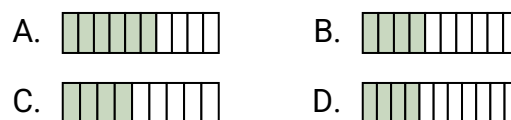
- 8) Which of the shapes below is shaded to represent $\frac{4}{9}$?



- 9) Which of the shapes below is shaded to represent $\frac{2}{4}$?



- 10) Which of the shapes below is shaded to represent $\frac{4}{10}$?



1. **C**
2. **D**
3. **C**
4. **A**
5. **D**
6. **A**
7. **D**
8. **D**
9. **C**
10. **B**