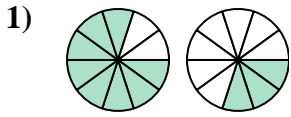


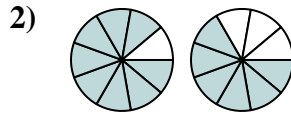


Determine which letter best compares the fractions shown.

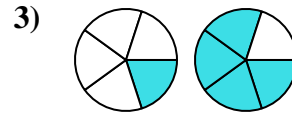
Answers



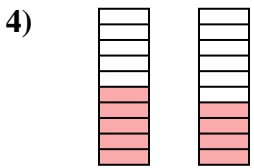
- A. $\frac{8}{10} > \frac{3}{10}$
- B. $\frac{8}{2} < \frac{3}{7}$
- C. $\frac{2}{8} < \frac{7}{3}$
- D. $\frac{8}{2} > \frac{3}{7}$



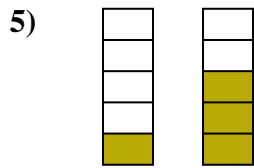
- A. $\frac{9}{8} > \frac{9}{6}$
- B. $\frac{1}{8} < \frac{3}{6}$
- C. $\frac{1}{8} > \frac{3}{6}$
- D. $\frac{8}{9} > \frac{6}{9}$



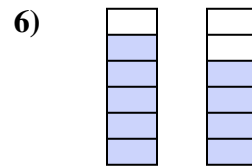
- A. $\frac{1}{5} < \frac{4}{5}$
- B. $\frac{1}{4} > \frac{4}{1}$
- C. $\frac{4}{1} < \frac{1}{4}$
- D. $\frac{1}{5} > \frac{4}{5}$



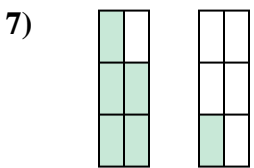
- A. $\frac{10}{5} > \frac{10}{4}$
- B. $\frac{5}{5} < \frac{6}{4}$
- C. $\frac{5}{10} > \frac{4}{10}$
- D. $\frac{5}{5} > \frac{4}{6}$



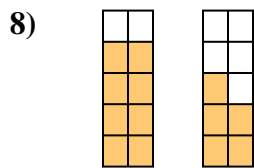
- A. $\frac{1}{4} > \frac{3}{2}$
- B. $\frac{1}{5} < \frac{3}{5}$
- C. $\frac{4}{1} > \frac{2}{3}$
- D. $\frac{4}{1} < \frac{2}{3}$



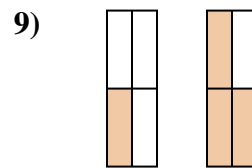
- A. $\frac{5}{6} < \frac{4}{6}$
- B. $\frac{1}{5} < \frac{2}{4}$
- C. $\frac{1}{5} > \frac{2}{4}$
- D. $\frac{5}{6} > \frac{4}{6}$



- A. $\frac{5}{1} > \frac{1}{5}$
- B. $\frac{1}{5} < \frac{5}{1}$
- C. $\frac{5}{1} < \frac{1}{5}$
- D. $\frac{5}{6} > \frac{1}{6}$



- A. $\frac{2}{8} < \frac{5}{5}$
- B. $\frac{2}{8} > \frac{5}{5}$
- C. $\frac{8}{2} < \frac{5}{5}$
- D. $\frac{8}{10} > \frac{5}{10}$

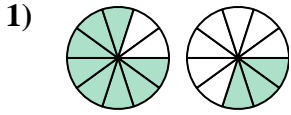


- A. $\frac{3}{1} < \frac{1}{3}$
- B. $\frac{1}{3} < \frac{3}{1}$
- C. $\frac{1}{4} > \frac{3}{4}$
- D. $\frac{1}{4} < \frac{3}{4}$

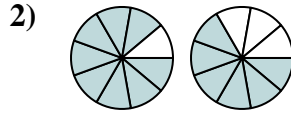
- 1. _____
- 2. _____
- 3. _____
- 4. _____
- 5. _____
- 6. _____
- 7. _____
- 8. _____
- 9. _____



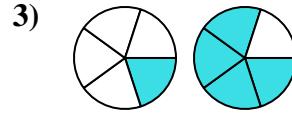
Determine which letter best compares the fractions shown.



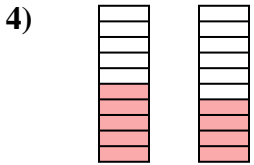
- A. $\frac{8}{10} > \frac{3}{10}$
- B. $\frac{8}{2} < \frac{3}{7}$
- C. $\frac{2}{8} < \frac{7}{3}$
- D. $\frac{8}{2} > \frac{3}{7}$



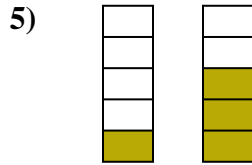
- A. $\frac{9}{8} > \frac{9}{6}$
- B. $\frac{1}{8} < \frac{3}{6}$
- C. $\frac{1}{8} > \frac{3}{6}$
- D. $\frac{8}{9} > \frac{6}{9}$



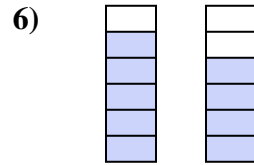
- A. $\frac{1}{5} < \frac{4}{5}$
- B. $\frac{1}{4} > \frac{4}{1}$
- C. $\frac{4}{1} < \frac{1}{4}$
- D. $\frac{1}{5} > \frac{4}{5}$



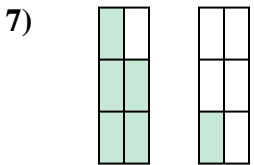
- A. $\frac{10}{5} > \frac{10}{4}$
- B. $\frac{5}{5} < \frac{6}{4}$
- C. $\frac{5}{10} > \frac{4}{10}$
- D. $\frac{5}{5} > \frac{4}{6}$



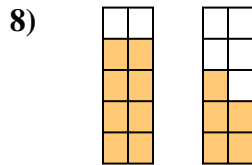
- A. $\frac{1}{4} > \frac{3}{2}$
- B. $\frac{1}{5} < \frac{3}{5}$
- C. $\frac{4}{1} > \frac{2}{3}$
- D. $\frac{4}{1} < \frac{2}{3}$



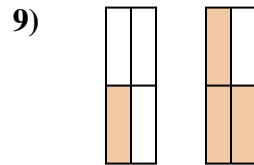
- A. $\frac{5}{6} < \frac{4}{6}$
- B. $\frac{1}{5} < \frac{2}{4}$
- C. $\frac{1}{5} > \frac{2}{4}$
- D. $\frac{5}{6} > \frac{4}{6}$



- A. $\frac{5}{1} > \frac{1}{5}$
- B. $\frac{1}{5} < \frac{5}{1}$
- C. $\frac{5}{1} < \frac{1}{5}$
- D. $\frac{5}{6} > \frac{1}{6}$



- A. $\frac{2}{8} < \frac{5}{5}$
- B. $\frac{2}{8} > \frac{5}{5}$
- C. $\frac{8}{2} < \frac{5}{5}$
- D. $\frac{8}{10} > \frac{5}{10}$



- A. $\frac{3}{1} < \frac{1}{3}$
- B. $\frac{1}{3} < \frac{3}{1}$
- C. $\frac{1}{4} > \frac{3}{4}$
- D. $\frac{1}{4} < \frac{3}{4}$

Answers

- 1. **A**
- 2. **D**
- 3. **A**
- 4. **C**
- 5. **B**
- 6. **D**
- 7. **D**
- 8. **D**
- 9. **D**