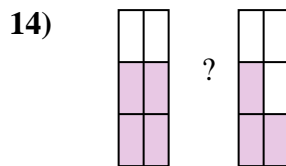
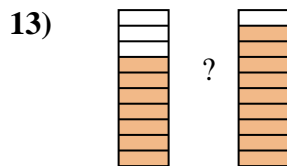
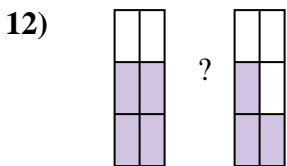
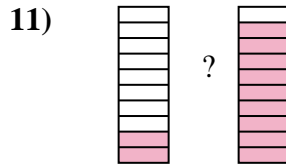
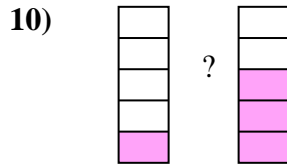
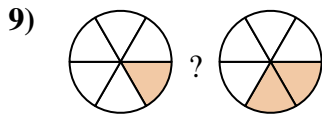
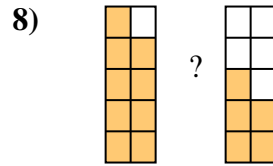
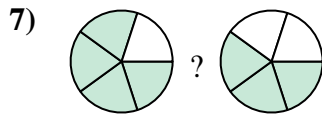
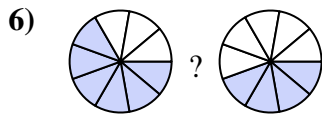

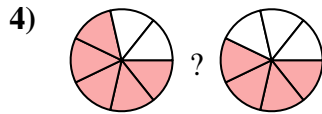

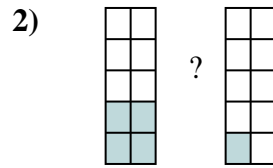
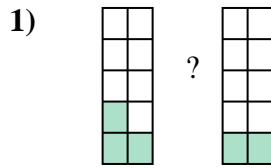
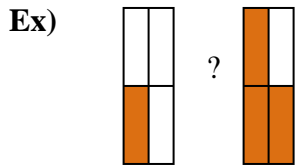




Compare the size of the fractions using  $<$ ,  $>$  or  $=$ .



Answers

Ex.  $\frac{1}{4}$   $<$   $\frac{3}{4}$

1. \_\_\_\_\_

2. \_\_\_\_\_

3. \_\_\_\_\_

4. \_\_\_\_\_

5. \_\_\_\_\_

6. \_\_\_\_\_

7. \_\_\_\_\_

8. \_\_\_\_\_

9. \_\_\_\_\_

10. \_\_\_\_\_

11. \_\_\_\_\_

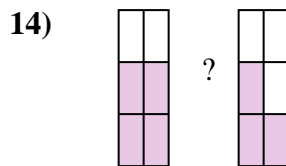
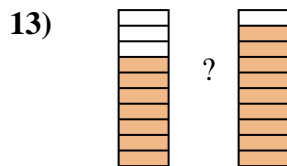
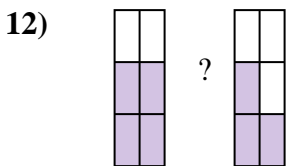
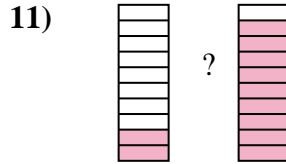
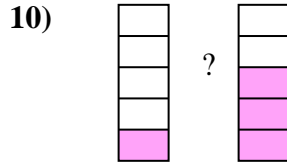
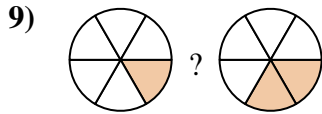
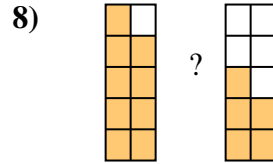
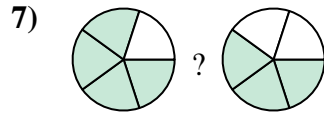
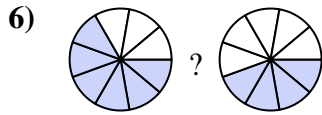

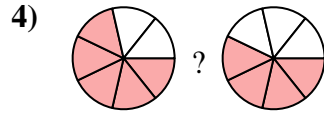
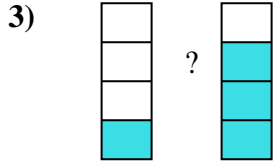
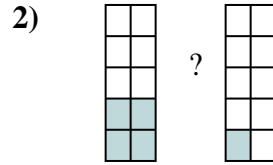
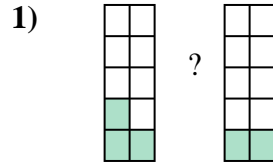
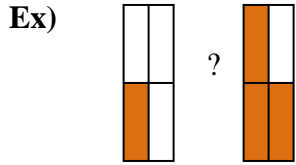
12. \_\_\_\_\_

13. \_\_\_\_\_

14. \_\_\_\_\_



Compare the size of the fractions using  $<$ ,  $>$  or  $=$ .



**Answers**

Ex.  $\frac{1}{4} < \frac{3}{4}$

1.  $\frac{3}{10} > \frac{2}{10}$

2.  $\frac{4}{10} > \frac{1}{10}$

3.  $\frac{1}{4} < \frac{3}{4}$

4.  $\frac{5}{7} > \frac{4}{7}$

5.  $\frac{3}{7} < \frac{5}{7}$

6.  $\frac{6}{9} > \frac{4}{9}$

7.  $\frac{4}{5} > \frac{3}{5}$

8.  $\frac{9}{10} > \frac{5}{10}$

9.  $\frac{1}{6} < \frac{2}{6}$

10.  $\frac{1}{5} < \frac{3}{5}$

11.  $\frac{2}{10} < \frac{9}{10}$

12.  $\frac{4}{6} > \frac{3}{6}$

13.  $\frac{7}{10} < \frac{9}{10}$

14.  $\frac{4}{6} > \frac{3}{6}$