



Use the visual model to solve each problem.

$1 \frac{3}{5} + 2 \frac{4}{5} = ?$



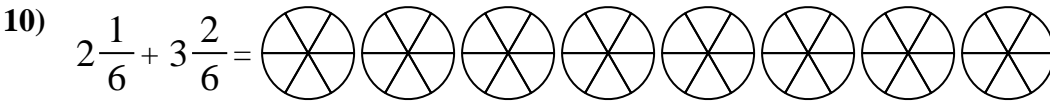
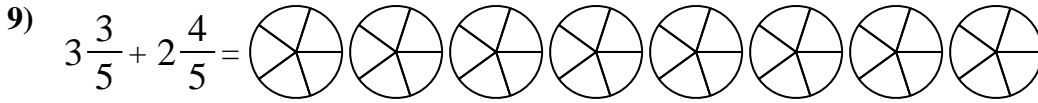
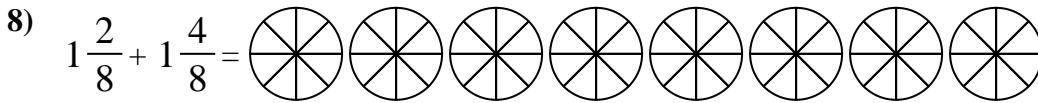
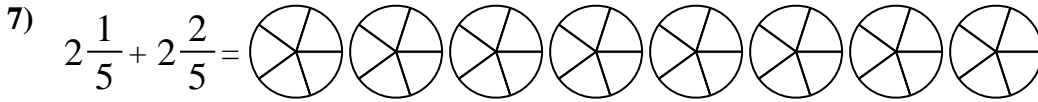
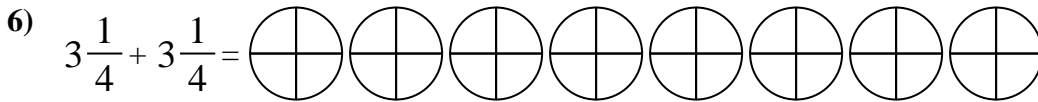
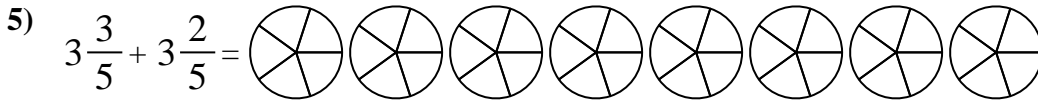
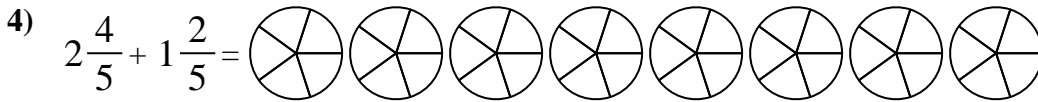
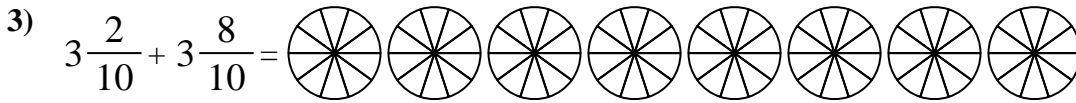
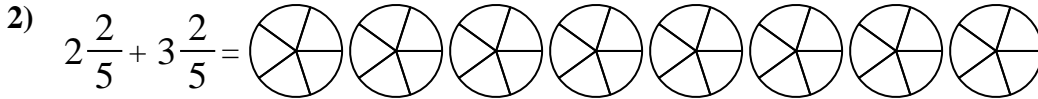
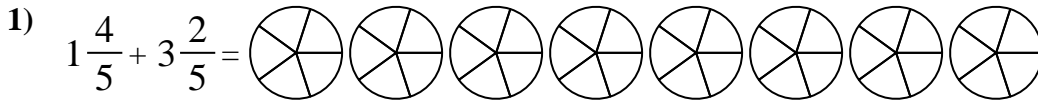
To solve a fraction addition problem one strategy is to shade in the whole amounts first (1 & 2).



Next fill in the fraction amounts ( $\frac{3}{5}$  &  $\frac{4}{5}$ ).



When all of the pieces are filled in we can see that  $1 \frac{3}{5} + 2 \frac{4}{5} = 4 \frac{2}{5}$



**Answers**

1. \_\_\_\_\_
2. \_\_\_\_\_
3. \_\_\_\_\_
4. \_\_\_\_\_
5. \_\_\_\_\_
6. \_\_\_\_\_
7. \_\_\_\_\_
8. \_\_\_\_\_
9. \_\_\_\_\_
10. \_\_\_\_\_

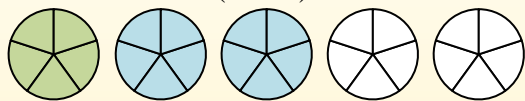


Use the visual model to solve each problem.

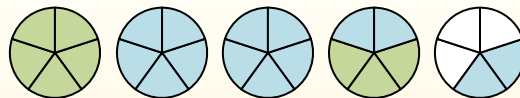
$$1 \frac{3}{5} + 2 \frac{4}{5} = ?$$



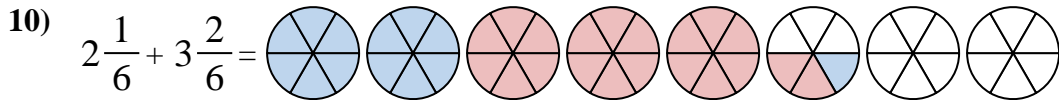
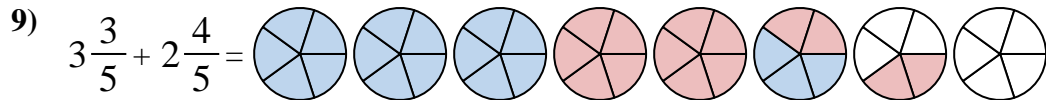
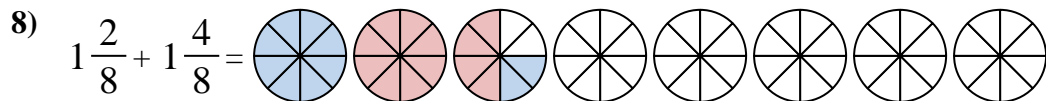
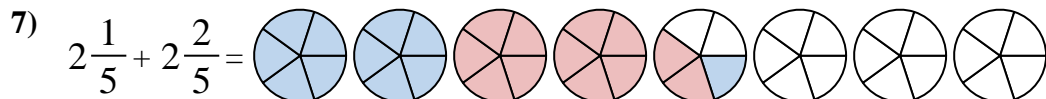
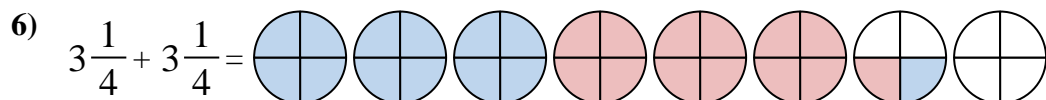
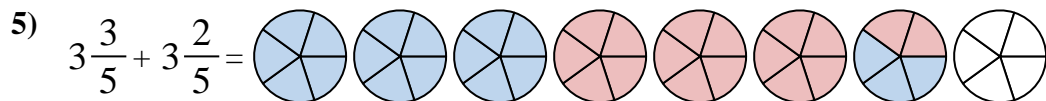
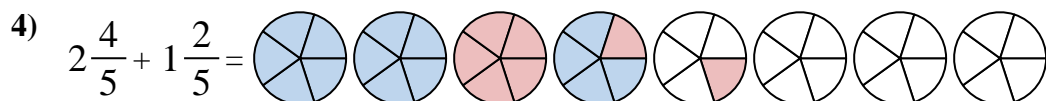
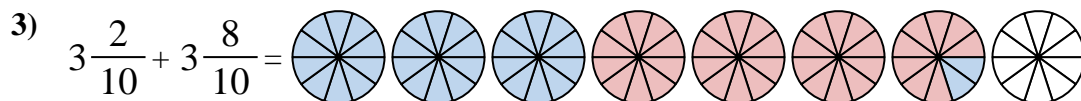
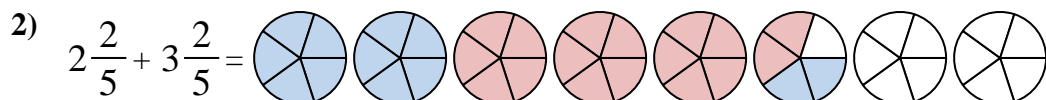
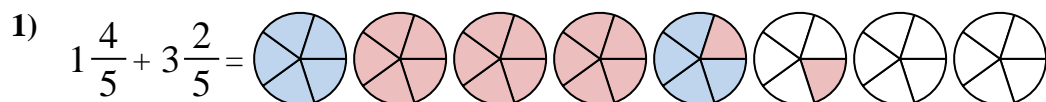
To solve a fraction addition problem one strategy is to shade in the whole amounts first (1 & 2).



Next fill in the fraction amounts ( $\frac{3}{5}$  &  $\frac{4}{5}$ ).



When all of the pieces are filled in we can see that  $1 \frac{3}{5} + 2 \frac{4}{5} = 4 \frac{2}{5}$



**Answers**

1.  $5 \frac{1}{5}$

2.  $5 \frac{4}{5}$

3.  $7 \frac{0}{10}$

4.  $4 \frac{1}{5}$

5.  $7 \frac{0}{5}$

6.  $6 \frac{2}{4}$

7.  $4 \frac{3}{5}$

8.  $2 \frac{6}{8}$

9.  $6 \frac{2}{5}$

10.  $5 \frac{3}{6}$