



Use the visual model to solve each problem.

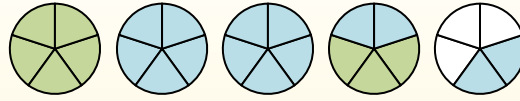
$1 \frac{3}{5} + 2 \frac{4}{5} = ?$



To solve a fraction addition problem one strategy is to shade in the whole amounts first (1 & 2).



Next fill in the fraction amounts ($\frac{3}{5}$ & $\frac{4}{5}$).



When all of the pieces are filled in we can see that $1 \frac{3}{5} + 2 \frac{4}{5} = 4 \frac{2}{5}$

Answers

1. _____
2. _____
3. _____
4. _____
5. _____
6. _____
7. _____
8. _____
9. _____
10. _____

1) $1 \frac{4}{5} + 2 \frac{1}{5} =$

2) $1 \frac{1}{10} + 2 \frac{8}{10} =$

3) $2 \frac{3}{4} + 3 \frac{1}{4} =$

4) $3 \frac{1}{3} + 2 \frac{1}{3} =$

5) $2 \frac{2}{5} + 1 \frac{4}{5} =$

6) $1 \frac{4}{6} + 3 \frac{1}{6} =$

7) $1 \frac{4}{12} + 1 \frac{2}{12} =$

8) $2 \frac{3}{5} + 1 \frac{3}{5} =$

9) $1 \frac{10}{12} + 3 \frac{2}{12} =$

10) $1 \frac{4}{5} + 1 \frac{3}{5} =$



Use the visual model to solve each problem.

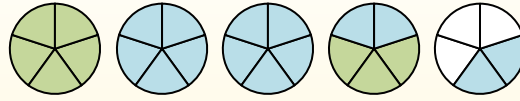
$$1 \frac{3}{5} + 2 \frac{4}{5} = ?$$



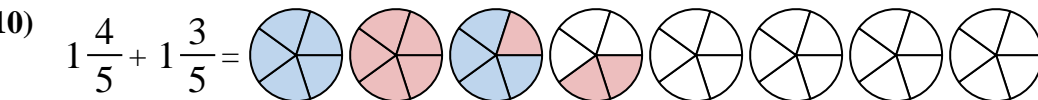
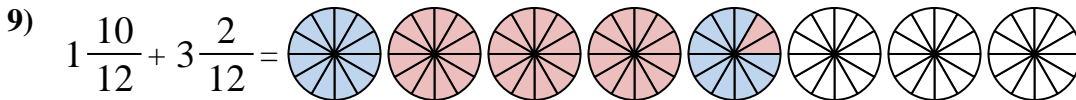
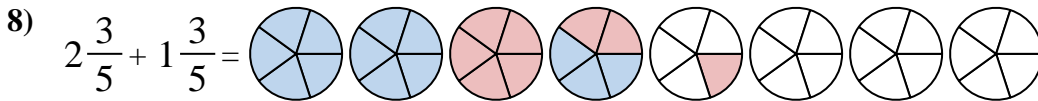
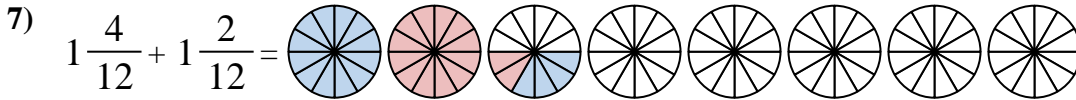
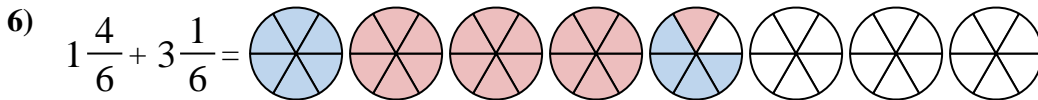
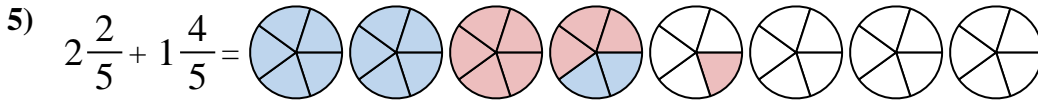
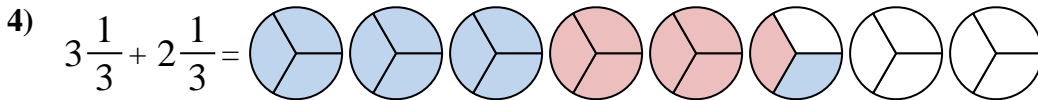
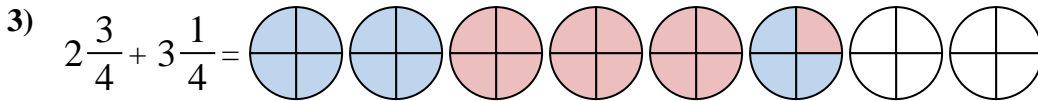
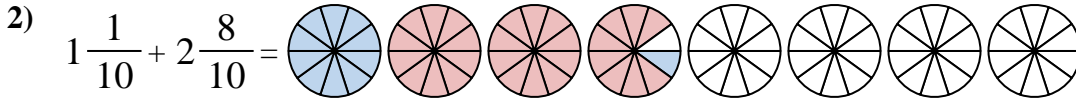
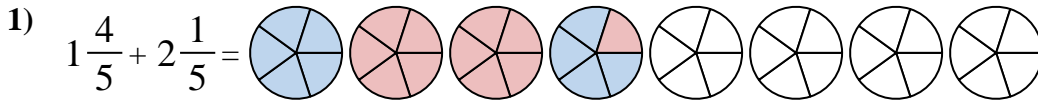
To solve a fraction addition problem one strategy is to shade in the whole amounts first (1 & 2).



Next fill in the fraction amounts ($\frac{3}{5}$ & $\frac{4}{5}$).



When all of the pieces are filled in we can see that $1 \frac{3}{5} + 2 \frac{4}{5} = 4 \frac{2}{5}$



Answers

1. $4 \frac{0}{5}$

2. $3 \frac{9}{10}$

3. $6 \frac{0}{4}$

4. $5 \frac{2}{3}$

5. $4 \frac{1}{5}$

6. $4 \frac{5}{6}$

7. $2 \frac{6}{12}$

8. $4 \frac{1}{5}$

9. $5 \frac{0}{12}$

10. $3 \frac{2}{5}$



Use the visual model to solve each problem.

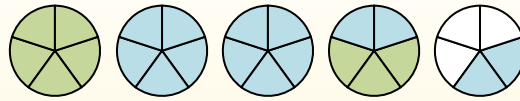
$1 \frac{3}{5} + 2 \frac{4}{5} = ?$



To solve a fraction addition problem one strategy is to shade in the whole amounts first (1 & 2).



Next fill in the fraction amounts ($\frac{3}{5}$ & $\frac{4}{5}$).



When all of the pieces are filled in we can see that $1 \frac{3}{5} + 2 \frac{4}{5} = 4 \frac{2}{5}$

Answers

- 1. _____
- 2. _____
- 3. _____
- 4. _____
- 5. _____
- 6. _____
- 7. _____
- 8. _____
- 9. _____
- 10. _____

1) $1 \frac{1}{4} + 2 \frac{1}{4} =$

2) $3 \frac{1}{5} + 3 \frac{2}{5} =$

3) $3 \frac{1}{4} + 1 \frac{1}{4} =$

4) $1 \frac{5}{12} + 2 \frac{2}{12} =$

5) $3 \frac{7}{12} + 2 \frac{3}{12} =$

6) $2 \frac{1}{3} + 3 \frac{2}{3} =$

7) $1 \frac{2}{3} + 3 \frac{1}{3} =$

8) $3 \frac{2}{3} + 2 \frac{1}{3} =$

9) $1 \frac{2}{12} + 2 \frac{5}{12} =$

10) $1 \frac{3}{5} + 2 \frac{4}{5} =$



Use the visual model to solve each problem.

$1\frac{3}{5} + 2\frac{4}{5} = ?$

To solve a fraction addition problem one strategy is to shade in the whole amounts first (1 & 2).

Next fill in the fraction amounts ($\frac{3}{5}$ & $\frac{4}{5}$).

When all of the pieces are filled in we can see that $1\frac{3}{5} + 2\frac{4}{5} = 4\frac{2}{5}$

Answers

1) $1\frac{1}{4} + 2\frac{1}{4} =$

2) $3\frac{1}{5} + 3\frac{2}{5} =$

3) $3\frac{1}{4} + 1\frac{1}{4} =$

4) $1\frac{5}{12} + 2\frac{2}{12} =$

5) $3\frac{7}{12} + 2\frac{3}{12} =$

6) $2\frac{1}{3} + 3\frac{2}{3} =$

7) $1\frac{2}{3} + 3\frac{1}{3} =$

8) $3\frac{2}{3} + 2\frac{1}{3} =$

9) $1\frac{2}{12} + 2\frac{5}{12} =$

10) $1\frac{3}{5} + 2\frac{4}{5} =$

1. $3\frac{2}{5}$
2. $6\frac{3}{5}$
3. $4\frac{2}{4}$
4. $3\frac{7}{12}$
5. $5\frac{10}{12}$
6. $6\frac{0}{3}$
7. $5\frac{0}{3}$
8. $6\frac{0}{3}$
9. $3\frac{7}{12}$
10. $4\frac{2}{5}$



Use the visual model to solve each problem.

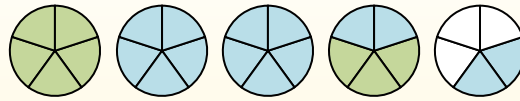
$$1 \frac{3}{5} + 2 \frac{4}{5} = ?$$



To solve a fraction addition problem one strategy is to shade in the whole amounts first (1 & 2).



Next fill in the fraction amounts ($\frac{3}{5}$ & $\frac{4}{5}$).



When all of the pieces are filled in we can see that $1 \frac{3}{5} + 2 \frac{4}{5} = 4 \frac{2}{5}$

1) $3 \frac{3}{4} + 2 \frac{3}{4} =$

2) $2 \frac{1}{5} + 1 \frac{4}{5} =$

3) $2 \frac{2}{8} + 3 \frac{5}{8} =$

4) $3 \frac{2}{3} + 3 \frac{1}{3} =$

5) $2 \frac{1}{3} + 2 \frac{1}{3} =$

6) $2 \frac{1}{5} + 3 \frac{1}{5} =$

7) $3 \frac{1}{3} + 2 \frac{1}{3} =$

8) $2 \frac{1}{3} + 2 \frac{2}{3} =$

9) $2 \frac{4}{8} + 2 \frac{4}{8} =$

10) $2 \frac{4}{10} + 2 \frac{5}{10} =$

Answers

1. _____
2. _____
3. _____
4. _____
5. _____
6. _____
7. _____
8. _____
9. _____
10. _____



Use the visual model to solve each problem.

$1\frac{3}{5} + 2\frac{4}{5} = ?$

To solve a fraction addition problem one strategy is to shade in the whole amounts first (1 & 2).

Next fill in the fraction amounts ($\frac{3}{5}$ & $\frac{4}{5}$).

When all of the pieces are filled in we can see that $1\frac{3}{5} + 2\frac{4}{5} = 4\frac{2}{5}$

Answers

- 1) $3\frac{3}{4} + 2\frac{3}{4} =$
- 2) $2\frac{1}{5} + 1\frac{4}{5} =$
- 3) $2\frac{2}{8} + 3\frac{5}{8} =$
- 4) $3\frac{2}{3} + 3\frac{1}{3} =$
- 5) $2\frac{1}{3} + 2\frac{1}{3} =$
- 6) $2\frac{1}{5} + 3\frac{1}{5} =$
- 7) $3\frac{1}{3} + 2\frac{1}{3} =$
- 8) $2\frac{1}{3} + 2\frac{2}{3} =$
- 9) $2\frac{4}{8} + 2\frac{4}{8} =$
- 10) $2\frac{4}{10} + 2\frac{5}{10} =$

1. $6\frac{2}{4}$
2. $4\frac{0}{5}$
3. $5\frac{7}{8}$
4. $7\frac{0}{3}$
5. $4\frac{2}{3}$
6. $5\frac{2}{5}$
7. $5\frac{2}{3}$
8. $5\frac{0}{3}$
9. $5\frac{0}{8}$
10. $4\frac{9}{10}$

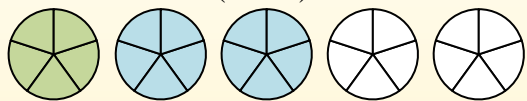


Use the visual model to solve each problem.

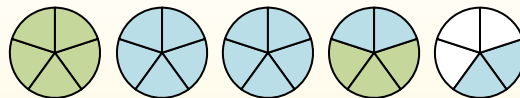
$$1 \frac{3}{5} + 2 \frac{4}{5} = ?$$



To solve a fraction addition problem one strategy is to shade in the whole amounts first (1 & 2).



Next fill in the fraction amounts ($\frac{3}{5}$ & $\frac{4}{5}$).



When all of the pieces are filled in we can see that $1 \frac{3}{5} + 2 \frac{4}{5} = 4 \frac{2}{5}$

Answers

1. _____
2. _____
3. _____
4. _____
5. _____
6. _____
7. _____
8. _____
9. _____
10. _____

1) $1 \frac{9}{12} + 1 \frac{5}{12} =$

2) $3 \frac{2}{5} + 1 \frac{3}{5} =$

3) $1 \frac{5}{8} + 2 \frac{1}{8} =$

4) $1 \frac{3}{12} + 3 \frac{1}{12} =$

5) $3 \frac{2}{6} + 3 \frac{2}{6} =$

6) $1 \frac{3}{8} + 2 \frac{4}{8} =$

7) $1 \frac{3}{12} + 2 \frac{7}{12} =$

8) $3 \frac{6}{12} + 1 \frac{3}{12} =$

9) $3 \frac{5}{6} + 3 \frac{3}{6} =$

10) $3 \frac{5}{8} + 2 \frac{1}{8} =$



Use the visual model to solve each problem.

$1\frac{3}{5} + 2\frac{4}{5} = ?$

To solve a fraction addition problem one strategy is to shade in the whole amounts first (1 & 2).

Next fill in the fraction amounts ($\frac{3}{5}$ & $\frac{4}{5}$).

When all of the pieces are filled in we can see that $1\frac{3}{5} + 2\frac{4}{5} = 4\frac{2}{5}$

Answers

1) $1\frac{9}{12} + 1\frac{5}{12} =$

2) $3\frac{2}{5} + 1\frac{3}{5} =$

3) $1\frac{5}{8} + 2\frac{1}{8} =$

4) $1\frac{3}{12} + 3\frac{1}{12} =$

5) $3\frac{2}{6} + 3\frac{2}{6} =$

6) $1\frac{3}{8} + 2\frac{4}{8} =$

7) $1\frac{3}{12} + 2\frac{7}{12} =$

8) $3\frac{6}{12} + 1\frac{3}{12} =$

9) $3\frac{5}{6} + 3\frac{3}{6} =$

10) $3\frac{5}{8} + 2\frac{1}{8} =$

1. $3\frac{2}{12}$
2. $5\frac{0}{5}$
3. $3\frac{6}{8}$
4. $4\frac{4}{12}$
5. $6\frac{4}{6}$
6. $3\frac{7}{8}$
7. $3\frac{10}{12}$
8. $4\frac{9}{12}$
9. $7\frac{2}{6}$
10. $5\frac{6}{8}$



Use the visual model to solve each problem.

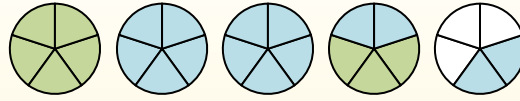
$$1 \frac{3}{5} + 2 \frac{4}{5} = ?$$



To solve a fraction addition problem one strategy is to shade in the whole amounts first (1 & 2).



Next fill in the fraction amounts ($\frac{3}{5}$ & $\frac{4}{5}$).



When all of the pieces are filled in we can see that $1 \frac{3}{5} + 2 \frac{4}{5} = 4 \frac{2}{5}$

1) $2 \frac{3}{12} + 2 \frac{3}{12} =$

2) $1 \frac{2}{3} + 1 \frac{2}{3} =$

3) $3 \frac{1}{6} + 1 \frac{5}{6} =$

4) $1 \frac{7}{8} + 2 \frac{4}{8} =$

5) $3 \frac{1}{5} + 2 \frac{1}{5} =$

6) $1 \frac{2}{6} + 3 \frac{5}{6} =$

7) $2 \frac{3}{5} + 3 \frac{2}{5} =$

8) $2 \frac{6}{10} + 2 \frac{3}{10} =$

9) $1 \frac{5}{8} + 3 \frac{3}{8} =$

10) $3 \frac{1}{12} + 3 \frac{5}{12} =$

Answers

1. _____
2. _____
3. _____
4. _____
5. _____
6. _____
7. _____
8. _____
9. _____
10. _____



Use the visual model to solve each problem.

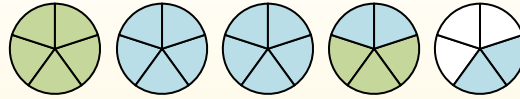
$$1 \frac{3}{5} + 2 \frac{4}{5} = ?$$



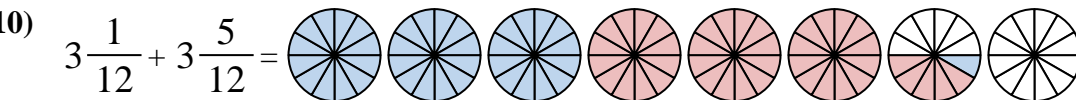
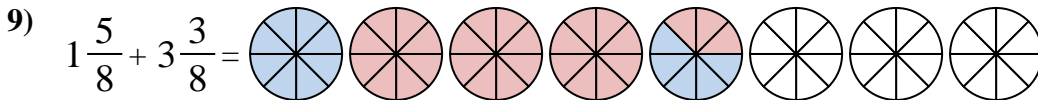
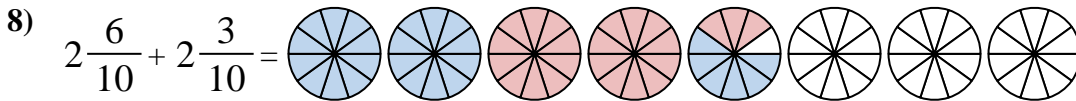
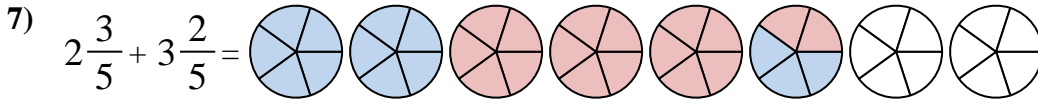
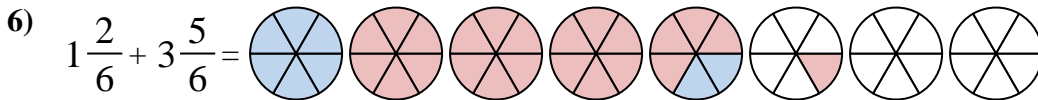
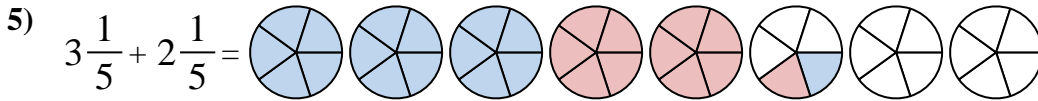
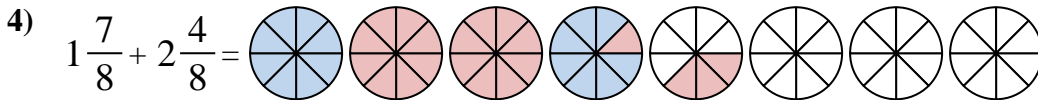
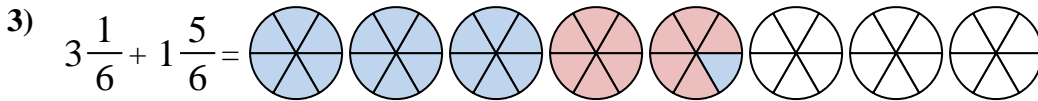
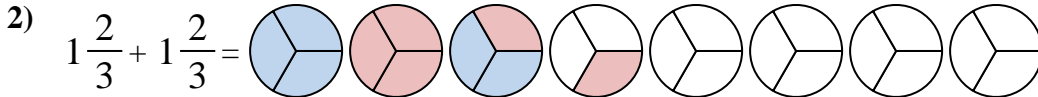
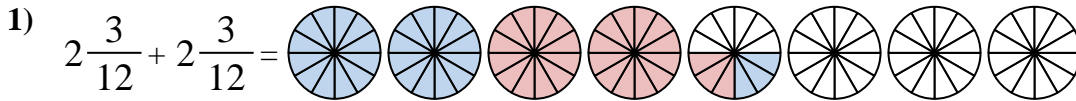
To solve a fraction addition problem one strategy is to shade in the whole amounts first (1 & 2).



Next fill in the fraction amounts ($\frac{3}{5}$ & $\frac{4}{5}$).



When all of the pieces are filled in we can see that $1 \frac{3}{5} + 2 \frac{4}{5} = 4 \frac{2}{5}$



Answers

1. $4 \frac{6}{12}$

2. $3 \frac{1}{3}$

3. $5 \frac{0}{6}$

4. $4 \frac{3}{8}$

5. $5 \frac{2}{5}$

6. $5 \frac{1}{6}$

7. $6 \frac{0}{5}$

8. $4 \frac{9}{10}$

9. $5 \frac{0}{8}$

10. $6 \frac{6}{12}$



Use the visual model to solve each problem.

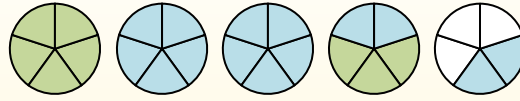
$$1 \frac{3}{5} + 2 \frac{4}{5} = ?$$



To solve a fraction addition problem one strategy is to shade in the whole amounts first (1 & 2).



Next fill in the fraction amounts ($\frac{3}{5}$ & $\frac{4}{5}$).



When all of the pieces are filled in we can see that $1 \frac{3}{5} + 2 \frac{4}{5} = 4 \frac{2}{5}$

Answers

1. _____
2. _____
3. _____
4. _____
5. _____
6. _____
7. _____
8. _____
9. _____
10. _____

1) $3 \frac{5}{10} + 2 \frac{4}{10} =$

2) $1 \frac{1}{5} + 1 \frac{1}{5} =$

3) $1 \frac{4}{8} + 2 \frac{3}{8} =$

4) $2 \frac{2}{6} + 1 \frac{2}{6} =$

5) $2 \frac{2}{5} + 1 \frac{3}{5} =$

6) $1 \frac{5}{12} + 2 \frac{4}{12} =$

7) $1 \frac{2}{3} + 1 \frac{1}{3} =$

8) $1 \frac{6}{8} + 1 \frac{3}{8} =$

9) $3 \frac{3}{8} + 3 \frac{4}{8} =$

10) $1 \frac{3}{4} + 3 \frac{2}{4} =$



Use the visual model to solve each problem.

$1\frac{3}{5} + 2\frac{4}{5} = ?$

To solve a fraction addition problem one strategy is to shade in the whole amounts first (1 & 2).

Next fill in the fraction amounts ($\frac{3}{5}$ & $\frac{4}{5}$).

When all of the pieces are filled in we can see that $1\frac{3}{5} + 2\frac{4}{5} = 4\frac{2}{5}$

Answers

- 1) $3\frac{5}{10} + 2\frac{4}{10} =$
- 2) $1\frac{1}{5} + 1\frac{1}{5} =$
- 3) $1\frac{4}{8} + 2\frac{3}{8} =$
- 4) $2\frac{2}{6} + 1\frac{2}{6} =$
- 5) $2\frac{2}{5} + 1\frac{3}{5} =$
- 6) $1\frac{5}{12} + 2\frac{4}{12} =$
- 7) $1\frac{2}{3} + 1\frac{1}{3} =$
- 8) $1\frac{6}{8} + 1\frac{3}{8} =$
- 9) $3\frac{3}{8} + 3\frac{4}{8} =$
- 10) $1\frac{3}{4} + 3\frac{2}{4} =$

1. $5\frac{9}{10}$
2. $2\frac{2}{5}$
3. $3\frac{7}{8}$
4. $3\frac{4}{6}$
5. $4\frac{0}{5}$
6. $3\frac{9}{12}$
7. $3\frac{0}{3}$
8. $3\frac{1}{8}$
9. $6\frac{7}{8}$
10. $5\frac{1}{4}$



Use the visual model to solve each problem.

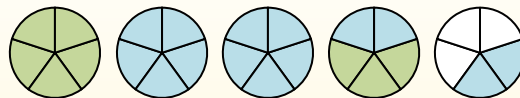
$$1 \frac{3}{5} + 2 \frac{4}{5} = ?$$



To solve a fraction addition problem one strategy is to shade in the whole amounts first (1 & 2).



Next fill in the fraction amounts ($\frac{3}{5}$ & $\frac{4}{5}$).



When all of the pieces are filled in we can see that $1 \frac{3}{5} + 2 \frac{4}{5} = 4 \frac{2}{5}$

Answers

1. _____
2. _____
3. _____
4. _____
5. _____
6. _____
7. _____
8. _____
9. _____
10. _____

1) $2 \frac{5}{12} + 2 \frac{8}{12} =$

2) $3 \frac{1}{4} + 2 \frac{2}{4} =$

3) $3 \frac{2}{5} + 3 \frac{3}{5} =$

4) $1 \frac{1}{4} + 1 \frac{3}{4} =$

5) $3 \frac{3}{6} + 2 \frac{5}{6} =$

6) $3 \frac{9}{10} + 1 \frac{4}{10} =$

7) $3 \frac{4}{12} + 3 \frac{10}{12} =$

8) $1 \frac{8}{10} + 2 \frac{2}{10} =$


9) $3 \frac{8}{10} + 1 \frac{5}{10} =$

10) $3 \frac{3}{12} + 1 \frac{7}{12} =$




Use the visual model to solve each problem.


$1\frac{3}{5} + 2\frac{4}{5} = ?$



To solve a fraction addition problem one strategy is to shade in the whole amounts first (1 & 2).

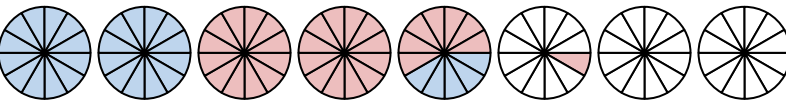


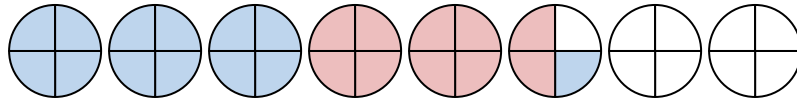
Next fill in the fraction amounts ($\frac{3}{5}$ & $\frac{4}{5}$).

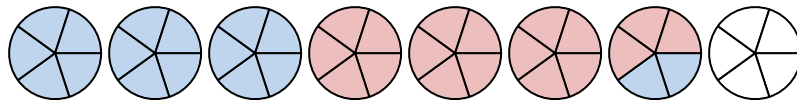


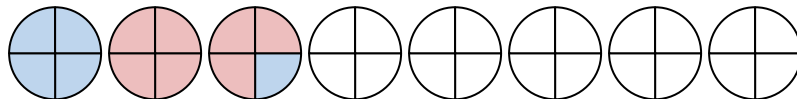
When all of the pieces are filled in we can see that $1\frac{3}{5} + 2\frac{4}{5} = 4\frac{2}{5}$

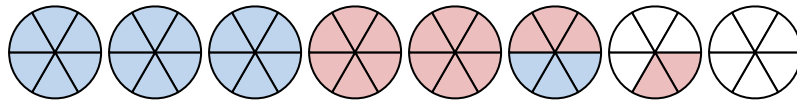
Answers

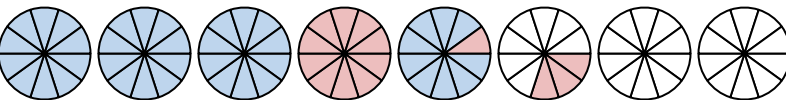
1) $2\frac{5}{12} + 2\frac{8}{12} =$ 

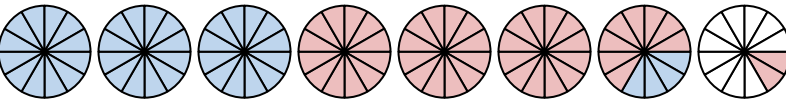
2) $3\frac{1}{4} + 2\frac{2}{4} =$ 

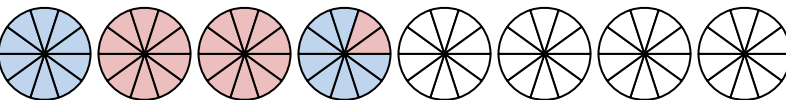
3) $3\frac{2}{5} + 3\frac{3}{5} =$ 

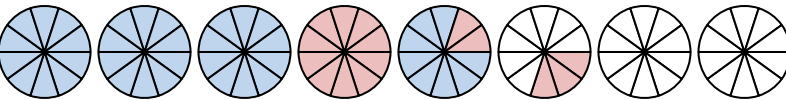
4) $1\frac{1}{4} + 1\frac{3}{4} =$ 

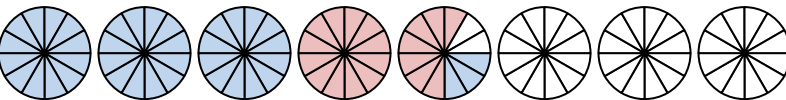
5) $3\frac{3}{6} + 2\frac{5}{6} =$ 

6) $3\frac{9}{10} + 1\frac{4}{10} =$ 

7) $3\frac{4}{12} + 3\frac{10}{12} =$ 

8) $1\frac{8}{10} + 2\frac{2}{10} =$ 

9) $3\frac{8}{10} + 1\frac{5}{10} =$ 

10) $3\frac{3}{12} + 1\frac{7}{12} =$ 

1. 5¹/₁₂
2. 5³/₄
3. 7⁰/₅
4. 3⁰/₄
5. 6²/₆
6. 5³/₁₀
7. 7²/₁₂
8. 4⁰/₁₀
9. 5³/₁₀
10. 4¹⁰/₁₂



Use the visual model to solve each problem.

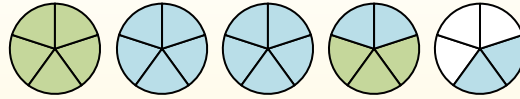
$1 \frac{3}{5} + 2 \frac{4}{5} = ?$



To solve a fraction addition problem one strategy is to shade in the whole amounts first (1 & 2).



Next fill in the fraction amounts ($\frac{3}{5}$ & $\frac{4}{5}$).



When all of the pieces are filled in we can see that $1 \frac{3}{5} + 2 \frac{4}{5} = 4 \frac{2}{5}$

Answers

- 1. _____
- 2. _____
- 3. _____
- 4. _____
- 5. _____
- 6. _____
- 7. _____
- 8. _____
- 9. _____
- 10. _____

1) $3 \frac{1}{3} + 1 \frac{1}{3} =$

2) $1 \frac{2}{3} + 3 \frac{1}{3} =$

3) $2 \frac{3}{4} + 2 \frac{1}{4} =$

4) $3 \frac{4}{6} + 2 \frac{5}{6} =$

5) $1 \frac{8}{12} + 2 \frac{11}{12} =$

6) $1 \frac{8}{10} + 3 \frac{8}{10} =$

7) $1 \frac{4}{6} + 1 \frac{1}{6} =$

8) $1 \frac{2}{12} + 1 \frac{2}{12} =$

9) $3 \frac{8}{10} + 2 \frac{2}{10} =$

10) $1 \frac{3}{5} + 1 \frac{2}{5} =$



Use the visual model to solve each problem.

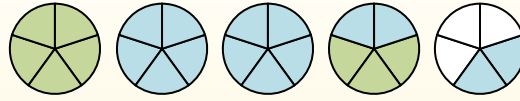
$$1\frac{3}{5} + 2\frac{4}{5} = ?$$



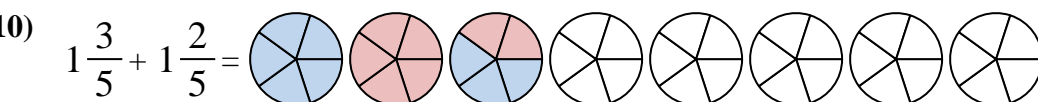
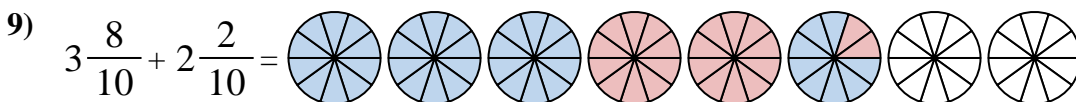
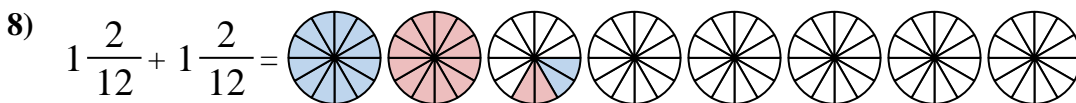
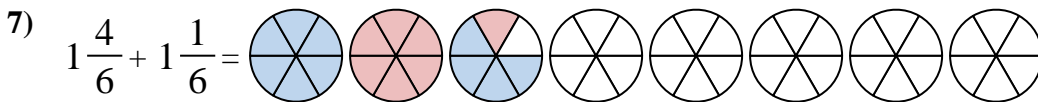
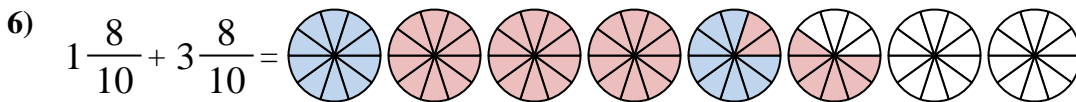
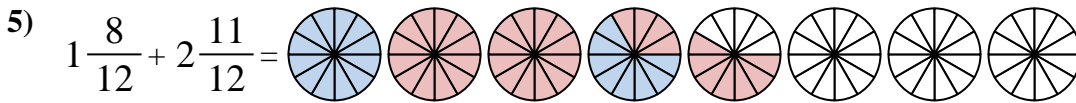
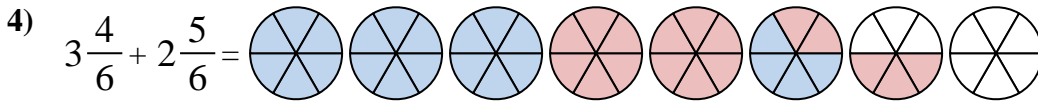
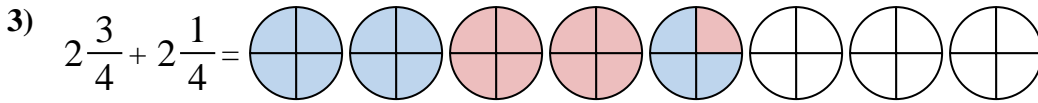
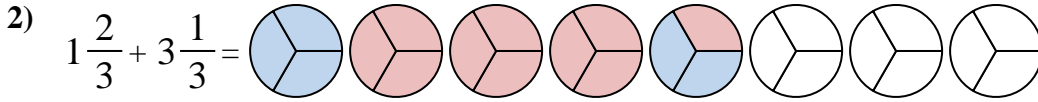
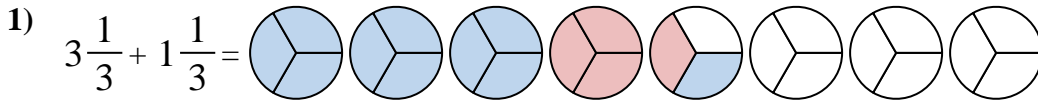
To solve a fraction addition problem one strategy is to shade in the whole amounts first (1 & 2).



Next fill in the fraction amounts ($\frac{3}{5}$ & $\frac{4}{5}$).



When all of the pieces are filled in we can see that $1\frac{3}{5} + 2\frac{4}{5} = 4\frac{2}{5}$



Answers

1. $4\frac{2}{3}$

2. $5\frac{0}{3}$

3. $5\frac{0}{4}$

4. $6\frac{3}{6}$

5. $4\frac{7}{12}$

6. $5\frac{6}{10}$

7. $2\frac{5}{6}$

8. $2\frac{4}{12}$

9. $6\frac{0}{10}$

10. $3\frac{0}{5}$



Use the visual model to solve each problem.

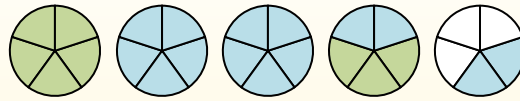
$1\frac{3}{5} + 2\frac{4}{5} = ?$



To solve a fraction addition problem one strategy is to shade in the whole amounts first (1 & 2).



Next fill in the fraction amounts ($\frac{3}{5}$ & $\frac{4}{5}$).



When all of the pieces are filled in we can see that $1\frac{3}{5} + 2\frac{4}{5} = 4\frac{2}{5}$

Answers

- 1. _____
- 2. _____
- 3. _____
- 4. _____
- 5. _____
- 6. _____
- 7. _____
- 8. _____
- 9. _____
- 10. _____

1) $2\frac{1}{4} + 1\frac{3}{4} =$

2) $2\frac{2}{5} + 2\frac{1}{5} =$

3) $1\frac{2}{5} + 2\frac{1}{5} =$

4) $2\frac{9}{12} + 1\frac{1}{12} =$

5) $2\frac{2}{3} + 1\frac{2}{3} =$

6) $2\frac{3}{4} + 3\frac{2}{4} =$

7) $2\frac{3}{6} + 1\frac{4}{6} =$

8) $1\frac{2}{6} + 1\frac{1}{6} =$

9) $3\frac{4}{6} + 1\frac{5}{6} =$

10) $1\frac{10}{12} + 3\frac{1}{12} =$



Use the visual model to solve each problem.

$1\frac{3}{5} + 2\frac{4}{5} = ?$

To solve a fraction addition problem one strategy is to shade in the whole amounts first (1 & 2).

Next fill in the fraction amounts ($\frac{3}{5}$ & $\frac{4}{5}$).

When all of the pieces are filled in we can see that $1\frac{3}{5} + 2\frac{4}{5} = 4\frac{2}{5}$

Answers

1) $2\frac{1}{4} + 1\frac{3}{4} =$

2) $2\frac{2}{5} + 2\frac{1}{5} =$

3) $1\frac{2}{5} + 2\frac{1}{5} =$

4) $2\frac{9}{12} + 1\frac{1}{12} =$

5) $2\frac{2}{3} + 1\frac{2}{3} =$

6) $2\frac{3}{4} + 3\frac{2}{4} =$

7) $2\frac{3}{6} + 1\frac{4}{6} =$

8) $1\frac{2}{6} + 1\frac{1}{6} =$

9) $3\frac{4}{6} + 1\frac{5}{6} =$

10) $1\frac{10}{12} + 3\frac{1}{12} =$

1. 4⁰/₄
2. 4³/₅
3. 3³/₅
4. 3¹⁰/₁₂
5. 4¹/₃
6. 6¹/₄
7. 4¹/₆
8. 2³/₆
9. 5³/₆
10. 4¹¹/₁₂



Use the visual model to solve each problem.

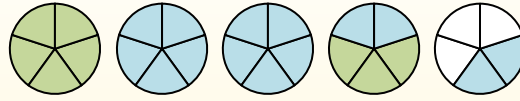
$1\frac{3}{5} + 2\frac{4}{5} = ?$



To solve a fraction addition problem one strategy is to shade in the whole amounts first (1 & 2).



Next fill in the fraction amounts ($\frac{3}{5}$ & $\frac{4}{5}$).



When all of the pieces are filled in we can see that $1\frac{3}{5} + 2\frac{4}{5} = 4\frac{2}{5}$

Answers

1. _____
2. _____
3. _____
4. _____
5. _____
6. _____
7. _____
8. _____
9. _____
10. _____

1) $3\frac{8}{10} + 1\frac{3}{10} =$

2) $3\frac{4}{5} + 1\frac{4}{5} =$

3) $2\frac{1}{10} + 1\frac{6}{10} =$

4) $3\frac{7}{12} + 1\frac{5}{12} =$

5) $3\frac{2}{3} + 3\frac{2}{3} =$

6) $3\frac{2}{5} + 1\frac{1}{5} =$

7) $3\frac{1}{8} + 3\frac{2}{8} =$

8) $3\frac{8}{12} + 1\frac{2}{12} =$


9) $2\frac{3}{4} + 2\frac{3}{4} =$

10) $1\frac{1}{3} + 3\frac{2}{3} =$




Use the visual model to solve each problem.


$1\frac{3}{5} + 2\frac{4}{5} = ?$



To solve a fraction addition problem one strategy is to shade in the whole amounts first (1 & 2).

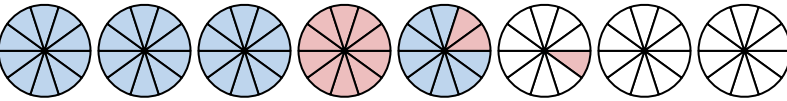


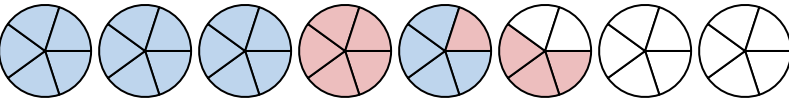
Next fill in the fraction amounts ($\frac{3}{5}$ & $\frac{4}{5}$).

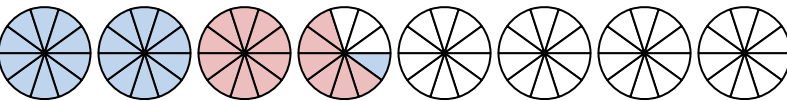


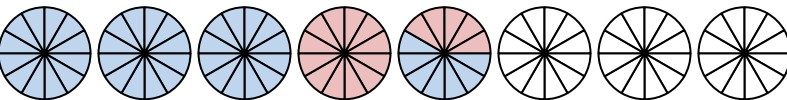
When all of the pieces are filled in we can see that $1\frac{3}{5} + 2\frac{4}{5} = 4\frac{2}{5}$

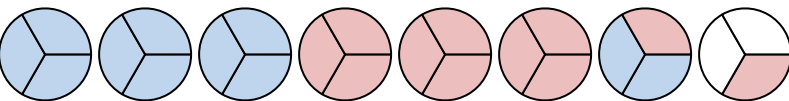
Answers

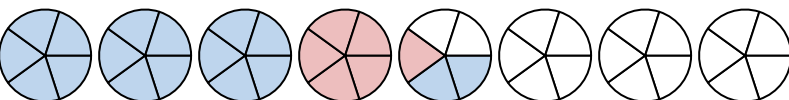
1) $3\frac{8}{10} + 1\frac{3}{10} =$ 

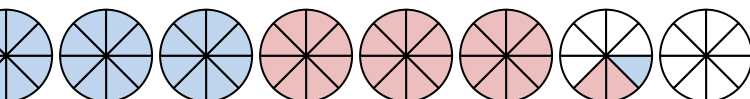
2) $3\frac{4}{5} + 1\frac{4}{5} =$ 

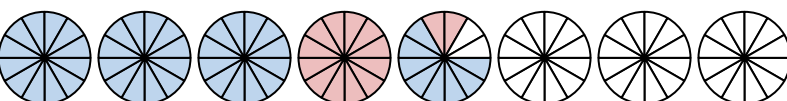
3) $2\frac{1}{10} + 1\frac{6}{10} =$ 

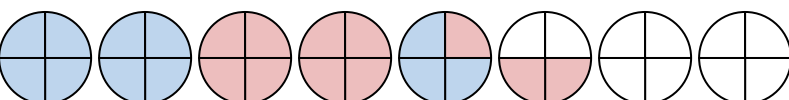
4) $3\frac{7}{12} + 1\frac{5}{12} =$ 

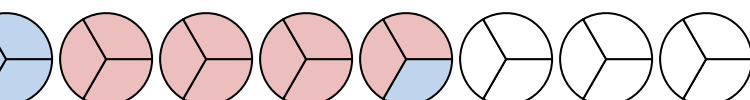
5) $3\frac{2}{3} + 3\frac{2}{3} =$ 

6) $3\frac{2}{5} + 1\frac{1}{5} =$ 

7) $3\frac{1}{8} + 3\frac{2}{8} =$ 

8) $3\frac{8}{12} + 1\frac{2}{12} =$ 

9) $2\frac{3}{4} + 2\frac{3}{4} =$ 

10) $1\frac{1}{3} + 3\frac{2}{3} =$ 

1. 5¹/₁₀
2. 5³/₅
3. 3⁷/₁₀
4. 5⁰/₁₂
5. 7¹/₃
6. 4³/₅
7. 6³/₈
8. 4¹⁰/₁₂
9. 5²/₄
10. 5⁰/₃