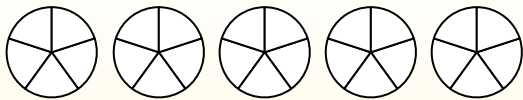




Use the visual model to solve each problem.

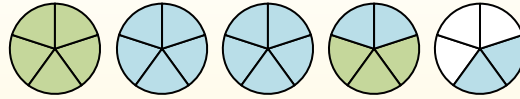
$1\frac{3}{5} + 2\frac{4}{5} = ?$



To solve a fraction addition problem one strategy is to shade in the whole amounts first (1 & 2).



Next fill in the fraction amounts ($\frac{3}{5}$ & $\frac{4}{5}$).



When all of the pieces are filled in we can see that $1\frac{3}{5} + 2\frac{4}{5} = 4\frac{2}{5}$

Answers

1. _____
2. _____
3. _____
4. _____
5. _____
6. _____
7. _____
8. _____
9. _____
10. _____

1) $2\frac{1}{4} + 1\frac{3}{4} =$

2) $2\frac{2}{5} + 2\frac{1}{5} =$

3) $1\frac{2}{5} + 2\frac{1}{5} =$

4) $2\frac{9}{12} + 1\frac{1}{12} =$

5) $2\frac{2}{3} + 1\frac{2}{3} =$

6) $2\frac{3}{4} + 3\frac{2}{4} =$

7) $2\frac{3}{6} + 1\frac{4}{6} =$

8) $1\frac{2}{6} + 1\frac{1}{6} =$

9) $3\frac{4}{6} + 1\frac{5}{6} =$

10) $1\frac{10}{12} + 3\frac{1}{12} =$



Use the visual model to solve each problem.

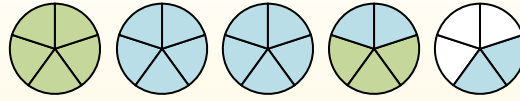
$$1\frac{3}{5} + 2\frac{4}{5} = ?$$



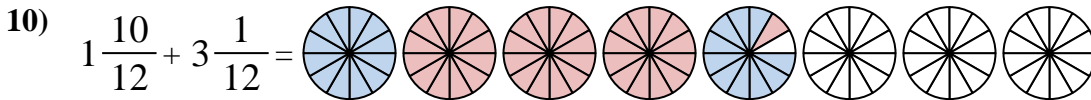
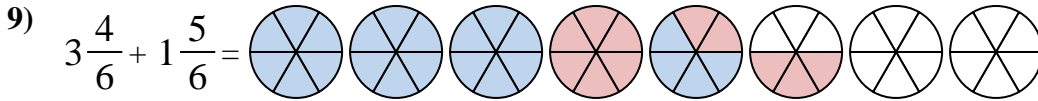
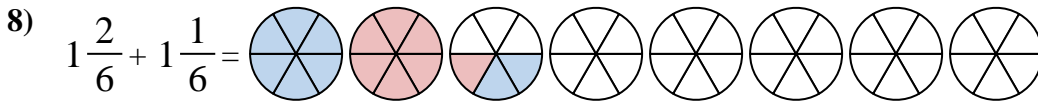
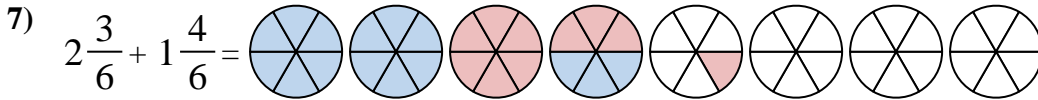
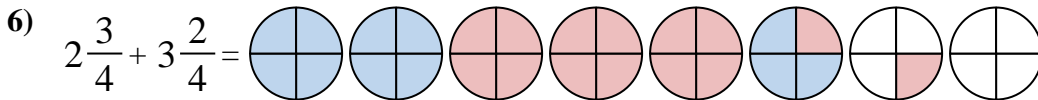
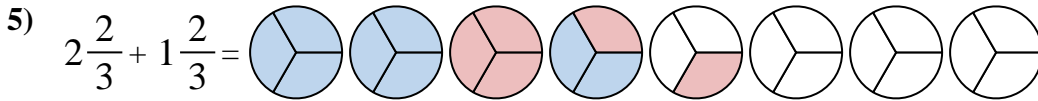
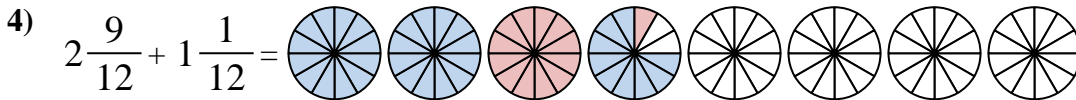
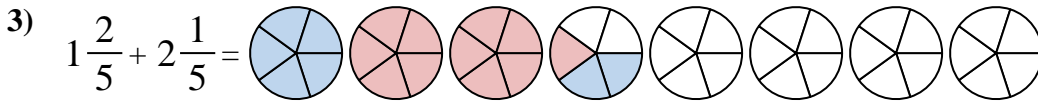
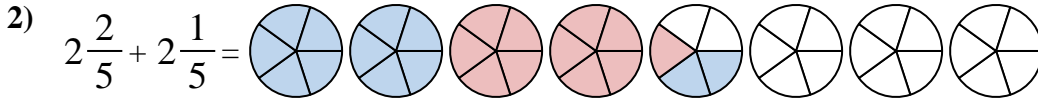
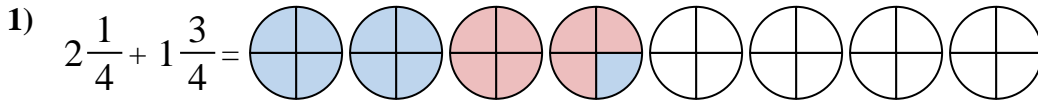
To solve a fraction addition problem one strategy is to shade in the whole amounts first (1 & 2).



Next fill in the fraction amounts ($\frac{3}{5}$ & $\frac{4}{5}$).



When all of the pieces are filled in we can see that $1\frac{3}{5} + 2\frac{4}{5} = 4\frac{2}{5}$



Answers

1. $4\frac{0}{4}$

2. $4\frac{3}{5}$

3. $3\frac{3}{5}$

4. $3\frac{10}{12}$

5. $4\frac{1}{3}$

6. $6\frac{1}{4}$

7. $4\frac{1}{6}$

8. $2\frac{3}{6}$

9. $5\frac{3}{6}$

10. $4\frac{11}{12}$