



Determine which letter best represents the sum.

1) $\frac{4}{6} + \frac{5}{6}$

2) $\frac{1}{2} + \frac{1}{2}$

3) $\frac{5}{12} + \frac{1}{12}$

4) $\frac{1}{10} + \frac{4}{10}$

5) $\frac{3}{12} + \frac{2}{12}$

6) $\frac{8}{12} + \frac{2}{12}$

7) $\frac{3}{4} + \frac{2}{4}$

8) $\frac{2}{8} + \frac{2}{8}$

9) $\frac{4}{10} + \frac{6}{10}$

10) $\frac{2}{12} + \frac{9}{12}$

11) $\frac{5}{10} + \frac{9}{10}$

12) $\frac{1}{4} + \frac{3}{4}$

13) $\frac{1}{3} + \frac{1}{3}$

14) $\frac{2}{8} + \frac{4}{8}$

Answers

1. _____

2. _____

3. _____

4. _____

5. _____

6. _____

7. _____

8. _____

9. _____

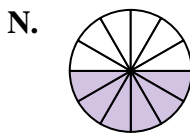
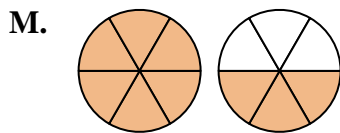
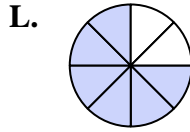
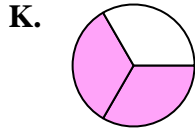
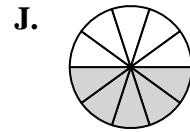
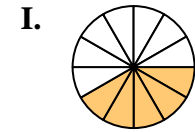
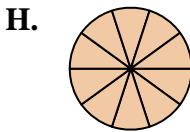
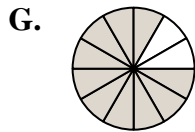
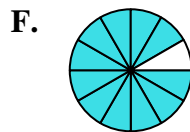
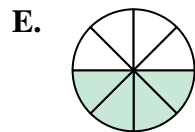
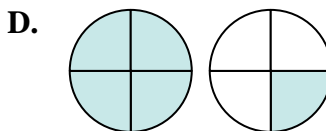
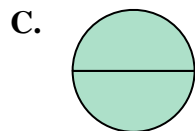
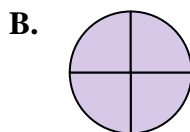
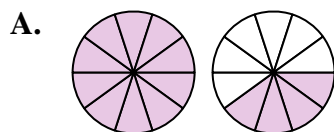
10. _____

11. _____

12. _____

13. _____

14. _____





Determine which letter best represents the sum.

1) $\frac{4}{6} + \frac{5}{6}$

2) $\frac{1}{2} + \frac{1}{2}$

3) $\frac{5}{12} + \frac{1}{12}$

4) $\frac{1}{10} + \frac{4}{10}$

5) $\frac{3}{12} + \frac{2}{12}$

6) $\frac{8}{12} + \frac{2}{12}$

7) $\frac{3}{4} + \frac{2}{4}$

8) $\frac{2}{8} + \frac{2}{8}$

9) $\frac{4}{10} + \frac{6}{10}$

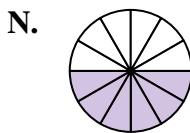
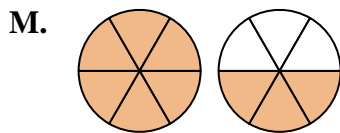
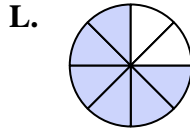
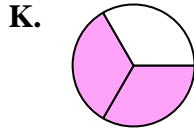
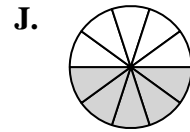
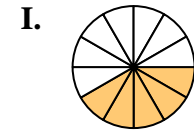
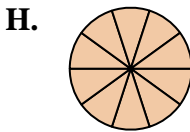
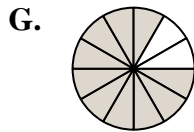
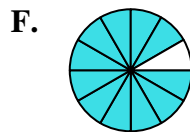
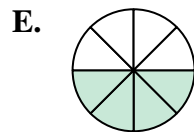
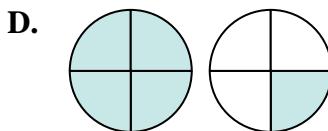
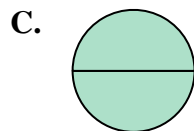
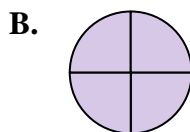
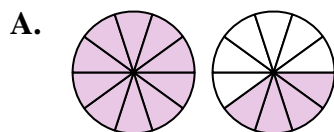
10) $\frac{2}{12} + \frac{9}{12}$

11) $\frac{5}{10} + \frac{9}{10}$

12) $\frac{1}{4} + \frac{3}{4}$

13) $\frac{1}{3} + \frac{1}{3}$

14) $\frac{2}{8} + \frac{4}{8}$



Answers

1. **M** $1\frac{3}{6}$

2. **C** $\frac{2}{2}$

3. **N** $\frac{6}{12}$

4. **J** $\frac{5}{10}$

5. **I** $\frac{5}{12}$

6. **G** $\frac{10}{12}$

7. **D** $1\frac{1}{4}$

8. **E** $\frac{4}{8}$

9. **H** $\frac{10}{10}$

10. **F** $\frac{11}{12}$

11. **A** $1\frac{4}{10}$

12. **B** $\frac{4}{4}$

13. **K** $\frac{2}{3}$

14. **L** $\frac{6}{8}$