



Determine which letter best represents the sum.

1)  $\frac{5}{6} + \frac{2}{6}$

2)  $\frac{2}{8} + \frac{2}{8}$

3)  $\frac{3}{4} + \frac{1}{4}$

4)  $\frac{5}{8} + \frac{7}{8}$

5)  $\frac{2}{5} + \frac{3}{5}$

6)  $\frac{2}{3} + \frac{1}{3}$

7)  $\frac{4}{12} + \frac{2}{12}$

8)  $\frac{3}{4} + \frac{3}{4}$

9)  $\frac{1}{8} + \frac{6}{8}$

10)  $\frac{11}{12} + \frac{6}{12}$

11)  $\frac{1}{6} + \frac{2}{6}$

12)  $\frac{2}{12} + \frac{6}{12}$

13)  $\frac{4}{8} + \frac{5}{8}$

14)  $\frac{2}{10} + \frac{8}{10}$

Answers

1. \_\_\_\_\_

2. \_\_\_\_\_

3. \_\_\_\_\_

4. \_\_\_\_\_

5. \_\_\_\_\_

6. \_\_\_\_\_

7. \_\_\_\_\_

8. \_\_\_\_\_

9. \_\_\_\_\_

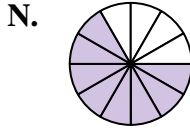
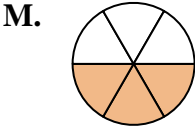
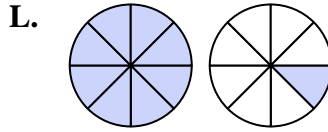
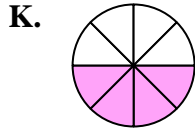
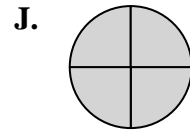
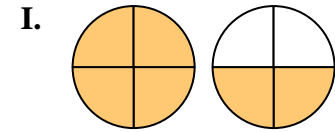
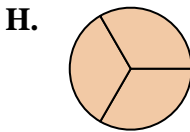
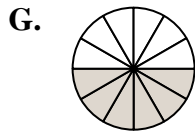
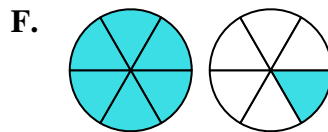
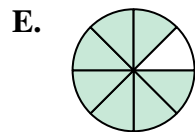
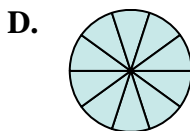
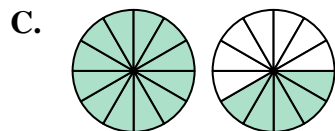
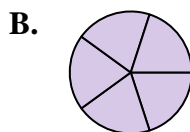
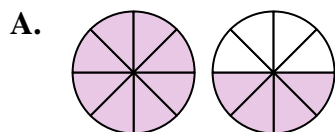
10. \_\_\_\_\_

11. \_\_\_\_\_

12. \_\_\_\_\_

13. \_\_\_\_\_

14. \_\_\_\_\_





Determine which letter best represents the sum.

1)  $\frac{5}{6} + \frac{2}{6}$

2)  $\frac{2}{8} + \frac{2}{8}$

3)  $\frac{3}{4} + \frac{1}{4}$

4)  $\frac{5}{8} + \frac{7}{8}$

5)  $\frac{2}{5} + \frac{3}{5}$

6)  $\frac{2}{3} + \frac{1}{3}$

7)  $\frac{4}{12} + \frac{2}{12}$

8)  $\frac{3}{4} + \frac{3}{4}$

9)  $\frac{1}{8} + \frac{6}{8}$

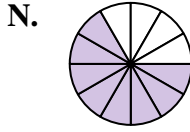
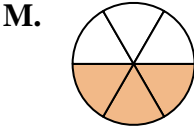
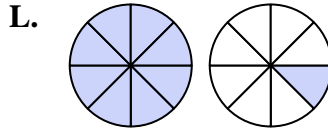
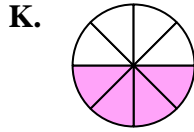
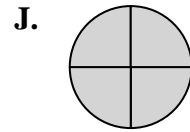
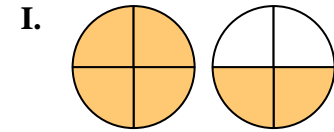
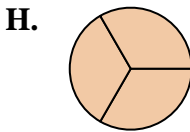
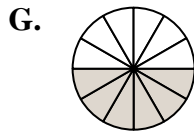
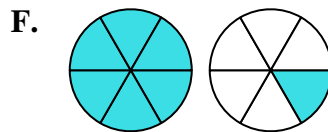
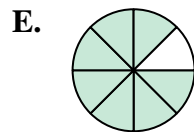
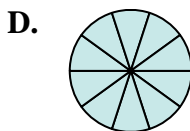
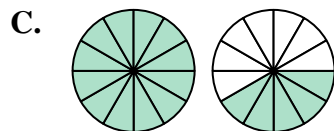
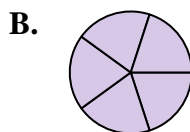
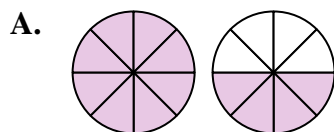
10)  $\frac{11}{12} + \frac{6}{12}$

11)  $\frac{1}{6} + \frac{2}{6}$

12)  $\frac{2}{12} + \frac{6}{12}$

13)  $\frac{4}{8} + \frac{5}{8}$

14)  $\frac{2}{10} + \frac{8}{10}$



**Answers**

1. **F**  $1\frac{1}{6}$

2. **K**  $\frac{4}{8}$

3. **J**  $\frac{4}{4}$

4. **A**  $1\frac{4}{8}$

5. **B**  $\frac{5}{5}$

6. **H**  $\frac{3}{3}$

7. **G**  $\frac{6}{12}$

8. **I**  $1\frac{2}{4}$

9. **E**  $\frac{7}{8}$

10. **C**  $1\frac{5}{12}$

11. **M**  $\frac{3}{6}$

12. **N**  $\frac{8}{12}$

13. **L**  $1\frac{1}{8}$

14. **D**  $\frac{10}{10}$