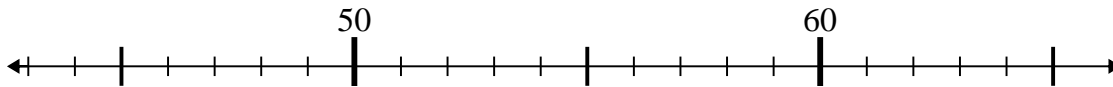


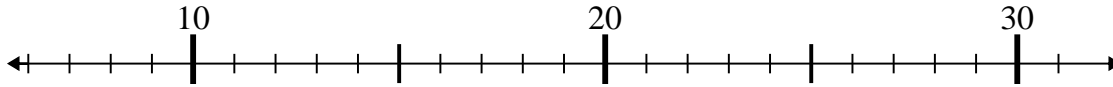


Use the numberlines to solve each problem.

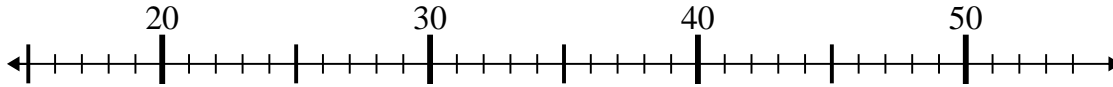
1) $63 - 5 =$



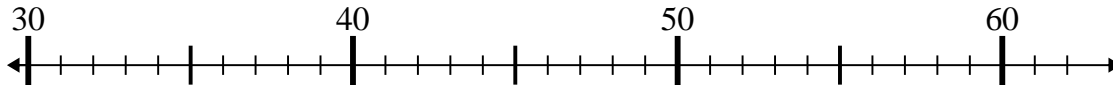
2) $22 + 5 =$



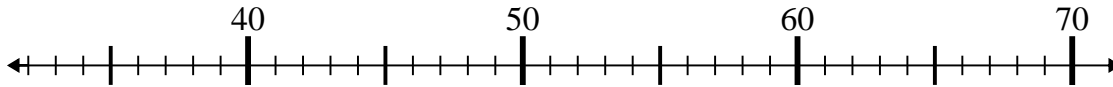
3) $34 + 0 =$



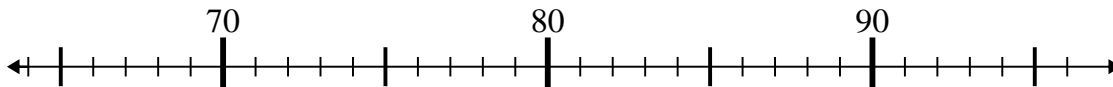
4) $45 - 12 =$



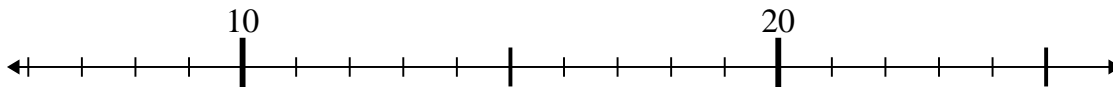
5) $40 + 9 =$



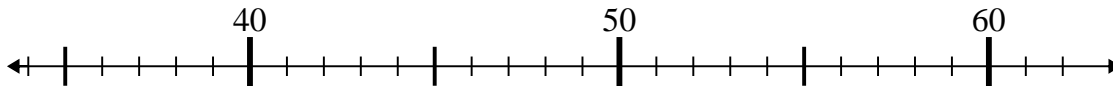
6) $79 - 0 =$



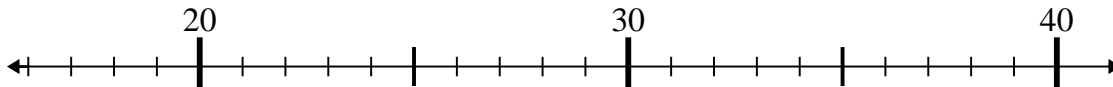
7) $14 + 0 =$



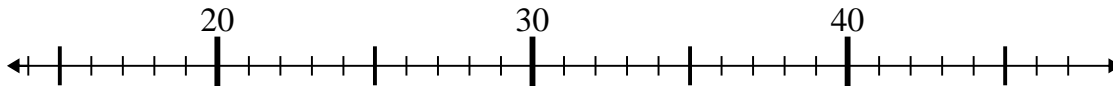
8) $53 + 6 =$



9) $18 + 8 =$



10) $38 - 19 =$



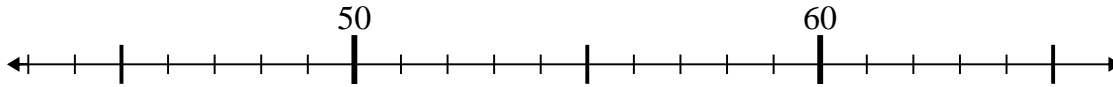
Answers

1. _____
2. _____
3. _____
4. _____
5. _____
6. _____
7. _____
8. _____
9. _____
10. _____

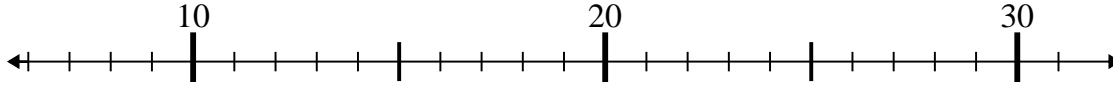


Use the numberlines to solve each problem.

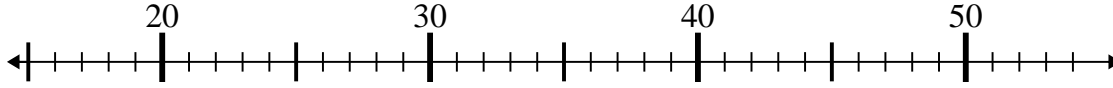
1) $63 - 5 =$



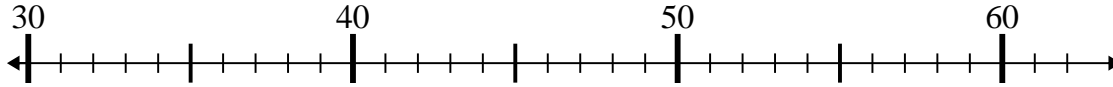
2) $22 + 5 =$



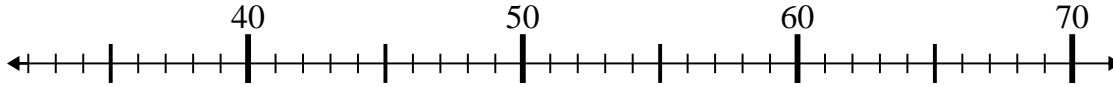
3) $34 + 0 =$



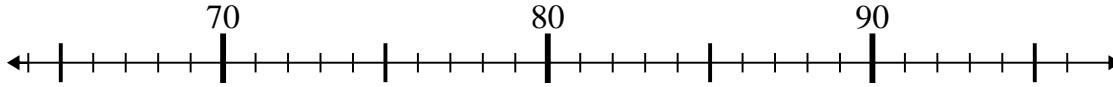
4) $45 - 12 =$



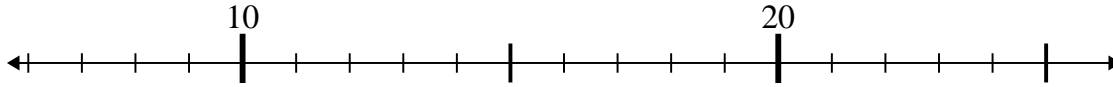
5) $40 + 9 =$



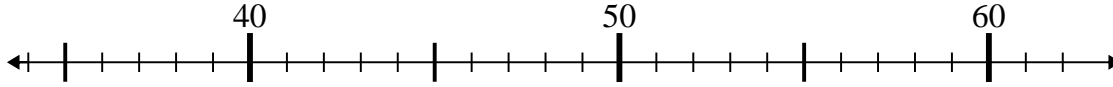
6) $79 - 0 =$



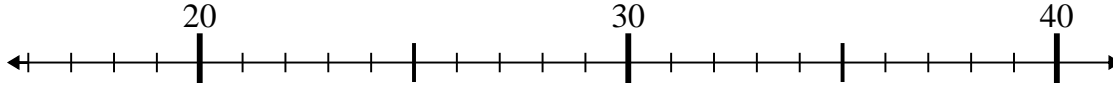
7) $14 + 0 =$



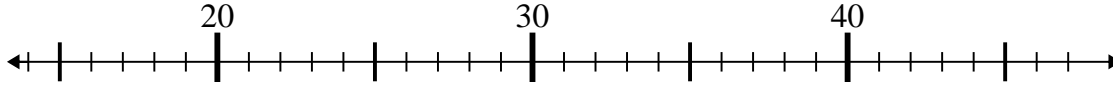
8) $53 + 6 =$



9) $18 + 8 =$



10) $38 - 19 =$



Answers

1. 58

2. 27

3. 34

4. 33

5. 49

6. 79

7. 14

8. 59

9. 26

10. 19