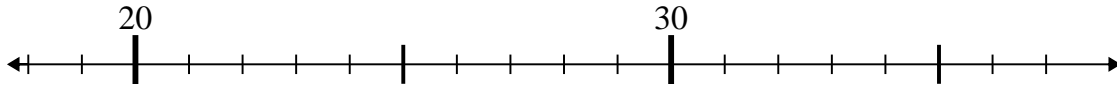




Use the numberlines to solve each problem.

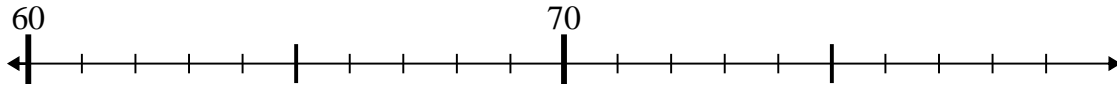
Answers

1) $23 - 4 =$



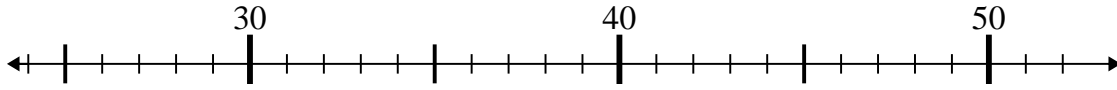
1. _____

2) $73 - 6 =$



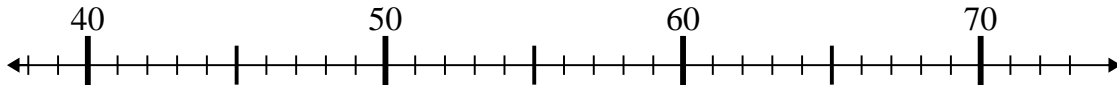
2. _____

3) $44 + 2 =$



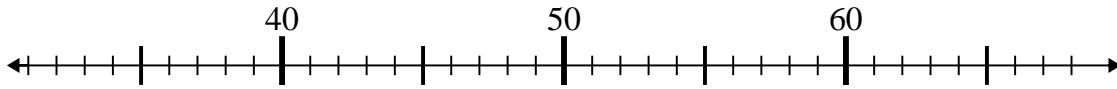
3. _____

4) $42 + 1 =$



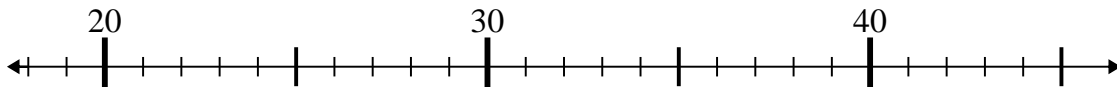
4. _____

5) $40 + 13 =$



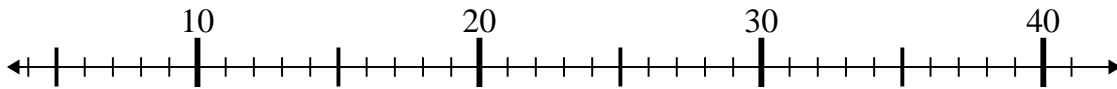
5. _____

6) $26 + 0 =$



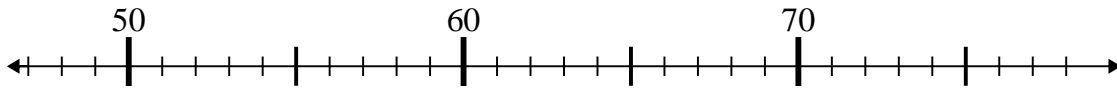
6. _____

7) $36 - 27 =$



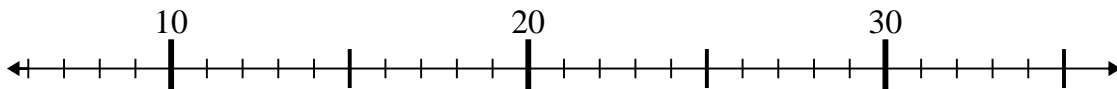
7. _____

8) $54 - 5 =$



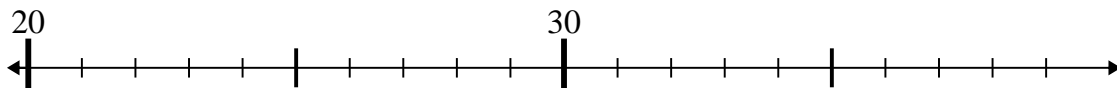
8. _____

9) $10 + 1 =$



9. _____

10) $24 + 1 =$

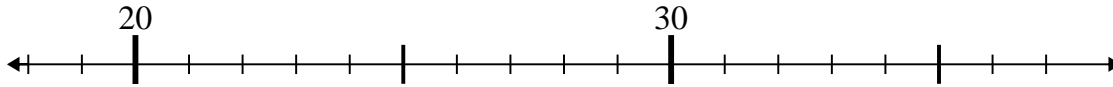


10. _____

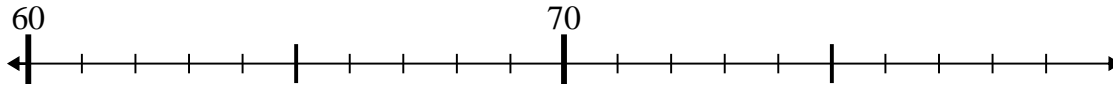


Use the numberlines to solve each problem.

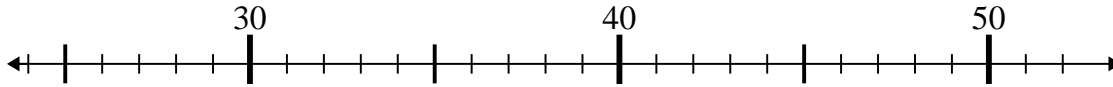
1) $23 - 4 =$



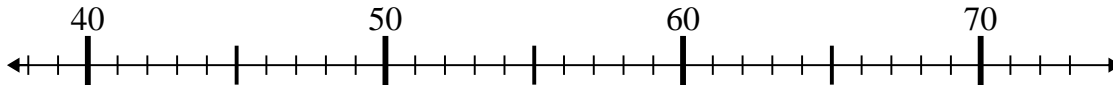
2) $73 - 6 =$



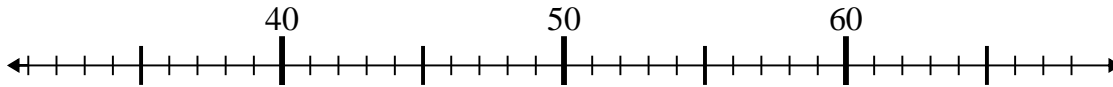
3) $44 + 2 =$



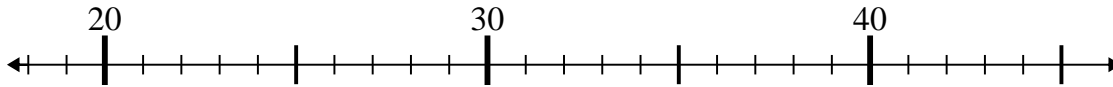
4) $42 + 1 =$



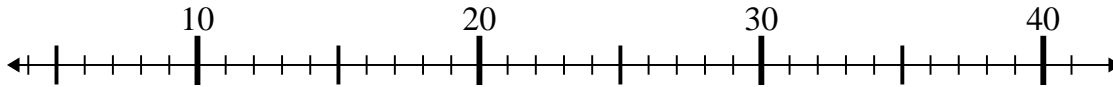
5) $40 + 13 =$



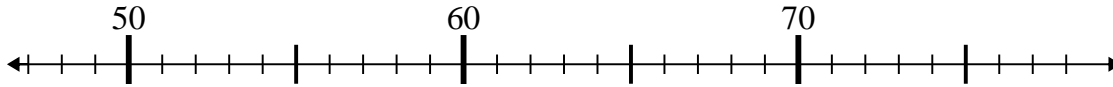
6) $26 + 0 =$



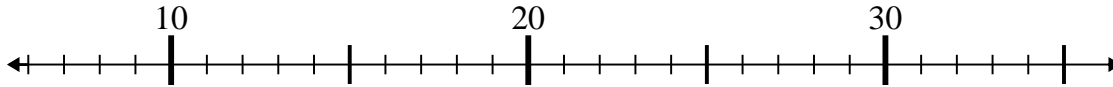
7) $36 - 27 =$



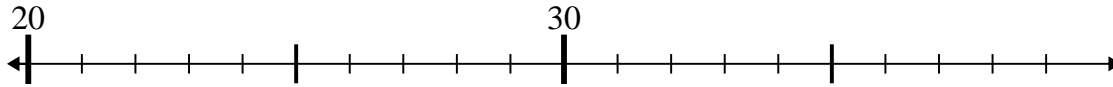
8) $54 - 5 =$



9) $10 + 1 =$



10) $24 + 1 =$



Answers

1. 19

2. 67

3. 46

4. 43

5. 53

6. 26

7. 9

8. 49

9. 11

10. 25