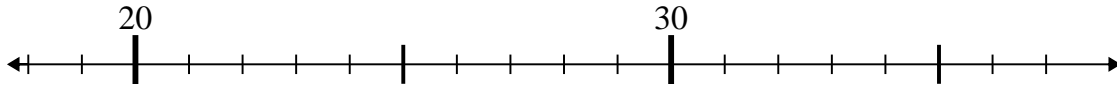




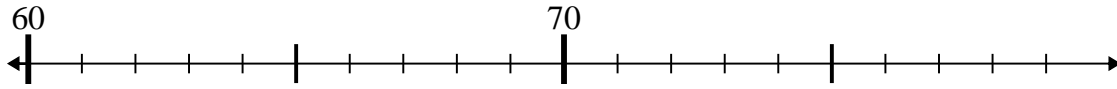
Use the numberlines to solve each problem.

Answers

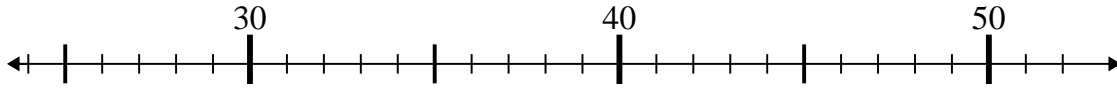
1)  $23 - 4 =$



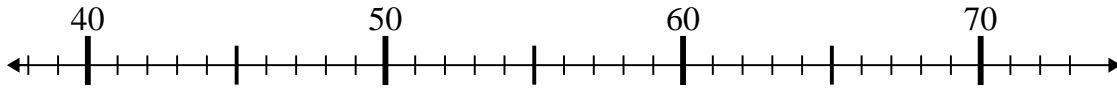
2)  $73 - 6 =$



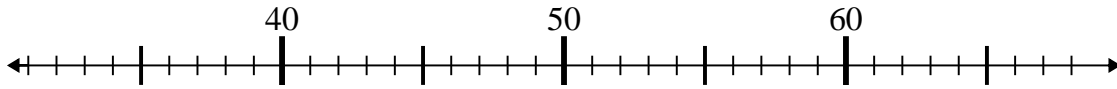
3)  $44 + 2 =$



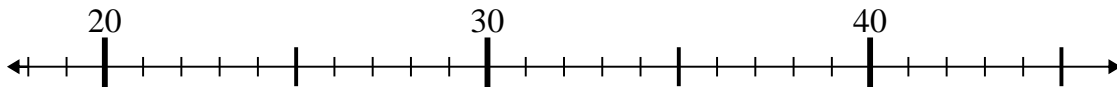
4)  $42 + 1 =$



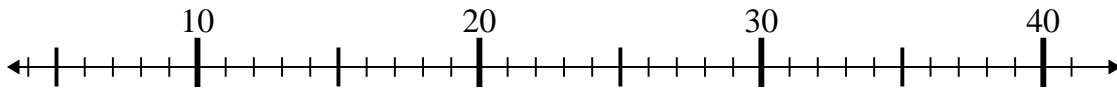
5)  $40 + 13 =$



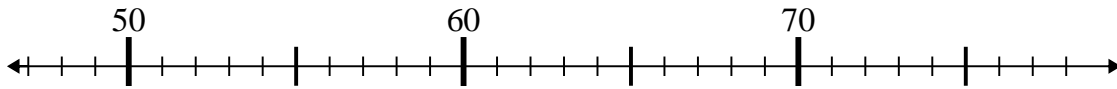
6)  $26 + 0 =$



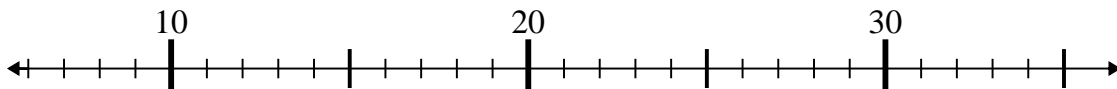
7)  $36 - 27 =$



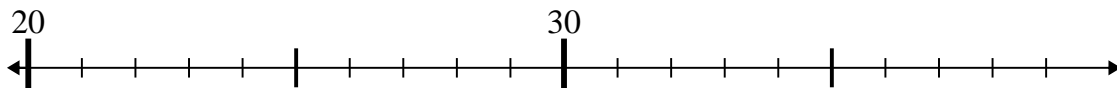
8)  $54 - 5 =$



9)  $10 + 1 =$



10)  $24 + 1 =$

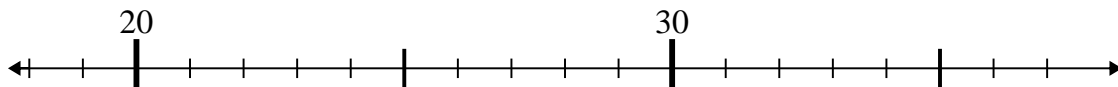


1. \_\_\_\_\_
2. \_\_\_\_\_
3. \_\_\_\_\_
4. \_\_\_\_\_
5. \_\_\_\_\_
6. \_\_\_\_\_
7. \_\_\_\_\_
8. \_\_\_\_\_
9. \_\_\_\_\_
10. \_\_\_\_\_

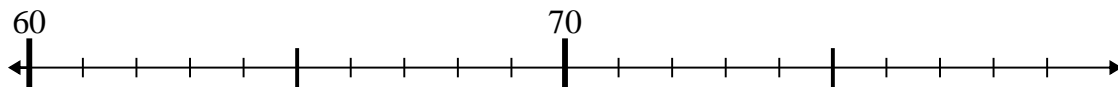


Use the numberlines to solve each problem.

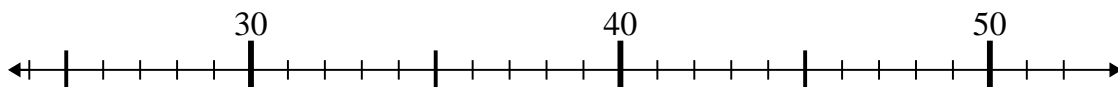
1)  $23 - 4 =$



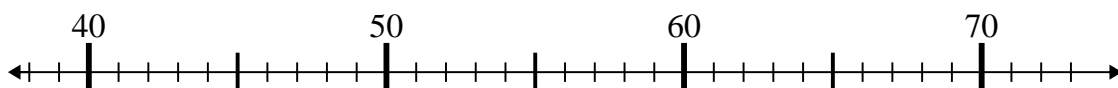
2)  $73 - 6 =$



3)  $44 + 2 =$



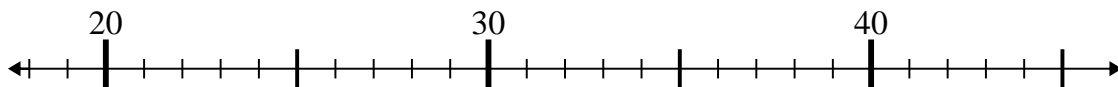
4)  $42 + 1 =$



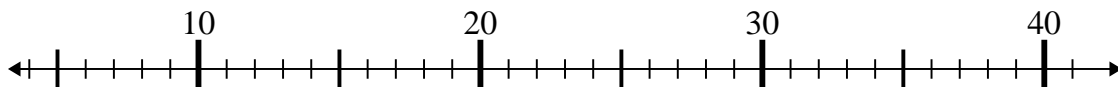
5)  $40 + 13 =$



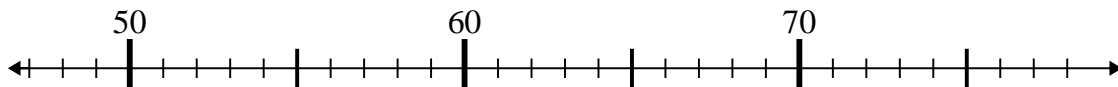
6)  $26 + 0 =$



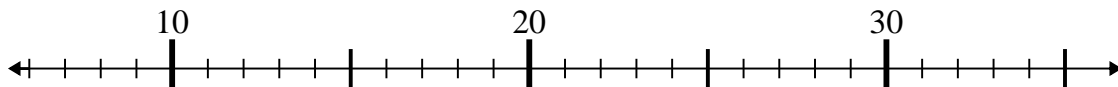
7)  $36 - 27 =$



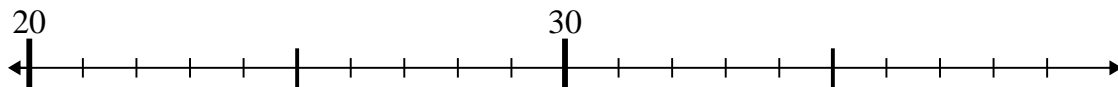
8)  $54 - 5 =$



9)  $10 + 1 =$



10)  $24 + 1 =$



Answers

1. 19

2. 67

3. 46

4. 43

5. 53

6. 26

7. 9

8. 49

9. 11

10. 25