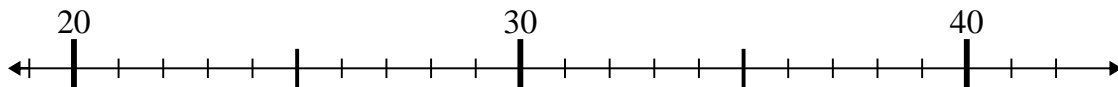




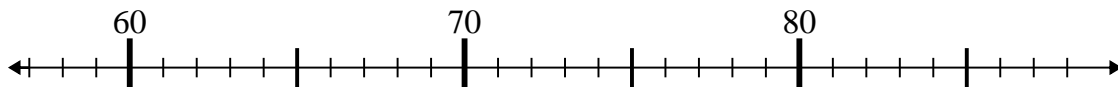
Use the numberlines to solve each problem.

Answers

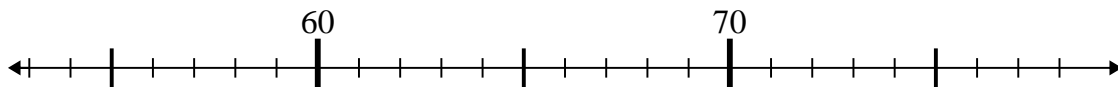
1) $31 + 4 =$



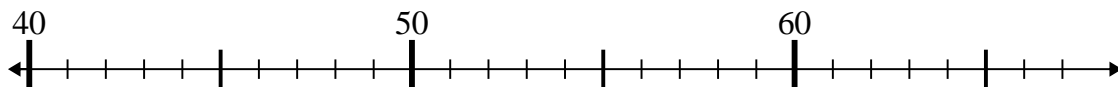
2) $76 - 18 =$



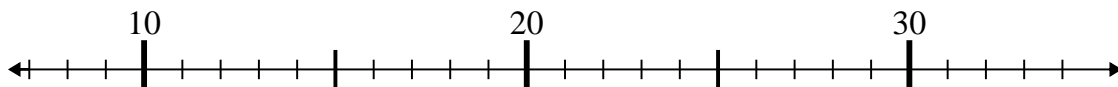
3) $57 + 5 =$



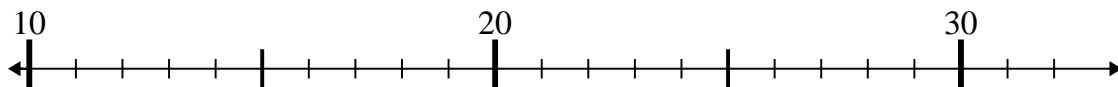
4) $40 + 8 =$



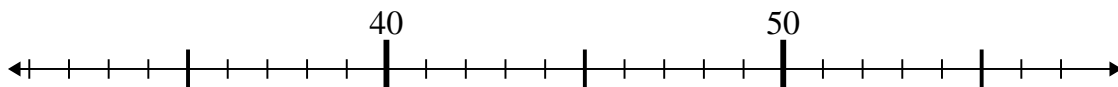
5) $8 + 20 =$



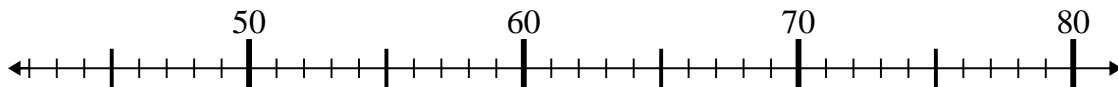
6) $13 + 4 =$



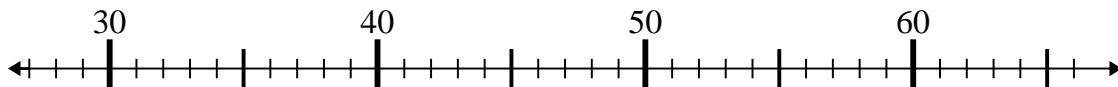
7) $56 - 18 =$



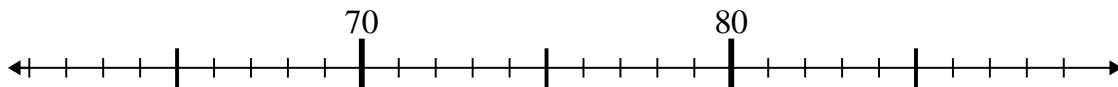
8) $61 - 13 =$



9) $40 + 16 =$



10) $78 + 3 =$

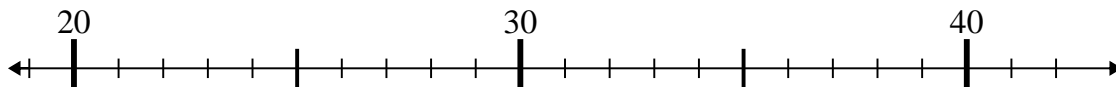


1. _____
2. _____
3. _____
4. _____
5. _____
6. _____
7. _____
8. _____
9. _____
10. _____

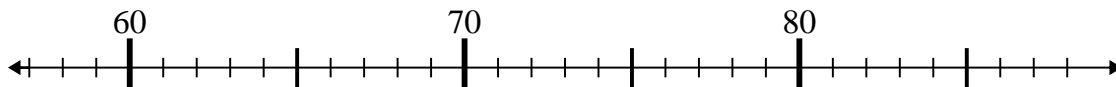


Use the numberlines to solve each problem.

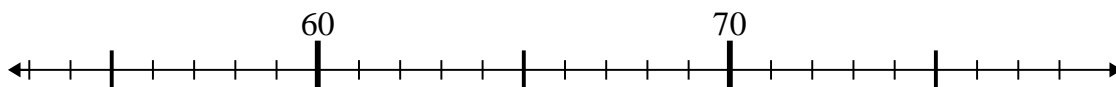
1) $31 + 4 =$



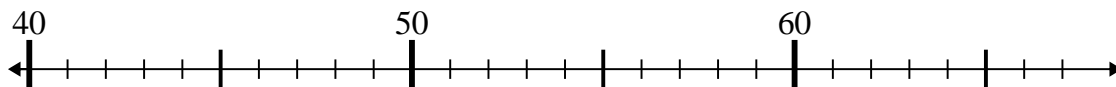
2) $76 - 18 =$



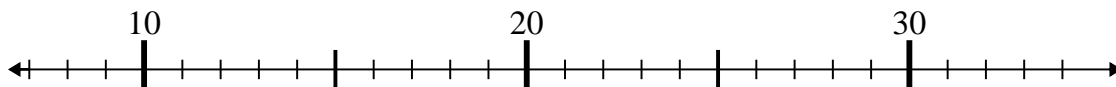
3) $57 + 5 =$



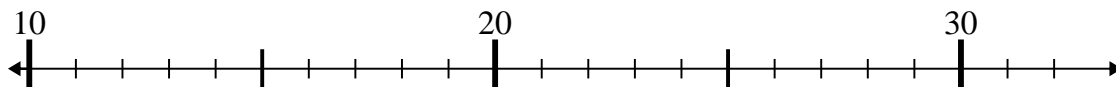
4) $40 + 8 =$



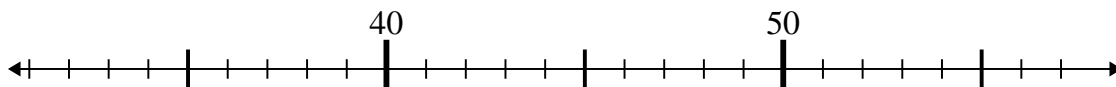
5) $8 + 20 =$



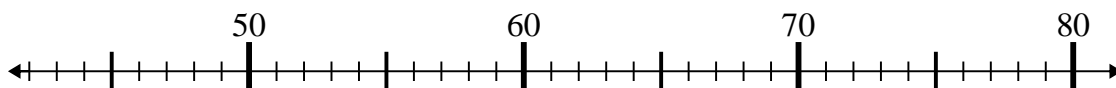
6) $13 + 4 =$



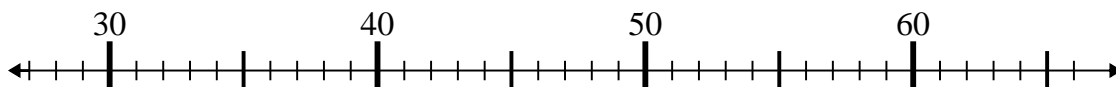
7) $56 - 18 =$



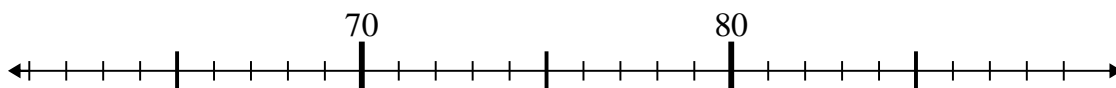
8) $61 - 13 =$



9) $40 + 16 =$



10) $78 + 3 =$

**Answers**1. **35**2. **58**3. **62**4. **48**5. **28**6. **17**7. **38**8. **48**9. **56**10. **81**