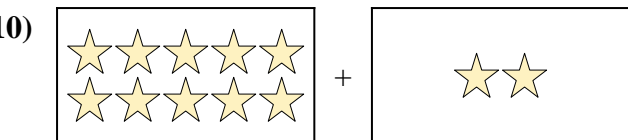
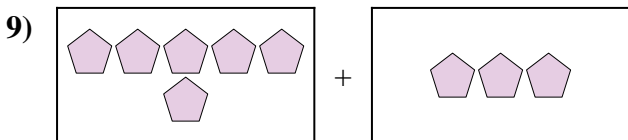
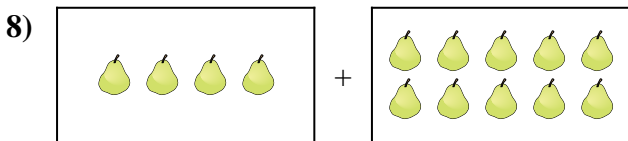
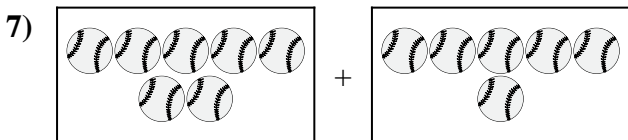

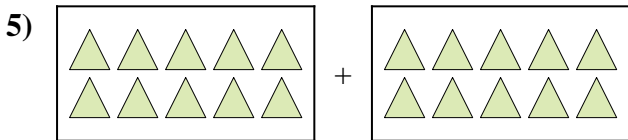
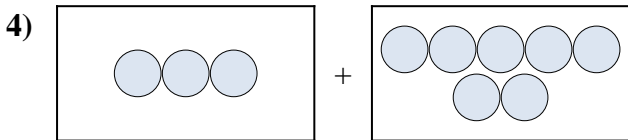
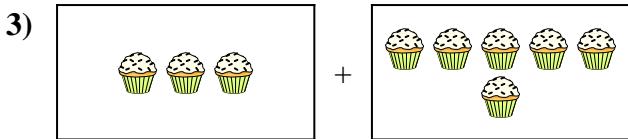
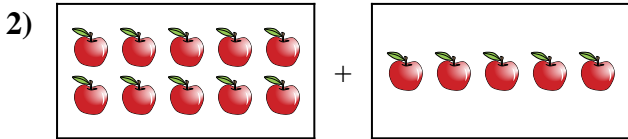
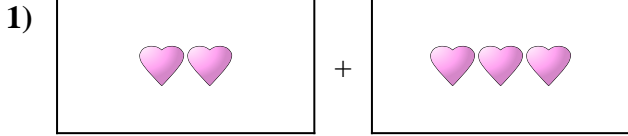




Express the visual problem as an equation with answer.

Answers



1. \_\_\_\_\_

2. \_\_\_\_\_

3. \_\_\_\_\_

4. \_\_\_\_\_

5. \_\_\_\_\_

6. \_\_\_\_\_

7. \_\_\_\_\_

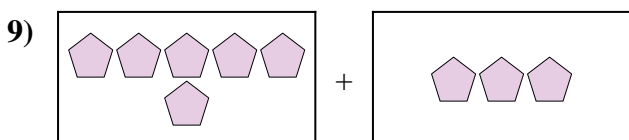
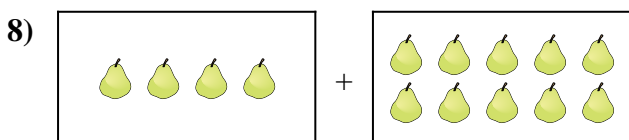
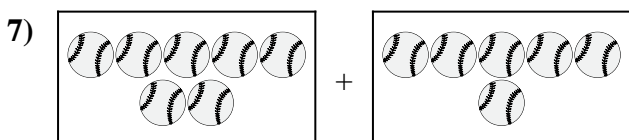

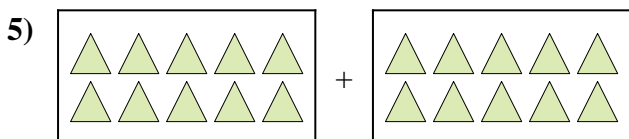
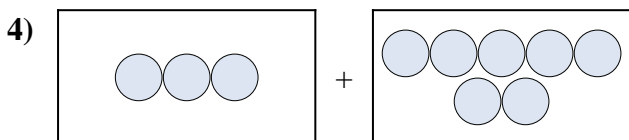

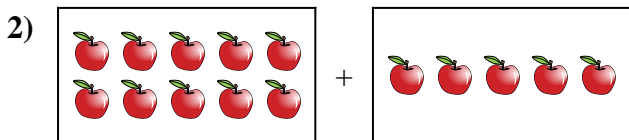
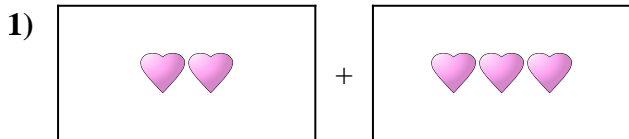
8. \_\_\_\_\_

9. \_\_\_\_\_

10. \_\_\_\_\_



Express the visual problem as an equation with answer.



Answers

1.  $2 + 3 = 5$

2.  $10 + 5 = 15$

3.  $3 + 6 = 9$

4.  $3 + 7 = 10$

5.  $10 + 10 = 20$

6.  $10 + 3 = 13$

7.  $7 + 6 = 13$

8.  $4 + 10 = 14$

9.  $6 + 3 = 9$

10.  $10 + 2 = 12$