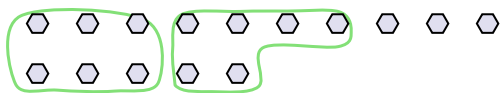




Use the shapes provided to answer the questions.

Answers

Ex) There are 15 shapes below. How many groups of 6 can you make with them? How many will you have left over?



1) There are 26 shapes below. How many groups of 3 can you make with them? How many will you have left over?



Ex. 2 3

1. _____

2. _____

3. _____

4. _____

5. _____

6. _____

7. _____


8. _____

9. _____

2) There are 10 shapes below. How many groups of 3 can you make with them? How many will you have left over?



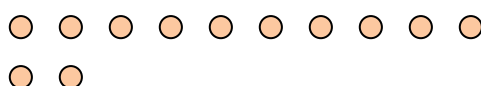
3) There are 30 shapes below. How many groups of 7 can you make with them? How many will you have left over?



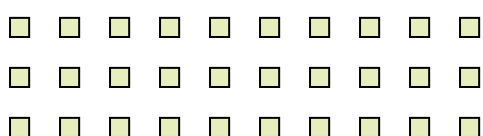
4) There are 10 shapes below. How many groups of 7 can you make with them? How many will you have left over?



5) There are 12 shapes below. How many groups of 8 can you make with them? How many will you have left over?




6) There are 30 shapes below. How many groups of 4 can you make with them? How many will you have left over?



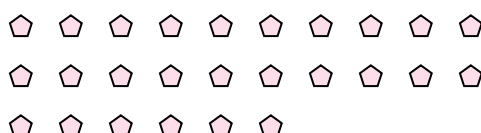
7) There are 11 shapes below. How many groups of 8 can you make with them? How many will you have left over?



8) There are 24 shapes below. How many groups of 7 can you make with them? How many will you have left over?



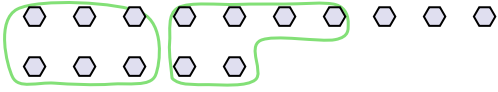
9) There are 26 shapes below. How many groups of 5 can you make with them? How many will you have left over?





Use the shapes provided to answer the questions.

Ex) There are 15 shapes below. How many groups of 6 can you make with them? How many will you have left over?



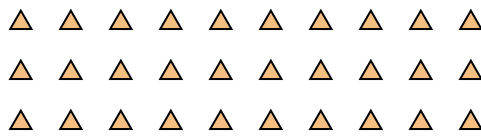
1) There are 26 shapes below. How many groups of 3 can you make with them? How many will you have left over?



2) There are 10 shapes below. How many groups of 3 can you make with them? How many will you have left over?



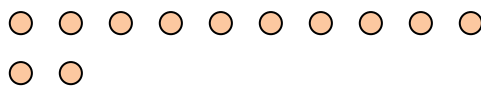
3) There are 30 shapes below. How many groups of 7 can you make with them? How many will you have left over?



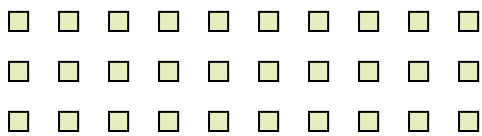
4) There are 10 shapes below. How many groups of 7 can you make with them? How many will you have left over?



5) There are 12 shapes below. How many groups of 8 can you make with them? How many will you have left over?




6) There are 30 shapes below. How many groups of 4 can you make with them? How many will you have left over?



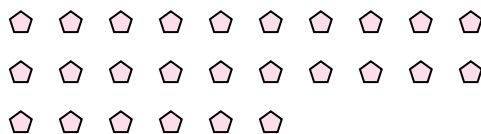
7) There are 11 shapes below. How many groups of 8 can you make with them? How many will you have left over?



8) There are 24 shapes below. How many groups of 7 can you make with them? How many will you have left over?



9) There are 26 shapes below. How many groups of 5 can you make with them? How many will you have left over?



Answers

Ex. 2 3

1. 8 2

2. 3 1

3. 4 2

4. 1 3

5. 1 4

6. 7 2

7. 1 3

8. 3 3

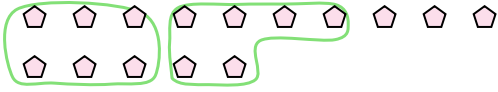
9. 5 1



Use the shapes provided to answer the questions.

Answers

Ex) There are 15 shapes below. How many groups of 6 can you make with them? How many will you have left over?



1) There are 10 shapes below. How many groups of 7 can you make with them? How many will you have left over?

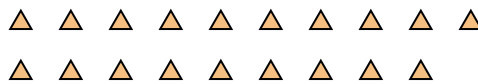


Ex. 2 3

2) There are 10 shapes below. How many groups of 3 can you make with them? How many will you have left over?



3) There are 19 shapes below. How many groups of 6 can you make with them? How many will you have left over?



1. _____

2. _____

3. _____

4. _____

5. _____

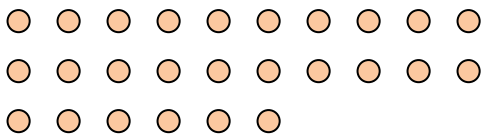
6. _____

7. _____

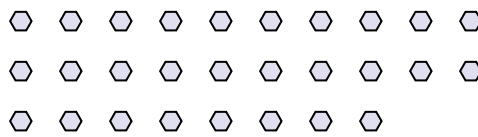
8. _____

9. _____

4) There are 26 shapes below. How many groups of 8 can you make with them? How many will you have left over?




5) There are 28 shapes below. How many groups of 8 can you make with them? How many will you have left over?



6) There are 18 shapes below. How many groups of 4 can you make with them? How many will you have left over?



7) There are 28 shapes below. How many groups of 7 can you make with them? How many will you have left over?



8) There are 22 shapes below. How many groups of 3 can you make with them? How many will you have left over?



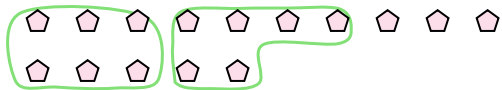
9) There are 20 shapes below. How many groups of 2 can you make with them? How many will you have left over?





Use the shapes provided to answer the questions.

Ex) There are 15 shapes below. How many groups of 6 can you make with them? How many will you have left over?



1) There are 10 shapes below. How many groups of 7 can you make with them? How many will you have left over?



Answers

Ex. 2 3

1. 1 3

2. 3 1

3. 3 1

4. 3 2

5. 3 4

6. 4 2

7. 4 0

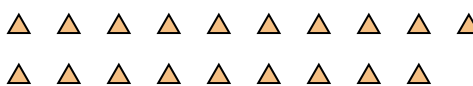
8. 7 1

9. 10 0

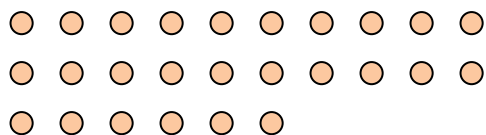
2) There are 10 shapes below. How many groups of 3 can you make with them? How many will you have left over?



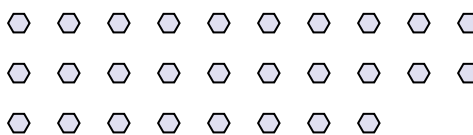
3) There are 19 shapes below. How many groups of 6 can you make with them? How many will you have left over?



4) There are 26 shapes below. How many groups of 8 can you make with them? How many will you have left over?




5) There are 28 shapes below. How many groups of 8 can you make with them? How many will you have left over?



6) There are 18 shapes below. How many groups of 4 can you make with them? How many will you have left over?



7) There are 28 shapes below. How many groups of 7 can you make with them? How many will you have left over?



8) There are 22 shapes below. How many groups of 3 can you make with them? How many will you have left over?



9) There are 20 shapes below. How many groups of 2 can you make with them? How many will you have left over?

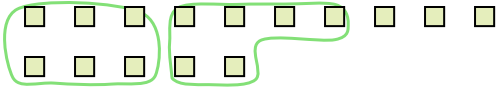





Use the shapes provided to answer the questions.

Answers

Ex) There are 15 shapes below. How many groups of 6 can you make with them? How many will you have left over?




1) There are 18 shapes below. How many groups of 3 can you make with them? How many will you have left over?



Ex. 2 3

2) There are 27 shapes below. How many groups of 4 can you make with them? How many will you have left over?



3) There are 11 shapes below. How many groups of 2 can you make with them? How many will you have left over?



1. _____

2. _____

3. _____

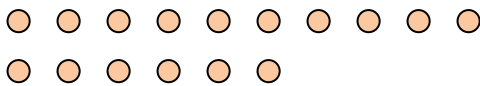
4. _____

5. _____

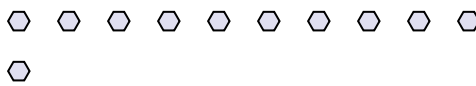
6. _____

7. _____

4) There are 16 shapes below. How many groups of 4 can you make with them? How many will you have left over?



5) There are 11 shapes below. How many groups of 9 can you make with them? How many will you have left over?



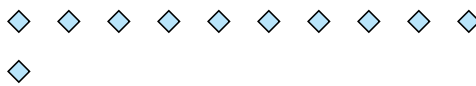
8. _____

9. _____


6) There are 16 shapes below. How many groups of 6 can you make with them? How many will you have left over?



7) There are 11 shapes below. How many groups of 3 can you make with them? How many will you have left over?



8) There are 30 shapes below. How many groups of 6 can you make with them? How many will you have left over?



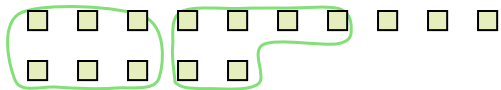
9) There are 20 shapes below. How many groups of 4 can you make with them? How many will you have left over?






Use the shapes provided to answer the questions.

Ex) There are 15 shapes below. How many groups of 6 can you make with them? How many will you have left over?




1) There are 18 shapes below. How many groups of 3 can you make with them? How many will you have left over?



Answers

Ex. 2 3

2) There are 27 shapes below. How many groups of 4 can you make with them? How many will you have left over?



3) There are 11 shapes below. How many groups of 2 can you make with them? How many will you have left over?



1. 6 0

2. 6 3

3. 5 1

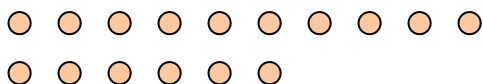
4. 4 0

5. 1 2

6. 2 4

7. 3 2

4) There are 16 shapes below. How many groups of 4 can you make with them? How many will you have left over?



5) There are 11 shapes below. How many groups of 9 can you make with them? How many will you have left over?



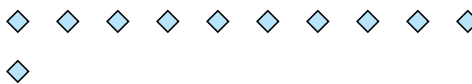
8. 5 0

9. 5 0


6) There are 16 shapes below. How many groups of 6 can you make with them? How many will you have left over?



7) There are 11 shapes below. How many groups of 3 can you make with them? How many will you have left over?



8) There are 30 shapes below. How many groups of 6 can you make with them? How many will you have left over?



9) There are 20 shapes below. How many groups of 4 can you make with them? How many will you have left over?

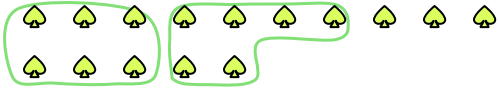





Use the shapes provided to answer the questions.

Answers

Ex) There are 15 shapes below. How many groups of 6 can you make with them? How many will you have left over?

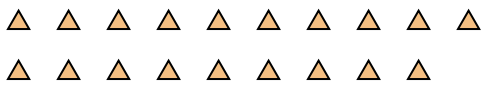


1) There are 26 shapes below. How many groups of 3 can you make with them? How many will you have left over?

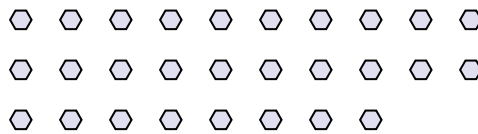


Ex. 2 3

2) There are 19 shapes below. How many groups of 6 can you make with them? How many will you have left over?



3) There are 28 shapes below. How many groups of 8 can you make with them? How many will you have left over?



1. _____

2. _____

3. _____

4. _____

5. _____

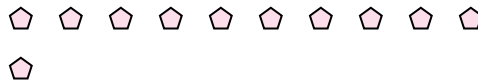
6. _____

7. _____

4) There are 22 shapes below. How many groups of 4 can you make with them? How many will you have left over?



5) There are 11 shapes below. How many groups of 8 can you make with them? How many will you have left over?



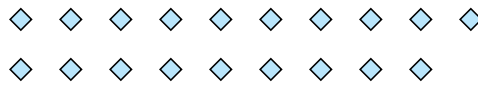
8. _____

9. _____


6) There are 19 shapes below. How many groups of 2 can you make with them? How many will you have left over?



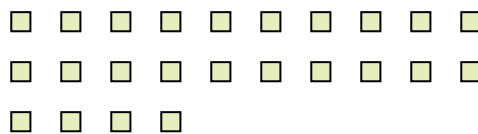
7) There are 19 shapes below. How many groups of 2 can you make with them? How many will you have left over?



8) There are 23 shapes below. How many groups of 9 can you make with them? How many will you have left over?



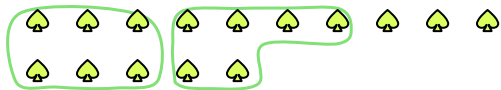
9) There are 24 shapes below. How many groups of 9 can you make with them? How many will you have left over?






Use the shapes provided to answer the questions.


Ex) There are 15 shapes below. How many groups of 6 can you make with them? How many will you have left over?



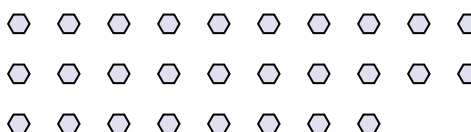
1) There are 26 shapes below. How many groups of 3 can you make with them? How many will you have left over?



2) There are 19 shapes below. How many groups of 6 can you make with them? How many will you have left over?



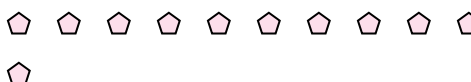
3) There are 28 shapes below. How many groups of 8 can you make with them? How many will you have left over?



4) There are 22 shapes below. How many groups of 4 can you make with them? How many will you have left over?



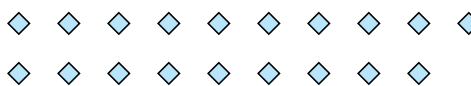
5) There are 11 shapes below. How many groups of 8 can you make with them? How many will you have left over?




6) There are 19 shapes below. How many groups of 2 can you make with them? How many will you have left over?



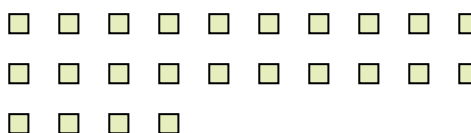
7) There are 19 shapes below. How many groups of 2 can you make with them? How many will you have left over?



8) There are 23 shapes below. How many groups of 9 can you make with them? How many will you have left over?



9) There are 24 shapes below. How many groups of 9 can you make with them? How many will you have left over?



Answers

Ex. 2 3

1. 8 2

2. 3 1

3. 3 4

4. 5 2

5. 1 3

6. 9 1

7. 9 1

8. 2 5

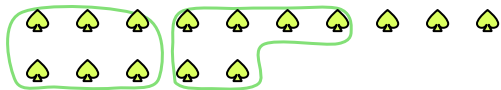
9. 2 6



Use the shapes provided to answer the questions.

Answers

Ex) There are 15 shapes below. How many groups of 6 can you make with them? How many will you have left over?



1) There are 30 shapes below. How many groups of 5 can you make with them? How many will you have left over?



Ex. 2 3

1. _____

2. _____

3. _____

4. _____

5. _____

6. _____

7. _____

8. _____

9. _____

2) There are 15 shapes below. How many groups of 7 can you make with them? How many will you have left over?



3) There are 11 shapes below. How many groups of 6 can you make with them? How many will you have left over?



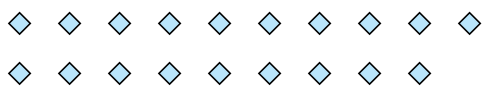
4) There are 16 shapes below. How many groups of 3 can you make with them? How many will you have left over?



5) There are 11 shapes below. How many groups of 2 can you make with them? How many will you have left over?




6) There are 19 shapes below. How many groups of 5 can you make with them? How many will you have left over?



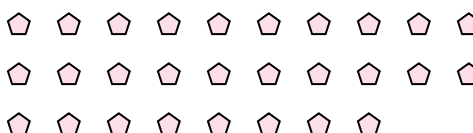
7) There are 13 shapes below. How many groups of 9 can you make with them? How many will you have left over?



8) There are 27 shapes below. How many groups of 9 can you make with them? How many will you have left over?



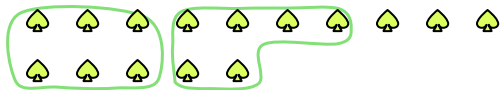
9) There are 28 shapes below. How many groups of 2 can you make with them? How many will you have left over?






Use the shapes provided to answer the questions.

Ex) There are 15 shapes below. How many groups of 6 can you make with them? How many will you have left over?



1) There are 30 shapes below. How many groups of 5 can you make with them? How many will you have left over?



2) There are 15 shapes below. How many groups of 7 can you make with them? How many will you have left over?



3) There are 11 shapes below. How many groups of 6 can you make with them? How many will you have left over?



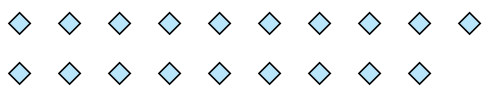
4) There are 16 shapes below. How many groups of 3 can you make with them? How many will you have left over?



5) There are 11 shapes below. How many groups of 2 can you make with them? How many will you have left over?




6) There are 19 shapes below. How many groups of 5 can you make with them? How many will you have left over?



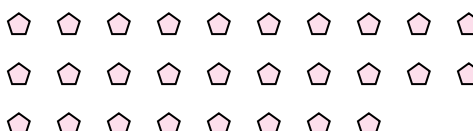
7) There are 13 shapes below. How many groups of 9 can you make with them? How many will you have left over?



8) There are 27 shapes below. How many groups of 9 can you make with them? How many will you have left over?



9) There are 28 shapes below. How many groups of 2 can you make with them? How many will you have left over?



Answers

Ex. 2 3

1. 6 0

2. 2 1

3. 1 5

4. 5 1

5. 5 1

6. 3 4

7. 1 4

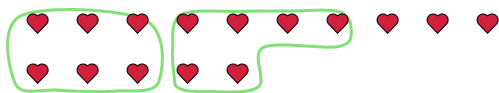
8. 3 0

9. 14 0



Use the shapes provided to answer the questions.

Ex) There are 15 shapes below. How many groups of 6 can you make with them? How many will you have left over?



1) There are 17 shapes below. How many groups of 2 can you make with them? How many will you have left over?



Answers

Ex. 2 3

1. _____

2. _____

3. _____

4. _____

5. _____

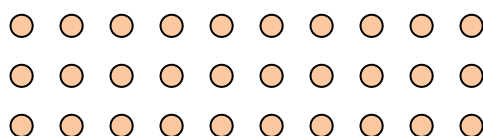
6. _____

7. _____

8. _____

9. _____


2) There are 30 shapes below. How many groups of 9 can you make with them? How many will you have left over?



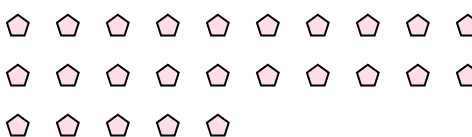
3) There are 13 shapes below. How many groups of 3 can you make with them? How many will you have left over?



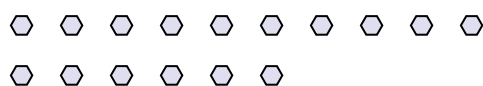
4) There are 10 shapes below. How many groups of 7 can you make with them? How many will you have left over?



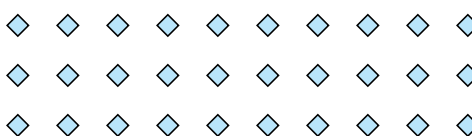
5) There are 25 shapes below. How many groups of 2 can you make with them? How many will you have left over?



6) There are 16 shapes below. How many groups of 8 can you make with them? How many will you have left over?



7) There are 30 shapes below. How many groups of 9 can you make with them? How many will you have left over?



8) There are 15 shapes below. How many groups of 4 can you make with them? How many will you have left over?



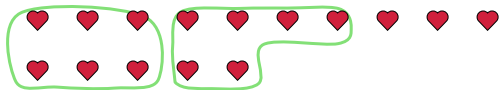
9) There are 26 shapes below. How many groups of 7 can you make with them? How many will you have left over?





Use the shapes provided to answer the questions.

Ex) There are 15 shapes below. How many groups of 6 can you make with them? How many will you have left over?



1) There are 17 shapes below. How many groups of 2 can you make with them? How many will you have left over?



Answers

Ex. 2 3

1. 8 1

2. 3 3

3. 4 1

4. 1 3

5. 12 1

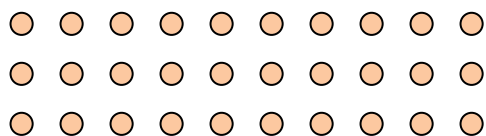
6. 2 0

7. 3 3

8. 3 3

9. 3 5

2) There are 30 shapes below. How many groups of 9 can you make with them? How many will you have left over?



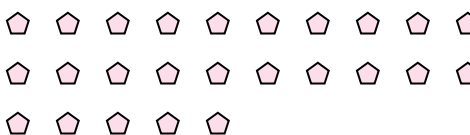
3) There are 13 shapes below. How many groups of 3 can you make with them? How many will you have left over?



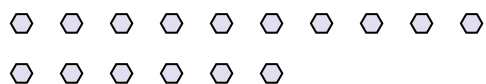
4) There are 10 shapes below. How many groups of 7 can you make with them? How many will you have left over?



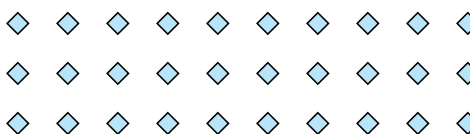
5) There are 25 shapes below. How many groups of 2 can you make with them? How many will you have left over?



6) There are 16 shapes below. How many groups of 8 can you make with them? How many will you have left over?



7) There are 30 shapes below. How many groups of 9 can you make with them? How many will you have left over?



8) There are 15 shapes below. How many groups of 4 can you make with them? How many will you have left over?



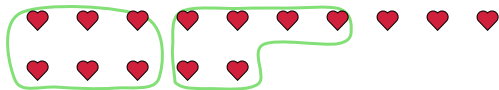
9) There are 26 shapes below. How many groups of 7 can you make with them? How many will you have left over?



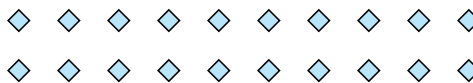


Use the shapes provided to answer the questions.

Ex) There are 15 shapes below. How many groups of 6 can you make with them? How many will you have left over?



1) There are 20 shapes below. How many groups of 8 can you make with them? How many will you have left over?



Answers

Ex. 2 3

1. _____

2. _____

3. _____

4. _____

5. _____

6. _____

7. _____

8. _____

9. _____

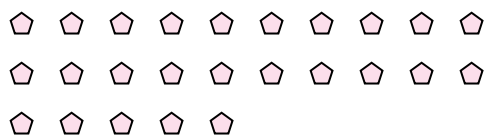
2) There are 10 shapes below. How many groups of 6 can you make with them? How many will you have left over?



3) There are 13 shapes below. How many groups of 5 can you make with them? How many will you have left over?



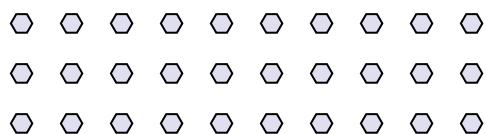
4) There are 25 shapes below. How many groups of 5 can you make with them? How many will you have left over?



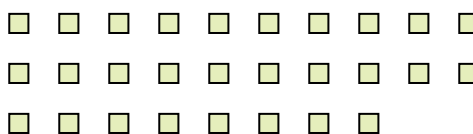
5) There are 13 shapes below. How many groups of 3 can you make with them? How many will you have left over?




6) There are 30 shapes below. How many groups of 4 can you make with them? How many will you have left over?



7) There are 28 shapes below. How many groups of 2 can you make with them? How many will you have left over?



8) There are 26 shapes below. How many groups of 6 can you make with them? How many will you have left over?



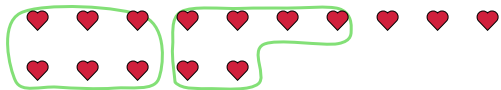
9) There are 20 shapes below. How many groups of 7 can you make with them? How many will you have left over?



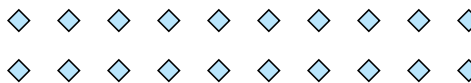


Use the shapes provided to answer the questions.

Ex) There are 15 shapes below. How many groups of 6 can you make with them? How many will you have left over?



1) There are 20 shapes below. How many groups of 8 can you make with them? How many will you have left over?



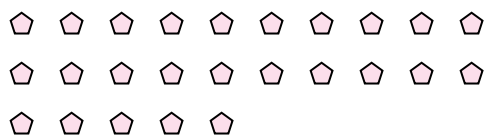
2) There are 10 shapes below. How many groups of 6 can you make with them? How many will you have left over?



3) There are 13 shapes below. How many groups of 5 can you make with them? How many will you have left over?



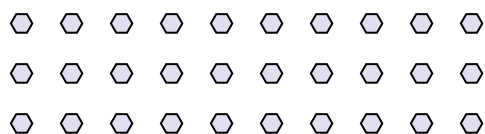
4) There are 25 shapes below. How many groups of 5 can you make with them? How many will you have left over?



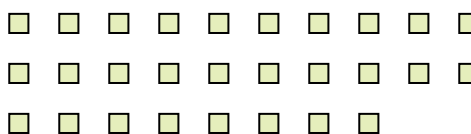
5) There are 13 shapes below. How many groups of 3 can you make with them? How many will you have left over?




6) There are 30 shapes below. How many groups of 4 can you make with them? How many will you have left over?



7) There are 28 shapes below. How many groups of 2 can you make with them? How many will you have left over?



8) There are 26 shapes below. How many groups of 6 can you make with them? How many will you have left over?



9) There are 20 shapes below. How many groups of 7 can you make with them? How many will you have left over?



Answers

Ex. 2 3

1. 2 4

2. 1 4

3. 2 3

4. 5 0

5. 4 1

6. 7 2

7. 14 0

8. 4 2

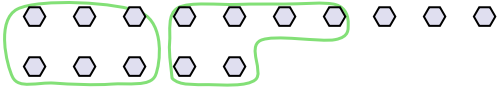
9. 2 6



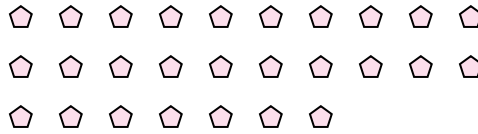
Use the shapes provided to answer the questions.

Answers

Ex) There are 15 shapes below. How many groups of 6 can you make with them? How many will you have left over?

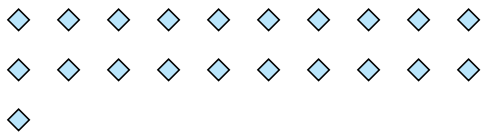


1) There are 27 shapes below. How many groups of 5 can you make with them? How many will you have left over?




Ex. 2 3

2) There are 21 shapes below. How many groups of 4 can you make with them? How many will you have left over?



3) There are 21 shapes below. How many groups of 2 can you make with them? How many will you have left over?



1. _____

2. _____

3. _____


4. _____

5. _____

6. _____

7. _____

4) There are 27 shapes below. How many groups of 4 can you make with them? How many will you have left over?



5) There are 12 shapes below. How many groups of 9 can you make with them? How many will you have left over?



8. _____

9. _____

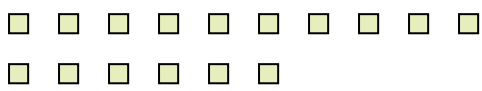
6) There are 17 shapes below. How many groups of 9 can you make with them? How many will you have left over?




7) There are 15 shapes below. How many groups of 6 can you make with them? How many will you have left over?



8) There are 16 shapes below. How many groups of 2 can you make with them? How many will you have left over?



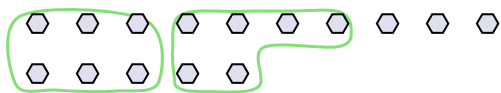
9) There are 26 shapes below. How many groups of 9 can you make with them? How many will you have left over?



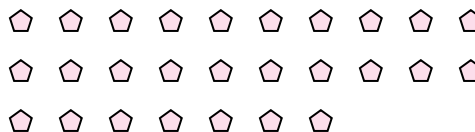


Use the shapes provided to answer the questions.

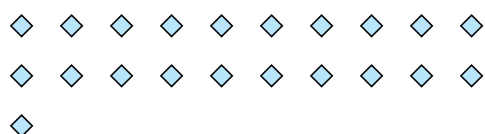
Ex) There are 15 shapes below. How many groups of 6 can you make with them? How many will you have left over?



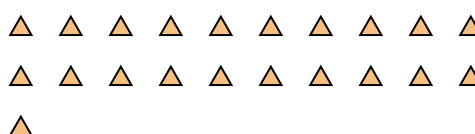
1) There are 27 shapes below. How many groups of 5 can you make with them? How many will you have left over?




2) There are 21 shapes below. How many groups of 4 can you make with them? How many will you have left over?



3) There are 21 shapes below. How many groups of 2 can you make with them? How many will you have left over?



4) There are 27 shapes below. How many groups of 4 can you make with them? How many will you have left over?



5) There are 12 shapes below. How many groups of 9 can you make with them? How many will you have left over?



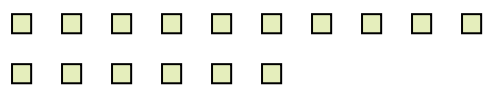
6) There are 17 shapes below. How many groups of 9 can you make with them? How many will you have left over?



7) There are 15 shapes below. How many groups of 6 can you make with them? How many will you have left over?



8) There are 16 shapes below. How many groups of 2 can you make with them? How many will you have left over?



9) There are 26 shapes below. How many groups of 9 can you make with them? How many will you have left over?



Answers

Ex. 2 3

1. 5 2

2. 5 1

3. 10 1

4. 6 3

5. 1 3

6. 1 8

7. 2 3

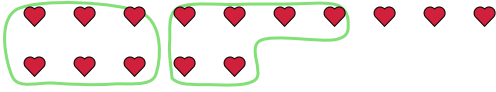
8. 8 0

9. 2 8

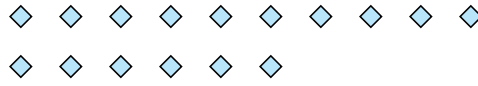


Use the shapes provided to answer the questions.

Ex) There are 15 shapes below. How many groups of 6 can you make with them? How many will you have left over?



1) There are 16 shapes below. How many groups of 7 can you make with them? How many will you have left over?



Answers

Ex. 2 3

1. _____

2. _____

3. _____

4. _____

5. _____

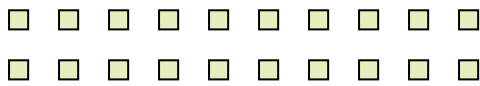
6. _____

7. _____

8. _____

9. _____

2) There are 20 shapes below. How many groups of 6 can you make with them? How many will you have left over?



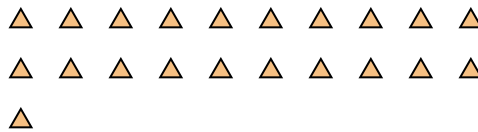
3) There are 21 shapes below. How many groups of 4 can you make with them? How many will you have left over?



4) There are 11 shapes below. How many groups of 9 can you make with them? How many will you have left over?



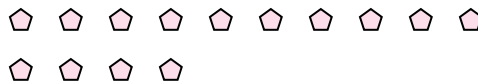
5) There are 21 shapes below. How many groups of 6 can you make with them? How many will you have left over?



6) There are 12 shapes below. How many groups of 3 can you make with them? How many will you have left over?



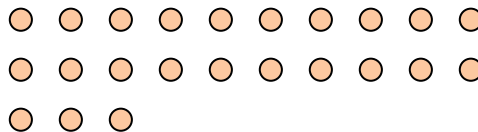
7) There are 14 shapes below. How many groups of 5 can you make with them? How many will you have left over?



8) There are 12 shapes below. How many groups of 7 can you make with them? How many will you have left over?



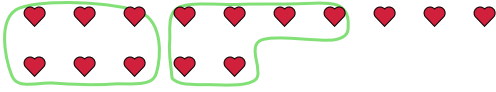
9) There are 23 shapes below. How many groups of 5 can you make with them? How many will you have left over?



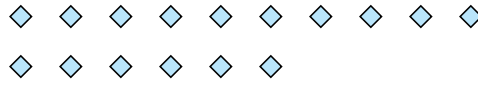


Use the shapes provided to answer the questions.

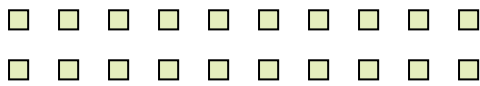
Ex) There are 15 shapes below. How many groups of 6 can you make with them? How many will you have left over?



1) There are 16 shapes below. How many groups of 7 can you make with them? How many will you have left over?



2) There are 20 shapes below. How many groups of 6 can you make with them? How many will you have left over?



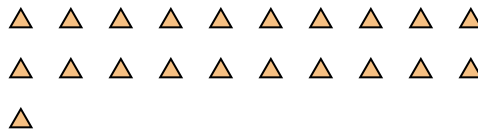
3) There are 21 shapes below. How many groups of 4 can you make with them? How many will you have left over?



4) There are 11 shapes below. How many groups of 9 can you make with them? How many will you have left over?



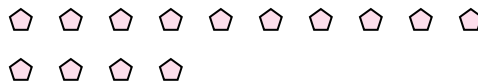
5) There are 21 shapes below. How many groups of 6 can you make with them? How many will you have left over?



6) There are 12 shapes below. How many groups of 3 can you make with them? How many will you have left over?



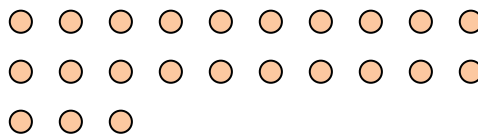
7) There are 14 shapes below. How many groups of 5 can you make with them? How many will you have left over?



8) There are 12 shapes below. How many groups of 7 can you make with them? How many will you have left over?



9) There are 23 shapes below. How many groups of 5 can you make with them? How many will you have left over?



Answers

Ex. 2 3

1. 2 2

2. 3 2

3. 5 1

4. 1 2

5. 3 3

6. 4 0

7. 2 4

8. 1 5

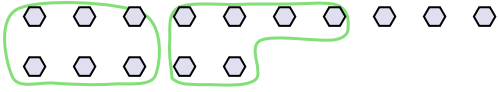
9. 4 3



Use the shapes provided to answer the questions.

Answers

Ex) There are 15 shapes below. How many groups of 6 can you make with them? How many will you have left over?

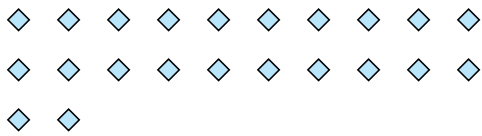


1) There are 14 shapes below. How many groups of 6 can you make with them? How many will you have left over?




Ex. 2 3

2) There are 22 shapes below. How many groups of 7 can you make with them? How many will you have left over?



3) There are 16 shapes below. How many groups of 4 can you make with them? How many will you have left over?



1. _____

2. _____

3. _____

4. _____

5. _____

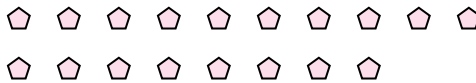
6. _____

7. _____

4) There are 18 shapes below. How many groups of 8 can you make with them? How many will you have left over?




5) There are 18 shapes below. How many groups of 4 can you make with them? How many will you have left over?



8. _____

9. _____


6) There are 13 shapes below. How many groups of 6 can you make with them? How many will you have left over?



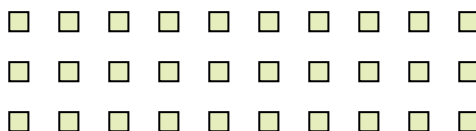
7) There are 17 shapes below. How many groups of 5 can you make with them? How many will you have left over?



8) There are 29 shapes below. How many groups of 9 can you make with them? How many will you have left over?



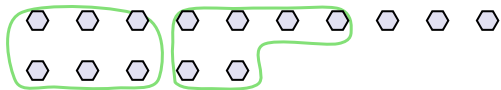
9) There are 30 shapes below. How many groups of 8 can you make with them? How many will you have left over?





Use the shapes provided to answer the questions.

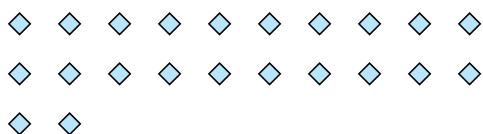
Ex) There are 15 shapes below. How many groups of 6 can you make with them? How many will you have left over?



1) There are 14 shapes below. How many groups of 6 can you make with them? How many will you have left over?



2) There are 22 shapes below. How many groups of 7 can you make with them? How many will you have left over?



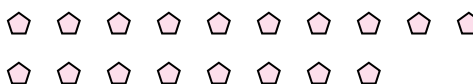
3) There are 16 shapes below. How many groups of 4 can you make with them? How many will you have left over?




4) There are 18 shapes below. How many groups of 8 can you make with them? How many will you have left over?



5) There are 18 shapes below. How many groups of 4 can you make with them? How many will you have left over?




6) There are 13 shapes below. How many groups of 6 can you make with them? How many will you have left over?



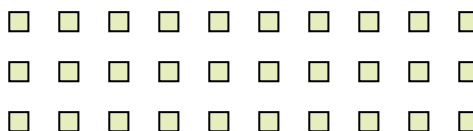
7) There are 17 shapes below. How many groups of 5 can you make with them? How many will you have left over?



8) There are 29 shapes below. How many groups of 9 can you make with them? How many will you have left over?



9) There are 30 shapes below. How many groups of 8 can you make with them? How many will you have left over?



Answers

Ex. 2 3

1. 2 2

2. 3 1

3. 4 0

4. 2 2

5. 4 2

6. 2 1

7. 3 2

8. 3 2

9. 3 6